

- Question No. 1

Arrange the following words in a logical and meaningful order.

1. Income
2. Status
3. Education
4. Well-being
5. Job

Options :

1. 1, 2, 4, 5, 3
2. 2, 1, 5, 4, 3
3. 3, 5, 1, 2, 4
4. 4, 2, 5, 3, 1
- 5.

Answer : 3, 5, 1, 2, 4

- Question No. 2

Three of the following four letter-clusters are alike in a certain way and one is different. Pick the odd one out .

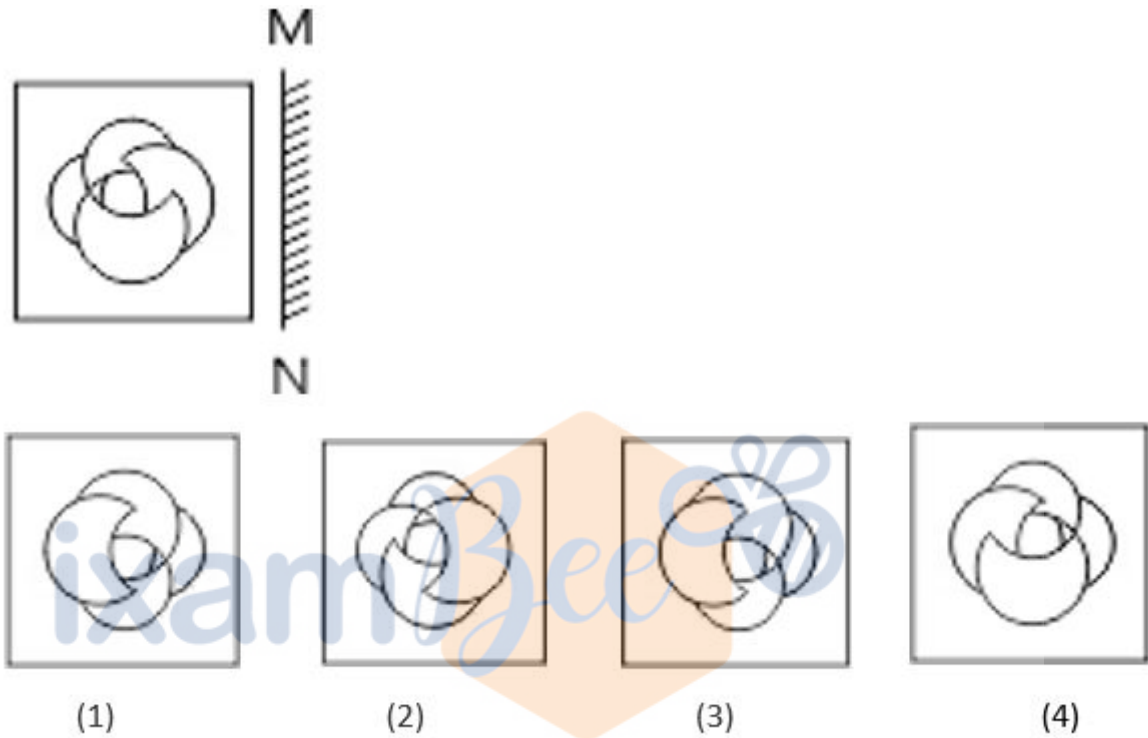
Options :

1. HSEV
2. DWJQ
3. LOCX
4. BTKR
- 5.

Answer : BTKR

• Question No. 3

A mirror is placed on the line MN, and then which of the Answer Figures is the right image of the given Question Figure?



Options :

- 1. 1
- 2. 2
- 3. 3
- 4. 4
- 5.

Answer : 4

Direction:

Select the option that is related to the third letter-cluster in the same way as the second letter-cluster is related to the first letter-cluster.

STRAIT : OXODGV :: FARMER : _____

- Question No. 4

Options :

1. BCTEOP
2. OPBECT
3. OPCTBE
4. BEOPT
- 5.

Answer : BEOPT

- Question No. 5

Which two signs should be interchanged in the following equation to make it correct?

$$16 \div 4 + 18 - 56 \times 8 = 75$$

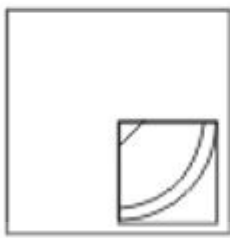
Options :

1. \times and \div
2. $+$ and \times
3. $-$ and \div
4. $-$ and \times
- 5.

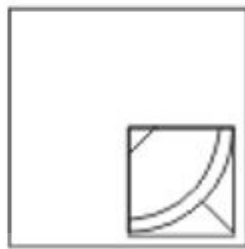
Answer : \times and \div

Direction:

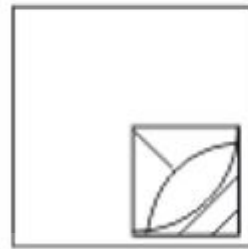
Which Answer Figure will complete the pattern in the figure?



(1)



(2)



(3)



(4)

• Question No. 6

Options :

1.1

2.2

3.3

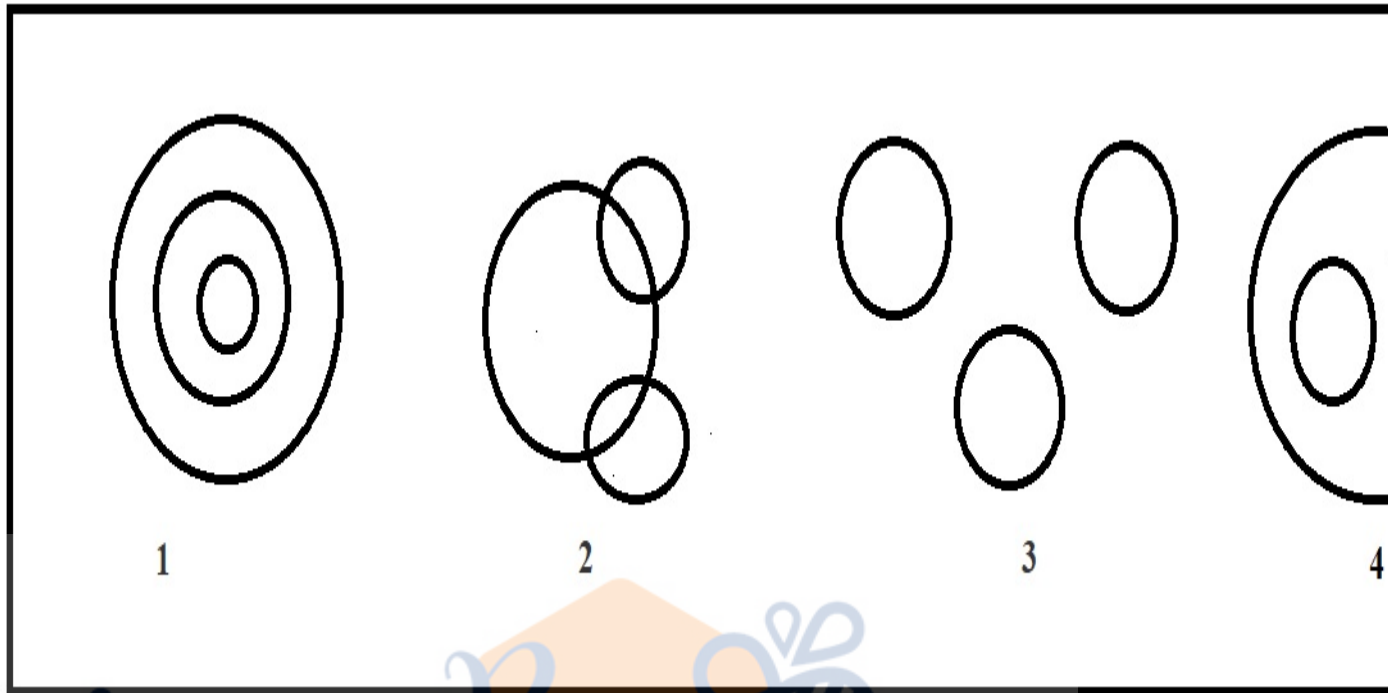
4.4

5.

Answer : 2

• Question No. 7

Which of the following diagrams indicates the best relation between Copper, Aluminium and Metal ?



Options :

- 1. 1
- 2. 2
- 3. 3
- 4. 4
- 5.

Answer : 4

• Question No. 8

Select the option that is related to the third number in the same way as the second number is related to the first number.

73 : 58 :: 68 : _____

Options :

- 1. 107
- 2. 103

3. 110

4. 100

5.

Answer : 100

• Question No. 9

Select the word-pair in which the two words are related in the same way as are the two words in the following word-pair.

Sheep : Flock

Options :

1. Flowers : Troupe

2. Players : Gang

3. Pupils : Band

4. Singer : Chorus

5.

Answer : Singer : Chorus

Direction:

In a code language, PERMIT is written as IBKFFM. How will PHRASE be written as in that language?

• Question No. 10

Options :

1. IAKXLB

2. IXLAKB

3. XLBIAK

4. XLIABK

5.

Answer : IAKXLB

Direction:

In a family of 5 members, A is the sister of U. F has two children and he is the son of R, who is the father-in-law of W. W has only one son. U is not the grand-daughter of R. How is A related to R?

- Question No. 11

Options :

1. Granddaughter
2. Grandson
3. Daughter
4. Sister
- 5.

Answer : Granddaughter

- Question No. 12

Three of the following four words are alike in a certain way and one is different. Pick the odd word out.

Options :

1. Ring
2. Necklace
3. Shoes
4. Bangles
- 5.

Answer : Shoes

- Question No. 13

Which number will replace the question mark (?) in the following series?

7, 11, 20, 45, 94, 215, ?

Options :

1. 382
2. 371
3. 328
4. 384
- 5.

Answer : 384

Direction:

Three statements are given, followed by three conclusions numbered I, II and III. Assuming the statements to be true, even if they seem to be at variance with commonly known facts, decide which of the conclusions logically follow(s) from the statements.

- Question No. 14

Statements:

Some carpets are mats.

Some mats are chairs.

All chairs are tables.

Conclusions:

I. Some chairs are mats.

II. Some tables are carpets.


III. Some tables are mats.

Options :

1. Only conclusion I follows.
2. Only conclusions II and III follow
3. Only conclusions I and II follow.
4. Only conclusions I and III follow.
- 5.

Answer : Only conclusions I and III follow.

- Question No. 15


'Adenology' is related to 'Glands' in the same way as 'Craniology' is related to '_____'.


Options :

1. Skull
2. Comets
3. Living cells
4. Shells
- 5.

Answer : Skull

- Question No. 16

Umang has ₹700 in the denominations of ₹5 notes, ₹10 notes and ₹20 notes. The number of notes of each denomination is equal. What is the total number of notes that Umang has?


Options :

1. 60
2. 40
3. 80
4. 20
- 5.

Answer : 60

- Question No. 17

Select the set in which the numbers are related in the same way as are the numbers of the following set.

(7, 16, 35)

Options :

1. (17, 23, 49)
2. (5, 12, 27)
3. (13, 17, 27)
4. (14, 12, 27)
- 5.

Answer : (5, 12, 27)

• Question No. 18

Select the combination of letters that when sequentially placed in the gaps of the given letter series will complete the series.

pq_qp_qpqs_prq_qsqp_q

Options :

1. srpqr
2. srqpr
3. rspqr
4. prqrs
- 5.

Answer : srqpr

• Question No. 19

Three of the following four numbers are alike in a certain way and one is different. Pick the number that is different from the rest.

Options :

1. 5208
2. 3208
3. 7144

4. 8246

5.

Answer : 3208

Direction:

In the following question, select the related letter/number/word from the given alternatives.

- Question No. 20

20 : 50 :: 180 : ?

Options :

1. 460

2. 420

3. 400

4. 450

5.

Answer : 450

- Question No. 21

170 : 197 :: 325 : ?

Options :

1. 362

2. 300

3. 315

4. 341

5.

Answer : 362

- Question No. 22

If CREATE is coded as 6362514025 and PLAYER is coded as 32241502536, then how will **COMMANDO** be coded as?

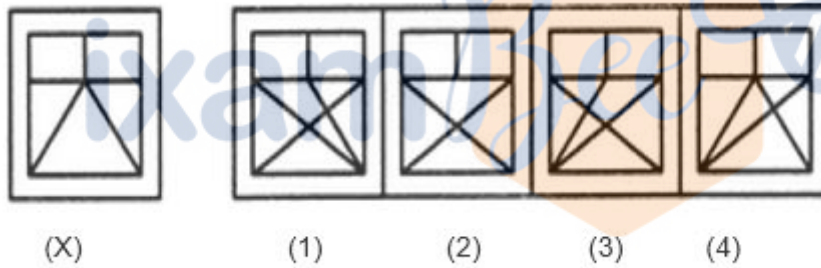
Options :

1. 612882256225262
2. 128822622526265
3. 622526261288225
4. 622128822552626
- 5.

Answer : 622526261288225

Direction:

Find out the alternative figure which contains figure (X) as its part.



- Question No. 23

Options :

1. 1
2. 2
3. 3
4. 4
- 5.

Answer : 4

- Question No. 24

Three different positions X, Y and Z of a dice are shown in the figures given below. Which number lies at the bottom face in position Y?



Options :

1. 1
2. 2
3. 5
4. Cannot be determined
- 5.

Answer : 2

- Question No. 25

A series is given with one term missing. Select the correct alternative from the given ones that will complete the series

GW, JT, MQ, ?

Options :

1. NP
2. LN
3. OM
4. PN
- 5.

Answer : PN

- Question No. 26

What is atomic number of copper?

Options :

1. 29
2. 30
3. 6
4. 11
- 5.

Answer : 29

- Question No. 27

In which year Indian reform association founded?

Options :

1. 1880
2. 1840
3. 1875
4. 1870
- 5.

Answer : 1870

- Question No. 28

How many districts are there in Ladakh union territory?

Options :

1. 3
2. 5
3. 4

4. 2

5.

Answer : 2

- Question No. 29

Who was the founder of Pala dynasty?

Options :

1. Gopala
2. Devapala
3. Dharampala
4. Rajyapala
- 5.

Answer : Gopala

- Question No. 30

When did Ibrahim Lodhi become the sultan of Delhi?

Options :

1. 1520
2. 1516
3. 1512
4. 1517
- 5.

Answer : 1517

- Question No. 31

Which is the largest river island in the world?

Options :

1. Palawan
2. Seychelles
3. Majuli
4. Whitsunday
- 5.

Answer : Majuli

• Question No. 32

Animals of which phylum have jointed legs?

Options :

1. Echinodermata
2. Mollusca
3. Arthropoda
4. Nematoda
- 5.

Answer : Arthropoda

• Question No. 33

What is the value of Earth's gravitational constant?

Options :

1. 6.67×10^{-11}
2. 4.32×10^{-9}
3. 6.65×1^{-11}
4. None of these
- 5.

Answer : 6.67×10^{-11}

- Question No. 34

Which state is mentioned in the 6th schedule of the Indian Constitution?

Options :

1. Assam, Meghalaya, Tripura and Mizoram
2. Tripura, Shillong, Bihar
3. Meghalaya, Tripura and Mizoram and Bihar
4. None of these
- 5.

Answer : Assam, Meghalaya, Tripura and Mizoram

- Question No. 35

The world's longest 'Hirakud Dam' is situated on which river among the following?

Options :

1. Ganga
2. Mahanadi
3. Kaveri
4. Narmada
- 5.

Answer : Mahanadi

- Question No. 36

In 2019, Nobel peace prize winner Abiy Ahmed Ali belongs to which country?

Options :

1. Germany
2. Belgium
3. Norway

4. Ethiopia

5.

Answer : Ethiopia

- Question No. 37

UNICEF was established in the year?

Options :

1. 1953

2. 1940

3. 1951

4. 1946

5.

Answer : 1946

- Question No. 38

Which date is observed as ozone day?

Options :

1. 16th August

2. 16th September

3. 16th March

4. 16th June

5.

Answer : 16th September

- Question No. 39

An Indian crickets man Sachin Tendulkar hit his first century in which ODI?

Options :

1. 1980
2. 1991
3. 1994
4. 1992
- 5.

Answer : 1994

• Question No. 40

A test named EEG is used to measure the functioning of which organ in the body?

Options :

1. Brain
2. Liver
3. Eyes
4. Heart
- 5.

Answer : Brain

• Question No. 41

World's largest field hockey stadium based on the seating capacity is located in which country?

Options :

1. India
2. Pakistan
3. Australia
4. Netherlands
- 5.

Answer : Pakistan

- Question No. 42

Who will be the Republic Day chief guest in 2019?

Options :

1. Cyril Ramaphosa
2. Donald Trump
3. Aung San Suu Kyi
4. Moon Jae-in
- 5.

Answer : Cyril Ramaphosa

- Question No. 43

Who has won DSC Prize for South Asian Literature 2019?

Options :

1. Chetan Bhagat
2. Amitabha Bagchi
3. Arundhati Roy
4. Ruskin Bond
- 5.

Answer : Amitabha Bagchi

- Question No. 44

Who wrote "Era of Darkenss" book?

Options :

1. Chetan Bhagat
2. Arundhati Roy
3. Shashi Tharoor

4. Vikram Seth

5.

Answer : Shashi Tharoor

- Question No. 45

Which country launched the third 'Long March-5', the largest carrier rocket of the country, in December 2019?

Options :

1. Bhutan

2. Japan

3. USA

4. China

5.

Answer : China

- Question No. 46

The Rohtang Tunnel in the Himachal Pradesh is renamed as?

Options :

1. Channel tunnel

2. Atal tunnel

3. Punarjani tunnel

4. New Katraj tunnel

5.

Answer : Atal tunnel

- Question No. 47

Panchsheel agreement was signed between which of the two countries?

Options :

1. Japan and India
2. China and India
3. India and Sri Lanka
4. Pakistan and Japan
- 5.

Answer : China and India

• Question No. 48

Who is the current CEO of Yes Bank?

Options :

1. Ravneet Singh Gill
2. Prashant Kumar
3. Rana Kapoor
4. None of these
- 5.

Answer : Ravneet Singh Gill

• Question No. 49

Who became Miss World 2019?

Options :

1. Toni – Ann Singh
2. Zozibini tunzi
3. Suman Rao
4. Vanessa Ponce
- 5.

Answer : Toni – Ann Singh

- Question No. 50

What is the weight of chandrayaan 2?

Options :

1. 3100kg
2. 5209kg
3. 3850kg
4. 1380 kg
- 5.

Answer : 3850kg

- Question No. 51

If the length of diagonal and one side of a rectangle are 15cm and 12cm, then find the area.

Options :

1. 96 cm²
2. 120 cm²
3. 112 cm²
4. 108 cm²
- 5.

Answer : 108 cm²

- Question No. 52

If an item is sold at Rs. 315, then there is a loss of 10%. find the C.P.

Options :

1. Rs 325
2. Rs 350
3. Rs 375

4. Rs 365

5.

Answer : Rs 350

- Question No. 54

Rs 6360 is divided into A, B and C. if the ratio of A to B is 5:7 and the B:C is 8:9, then find the share of B.

Options :

1. Rs 2060

2. Rs 2410

3. Rs 2240

4. Rs 2320

5.

Answer : Rs 2240

- Question No. 54

If $x - 2y = 3$ and $xy = 5$, then find: $x^2 - 4y^2$.

Options :

1. 19

2. 17

3. 23

4. 21

5.

Answer : 21

- Question No. 55

If the ratio of ages of A and B is 3 : 2 and their age difference is 24 years. Then find the age of A after 3 years.

Options :

1. 75 years
2. 71 years
3. 76 years
4. 72 years
- 5.

Answer : 75 years

- Question No. 56

Which one is divisible by 11?

Options :

1. 950676
2. 581856
3. 581371
4. 688493
- 5.

Answer : 581856

- Question No. 57

If a car travels at a speed of 20 km/hr on a trip and at the speed of 30 km/hr on return trip. then find the average speed for the entire trip.

Options :

1. 30 km/hr
2. 22 km/hr
3. 28 km/hr
4. 24 km/hr
- 5.

Answer : 24 km/hr

• Question No. 58

A box contains the coins of 5p, 10p and 25p are in the ratio 3:3:5. If there is Rs. 34 in all, how many 10p coins are there?

Options :

1. 60
2. 765
3. 700
4. 250
- 5.

Answer : 60

• Question No. 59

In an office of 50 people, the average salary of Marketing, IT and Production officer is Rs. 8000, Rs.9000 and Rs. 12000 in a day respectively and ratio of their number is 4:3:3 respectively. What is the monthly average salary of an officer?

Options :

1. Rs. 250000
2. Rs. 285000
3. Rs. 210000
4. Rs. 286500
- 5.

Answer : Rs. 285000

• Question No. 60

A man and a boy received Rs 700 as wages for 7 days for the work they did together. The man's efficiency is thrice of the boy. What are the daily wages of the boy?

Options :

1. Rs $53\frac{1}{3}$
2. Rs $37\frac{1}{2}$
3. Rs 45
4. Rs 25
- 5.

Answer : Rs 25

- Question No. 61

A shopkeeper purchased a book for Rs. 1700 and a modem for Rs. 1200. He sold the book at a profit of 9% and the modem at a loss of 5%. The overall loss or gain is

Options :

1. Rs. 80
2. Rs. 102
3. Rs. 106
4. Rs. 93
- 5.

Answer : Rs. 93

- Question No. 62

Pipes A can fill a tank in 20 hrs & B can empty a tank in 15 hours. If both the pipes are opened simultaneously, how much time both will take to empty the tank (in hrs)?

Options :

1. 45 hrs
2. 60 hrs

- 3. 80 hrs
- 4. 20 hrs
- 5.

Answer : 60 hrs

• Question No. 63

The largest sphere is curved out of a cube of side 35 cm . The volume of the sphere (in cm³) will be?

Options :

- 1. 22458.33 cm³
- 2. 23437.23 cm³
- 3. 20851.11 cm³
- 4. 24092.77 cm³
- 5.

Answer : 22458.33 cm³

• Question No. 64

The average speed of a bus is $\frac{3}{4}$ the speed of a train. The train covers 2400 km in 6 hours. How much distance will the bus cover in 30 minutes?

Options :

- 1. 150 km
- 2. 130 km
- 3. 196 km
- 4. 100 km
- 5.

Answer : 150 km

• Question No. 65

Find the average of first five multiples of 7?

Options :

1. 14
2. 28
3. 21
4. 24
- 5.

Answer : 21

Direction:

If I is the incentre of $\triangle ABC$, if $\angle BIC = 110^\circ$, then what is the measure of $\angle BAC$?

- Question No. 66

Options :

1. 40°
2. 30°
3. 20°
4. 50°
- 5.

Answer : 40°

- Question No. 67

$\sin^2 11^\circ + \sin^2 13^\circ + \sin^2 15^\circ + \sin^2 16^\circ + \dots + \sin^2 79^\circ = ?$

Options :

1. 23.5
2. 17.5
3. 30.5
4. 24.4
- 5.

Answer : 17.5

- Question No. 68

A man can row 21 km/hr in still water. It takes him twice as long to row up as to row down the river. Find the speed of the man with the current.

Options :

1. 16 km/hr
2. 20 km/hr
3. 24 km/hr
4. 28 km/hr
- 5.

Answer : 28 km/hr

- Question No. 69

The diagonal of a cube is $24\sqrt{3}$ cm. Find the ratio of its total surface area and volume?

Options :

1. 5:2
2. 2:7
3. 3:7
4. 1:4
- 5.

Answer : 1:4

- Question No. 70

In a ward member election, a candidate secured 84% of the votes and is elected by a majority of 1020 votes. The total number of votes polled is?

Options :

1. 1600

2. 1800
3. 1500
4. 1200
- 5.

Answer : 1500

• Question No. 71

A can complete $\frac{1}{5}$ of a work in 8 days and B can complete $\frac{3}{7}$ of work in 15 days. In how many days both A and B together can complete the work?

Options :

1. $16\frac{2}{3}$ days
2. $6\frac{2}{3}$ days
3. $18\frac{2}{3}$ days
4. $8\frac{4}{7}$ days
- 5.

Answer : $18\frac{2}{3}$ days

• Question No. 72

A certain sum at simple interest amounts to Rs 16400 in 5 yr and to Rs 22000 in 7 yr. Then the sum is ?

Options :

1. Rs. 3250
2. Rs. 2400
3. Rs. 1256
4. Rs. 1820
- 5.

Answer : Rs. 2400

• Question No. 73

The income of A is 140% of the income of B and the income of C is 125% of the income of A. If the total income of A, B and C together is Rs. 8300, what is C's income?

Options :

1. Rs 3900
2. Rs 3500
3. Rs 26100
4. Rs 1980
- 5.

Answer : Rs 3500

• Question No. 74

A boy covers a certain distance by car, driving at the speed of 90 kmph and returns back to the starting point, riding on a bicycle at the speed of 60 kmph. What is his average speed for the whole journey?

Options :

1. 57.6 km/hr
2. 72 km/hr
3. 61.6 km/hr
4. 77.5 km/hr
- 5.

Answer : 72 km/hr

• Question No. 75

In a division sum, the divisor is 11 times the quotient and also 3 times of the remainder. If the remainder is 77, then the dividend is:

Options :

1. 4600

2. 4811
3. 4928
4. 4751
- 5.

Answer : 4928

Direction:

Select the most appropriate option to substitute the underlined segment in the given sentence. If there is no need to substitute it, select 'No improvement'.

- Question No. 76

It started raining as soon as we got out the car.

Options :

1. as long as
2. No improvement
3. would just as soon
4. as high to
- 5.

Answer : No improvement

Direction:

In the sentence identify the segment which contains the grammatical error.

- Question No. 77

He left his office with a bag, which contains papers and photographs for articles in the next issue of the newspaper.

Options :

1. He left his office with a bag, which
2. of the newspaper
3. contains papers and photographs

4. for articles in the next issue

5.

Answer : contains papers and photographs

Direction:

Given below are four jumbled sentences. Out of the given options select the one that gives their correct order.

• Question No. 78

- A. Coronavirus came like a storm and made us realize many pieces of stuff we were unaware of.
- B. This will pass but the point is once we pass this hurdle who are we left with to live our life or to make memories.
- C. People started falling sick and everyone in the world was chanting only one phrase "This shall too pass".
- D. It seems strange how this year turned out to be a complete disaster.

Options :

- 1. CABD
- 2. DACB
- 3. BDAC
- 4. BCDA
- 5.

Answer : DACB

Direction:

Comprehension:

Kemty falls Mussoorie, is a geological complex _____1_____ lies about 10 kilometres from Mussoorie, Uttarakhand towards Yamuna river. The fusion _____2_____ various geological, ecological, climatic and geographical factors has _____3_____ in the portrayal of this geologic marvel. It is a must-visit for the tourists _____4_____ Mussoorie. The name Kemty was actually _____5_____ from an assemblage of two words 'Camp and Tea'.

• Question No. 79

Select the most appropriate option to fill in blank No.1

Options :

1. this
2. these
3. than
4. which
- 5.

Answer : which

Direction:

Comprehension:

Kemty falls Mussoorie, is a geological complex _____ 1 _____ lies about 10 kilometres from Mussoorie, Uttarakhand towards Yamuna river. The fusion _____ 2 _____ various geological, ecological, climatic and geographical factors has _____ 3 _____ in the portrayal of this geologic marvel. It is a must-visit for the tourists _____ 4 _____ Mussoorie. The name Kemty was actually _____ 5 _____ from an assemblage of two words 'Camp and Tea'.

- Question No. 80

Select the most appropriate option to fill in blank No.2

Options :

1. of
2. to
3. from
4. for
- 5.

Answer : of

Direction:

Comprehension:

Kemtoy falls Mussoorie, is a geological complex_____1_____ lies about 10 kilometres from Mussoorie, Uttarakhand towards Yamuna river. The fusion _____2_____ various geological, ecological, climatic and geographical factors has_____3_____ in the portrayal of this geologic marvel. It is a must-visit for the tourists _____4_____ Mussoorie. The name Kemtoy was actually_____5_____ from an assemblage of two words 'Camp and Tea'. Once used to be a preferred campsite for imperial rulers for formal picnics and campouts, this place is now famous as a picnic spot and a renowned tourist destination.

- Question No. 81

Select the most appropriate option to fill in blank No.3

Options :

1. resulting
2. resulted
3. result
4. been resulted
- 5.

Answer : resulted

Direction:

Comprehension:

Kemtoy falls Mussoorie, is a geological complex_____1_____ lies about 10 kilometres from Mussoorie, Uttarakhand towards Yamuna river. The fusion _____2_____ various geological, ecological, climatic and geographical factors has_____3_____ in the portrayal of this geologic marvel. It is a must-visit for the tourists _____4_____ Mussoorie. The name Kemtoy was actually_____5_____ from an assemblage of two words 'Camp and Tea'.

- Question No. 82

Select the most appropriate option to fill in blank No.4

Options :

1. landed

2. visiting
3. stay
4. calling
- 5.

Answer : visiting

Direction:

Comprehension:

Kemty falls Mussoorie, is a geological complex_____1_____ lies about 10 kilometres from Mussoorie, Uttarakhand towards Yamuna river. The fusion _____2_____ various geological, ecological, climatic and geographical factors has_____3_____ in the portrayal of this geologic marvel. It is a must-visit for the tourists _____4_____ Mussoorie. The name Kemty was actually_____5_____ from an assemblage of two words 'Camp and Tea'. Once used to be a preferred campsite for imperial rulers for formal picnics and campouts, this place is now famous as a picnic spot and a renowned tourist destination.

- Question No. 83

Select the most appropriate option to fill in blank No.5

Options :

1. conclude
2. manifested
3. derived
4. approaching
- 5.

Answer : derived

- Question No. 84

Select the wrongly spelt word.

Options :

1. Perennial
2. Calminating
3. Altitudinal
4. Susceptible
- 5.

Answer : Calminating

Direction:

Select the most appropriate synonym of the given word.

- Question No. 85

WRATH

Options :

1. Contentment
2. Delectation
3. Fury
4. Pleasure
- 5.

Answer : Fury

Direction:

Select the most appropriate SYNONYM of the given word.

- Question No. 86

INHABIT

Options :

1. Squander
2. Abide
3. Gather
4. Refine

5.

Answer : Abide

Direction:

Select the most appropriate ANTONYM of the given word.

- Question No. 87

ENCROACH

Options :

1. Appropriate
2. Interfere
3. Arrogate
4. Keep off
- 5.

Answer : Keep off

Direction:

Select the most appropriate ANTONYM of the given word.

- Question No. 88

RAPID

Options :

1. Prompt
2. Hurried
3. Vigorous
4. Dawdling
- 5.

Answer : Dawdling

Direction:

Select the most appropriate option to fill in the blank.

- Question No. 89

The climate change is slowly _____ the rainfall pattern in the area.

Options :

1. affected
2. impacting
3. registering
4. colliding
- 5.

Answer : impacting

Direction:

Select the most appropriate option to fill in the blank.

- Question No. 90

Rather than waiting for some chance to come at the doorstep, it's better to _____ one yourself.

Options :

1. maintain
2. create
3. design
4. be build
- 5.

Answer : create

Direction:

Select the option that is the passive form of the sentence.

- Question No. 91

Samar wrote the article with the help of his partner.

Options :

1. The article could be written by Samar with the help of his partner.
2. The article was written by Samar with the help of his partner.
3. The article was being written by Samar with the help of his partner.
4. The article has been written by Samar with the help of his partner.
- 5.

Answer : The article was written by Samar with the help of his partner.

Direction:

Select the option that is the indirect form of the sentence.

- Question No. 92

The peon said, "The files are under the drawer".

Options :

1. The peon said that the files are under the drawer.
2. The peon said that the files were under the drawer.
3. The peon said the files are under the drawer.
4. The peon said the files were under the drawer.
- 5.

Answer : The peon said that the files were under the drawer.

Direction:

Select the most appropriate meaning of the given idiom.

- Question No. 93

Across the board

Options :

1. Across the country
2. Better than others
3. Affecting all in an organization, system or society
4. Being uncomfortable and restless
- 5.

Answer : Affecting all in an organization, system or society

Direction:

In the sentence identify the segment which contains the grammatical error.

- Question No. 94

Children and adults does not have enough time to work out because of the rising academic and work strain.

Options :

1. enough time to work out
2. Children and adults does not have
3. because of the rising academic
4. and work strain
- 5.

Answer : Children and adults does not have

Direction:

Select the word which means the same as the group of words given.

- Question No. 95

A place or scene of activity, debate, or conflict

Options :

1. Chamber
2. Arena
3. Frontier

4. Territory

5.

Answer : Arena

Direction:

Select the word which means the same as the group of words given.

- Question No. 96

Illness persisting for a long time or constantly recurring

Options :

1. Accustomed

2. Chronic

3. Acute

4. Entrenched

5.

Answer : Chronic

Direction:

Select the most appropriate meaning of the underlined idiom in the given sentence.

- Question No. 97

In our town, everybody decorates their house to the nines on the eve of Christmas.

Options :

1. Practically identical in appearance

2. To be so surprised at something that you have to take another look

3. At the very last minute before an event

4. To a high degree

5.

Answer : To a high degree

Direction:

Given below are four jumbled sentences. Select the option that gives their correct order.

• Question No. 98

A. His father decided to hand him a bag of nails and said that every time the boy lost his temper, he had to hammer a nail into the fence.

B. On the first day, the boy hammered 37 nails into that fence.

C. There once was a little boy who had a very bad temper.

D. The boy gradually began to control his temper over the next few weeks, and the number of nails he was hammering into the fence slowly decreased.

Options :

1. DABC

2. CDBA

3. BDAC

4. CABD

5.

Answer : CABD

Direction:

Select the most appropriate option to substitute the underlined segment in the given sentence. If there is no need to substitute it, select 'No improvement'.

• Question No. 99

Food Corporations are being spended tons of money on TV and the internet to sell their goods.

Options :

1. is spended tons of

2. is about to spend tons of

3. are spending tons of
4. are spending on tons of
- 5.

Answer : are spending tons of

• Question No. 100

Select the wrongly spelt word.

Options :

1. Appreciated
2. Organized
3. Unpredictable
4. Sedentery
- 5.

Answer : Sedentery

[Attempt Mock Test Now](#)

All ixamBee Mock Test are FREE @ www.ixamBee.com

Prepare 50% Faster