

• Question No. 1

Select the option that is related to the fifth word in the same way as the fourth word is related to the third word and the second word is related to the first word.

CABBAGE : VEGETABLE :: CUSTARD : DESSERT :: PEACH : ?


Options :

1. DRINK
2. DESSERT
3. FRUIT
4. VEGETABLE
- 5.


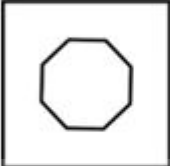


Answer : FRUIT

• Question No. 2

Select the figure that will replace the question mark (?) in the following figure series.


Prepare 50% Faster



1. 
2. 
3. 
4. 

Options :

1. 1
2. 2
3. 3
4. 4
- 5.

Answer : 1

• Question No. 3

In the following question, select the missing number from the given series.

55, 165, 495, 1485, ?, 13365

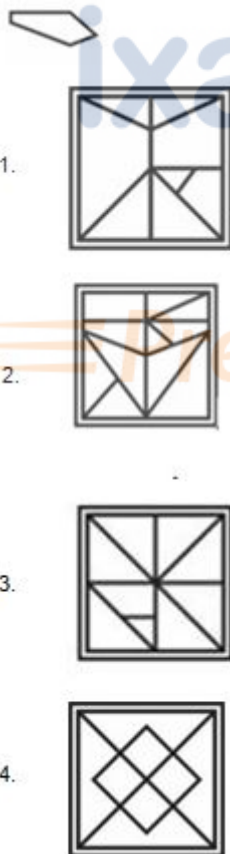
Options :

- 1. 7055
- 2. 6000
- 3. 5055
- 4. 4455
- 5.

Answer : 4455

• Question No. 4

From the given option figures, select the one in which the question figure is hidden/embedded, (rotation is NOT allowed)



Options :

- 1. 1

2. 2

3. 3

4. 4

5.

Answer : 2

• Question No. 5

In a certain code language, if AMRITSAR is coded as MAIRSTRA, DURGAPUR is coded as UDGRPARU, then what will SHILLONG be coded as?

Options :

1. GNLIOLSH

2. NGLOILSH

3. HSLIOLGN

4. HSLOILGN

5.

Answer : HSLIOLGN

• Question No. 6

In the following question, select the related letters from the given alternatives.

PTX : RVZ :: CGK : ?

Options :

1. EIM

2. ABC

3. VVW

4. MNL

5.

Answer : VVW

- Question No. 7

Five friends London, Madrid, Paris, Rome, and Vienna are arranged in a circle facing the center. Madrid is to the immediate left of Paris. Rome is exactly between London and Vienna. Vienna is to the immediate right of Paris.

Which friend is to the immediate left of Madrid?

Options :

1. London
2. Paris
3. Rome
4. Vienna
- 5.

Answer : Paris

- Question No. 8

Five friends Pooja, Bhawna, Charu, Geeta and Hema are sitting around a circular table facing towards the centre. Charu is not the immediate neighbour of Bhawna. Bhawna is second to the left of Hema. Geeta is the immediate neighbour of Bhawna and Hema. Who is sitting to the immediate right of Hema?

Options :

1. Geeta
2. Charu
3. Pooja
4. Bhawna
- 5.

Answer : Charu

- Question No. 9

Which of the following groups of letters when sequentially placed from left to right will complete the given series?

opq_stopqrsto_qrstopqrs_opqr_t

Options :

1. qpqr
2. rpts
3. rptp
4. opqr
- 5.

Answer : rpts

- Question No. 10

Which two numbers should be interchanged to make the given equation correct?

$$8 + 7 \times 5 \div 14 - 3 = 6$$

Options :

1. 3 and 5
2. 14 and 6
3. 8 and 5
4. 8 and 7
- 5.

Answer : 8 and 5

- Question No. 11

After arranging the given words according to dictionary order, which word will come at 'Fourth' position?

1. Wheel
2. Wheat
3. Whale

4. Whet

5. When

Options :

1. Whet
2. Wheel
3. When
4. Wheat
- 5.

Answer : When

• Question No. 12

Which of the following letter-number cluster will replace the question mark (?) in the given series?

UDF6, VF19, ?, XJO15, YLR18, ZNU21

Options :

1. WHL12
2. XHL12
3. WIK11
4. VGK11
- 5.

Answer : WHL12

• Question No. 13

'P × Q' means 'P is the father of Q'

'P + Q' means 'P is the brother of Q'

'P ÷ Q' means 'P is the son of Q'

'P – Q' means 'P is the husband of Q'

How is O related to L in the expression 'O + N ÷ M – L'?

Options :

1. Father
2. Husband
3. Brother
4. Son
- 5.

Answer : Son

- Question No. 14

In the following question, select the figure which can be placed at the sign of question mark (?) from the given alternatives.


Prepare 50% Faster

6			12	18			24		?
	78	72			60	42			

1.

30	
	18

2.

30	
	24

3.

	30
18	

4.

24	
	30

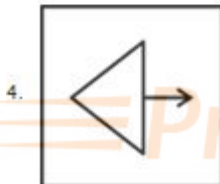
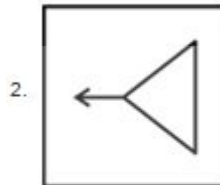
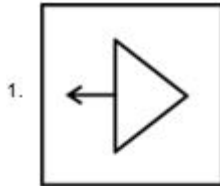
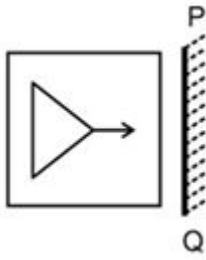
Options :

- 1. 1
- 2. 2
- 3. 3
- 4. 4
- 5.

Answer : 1

• Question No. 15

Select the correct mirror image of the given figure when the mirror PQ is placed to the right side of the figure.



Options :

1. 1

2. 2

3. 3

4. 4

5.

Answer : 2

• Question No. 16

In the following question, select the missing number from the given series.

14, 6, 5, 6.5, 12, ?

Options :

1. 17

2. 25

3. 20

4. 29

5.

Answer : 29

• Question No. 17

After interchanging the given two signs what will be the values of equation (I) and (II) respectively?

× and ÷

I. $18 \div 3 - 4 \times 2 + 7$

II. $18 \times 3 \div 6 - 8 + 4$

Options :

1. 40 and 80

2. 16 and 30

3. 59 and 32

4. 9 and 7

5.

Answer : 59 and 32

• Question No. 18

In a certain code language, 'ALLIES' is coded as 'REHLKA'. What is the code for 'BALLET' in that code language?

Options :

1. SEKLZC
2. SEKLZB
3. SDKLZB
4. SEKZLB
- 5.

Answer : SEKLZB

Direction:

Three Statements are given followed by two conclusions numbered I and II. Assuming the statements to be true, even if they seem to be at variance with commonly known facts, decide which of the conclusions logically follow(s) from the statements. Statement I: All pens are stationery items.

- Question No. 19

Statement II: Some stationery items are rubbers.

Statement III: All markers are pens.

Conclusion I: Some stationery items are not rubbers.

Conclusion II: Some markers are not stationery items.

Options :

1. Only conclusion II follows
2. Both conclusions I and II follow
3. Only conclusion I follows
4. Neither conclusion I nor II follows
- 5.

Answer : Neither conclusion I nor II follows

- Question No. 20

Which answer figure will complete the pattern in the question figure? (rotation is not allowed)



Options :

- 1. 1
- 2. 2
- 3. 3
- 4. 4
- 5.

Answer : 2

_____ is a lively dance form of the Bundelkhand region. Its performance begins with the beating of mridang and gradually gains momentum dotted with prose and poetic dialogues.

Options :

1. Matki
2. Gangaur
3. Rai
4. Swang
- 5.

Answer : Swang

- Question No. 22

Which of the following statement is correct regarding Gautama Buddha?

- I. Siddhartha, also known as Gautama, the founder of Buddhism, was born about 2500 years ago.
- II. The Gautama Buddha belonged to a small gana known as the Sakya gana.

Options :

1. Only II
2. Only I
3. Neither I nor II
4. Both I and II
- 5.

Answer : Both I and II

- Question No. 23

Indian origin _____, was United Kingdom's Home Secretary until November 2023.

Options :

1. Kamala Harris

2. Akshata Murty
3. Rishi Sunak
4. Suella Braverman
- 5.

Answer : Suella Braverman

- Question No. 24

Which Union Ministry announced the launch of the 'Amazon Future Engineer Programme?'

Options :

1. Ministry of Electronics and Information Technology
2. Ministry of Tribal Affairs
3. Ministry of Science and Technology
4. Ministry of Education
- 5.

Answer : Ministry of Tribal Affairs

- Question No. 25

In which year was the Gandhi-Irwin Pact signed?

Options :

1. 1911
2. 1921
3. 1941
4. 1931
- 5.

Answer : 1931

- Question No. 26

Leander Paes is associated with _____ .

Options :

1. Badminton
2. Lawn Tennis
3. Cricket
4. Golf
- 5.

Answer : Lawn Tennis

- Question No. 27

Ustad Binda Khan is associated with which of the following instruments?

Options :

1. Shehnai
2. Tabla
3. Sarangi
4. Flute
- 5.

Answer : Sarangi

- Question No. 28

In August 2023, Which of the following former Chief Justice of India was appointed a member of Singapore's International Mediator Panel?

Options :

1. UU Lalit
2. Ranjan Gogoi
3. NV Ramana
4. Sharad Arvind Bobde

5.

Answer : NV Ramana

• Question No. 29

With how many countries does India share a sea border?

Options :

1. 6

2. 4

3. 8

4. 2

5.

Answer : 2

• Question No. 30

Where was the International Shooting Sport Federation World Cup 2022 held?

Options :

1. Cairo, Egypt

2. Munich, Germany

3. New Delhi, India

4. Sydney, Australia

5.

Answer : Cairo, Egypt

• Question No. 31

The Green Revolution was instrumental in reducing India's dependence on imports of:

Options :

1. Petroleum
2. Food grains
3. Textiles
4. Machinery
- 5.

Answer : Food grains

• Question No. 32

"Mysuru Dasara" is a grand celebration in the Indian state of _____, featuring a royal procession, cultural events, and a display of decorated elephants.

Options :

1. Kerala
2. Karnataka
3. Orissa
4. Tamil Nadu
- 5.

Answer : Karnataka

• Question No. 33

In which unit, noise pollution is measured?

Options :

1. Centimeter
2. Ohm
3. Decibel
4. Hertz
- 5.

Answer : Decibel

- Question No. 34

At the end of which of the following Five-year plans of India, five IITs were set up in the country?

Options :

1. Third
2. Fourth
3. First
4. Second
- 5.

Answer : First

- Question No. 35

Which of the following statements is correct regarding Depreciation?

- I. Depreciation is termed as loss of value of fixed assets due to wear and tear during its useful life.
- II. Depreciation does not take into account unexpected or sudden destruction.

Options :

1. Only I
2. Both I and II
3. Neither I nor II
4. Only II
- 5.

Answer : Both I and II

- Question No. 36

How many cities of the host state hosted the National Games 2023?

Options :

- 1. 8
- 2. 2
- 3. 5
- 4. 10
- 5.

Answer : 5

• Question No. 37

Constitutions limit the power of government in many ways. The most common way of limiting the power of government is to specify certain _____ that all of us possess as citizens and which no government can ever be allowed to violate.

Options :

- 1. Fundamental Rights
- 2. Directive Principles of State Policy
- 3. Economic Duties
- 4. Fundamental Duties
- 5.

Answer : Fundamental Rights

• Question No. 38

In Olympics table tennis event, if the points are tied at 10-10, a player then has to strive for a _____ point lead to win the game.

Options :

- 1. 2
- 2. 3
- 3. 1
- 4. 4
- 5.

Answer : 2

- Question No. 39

Which of the following states/Union Territories have the highest male literacy rate according to Census of India 2011?

Options :

1. Mizoram
2. Kerala
3. Tripura
4. Lakshadweep
- 5.

Answer : Kerala

- Question No. 40

In August 2023, the Central government has granted a _____ extension to Cabinet Secretary Rajiv Gauba, making him the longest-serving cabinet secretary in India's history.

Options :

1. Four-years
2. Two-years
3. One-year
4. Three-years
- 5.

Answer : One-year

- Question No. 41

Six friends have an average height of 144 cm. A boy with a height of 150 cm leaves the group. Find the new average height.

Options :

1. 142.8 cm
2. 155.5 cm
3. 160.5 cm
4. 108.6 cm
- 5.

Answer : 142.8 cm

• Question No. 42

The difference between cost price and selling price is Rs. 264. If profit percentage is 33 percent, then what is the selling price?

Options :

1. Rs. 1064
2. Rs. 1526
3. Rs. 1084
4. Rs. 1024
- 5.

Answer : Rs. 1064

• Question No. 43

A and B can complete a work alone in 20 days and 60 days respectively. They began the work together but A left the work after some days and B completed the remaining work in 12 days. After how many days from the beginning A left the work?

Options :

1. 15 days
2. 10 days
3. 9 days

4. 12 days

5.

Answer : 12 days

• Question No. 44

Average of 4 numbers is 52. Average of first two numbers is thrice the average of other two numbers. What is the sum of first two numbers?

Options :

1. 156

2. 174

3. 148

4. 147

5.

Answer : 156

• Question No. 45

Marked price of a chair is Rs. 5000. After giving two successive discounts of 10 percent and x percent, the chair is sold for Rs. 3150. What is the value of x?

Options :

1. 40 percent

2. 20 percent

3. 25 percent

4. 30 percent

5.

Answer : 30 percent

• Question No. 46

What is the value of $880 + 41 \div 14 \times 84 - 26$?

Options :

1. 1150
2. 1200
3. 1000
4. 1100
- 5.

Answer : 1100

- Question No. 47

The radius of a sphere is 4.2 cm. What is the volume of the sphere?

Options :

1. 348.21 cm³
2. 329.32 cm³
3. 284.62 cm³
4. 310.46 cm³
- 5.

Answer : 310.46 cm³

- Question No. 48

Marked price of an article is Rs. 28500 and its selling price is Rs. 15675. What is the discount percentage?

Options :

1. 48 percent
2. 52 percent
3. 45 percent
4. 42 percent
- 5.

Answer : 45 percent

• Question No. 49

The price of a movie ticket was increased by 18%. The increase in ticket price reduced the number of audience by 25%. What is the effect on revenue?

Options :

1. increase by 10%
2. decrease by 14%
3. decrease by 11.5%
4. decrease by 9.5%
- 5.

Answer : decrease by 11.5%

• Question No. 50

The ratio of copper and zinc in brass is 25 : 12. How much amount of copper will be there in 370 kg of brass?

Options :

1. 150 kg
2. 250 kg
3. 50 kg
4. 350 kg
- 5.

Answer : 250 kg

• Question No. 51

Two numbers are in the ratio of 11 : 13. If their HCF is 7, find the numbers.

Options :

1. 63 and 70
2. 77 and 91
3. 70 and 80
4. 21 and 28
- 5.

Answer : 77 and 91

• Question No. 52

If $P : Q : R = 9 : 10 : 11$, then what is the value of $(P+Q) : (Q+R) : (R+P)$?

Options :

1. 19:21:20
2. 19:21:19
3. 19:21:22
4. 19:21:23
- 5.

Answer : 19:21:20

• Question No. 53

If a certain sum of money becomes thrice of itself in 8 years 6 months at simple interest, then what will be the annual rate of interest?

Options :

1. 24.78 percent
2. 21.28 percent
3. 24.48 percent
4. 23.52 percent
- 5.

Answer : 23.52 percent

- Question No. 54

If 25 is subtracted from a number, then number becomes 50 percent of itself. What is the number?

Options :

1. 50
2. 55
3. 40
4. 45
- 5.

Answer : 50

- Question No. 55

If interest is being compound annually, then what sum will amount to Rs. 9464 in 2 years at the rate of 30 percent per annum at compound interest?

Options :

1. Rs. 5600
2. Rs. 5400
3. Rs. 6800
4. Rs. 5750
- 5.

Answer : Rs. 5600

- Question No. 56

A person covers first 11 km in 60 minutes and next 22 km in 30 minutes. What is his average speed for the whole journey?

Options :

1. 18 km/hr

- 2. 22 km/hr
- 3. 27 km/hr
- 4. 25 km/hr
- 5.

Answer : 22 km/hr

- Question No. 57

What is the value of $[19 \times \{24 \div 4 \text{ of } (24 \times 4 \div 16)\}]$?

Options :

- 1. 1
- 2. 19
- 3. 38
- 4. 76
- 5.

Answer : 19

- Question No. 58

What is the value of $\frac{16 \times (9 + 4) - 13 \times 14}{50 - (12 + 12)}$?

Options :

- 1. 1
- 2. 26
- 3. 13
- 4. 2
- 5.

Answer : 1

- Question No. 59

If 18 men can finish a work in 13 days. Then in how many days will 54 men finish the same work?

Options :

1. $13/3$ days
2. 9 days
3. $8/5$ days
4. $18/4$ days
- 5.

Answer : $13/3$ days

- Question No. 60

If selling price of a table is 25 percent of its cost price, then what is the loss percentage?

Options :

1. 55 percent
2. 45 percent
3. 35 percent
4. 75 percent
- 5.

Answer : 75 percent

Direction:

Fill in the blank with the most appropriate option.

- Question No. 61

His first movement after the shock _____ to work in his loom; and he went on with this unremittingly.

Options :

1. was been
2. has being
3. had been

4. have been

5.

Answer : had been

Direction:

Improve the bold part of the sentence. Choose 'No improvement as an answer if the sentence is grammatically correct.

- Question No. 62

I can't wait to **gone camping** next weekend.

Options :

1. going camping

2. No improvement

3. go camping

4. go camps

5.

Answer : go camping

Direction:

Select the most appropriate option for the given blank.

- Question No. 63

Please _____my apology for this mistake.

Options :

1. develop

2. acquire

3. accept

4. obtain

5.

Answer : accept

Direction:

Select the word segment that substitutes (replaces) the bracketed word segment correctly and completes the sentence meaningfully. Select the option 'no correction required' if the sentence is correct as given.

- Question No. 64

Sapna was abstracted, biting her lip restlessly and reading over the guide-books to the battle-field that Suraj (had brought along).

Options :

1. No correction required
2. have brought along
3. have brought
4. has brought along
- 5.

Answer : No correction required

Direction:

Find the part of the given sentence that has an error in it. If there is no error, choose 'No error'.

- Question No. 65

We had been collected and studied over 14,000 dung beetles from 98 different species.

Options :

1. beetles from 98 different species.
2. No error
3. studied over 14,000 dung
4. We had been collected and
- 5.

Answer : We had been collected and

Direction:

Fill in the blank with the correct homophone:

- Question No. 66

In the dense forest, a mother _____ and her cubs roamed freely, enjoying the tranquility of their natural habitat.

Options :

1. bare
2. beer
3. bear
4. Ber
- 5.

Answer : bear

- Question No. 67

Select the sentence with no spelling errors.

Options :

1. The man walks with a grate deal of poise, in fact, very much like an elephant, but he also has the agelity of the panther.
2. The man walks with a great deal of poise, in fact, very much like an elephant, but he also has the agility of the panther.
3. The man walks with a great deal of poise, in fact, very much like an elephant, but he also has the agility of the panthur.
4. The man walks with a great deel of poise, in fact, very much like an ephalnt, but he also has the agility of the panther.
- 5.

Answer : The man walks with a great deal of poise, in fact, very much like an elephant, but he also has the agility of the panther.

Direction:

Find the part of the given sentence that has an error in it. If there is no error, choose 'No error'.

- Question No. 68

This is the most simple and basic component of life.

Options :

1. No error
2. simple and basic
3. component of life.
4. This is the most
- 5.

Answer : No error

Direction:

Select the incorrectly spelt word from the given sentence.

- Question No. 69

The univarsity claims students can face a law-suit or fine for violating the UNO smoking prohibition.

Options :

1. univarsity
2. violating
3. prohibition
4. claims
- 5.

Answer : univarsity

Direction:

Choose the most appropriate synonym of the bold word.

- Question No. 70

This query is no doubt a very correct and moral one, but it seems somewhat **cryptic**.

Options :

1. Clear
2. Mysterious
3. Obvious
4. Common
- 5.

Answer : Mysterious

Direction:

Choose the most appropriate antonym of the bold word.

- Question No. 71

While some people may face legitimate obstacles, others are just **obstinate**.

Options :

1. firm
2. dogged
3. stubborn
4. obedient
- 5.

Answer : obedient

Direction:

The sentence has been divided into three parts, identify the error segment in the sentence given below. Choose no error if there is no error in the sentence.

- Question No. 72

After a long day at work, he decided to switch of his/ phone, disconnecting from the digital world/ to immerse himself in a good book.

Options :

1. to immerse himself in a good book.

2. no error
3. phone, disconnecting from the digital world
4. After a long day at work, he decided to switch of his
- 5.

Answer : After a long day at work, he decided to switch of his

Direction:

Select the most appropriate word to fill in the blank.

- Question No. 73

He was dismissed for being combative and antagonistic his supervisor.

Options :

1. about
2. above
3. through
4. towards
- 5.

Answer : towards

Direction:

Choose the idiom/phrase that can substitute the bold group of words meaningfully.

- Question No. 74

She never has to worry about money as she is **born into a very rich family.**

Options :

1. Spill the beans
2. Out of the blue
3. Born with a silver spoon in mouth
4. Eats like a bird
- 5.

Answer : Born with a silver spoon in mouth

Direction:

In the following question, out of the given four alternatives, select the alternative which best expresses the meaning of the Idiom/Phrase.

- Question No. 75

Under the sun

Options :

1. In public
2. On earth
3. Under suspicion
4. At high risk
- 5.

Answer : On earth

Direction:

Read the passage carefully and select the correct answer for the given blanks out of the four alternatives.

The number of measles cases (1) _____ the world increased by 18 per cent during the same period, the report said, bringing the total number of infections (2) _____ nine million.

Measles, a (3) _____ contagious viral disease, spreads through respiratory droplets (4) _____ by the breath, sneeze or cough of an infected person. It may result in serious illness or even death. Some 37 countries saw significant or disruptive measles (5) _____ in 2022, compared to 22 nations in 2021.

- Question No. 76

Select the most appropriate option for blank (1)

Options :

1. for
2. across
3. through

4. along

5.

Answer : across

Direction:

Read the passage carefully and select the correct answer for the given blanks out of the four alternatives.

The number of measles cases (1) _____ the world increased by 18 per cent during the same period, the report said, bringing the total number of infections (2) _____ nine million.

Measles, a (3) _____ contagious viral disease, spreads through respiratory droplets (4) _____ by the breath, sneeze or cough of an infected person. It may result in serious illness or even death. Some 37 countries saw significant or disruptive measles (5) _____ in 2022, compared to 22 nations in 2021.

• Question No. 77

Select the most appropriate option for blank (2)

Options :

1. upon

2. too

3. to

4. in

5.

Answer : to

Direction:

Read the passage carefully and select the correct answer for the given blanks out of the four alternatives.

The number of measles cases (1) _____ the world increased by 18 per cent during the same period, the report said, bringing the total number of infections (2) _____ nine million.

Measles, a (3) _____ contagious viral disease, spreads through respiratory droplets (4) _____ by the breath, sneeze or cough of an infected person. It may result in serious illness or even death. Some 37 countries saw significant or disruptive measles (5) _____ in 2022, compared to 22 nations in 2021.

• Question No. 78

Select the most appropriate option for blank (3)

Options :

1. mutant
2. partially
3. great
4. highly
- 5.

Answer : highly

Direction:

Read the passage carefully and select the correct answer for the given blanks out of the four alternatives.

The number of measles cases (1) _____ the world increased by 18 per cent during the same period, the report said, bringing the total number of infections (2) _____ nine million.

Measles, a (3) _____ contagious viral disease, spreads through respiratory droplets (4) _____ by the breath, sneeze or cough of an infected person. It may result in serious illness or even death. Some 37 countries saw significant or disruptive measles (5) _____ in 2022, compared to 22 nations in 2021.

• Question No. 79

Select the most appropriate option for blank (4)

Options :

1. transported
2. transited
3. transmitted
4. transgressed
5. transgressed

Answer : transmitted

Direction:

Read the passage carefully and select the correct answer for the given blanks out of the four alternatives.

The number of measles cases (1) _____ the world increased by 18 per cent during the same period, the report said, bringing the total number of infections (2) _____ nine million.

Measles, a (3) _____ contagious viral disease, spreads through respiratory droplets (4) _____ by the breath, sneeze or cough of an infected person. It may result in serious illness or even death. Some 37 countries saw significant or disruptive measles (5) _____ in 2022, compared to 22 nations in 2021.

- Question No. 80

Select the most appropriate option for blank (5)

Options :

1. pointer
2. outbreak
3. ailment
4. break
- 5.

Answer : outbreak


Prepare 50% Faster

[Attempt Mock Test Now](#)

All ixamBee Mock Test are FREE @ www.ixamBee.com