

• Question No. 1

Select the correct mirror image of the given figure when the mirror is placed at MN.



- A. P en 4 7 d E
- B. P en 4 7 d E
- C. P en 4 7 d E
- D. P en 4 7 d E

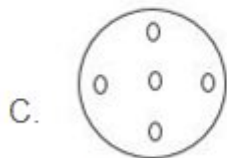
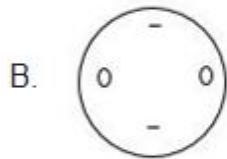
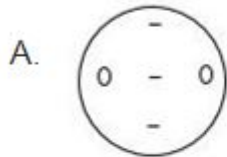
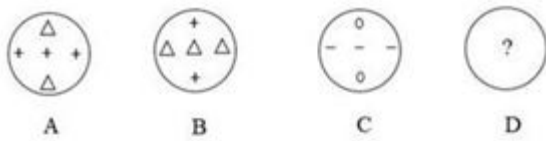
Options :

1. A
2. B
3. C
4. D
5. *Prepare 50% Faster*

Answer : C

• Question No. 2

Figure A is related to figure B in a certain pattern. Following the same pattern, figure C is related to figure D. Study the pattern and select the figure that can replace the question mark (?) for figure D.



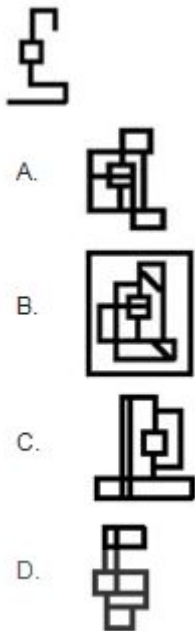
Options :

1. A
2. B
3. C
4. D
- 5.

Answer : A

• Question No. 3

Select the option figure in which the given figure is embedded as its part (rotation is NOT allowed).



Options :

1. A
2. B
3. C
4. D
- 5.

Answer : B

• Question No. 4

If '+' means '-', '-' means 'x', 'x' means '÷', and '÷' means '+', what will come in place of the question mark (?) in the following equation?

$$12 - 182 \times 14 \div 45 + 24 = ?$$

Options :

1. 193
2. 177
3. 171

4. 159

5.

Answer : 177

• Question No. 5

Prakash is standing facing the West. He takes a left turn after walking 2 m. Then he walks 3 m, takes a left turn and walks 3 m. He takes a last left turn and walks 1 m. In which direction is he facing now?

Options :

1. North
2. West
3. South
4. East
- 5.

Answer : North

• Question No. 6

I is the son of B. G is the son of A. B is the wife of A. H is the wife of G. I is the husband of J. W is the daughter of J. U is the son of G. How is B related to J?

Options :

1. Mother's mother
2. Son's wife
3. Husband's mother
4. Mother
- 5.

Answer : Husband's mother

• Question No. 7

The sequence of folding a piece of paper and the manner in which the folded paper is cut is shown in the following figures. How would this paper look when unfolded?



Options :

1. A
2. B
3. C
4. D
- 5.

Answer : D

• Question No. 8

A starts to move towards the South and reaches B. He then turns to the right and walks towards C. He then turns towards the left and reaches D. In which direction is A facing now?

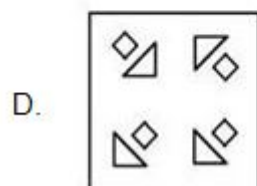
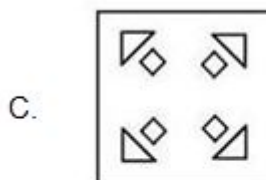
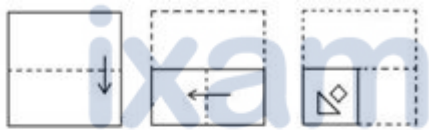
Options :

1. South
2. East
3. West
4. North
- 5.

Answer : South

• Question No. 9

The sequence of folding a piece of paper and the manner in which the folded paper has been cut is shown in the following figures. How would this paper look when unfolded?



Options :

- 1. A
- 2. B
- 3. C
- 4. D
- 5.

Answer : C

• Question No. 10

Select the option in which the given figure is embedded (rotation is not allowed).



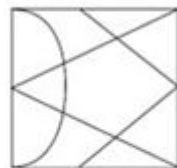
A.



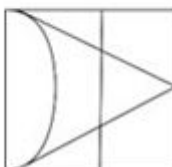
B.



C.



D.



Options :

- 1. A

2. B

3. C

4. D

5.

Answer : C

• Question No. 11

Rohit travels 10 km to the east from his shop, then turns left and travels 21 km. He again turns left and travels 30 km to reach his house. What is the shortest distance between his shop and his house?

Options :

1. 29 km

2. 51 km

3. 40 km

4. 41 km

5.

Answer : 29 km

• Question No. 12

Which two numbers need to be interchanged to make the following equation correct?

$$2 \times 8 \div 6 + 4 - 8 = 2$$

Options :

1. 2, 8

2. 4, 8

3. 6, 4

4. 6, 8

5.

Answer : 6, 4

- Question No. 13

J is the daughter of K. K and L are sisters. M is the mother of L, and N is the father of M. How is N related to K?

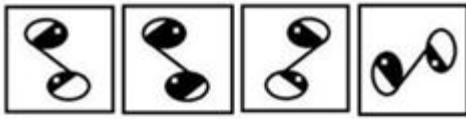
Options :

1. Father's father
2. Mother's father
3. Father
4. Son
- 5.

Answer : Mother's father

- Question No. 14

Four figures have been given, out of which three are alike in some manner and one is different. Select the one that is different.



A.



B.



C.



D.



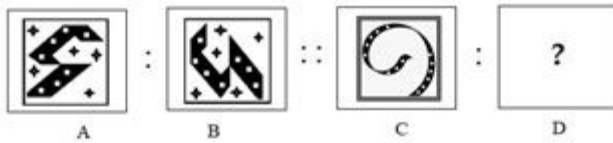
Options :

1. A
2. B
3. C
4. D
- 5.

Answer : D

- Question No. 15

Select the option that is related to the third figure in the same way as the second figure is related to the first figure.



Options :

- 1. A
- 2. B
- 3. C
- 4. D
- 5.

Answer : D

- Question No. 16

Find the number of triangles in the given figure.



Options :

- 1. 24
- 2. 28
- 3. 26
- 4. 30
- 5.

Answer : 28

• Question No. 17

How many triangles are there in the given figure?



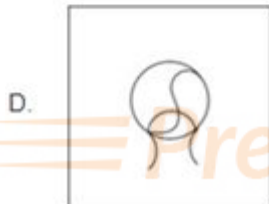
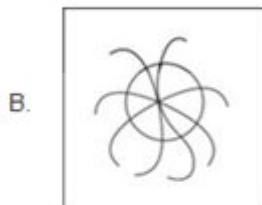
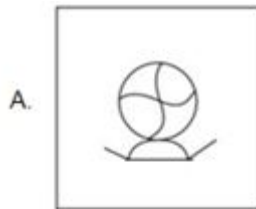

Options :

- 1. 2
- 2. 5
- 3. 6
- 4. 7
- 5.

Answer : 7

• Question No. 18

Select the option in which the given figure is embedded (rotation is not allowed).



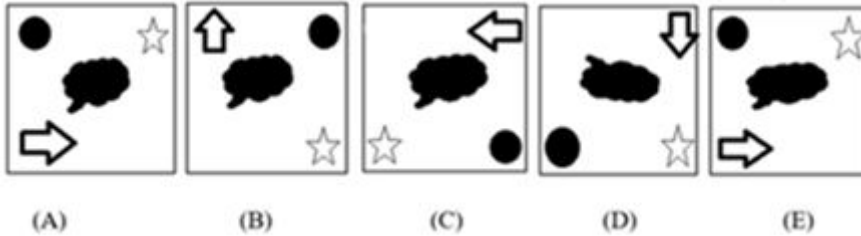
Options :

1. A
2. B
3. C
4. D
- 5.

Answer : B

- Question No. 19

Four of the following five figures are alike in a certain way and thus form a group. Which is the one that does NOT belong to that group?



Options :

1. C
2. D
3. E
4. B
- 5.

Answer : D

- Question No. 20

Which two numbers need to be interchanged to make the following equation correct?

$$11 \times 5 \div 10 + 12 - 4 = 13$$

Options :

1. 11, 13
2. 5, 10
3. 12, 13
4. 11, 12
- 5.

Answer : 11, 12

- Question No. 21

Introducing a man, a woman said, "His wife is the only daughter of my mother". How is the woman related to the man?

Options :

1. Sister
2. Wife
3. Daughter
4. Mother
- 5.

Answer : Wife

- Question No. 22

Choose the alternative which closely resembles the mirror image of the given combination.



- A. ЯАТТ20H
- B. ЯАТ210H
- C. ЯАТ2Т0H
- D. ЯАТ2Т0H

Options :

1. A
2. B
3. C
4. D
- 5.

Answer : C

• Question No. 23

Kabir is facing the South. He takes a right turn and drives 20 km. Then takes a right turn and drives 30 km. Then takes a left turn and drives 15 km. Finally, takes a left turn and drives 30 km. How far is Kabir from the starting point?

Options :

1. 30 km
2. 20 km
3. 35 km
4. 15 km
- 5.

Answer : 35 km

• Question No. 24

Ravi drove his car 5 km south from his house, then turned left and drove 4 km. Again, he turned left and drove 7 km, and then turned left again and drove 4 km. Now, how many km away is he from his house and in which direction?

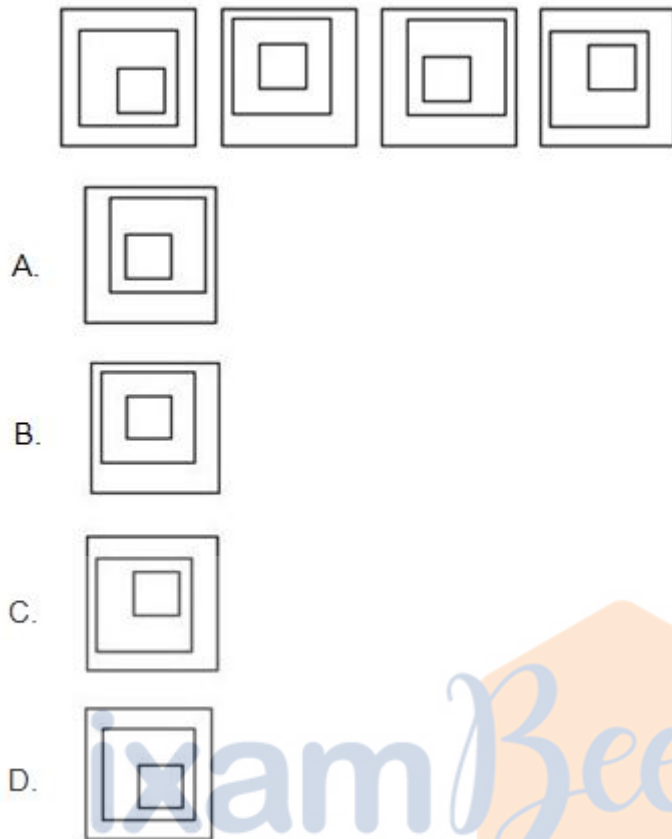
Options :

1. 2 km; North
2. 1 km; West
3. 4 km; East
4. 3 km; South
- 5.

Answer : 2 km; North

• Question No. 25

Four figures have been given, out of which three are alike in some manner and one is different. Select the one that is different.



Options :

1. A
2. B
3. C
4. D
- 5.

Answer : B

- Question No. 26

The value of $\frac{579.1223 \times 0.0584 \times 2.97}{0.0984 \times 82.681 \times 99.849}$ is closest to:

Options :

1. 0.11

2. 1.2
3. 0.12
4. 0.012
- 5.

Answer : 0.12

• Question No. 27

A shopkeeper gives two successive discounts on an article marked for ₹900. The first discount given is 10%. If the customer pays ₹688.5 for the article, then find the second discount.

Options :

1. 10%
2. 14%
3. 15%
4. 12.5%
- 5.

Answer : 15%

• Question No. 28

Three persons walked from place A to place B. Their speeds are in the ratio 2 : 3 : 7.

Find the ratio of the time taken to reach place B by these persons.

Options :

1. 1 : 2 : 3
2. 2 : 14 : 6
3. 21 : 14 : 6
4. 21 : 4 : 6
- 5.

Answer : 21 : 14 : 6

- Question No. 29

If 30% of $(A + B) = 40\%$ of $(A - B)$, then find $A : B$.

Options :

1. 7 : 1

2. 2 : 7

3. 2 : 5

4. 1 : 4

5.

Answer : 7 : 1

- Question No. 30

$5^{25} + 5^{26} + 5^{27}$ is completely divisible by:

Options :

1. 36

2. 31

3. 32

4. 38

5.

Answer : 31

- Question No. 31

Suppose the radii of the bases of a cylinder and a cone are in the ratio of 5 : 6 and their heights are in the ratio of 3 :

5. The ratio of their respective volumes is:

Options :

1. 5/6

2. 5/4

3. $4/5$

4. $6/5$

5.

Answer : $5/4$

• Question No. 32

If the surface area of three faces of a cuboid sharing a vertex is given as 25 m^2 , 32 m^2 and 32 m^2 , the volume of the cuboid is:

Options :

1. 240 m^3

2. 80 m^3

3. 160 m^3

4. 135 m^3

5.

Answer : 160 m^3

• Question No. 33

The amount received on a certain sum for 2 years at 18% p.a. simple interest is ₹952 less than the simple interest received on the same sum for 8.5 years at the same rate. The sum (in ₹) is:

Options :

1. Rs.5,600

2. Rs.6,500

3. Rs.4,500

4. Rs.5,400

5.

Answer : Rs.5,600

- Question No. 34

A number when increased by $72\frac{1}{2}\%$ gives 87. Find the number.

Options :

1. 110
2. 130
3. 140
4. 120
- 5.

Answer : 120

- Question No. 35

By selling 33 metres of cloth, one gains the selling price of 11 metres cloth. Find the gain percentage.

Options :

1. 50%
2. 35%
3. 25%
4. 60%
- 5.

Answer : 50%

- Question No. 36

The average of 12 numbers is 20 and the average of another 10 numbers is 31. What is the average of all the 22 numbers?

Options :

1. 23
2. 22

3. 24

4. 25

5.

Answer : 25

• Question No. 37

What is the value of $\sqrt{1024} + \sqrt{10.24} + \sqrt{0.1024}$?

Options :

1. 35.52

2. 32.84

3. 35.84

4. 38.4

5.

Answer : 35.52

• Question No. 38

A thief was spotted by a policeman from a distance of 550 m. The thief then ran at a speed of 7 km/h and the policeman chased him at a speed of 9 km/h, eventually catching him. What was the distance ran by the thief before he was caught?

Options :

1. 1925 m

2. 1875 m

3. 1985 m

4. 1950 m

5.

Answer : 1925 m

- Question No. 39

A man travels to a place at a speed of 40 km/h and returns at a speed of 50 km/h. What is his average speed during the entire journey (in km/h) (correct to one decimal place)?

Options :

1. 40.5
2. 50.4
3. 42.5
4. 44.4
- 5.

Answer : 44.4

- Question No. 40

At a Christmas sale, all the goods in a shop are on sale at 30% discount. If Jasmine buys a skirt marked at ₹800, how much would she need to pay?

Options :

1. ₹400
2. ₹476
3. ₹776
4. ₹560
- 5.

Answer : ₹560

- Question No. 41

What is the compound interest on ₹6,000 in 2 years at the rate of 10% per annum, compounded yearly?

Options :

1. ₹1,260

2. ₹1,280
3. ₹1,250
4. ₹1,270
- 5.

Answer : ₹1,260

• Question No. 42

Two sums of money are proportional to 8:9. If the first sum is ₹28, then what is the second sum?

Options :

1. ₹31.5
2. ₹29.5
3. ₹30.5
4. ₹28.5
- 5.

Answer : ₹31.5

• Question No. 43

A and B receive ₹5,000 from their grandmother in the ratio of 6 : 4. A spends one-fifth of his money and invests the rest for two years at 5% per annum simple interest. B spends all his money to buy a gold ring and two years later he sells it at a profit of 10%. Compare the amounts of money A and B have, respectively, after two years.

Options :

1. 5 : 4
2. 5 : 6
3. 4 : 5
4. 6 : 5
- 5.

Answer : 6 : 5

- Question No. 44

Raveena purchased 20 watches at the rate of ₹1,500 per watch. At what rate per watch should she sell, so that the profit earned is 20%?

Options :

1. Rs.1,800
2. Rs.1,600
3. Rs.1,750
4. Rs.1,700
- 5.

Answer : Rs.1,800

- Question No. 45

Find the compound interest on Rs.8,000 at 4% per annum for 2 years, compounded annually.

Options :

1. Rs.552.80
2. Rs.652.80
3. Rs.752.80
4. Rs.452.80
- 5.

Answer : Rs.652.80

- Question No. 46

Five men can finish a job in 8 days. How many days will it take if 12 men do the job?

Options :

1. 4
2. 40

3. $3(1/3)$

4. 5

5.

Answer : $3(1/3)$

- Question No. 47

Find the average of $-9, 7, -6, 12, -2, 7$

Options :

1. 3.4

2. 2.3

3. 1.8

4. 1.5

5.

Answer : 1.5

- Question No. 48

The average of 12 observations is 35 and the average of another 10 observations is 24.

What is the average of all the 22 observations?

Options :

1. 27

2. 30

3. 22

4. 26

5.

Answer : 30

- Question No. 49

Simplify. $\left[\frac{53}{10} - \left\{ 5 + \left(\frac{1}{4} \times \frac{1}{3} \right) \text{ of } \left(\frac{5}{6} + \frac{7}{6} \right) \right\} \right]$

Options :

1. 1
2. 53/10
3. 0
4. 5
- 5.

Answer : 0

- Question No. 50

During the transportation of a tank, it got damaged and has a leakage which can empty the tank in 30 minutes. It has 1 tap which can fill it at the rate of 4 litres/minute. It was found that the tank got empty in 90 minutes. How much is the capacity of the tank?

Options :

1. 180 litres
2. 190 litres
3. 160 litres
4. 150 litres
- 5.

Answer : 180 litres

- Question No. 51

Identify the tributary of Yamuna River from the following options.

Options :

1. Betwa
2. Tungabhadra

3. Penganga

4. Son

5.

Answer : Betwa

• Question No. 52

The substance piperine is present in:

Options :

1. cardamom

2. turmeric

3. pepper

4. ginger

5.

Answer : pepper

• Question No. 53

What was the decadal growth rate of India's population from 2001 to 2011?

Options :

1. 20.4%

2. 17.7%

3. 27.9%

4. 16.1%

5.

Answer : 17.7%

• Question No. 54

Who was the first chairperson of the Sangeet Natak Akademi?

Options :

1. Maulana Abul Kalam Azad
2. Shekhar Sen
3. Rajendra Prasad
4. PV Rajamannar
- 5.

Answer : PV Rajamannar

• Question No. 55

Who was the Secretary of State for India when the Council Act of 1909 was enacted?

Options :

1. Lord Morley
2. Lord George Hamilton
3. Lord Leo Amery
4. Lord Minto
- 5.

Answer : Lord Morley

• Question No. 56

In which Upanishad are the seven musical notes, sa, re, ga, ma, pa, dha and ni mentioned?

Options :

1. Mundaka Upanishad
2. Narada Parivrajaka Upanishad
3. Katha Upanishad
4. Kena Upanishad
- 5.

Answer : Narada Parivrajaka Upanishad

- Question No. 57

To which Gharana does the Indian classical vocalist Pandit Jasraj belong?

Options :

1. Agra Gharana
2. Gwalior Gharana
3. Mewati Gharana
4. Dagari Gharana
- 5.

Answer : Mewati Gharana

- Question No. 58

Which of the following uprisings is also known as the Ulgulan revolt?

Options :

1. Khasi Uprising
2. Ahom Uprising
3. Munda Uprising
4. Santhal Uprising
- 5.

Answer : Munda Uprising

- Question No. 59

Which of the following is NOT a general economic cause of poverty?

Options :

1. Excessive employment
2. Low capital formation
3. Lack of demand

4. Lack of infrastructure

5.

Answer : Excessive employment

• Question No. 60

Which of the following is a feature of the Indian Constitution?

Options :

1. Double citizenship

2. Written Constitution

3. Unitary Constitution

4. Supremacy of the Parliament

5.

Answer : Written Constitution

• Question No. 61

Indian classical dance forms incorporate both tandava and _____, offering a balance of cosmic energies.

Options :

1. lasya

2. avibhava

3. bhavya

4. triobhava

5.

Answer : lasya

• Question No. 62

Which type of bacteria used in the manufacture of fermented dairy, sourdough, meat and vegetable food?

Options :

1. Acetobacter aceti
2. Bacillus subtilis
3. Gluconacetobacter xylinus
4. Lactobacillus acidophilus
- 5.

Answer : Lactobacillus acidophilus

• Question No. 63

Who said "we are also human beings" in Chavdar Tank Satyagraha?

Options :

1. Mahatma Gandhi
2. Swami Sahajanand
3. Dr. BR Ambedkar
4. MC Raja
- 5.

Answer : Dr. BR Ambedkar

• Question No. 64

Which city is known as the hub of petrochemical industries in India?

Options :

1. Mumbai
2. Delhi
3. Kolkata
4. Chennai
- 5.

Answer : Mumbai

• Question No. 65

Which of the following statements are CORRECT about the Sanchi Stupa?

- A. It is one of the oldest stone structures in India.
- B. It was built by the famous Mauryan emperor Chandragupta Maurya.
- C. It is located at Madhya Pradesh.

Options :

- 1. 1, 2 and 3
- 2. 1 and 3
- 3. 1 and 2
- 4. 2 and 3
- 5.

Answer : 1 and 3

• Question No. 66

Despite victory at Panipat in 1526, Babur faced which problems?

Options :

- 1. i. Babur's nobles and commanders were eager to return to Central Asia because they did not like India's hot climate and felt alienated culturally. ii. Rajputs, rallying under the leadership of Rana Sanga the king of Mewar, wanted to expel the Mughal forces. iii. The Afghans, though defeated at Panipat, re-grouped in eastern parts of present UP, Bihar, and Bengal to reclaim their lost power.
- 2. i. Babur's nobles and commanders were eager to return to Central Asia because they did not like India. ii. Rajputs, rallying under the leadership of Rana Sanga, Alwar's king, wanted to expel the Mughal forces. iii. The Afghans, though defeated at Panipat, re-grouped in eastern parts of present UP, Bihar, and Bengal to reclaim their power.
- 3. i. Babur's nobles and commanders revolted because they feared snakes and jungles. ii. Rajputs, rallying under the leadership of Rana Sanga the king of Marwar, wanted to expel the Mughal forces. iii. The Afghans,

though defeated at Panipat, re-grouped in eastern parts of present UP, Bihar, and Bengal to reclaim their lost power.

4. i. Babur's nobles and commanders were eager to return to Central Asia because they faced shortages of food and water. ii. Rajputs, rallying under the leadership of Rana Sanga the king of Ajmer, wanted to expel the Mughal forces. iii. The Afghans, though defeated at Panipat, re-grouped in eastern parts of present UP, Bihar, and Bengal to reclaim their lost power.

5.

Answer : i. Babur's nobles and commanders were eager to return to Central Asia because they did not like India's hot climate and felt alienated culturally. ii. Rajputs, rallying under the leadership of Rana Sanga the king of Mewar, wanted to expel the Mughal forces. iii. The Afghans, though defeated at Panipat, re-grouped in eastern parts of present UP, Bihar, and Bengal to reclaim their lost power.

• Question No. 67

Which of the following movements was called as 'Bahishkar Yoga' by Bal Gangadhar Tilak?

Options :

1. Khilafat Movement
2. Chipko Movement
3. Satyagraha Movement
4. Swadeshi Movement
- 5.

Answer : Swadeshi Movement

• Question No. 68

In which of the following writs does the court enquire into the legality of the claim, which a party asserts to a public office and ousts him from its enjoyment if the claim be not well founded?

Options :

1. Prohibition
2. Certiorari

3. Mandamus
4. Quo Warranto
- 5.

Answer : Quo Warranto

• Question No. 69

Where are the famous Ajanta Caves located?

Options :

1. Patna
2. Jodhpur
3. Aurangabad
4. Bhubaneswar
- 5.

Answer : Aurangabad

• Question No. 70

Which of the following battles was fought between Siraj-ud-Daulah and the East India Company?

Options :

1. Battle of Plassey
2. Battle of Tarain
3. Battle of Talikota
4. Third Battle of Panipat
- 5.

Answer : Battle of Plassey

• Question No. 71

Which of the following is an Indian microblogging site?

Options :

1. Koo
2. Baidu
3. Twitter
4. Tumblr
- 5.

Answer : Koo

• Question No. 72

Which of the following is one of the oldest physical divisions of India?

Options :

1. Himalaya mountains
2. Northern plain
3. Peninsular plateau
4. Coastal plains
- 5.

Answer : Peninsular plateau

• Question No. 73

Which of the following epidemics in 1918-19 killed 170 lakh people in India?

Options :

1. Influenza
2. Malaria
3. Small pox
4. Cholera
- 5.

Answer : Influenza

- Question No. 74

The famous Begumpuri mosque, built in the Tughluq period, is located in _____.

Options :

1. Delhi
2. Agra
3. Badaun
4. Lahore
- 5.

Answer : Delhi

- Question No. 75

The ability to acquire knowledge is one of the components of the Human Development Index. It is measured by the _____.

Options :

1. mean years of schooling and the expected years of schooling
2. adult literacy rate and primary completion rate
3. literacy level and the expected years of schooling
4. primary and secondary completion rates
- 5.

Answer : mean years of schooling and the expected years of schooling

- Question No. 76

Select the option that can be used as a one-word substitute for the given group of words.

One who believes in the existence of God.

Options :

1. Theist
2. Twins
3. Thearchy
4. Truism
- 5.

Answer : Theist

• Question No. 77

Select the most appropriate option to fill in the blank in the given sentence.

He cannot ____ to my request.

Options :

1. exceed
2. accede
3. seed
4. ascend
- 5.

Answer : accede

• Question No. 78

Select the INCORRECTLY spelt word.

Options :

1. Drible
2. Feedable
3. Edible
4. Credible
- 5.

Answer : Drible

- Question No. 79

Select the INCORRECTLY spelt word.

Options :

1. Penitence
2. Reduction
3. Ruthlessness
4. Residue
- 5.

Answer : Ruthlessness

- Question No. 80

Sentences of a paragraph are given below in jumbled order. Arrange the sentences in the correct order to form a meaningful and coherent paragraph.

1. She had been tossing and turning for hours, her mind racing with worries and anxieties.
2. Jackie lay in bed, unable to sleep.
3. Just as she was about to give up, she heard a soft knock on her door.
4. It was her husband, who had come to check on her.

Options :

1. 2134
2. 2341
3. 4231
4. 1234
- 5.

Answer : 2134

- Question No. 81

Select the INCORRECTLY spelt word.

Options :

1. Untamed
2. Compassionate
3. Abrogate
4. Cautous
- 5.

Answer : Cautous

- Question No. 82

Sentences of a paragraph are given below in jumbled order. Arrange the sentences in the correct order to form a meaningful and coherent paragraph.

1. Suddenly, the figure stepped into the light, revealing himself to be an old friend she had not seen in years.
2. Rachel walked alone through the deserted streets.
3. They caught up on old times and walked together, laughing and chatting until they reached Rachel's doorstep.
4. She had just left her job and was on her way home when she heard footsteps behind her.

Options :

1. 1324
2. 4231
3. 3412
4. 2413
- 5.

Answer : 2413

- Question No. 83

Select the most appropriate synonym of the bold word in the given sentence.

The judgement was **fair**, based on her relationship with the accused.

Options :

1. White
2. Impartial
3. Content
4. Funny
- 5.

Answer : Impartial

- Question No. 84

In the given sentence, four words/phrases have been bold and the bold words/phrases are given as options. Select the option that contains an error.

They had hardly **finished their** journey **yet** the storm **came**.

Options :

1. yet
2. their
3. came
4. finished
- 5.

Answer : yet

- Question No. 85

Select the most appropriate synonym of the given word.

Venerable

Options :

1. Respectable
2. Indecisive
3. Insignificant
4. Mischievous
- 5.

Answer : Respectable

- Question No. 86

Select the option that can be used as a one-word substitute for the given group of words.

Completely harmless

Options :

1. Insipid
2. Foppish
3. Innocuous
4. Immobile
- 5.

Answer : Innocuous

- Question No. 87

The following sentence has been split into four segments. Identify the segment that contains a grammatical error.

Several of / the participants / shared there / personal experiences.

Options :

1. shared there
2. Several of

3. personal experiences
4. the participants
- 5.

Answer : shared there

• Question No. 88

Select the most appropriate synonym of the given word.

Acquire

Options :

1. Obtain
2. Yield
3. Regulate
4. Mesmerise
- 5.

Answer : Obtain

• Question No. 89

Select the option that can be used as a one-word substitute for the given group of words.

A large room containing many beds

Options :

1. Ballroom
2. Anteroom
3. Dormitory
4. Cemetery
- 5.

Answer : Dormitory

- Question No. 90

Select the INCORRECTLY spelt word.

Options :

1. Plight
2. Stress
3. Reseipt
4. Stereo
- 5.

Answer : Reseipt

- Question No. 91

Sentences of a paragraph are given below in jumbled order. Arrange the sentences in the correct order to form a meaningful and coherent paragraph.

1. Yoga is a popular practice that has been around for centuries.
2. Practicing yoga can improve flexibility, balance and strength, as well as reduce stress, anxiety and depression.
3. Additionally, yoga can help with weight loss, improve respiratory function and boost the immune system.
4. It originated in India and has since gained a global following due to its numerous health benefits.

Options :

1. 2134
2. 2143
3. 1423
4. 3214
- 5.

Answer : 1423

- Question No. 92

Select the most appropriate synonym of the bold word.

She has **devoted** herself to the service of poor.

Options :

1. devastated
2. gratified
3. dedicated
4. extended
- 5.

Answer : dedicated

- Question No. 93

Select the option that can be used as a one-word substitute for the bold group of words.

You will need to submit **an exact copy** of the required documents in the passport office by next week.

Options :

1. Facsimile
2. Assemblage
3. Photograph
4. Counterfeit
- 5.

Answer : Facsimile

- Question No. 94

Select the option that can be used as a one-word substitute for the given group of words.

A large number of fish swimming together

Options :

1. Fleet
2. Posse
3. Shoal
4. Sheath
- 5.

Answer : Shoal

• Question No. 95

Select the most appropriate synonym of the bold word in the given sentence.

Rahul was a very **obstinate** person.

Options :

1. Stable
2. Cheerful
3. Stubborn
4. Factual
- 5.

Answer : Stubborn

Direction:

In the following passage some words have been deleted. Read the passage carefully and select the most appropriate option to fill in each blank.

Any type of education that (96)_____ the language or languages that children are most comfortable (97)_____ to help them learn is referred to as mother tongue education.

Children typically use this language at home with their families. It is not (98)_____ for the 'mother tongue' to be the mother's native tongue. Children are (99)_____ of speaking more than one language at home, and many times they do. For (100)_____, their mother, their father, and their grandparents may each speak a different language. Home language, first language, and legacy language are other words

- Question No. 96

Select the most appropriate option to fill in blank number 97.

Options :

1. with
2. beyond
3. of
4. in
- 5.

Answer : with

Direction:

In the following passage some words have been deleted. Read the passage carefully and select the most appropriate option to fill in each blank.

Any type of education that (96)_____ the language or languages that children are most comfortable (97)_____ to help them learn is referred to as mother tongue education.

Children typically use this language at home with their families. It is not (98)_____ for the 'mother tongue' to be the mother's native tongue. Children are (99)_____ of speaking more than one language at home, and many times they do. For (100)_____, their mother, their father, and their grandparents may each speak a different language. Home language, first language, and legacy language are other words

- Question No. 97

Select the most appropriate answer for blank number 96.

Options :

1. exhibits
2. employs
3. excludes
4. exaggerates
- 5.

Answer : employs

Direction:

In the following passage some words have been deleted. Read the passage carefully and select the most appropriate option to fill in each blank.

Any type of education that (96)_____ the language or languages that children are most comfortable (97)_____ to help them learn is referred to as mother tongue education.

Children typically use this language at home with their families. It is not (98)_____ for the 'mother tongue' to be the mother's native tongue. Children are (99)_____ of speaking more than one language at home, and many times they do. For (100)_____, their mother, their father, and their grandparents may each speak a different language. Home language, first language, and legacy language are other words

• Question No. 98

Select the most appropriate option to fill in blank number 98.

Options :

1. customary
2. necessary
3. voluntary
4. ordinary
- 5.

Answer : necessary

Direction:

In the following passage some words have been deleted. Read the passage carefully and select the most appropriate option to fill in each blank.

Any type of education that (96)_____ the language or languages that children are most comfortable (97)_____ to help them learn is referred to as mother tongue education.

Children typically use this language at home with their families. It is not (98)_____ for the 'mother tongue' to be the mother's native tongue. Children are (99)_____ of speaking more than one language at home, and many times they do. For (100)_____, their mother, their father, and their grandparents may each speak a different language. Home language, first language, and legacy language are other words

- Question No. 99

Select the most appropriate option to fill in blank number 100.

Options :

1. obscure
2. construe
3. complex
4. instance
- 5.

Answer : instance

Direction:

In the following passage some words have been deleted. Read the passage carefully and select the most appropriate option to fill in each blank.

Any type of education that (96)_____ the language or languages that children are most comfortable (97)_____ to help them learn is referred to as mother tongue education.

Children typically use this language at home with their families. It is not (98)_____ for the 'mother tongue' to be the mother's native tongue. Children are (99)_____ of speaking more than one language at home, and many times they do. For (100)_____, their mother, their father, and their grandparents may each speak a different language. Home language, first language, and legacy language are other words

- Question No. 100

Select the most appropriate option to fill in blank number 99.

Options :

1. capable
2. inept
3. dubious
4. hesitant
- 5.

Answer : capable

[Attempt Mock Test Now](#)

All ixamBee Mock Test are FREE @ www.ixamBee.com



Prepare **50%** Faster