

Direction:

Out of the four alternatives, choose the best option which expresses the meaning of the given word.

- Question No. 1

Garner

Options :

1. assist
2. associate
3. assassinate
4. assemble
- 5.

Answer : assemble

Direction:

Out of the four alternatives, choose the best option which expresses the meaning of the given word.

- Question No. 2

Erratic

Options :

1. inconsistent
2. inevitable
3. inconsiderate
4. inappropriate
- 5.

Answer : inconsistent

Direction:

Out of the four alternatives, choose the best option which expresses the meaning of the given word.

- Question No. 3

Formative

Options :

1. attending
2. waking
3. developing
4. prescribing
- 5.

Answer : developing

Direction:

Out of the four alternatives, choose the best option which expresses the meaning of the given word.

- Question No. 4

Prerogative

Options :

1. encroachment
2. entitlement
3. encouragement
4. enumerate
- 5.

Answer : entitlement

Direction:

Out of the four alternatives, choose the one which best expresses the opposite meaning of the given word.

- Question No. 5

Wrath

Options :

1. truth
2. calm
3. weep
4. hinder
- 5.

Answer : calm

Direction:

Out of the four alternatives, choose the one which best expresses the opposite meaning of the given word.

- Question No. 6

Felicitous

Options :

1. inconsiderate
2. incapable
3. introvert
4. inappropriate
- 5.

Answer : inappropriate

Direction:

In the following question, an idiomatic expression or a proverb is highlighted. Select the alternative which best describes its use in the sentence.

- Question No. 7

You're **walking on thin** ice by continuing to come in late. If the boss notices, you'll be fired.

Options :

1. to be extremely proud
2. to be up for a fight

3. to be in a risky or uncertain situation
4. to be tired of the situation
- 5.

Answer : to be in a risky or uncertain situation

Direction:

In the following question, an idiomatic expression or a proverb is highlighted. Select the alternative which best describes its use in the sentence.

• Question No. 8

He's still a bit of a **square peg in a round hole** here, which I'm sure is at least somewhat intentional, but it proves to be somewhat detrimental this time around.

Options :

1. someone who is appropriate for a position
2. someone who encourages others even though the situation is not favourable
3. someone who tries to find out opportunities in an unfavourable situation
4. someone who does not fit in a particular place or situation
- 5.

Answer : someone who does not fit in a particular place or situation

Direction:

Read the passage and answer the questions that follow.

A long time ago, there lived a Partridge under a big, green tree. One day, he decided to go to the fields and find some food. Seeing plenty of food in the fields, he stayed on for many days. While the Partridge was away, a Hare started living in his house.

When the Partridge had enough to eat, he decided to return. But, he found a Hare living in his house. The Partridge asked the Hare to leave his home. The Hare replied that the house belonged to whoever who lived in it. Soon, both of them started fighting for the house.

There was a Cat in the neighbourhood. They decided to ask the Cat to solve their problem. The Cat acted like he was helpful. He was actually a **cheat**.

The Partridge and the Hare explained their problem to the Cat. The Cat pretended to be hard of hearing. He said that he couldn't hear them and asked them to go closer.

So, the Partridge and the Hare went closer to the Cat. The wicked Cat grabbed them and ate them up.

• Question No. 9

Why did the Partridge leave his home?

Options :

1. He didn't like his home.
2. He went out to search for a new home.
3. He went to the fields to find some food.
4. He gave up his home.
- 5.

Answer : He went to the fields to find some food.

Direction:

Read the passage and answer the questions that follow.

A long time ago, there lived a Partridge under a big, green tree. One day, he decided to go to the fields and find some food. Seeing plenty of food in the fields, he stayed on for many days. While the Partridge was away, a Hare started living in his house.

When the Partridge had enough to eat, he decided to return. But, he found a Hare living in his house. The Partridge asked the Hare to leave his home. The Hare replied that the house belonged to whoever who lived in it. Soon, both of them started fighting for the house.

There was a Cat in the neighbourhood. They decided to ask the Cat to solve their problem. The Cat acted like he was helpful. He was actually a **cheat**.

The Partridge and the Hare explained their problem to the Cat. The Cat pretended to be hard of hearing. He said that he couldn't hear them and asked them to go closer.

So, the Partridge and the Hare went closer to the Cat. The wicked Cat grabbed them and ate them up.

- Question No. 10

Who took over the Partridge's home?

Options :

1. another Partridge
2. the Hare
3. the Cat
4. a Peacock
- 5.

Answer : the Hare

Direction:

Read the passage and answer the questions that follow.

A long time ago, there lived a Partridge under a big, green tree. One day, he decided to go to the fields and find some food. Seeing plenty of food in the fields, he stayed on for many days. While the Partridge was away, a Hare started living in his house.

When the Partridge had enough to eat, he decided to return. But, he found a Hare living in his house. The Partridge asked the Hare to leave his home. The Hare replied that the house belonged to whoever who lived in it. Soon, both of them started fighting for the house.

There was a Cat in the neighbourhood. They decided to ask the Cat to solve their problem. The Cat acted like he was helpful. He was actually a **cheat**.

The Partridge and the Hare explained their problem to the Cat. The Cat pretended to be hard of hearing. He said that he couldn't hear them and asked them to go closer.

So, the Partridge and the Hare went closer to the Cat. The wicked Cat grabbed them and ate them up.

- Question No. 11

What did the Hare reply when the Partridge came home?

Options :

1. The Hare replied that he would move out as quickly as possible.
2. The Hare said that they would conduct a race and the winner gets the house.
3. The Hare replied that they could share the house.
4. The Hare replied that the house belongs to whoever who lived in it.
- 5.

Answer : The Hare replied that the house belongs to whoever who lived in it.

Direction:

Read the passage and answer the questions that follow.

A long time ago, there lived a Partridge under a big, green tree. One day, he decided to go to the fields and find some food. Seeing plenty of food in the fields, he stayed on for many days. While the Partridge was away, a Hare started living in his house.

When the Partridge had enough to eat, he decided to return. But, he found a Hare living in his house. The Partridge asked the Hare to leave his home. The Hare replied that the house belonged to whoever who lived in it. Soon, both of them started fighting for the house.

There was a Cat in the neighbourhood. They decided to ask the Cat to solve their problem. The Cat acted like he was helpful. He was actually a **cheat**.

The Partridge and the Hare explained their problem to the Cat. The Cat pretended to be hard of hearing. He said that he couldn't hear them and asked them to go closer.

So, the Partridge and the Hare went closer to the Cat. The wicked Cat grabbed them and ate them up.

- Question No. 12

What did the Cat do to solve the problem?

Options :

1. The Cat ate the Hare and the Partridge.
2. The Cat divided the house equally between the Hare and the Partridge.
3. The Cat said the house belonged to the original owner.
4. The Cat agreed that the house belonged to whoever who lived in it.

5.

Answer : The Cat ate the Hare and the Partridge.

Direction:

Read the passage and answer the questions that follow.

A long time ago, there lived a Partridge under a big, green tree. One day, he decided to go to the fields and find some food. Seeing plenty of food in the fields, he stayed on for many days. While the Partridge was away, a Hare started living in his house.

When the Partridge had enough to eat, he decided to return. But, he found a Hare living in his house. The Partridge asked the Hare to leave his home. The Hare replied that the house belonged to whoever who lived in it. Soon, both of them started fighting for the house.

There was a Cat in the neighbourhood. They decided to ask the Cat to solve their problem. The Cat acted like he was helpful. He was actually a **cheat**.

The Partridge and the Hare explained their problem to the Cat. The Cat pretended to be hard of hearing. He said that he couldn't hear them and asked them to go closer.

So, the Partridge and the Hare went closer to the Cat. The wicked Cat grabbed them and ate them up.

- Question No.13

Which of the following is a near synonym for the word 'cheat' that is mentioned in the passage?

Options :

1. host
2. hoaxer
3. hostile
4. humble
- 5.

Answer : hoaxer

- Question No. 14

Select the wrongly spelt word.

Options :

1. Emmigration
2. Legislative
3. Conflict
4. Acoustic
- 5.

Answer : Emmigration

- Question No. 15

Select the wrongly spelt word.

Options :

1. Cumulative
2. Culminating
3. Contributing
4. Colaborating
- 5.

Answer : Colaborating

Direction:

Select the most appropriate option to fill in the blank in the given sentence.

- Question No. 16

His critics that the director has lost his Midas touch as his last three films have turned turtle at the box office.

Options :

1. says

2. tells
3. has telled
4. say
- 5.

Answer : say

Direction:

Select the most appropriate option to fill in the blank in the given sentence.

• Question No. 17

I am always very clear what I want to do and this time it was no different.

Options :

1. for
2. of
3. at
4. from
- 5.

Answer : of

Direction:

In each of the following questions, choose the word which can be substitute for the given phrase/sentence.

• Question No. 18

The loop of rope with a running knot used to hang a person.

Options :

1. Noose
2. Cable
3. Cord
4. Chord

5.

Answer : Noose

Direction:

In each of the following questions, choose the word which can be substitute for the given phrase/sentence.

- Question No. 19

Yearly celebration of a date or an event .

Options :

1. Centenary
2. Jubilee
3. Anniversary
4. Birthday
- 5.

Answer : Anniversary

Direction:

Select the correct passive form of the given sentence.

- Question No. 20

Hate the seven deadly sins.

Options :

1. The seven deadly sins be hated.
2. The seven deadly sins should have been hated.
3. The seven deadly sins should be hated.
4. The seven deadly sins are to be hated.
- 5.

Answer : The seven deadly sins should be hated.

Direction:

Select the correct passive form of the given sentence.

• Question No. 21

They claim to have seen the robber in several cities.

Options :

1. The robber is claimed to have seen in several cities.
2. The robber is claimed to be seen in several cities.
3. The robber is being seen in several cities.
4. The robber is claimed to have been seen in several cities.
- 5.

Answer : The robber is claimed to have been seen in several cities.

Direction:

Given below are four jumbled sentences. Out of the given options select the one that gives their correct order.

• Question No. 22

- A. Coronavirus came like a storm and made us realize many pieces of stuff we were unaware of.
- B. This will pass but the point is once we pass this hurdle who are we left with to live our life or to make memories.
- C. People started falling sick and everyone in the world was chanting only one phrase "This shall too pass".
- D. It seems strange how this year turned out to be a complete disaster.

Options :

1. CABD
2. DACB
3. BDAC
4. BCDA
- 5.

Answer : DACB

Direction:

Given below are four jumbled sentences. Out of the given options pick the one that given their correct order.

• Question No. 23

A. The first to arrive is the Ruddy Shelduck followed by Mallard, Coot, Cormorant, Egrets, and Northern Shoveller to name a few.

B. Asan also has the privilege of hosting a more than thirty-year- old nesting site of the Pallas Fishing Eagle, which it reconstructs every winter.

C. Birds of prey like Pallas Fishing Eagle, Marsh Harrier, Greater Spotted Eagle, Osprey and Steppe Eagle add to this magnificent diversity.

D. By the end of October, the Asan witnesses the arrival of migrants from Palaeartic region.

Options :

1. ACBD
2. BCDA
3. BADC
4. DACB
- 5.

Answer : DACB

Direction:

Which of the following best expresses the meaning of the idiom / phrase given?

• Question No. 24

To pick holes

Options :

1. to criticize someone
2. To make holes
3. to ruin something

4. to harm someone

5.

Answer : to criticize someone

Direction:

Which of the following best expresses the meaning of the idiom / phrase given?

• Question No. 25

Leaps and bounds

Options :

1. Slowly

2. steadily

3. Regularly

4. Very rapidly

5.

Answer : Very rapidly

• Question No. 26

The first woman to swim English Channel?

Options :

1. Aarti shah

2. Gertrude Ederle

3. Shivangi singh

4. None of these

5.

Answer : Gertrude Ederle

• Question No. 27

What's the study of insects called?

Options :

1. Taxonomy
2. Entomology
3. Cytology
4. Osteology
- 5.

Answer : Entomology

- Question No. 28

What was the name of Indian army operation in 1988?

Options :

1. Operation Talwar
2. Operation Parakram
3. Operation Python
4. Operation Cactus
- 5.

Answer : Operation Cactus

- Question No. 29

What is the name of authorised biography of Nelson Mandela?

Options :

1. Long Walk to Freedom
2. Prison letters
3. The struggle is my life
4. Wings of fire
- 5.

Answer : Long Walk to Freedom

- Question No. 30

First destroyer of Indian Navy Decommissioned in 2021?

Options :

1. INS Ranjit
2. INS Rajput
3. INS RANVIR
4. INS KOCHI
- 5.

Answer : INS Rajput

- Question No. 31

Length of Cricket pitch?

Options :

1. 20.12m
2. 22m
3. 17.02m
4. 24m
- 5.

Answer : 20.12m

- Question No. 32

Odometer is used to measure what?

Options :

1. Blood pressure

2. Distance
3. Frequency
4. Time period
- 5.

Answer : Distance

- Question No. 33

When was Project Tiger started in India?

Options :

1. 01 APRIL 1973
2. 01 JULY 1984
3. 01 MARCH 1961
4. 01 AUGUST 1991
- 5.

Answer : 01 APRIL 1973

- Question No. 34

1. Where is Paratroopers Training school?

Options :

1. Kanpur
2. Aurangabad
3. Chilka
4. Agra
- 5.

Answer : Agra

- Question No. 35

What is the chemical formula of pop (plaster of Paris)?

Options :

1. $\text{CaSO}_4 \cdot 2\text{H}_2\text{O}$
2. NaHCO_3
3. $\text{Ca}_3(\text{PO}_4)_2$
4. Na_2PO_4
- 5.

Answer : $\text{CaSO}_4 \cdot 2\text{H}_2\text{O}$

- Question No. 36

How many bones are found in the upper limb?

Options :

1. 30
2. 22
3. 10
4. 5
- 5.

Answer : 30

- Question No. 37

Who received Bharat Ratna and Nishan-e-Pakistan?

Options :

1. Madan mohan malviya
2. Atal bihari bajpayee
3. Moraraji desai

4. Sachin tendulkar

5.

Answer : Moraraji desai

- Question No. 38

Floating national park is in which state?

Options :

1. Assam

2. Arunachal Pradesh

3. Kerala

4. Manipur

5.

Answer : Manipur

- Question No. 39

Katie Taylor is famous boxer from which country?

Options :

1. England

2. USA

3. IRELAND

4. Switzerland

5.

Answer : IRELAND

- Question No. 40

Who appoints the Chief Election Commissioner?

Options :

1. President
2. Chief justice of India
3. Prime Minister
4. Lok sabha speaker
- 5.

Answer : President

• Question No. 41

The Kalahari dessert is located on which among the following continents?

Options :

1. Asia
2. Africa
3. North America
4. Oceania
- 5.

Answer : Africa

• Question No. 42

Erza cup is associated with which sport?

Options :

1. Badminton
2. Polo
3. Table tennis
4. Golf
- 5.

Answer : Polo

- Question No. 43

When was the first five year plan started?

Options :

1. 1950
2. 1951
3. 1955
4. 1956
- 5.

Answer : 1951

- Question No. 44

What is the capital of LAOS?

Options :

1. Dili
2. Vientiane
3. Ramallah
4. Nusantara
- 5.

Answer : Vientiane

- Question No. 45

Largest fresh water lake in ASIA is?

Options :

1. Wular
2. Baikal
3. Caspian

4. None of these.

5.

Answer : Caspian

- Question No. 46

When was planning commission of INDIA formed?

Options :

1. 1950

2. 1955

3. 1956

4. 1965

5.

Answer : 1950

- Question No. 47

Castle term is related to which sport?

Options :

1. Baseball

2. Hockey

3. Chess

4. Snooker

5.

Answer : Chess

- Question No. 48

First FIFA world cup took place in?

Options :

1. 1930
2. 1936
3. 1920
4. 1924
- 5.

Answer : 1930

• Question No. 49

Which of the following was not in the AKBAR'S Navratnas?

Options :

1. Raja man singh
2. Birbal
3. Todarmal
4. Harisen
- 5.

Answer : Harisen

• Question No. 50

Greenland Island is in which ocean?

Options :

1. Pacific ocean
2. Indian ocean
3. North Atlantic ocean
4. Arctic ocean
- 5.

Answer : North Atlantic ocean

- Question No. 51

Deep: shallow:: Lethargy:?

Options :

1. Active
2. Slow
3. Narrow
4. Strong
- 5.

Answer : Active

- Question No. 52

Peace : Chaos :: Creation :: ?

Options :

1. Decrease
2. Build
3. Destruction
4. Renovation
- 5.

Answer : Destruction

- Question No. 53

Lion: Lioness:: Dog:?

Options :

1. Bitch
2. Doe
3. Chicken

4. Cub

5.

Answer : Bitch

- Question No. 54

Moon : Satellite :: Mars :?

Options :

1. Planet

2. Air

3. Universe

4. Water

5.

Answer : Planet

Direction:

In each of the following questions, select the related letter/number from the given alternatives.

- Question No. 55

Egypt : Cairo :: Iraq:?

Options :

1. Vienna

2. Baghdad

3. Havana

4. Dhaka

5.

Answer : Baghdad

Direction:

Select the odd letters/number/symbols form the given alternatives.

- Question No. 56

Find the one which does not belong to that group?

Options :

1. LMN
2. RQP
3. UVW
4. XYZ
- 5.

Answer : RQP

Direction:

Find the one which does not belong to that group?

- Question No. 57

Find the one which does not belong to that group?

Options :

1. EF - K
2. LM - Y
3. AO - P
4. GF - O
- 5.

Answer : GF - O

Direction:

Find the one which does not belong to that group?

- Question No. 58

Find the one which does not belong to that group?

Options :

1. Carpet
2. Mat
3. Curtain
4. Rug
- 5.

Answer : Curtain

Direction:

Find the one which does not belong to that group?

- Question No. 59

Find the one which does not belong to that group?

Options :

1. Yamuna
2. Howrah
3. Ganga
4. Indus
- 5.

Answer : Howrah

Direction:

Find the one which does not belong to that group?

- Question No. 60

Find the one which does not belong to that group?

Options :

1. Sewing

- 2. Kettel
- 3. Induction
- 4. Mixer
- 5.

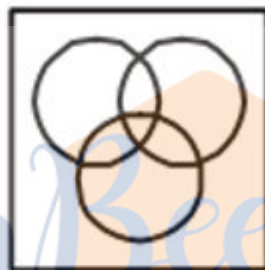
Answer : Sewing

• Question No. 61

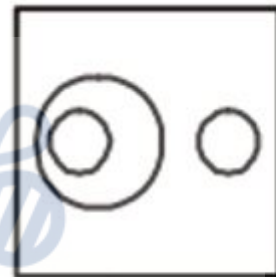
Identify the figure which best represents the relationship among Flower, Rose, and Door.



(1)



(2)



(3)



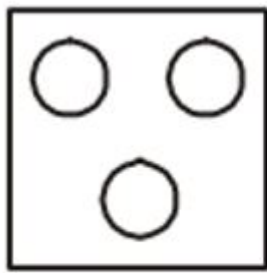
Options :

- 1. 1
- 2. 2
- 3. 3
- 4. 4
- 5.

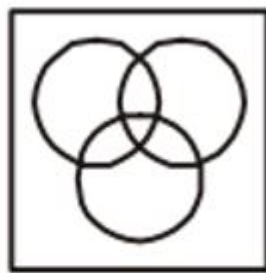
Answer : 3

• Question No. 62

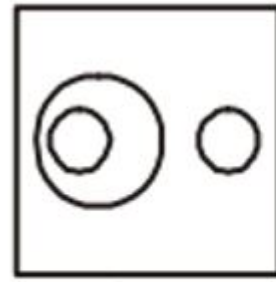
Identify the figure which best represents the relationship among Man, Woman, and Human being.



(1)



(2)



(3)



Options :

1.1

2.2

3.3

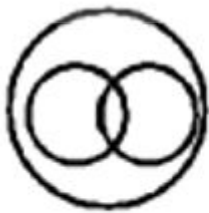
4.4

5.

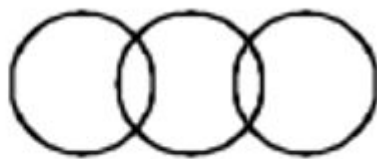
Answer : 4

• Question No. 63

Identify the diagram that best represents the relationship among classes given below: Sportsmen, Footballer, Goal Keeper.



(1)



(2)



(3)



Options :

1.1

2.2

3.3

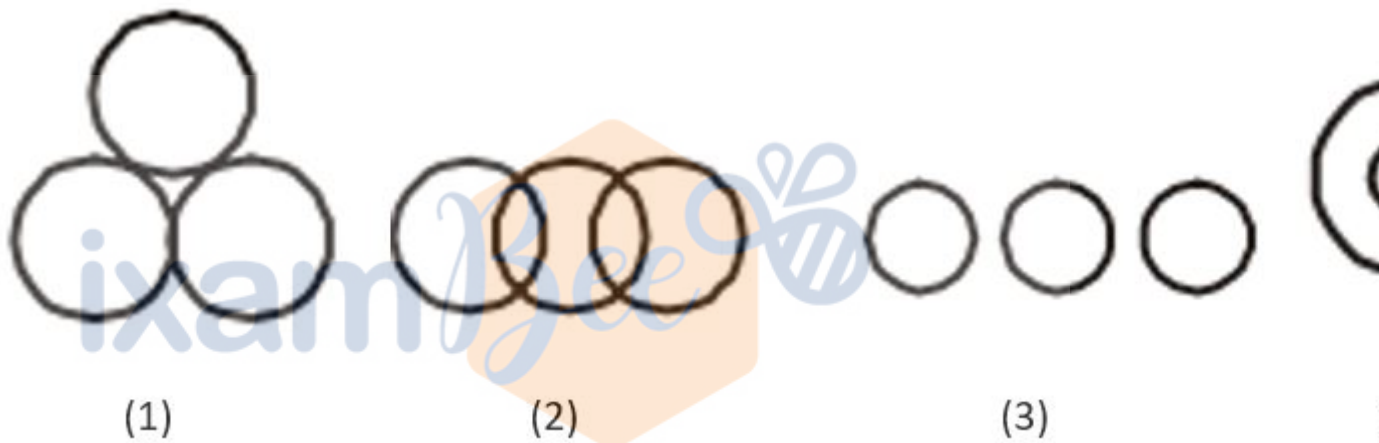
4. 4

5.

Answer : 3

• Question No. 64

Identify the diagram that best represents the relationship among the classes given below: Males, Brothers, and Doctors.



Options :

1. 1

2. 2

3. 3

4. 4

5.

Answer : 4

• Question No. 65

Identify the diagram that best represents the relationship among the classes given below: Bus, Driver and Road.



(1)



(2)



(3)

Options :

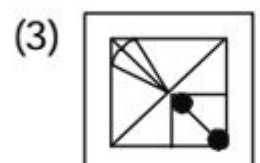
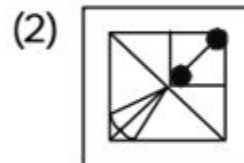
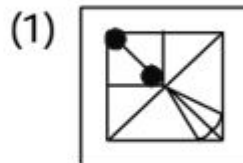
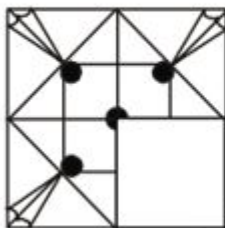
- 1.1
- 2.2
- 3.3
- 4.4
- 5.

Answer : 1

• Question No. 66

In each of the following questions which one of the answer figures shall complete the given question figure.

Question Figure : **Answer Figures :**



(4)

Options :

- 1.1
- 2.2
- 3.3

4. 4

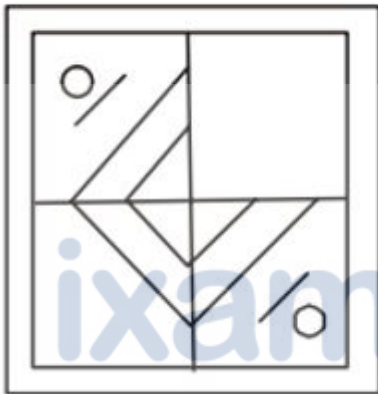
5.

Answer : 1

- Question No. 67

In each of the following questions which one of the answer figures shall complete the given question figure.

Question Figure : **Answer Figures :**



(1)



(2)



(3)



(4)

Options :

1. 1

2. 2

3. 3

4. 4

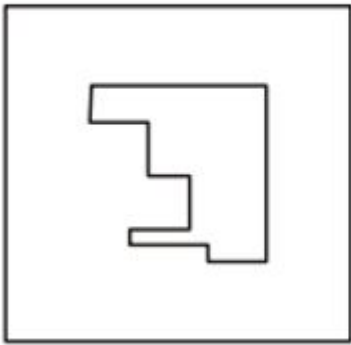
5.

Answer : 3

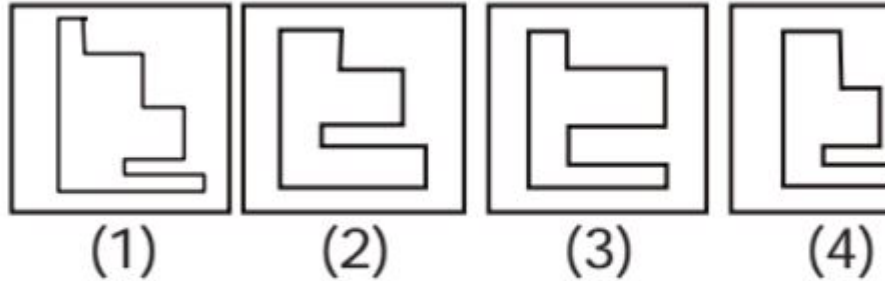
- Question No. 68

In each of the following questions which one of the answer figures shall complete the given question figure.

Question Figure :



Answer Figures :



Options :


- 1. 1
- 2. 2
- 3. 3
- 4. 4
- 5.

Answer : 1

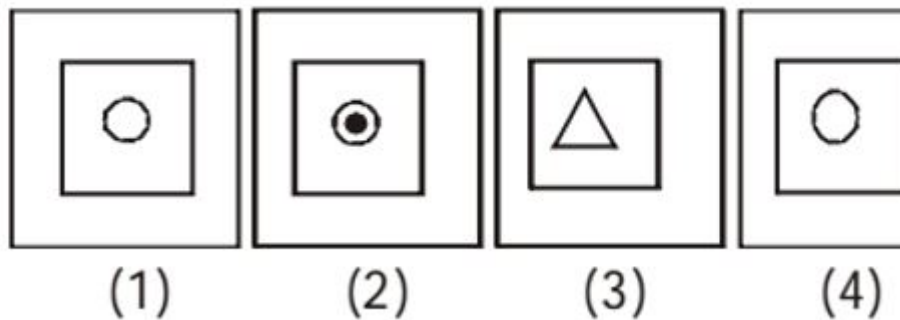
• Question No. 69

In each of the following questions which one of the answer figures shall complete the given question figure.

Question Figure :



Answer Figures :



Options :

- 1.1
- 2.2
- 3.3
- 4.4
- 5.

Answer : 1

- Question No. 70

In each of the following questions which one of the answer figures shall complete the given question figure.

Question Figure : **Answer Figures :**



(1)



(2)



(3)



(4)

Options :

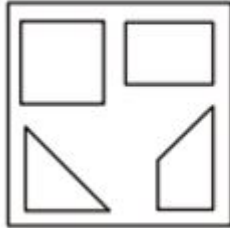
- 1.1
- 2.2
- 3.3
- 4.4
- 5.

Answer : 3

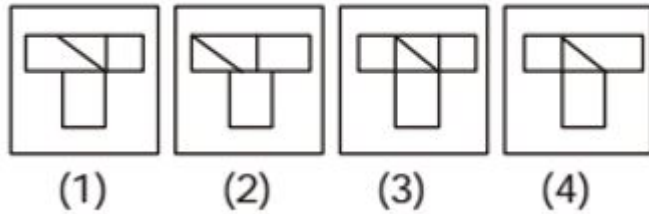
- Question No. 71

In the following question, among the four answer figures which one can be formed from the cut out pieces given below?

Question Figures :



Answer Figures :



Options :

- 1. 1
- 2. 2
- 3. 3
- 4. 4
- 5.

Answer : 4

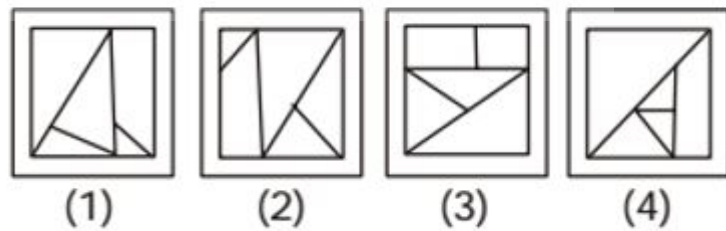
- Question No. 72

In the following question, among the four answer figures which one can be formed from the cut out pieces given below?

Question Figure :



Answer Figures :



Options :

- 1. 1
- 2. 2
- 3. 3
- 4. 4

5.

Answer : 2

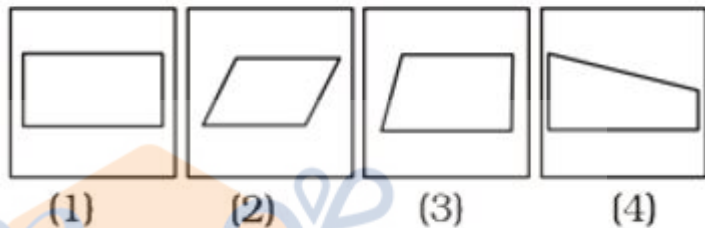
- Question No. 73

In the following question, among the four answer figures which one can be formed from the cut out pieces given below?

Question Figure :



Answer Figures :



Options :

1. 1

2. 2

3. 3

4. 4

5.

Answer : 1

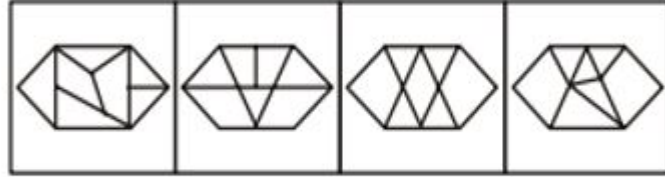
- Question No. 74

In the following question, among the four answer figures which one can be formed from the cut out pieces given below?

Question Figure :



Answer Figures :



(1)

(2)

(3)

(4)

Options :

1.1

2.2

3.3

4.4

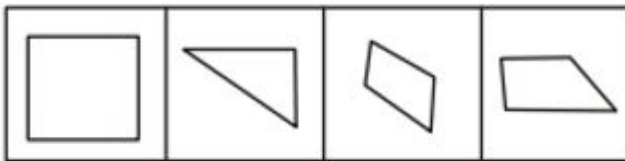
5.

Answer : 3

• Question No. 75

In the following question, among the four answer figures which one can be formed from the cut out pieces given below?

Question Figure :



Answer Figure :



(1)

(2)

(3)

(4)

Options :

1.1

2.2

3.3

4.4


5.

Answer : 3

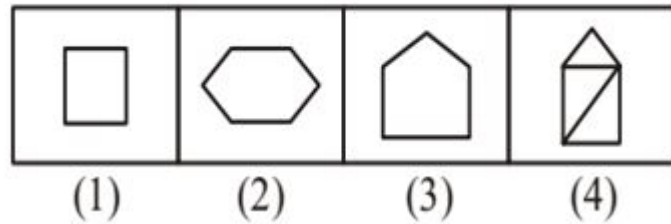
- Question No. 76

Find the question mark ? figure from answer figure.

Question Figures :



Answer Figures :



Options :

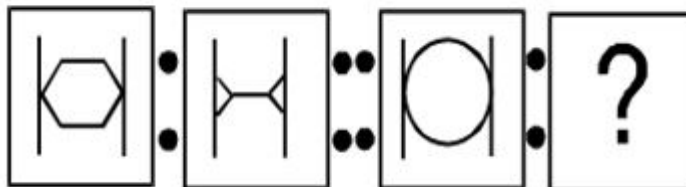
1. 1
2. 2
3. 3
4. 4
- 5.

Answer : 2

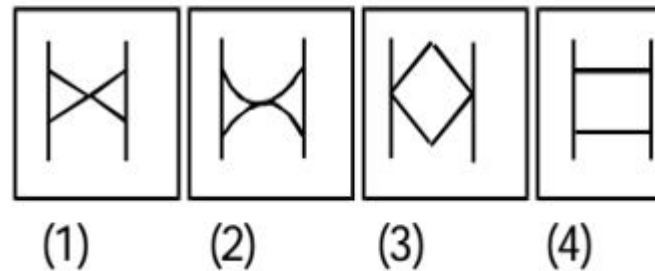
- Question No. 77

Find the question mark ? figure from answer figure.

Question Figures :



Answer Figures :



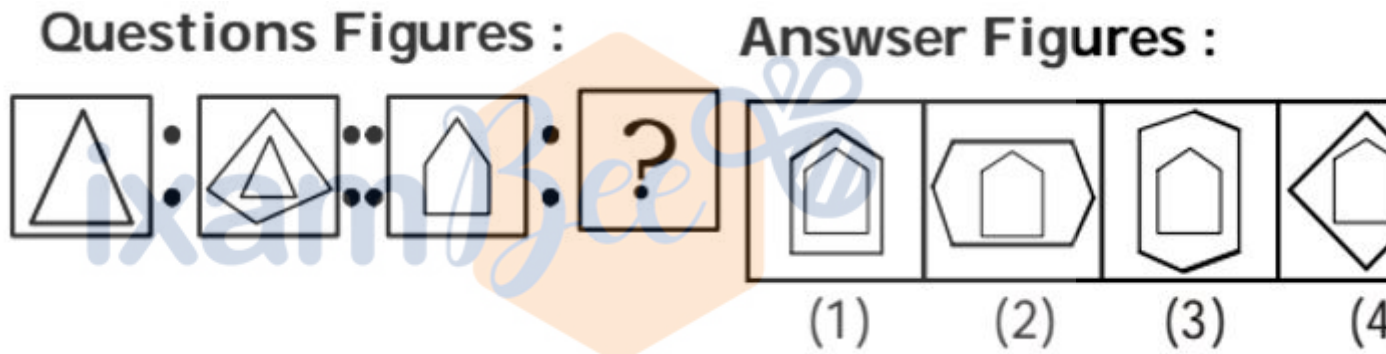
Options :

- 1.1
- 2.2
- 3.3
- 4.4
- 5.

Answer : 2

- Question No. 78

Find the question mark ? figure from answer figure.



Options :

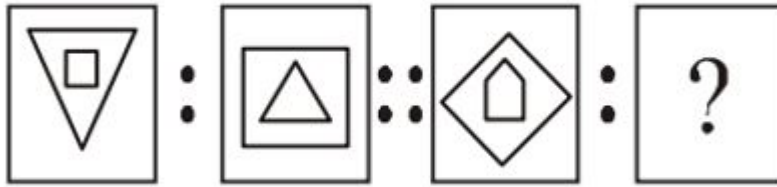
- 1.1
- 2.2
- 3.3
- 4.4
- 5.

Answer : 3

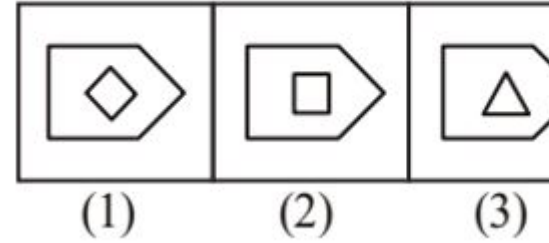
- Question No. 79

Find the question mark ? figure from answer figure.

Question Figures :



Answer Figures :



Options :


- 1. 1
- 2. 2
- 3. 3
- 4. 4
- 5.

Answer : 1

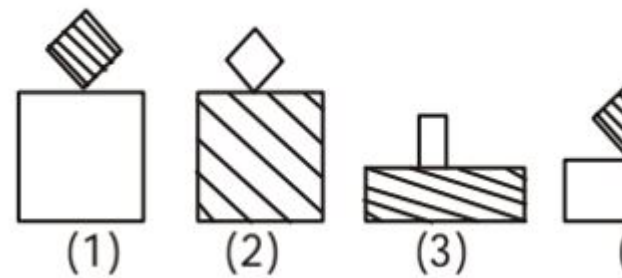
- Question No. 80

Find the question mark ? figure from answer figure.

Question Figures :



Answer Figures :



Options :

- 1. 1
- 2. 2
- 3. 3

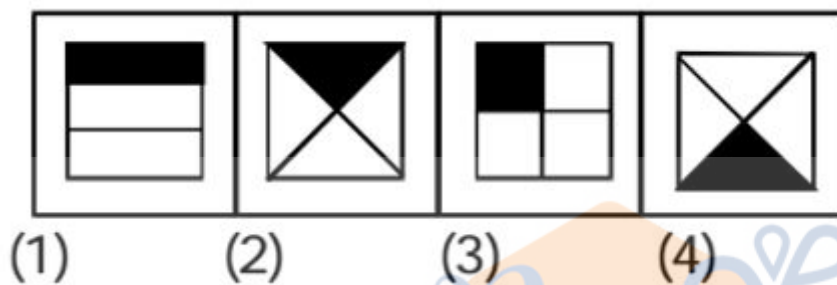
4. 4

5.

Answer : 3

- Question No. 81

In each of the following questions select the one which is different from the other three responses.



Options :

1. 1

2. 2

3. 3

4. 4

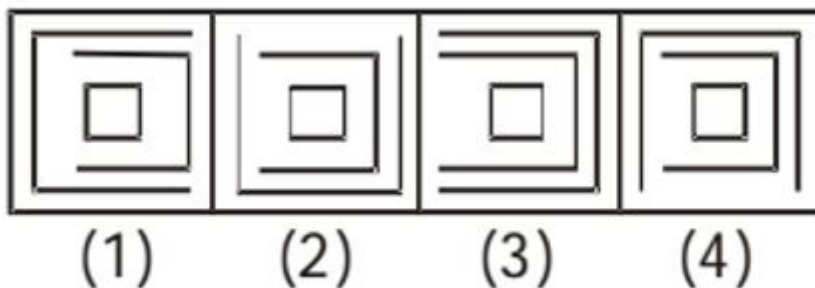
5.

Prepare 50% Faster

Answer : 1

- Question No. 82

In each of the following questions select the one which is different from the other three responses.



Options :

1. 1
2. 2
3. 3
4. 4
- 5.

Answer : 3

• Question No. 83

In a family of 10, the men eat on average 70kg of food and women eat on an average 45kg of food. The men and women are equal in number. A woman joined the family for dinner and the average consumption became 60. How much did woman eat (in kgs)?

Options :

1. 115
2. 85
3. 70
4. 60
- 5.

Answer : 85

• Question No. 84

Ram spent 20% of his monthly income on study and 72% of the remaining on rent. If amount spent on rent is Rs. 2016, then find the amount spent on study.

Options :

1. Rs. 700
2. Rs. 750
3. Rs. 720
4. Rs. 710
- 5.

Answer : Rs. 700

- Question No. 85

A shopkeeper sells an article for Rs 78 and earns twice the profit that he would have earned on selling this article for Rs 50. Find the C.P of this article (in Rs).

Options :

1. 21
2. 22
3. 25
4. 23
- 5.

Answer : 22

- Question No. 86

There is a fraction such that if we add $11/30$ to it then it gets inverse & if we subtract 1 from numerator then the fraction becomes $2/3$. What is the fraction?

Options :

1. $5/7$
2. $6/5$
3. $5/6$
4. $5/8$
- 5.

Answer : $5/6$

Direction:

Simplify the following questions:

- Question No. 87

$$16 - 9 + 18 \times 25 \div 5 - 36 = ?$$

Options :

1. 61
2. 66
3. 63
4. 68
- 5.

Answer : 61

• Question No. 88

X can do a piece of work in 20 days. He worked at it for 5 days and then Y finished it in 15 days. In how many days can X and Y together finish the work?

Options :

1. 10 days
2. 18 days
3. 14 days
4. 13 days
- 5.

Answer : 10 days

• Question No. 89

Two pipes A and B can fill a tank in 25 hours and 75 hours respectively. If both the pipes are opened simultaneously, how much time both will take to fill the tank (in hrs)?

Options :

1. 17 hrs 8 min
2. 20 hrs
3. 18 hrs
4. 18 hrs 45 min
- 5.

Answer : 18 hrs 45 min

- Question No. 90

A took loan from a bank at the rate of 16%p.a. simple interest. After 5 years he had to pay Rs.5600 interest only for the period. The principal amount borrowed by him was:

Options :

1. 6875
2. 5500
3. 7000
4. 8200
- 5.

Answer : 7000

- Question No. 91

What is the fourth proportional to 6, 7, 12?

Options :

1. 20
2. 14
3. 33
4. 42
- 5.

Answer : 14

- Question No. 92

A and B together can complete a piece of work in 30 days while A alone can complete 50% of the work in 25 days. Find the time taken by B to complete 20% of the work.

Options :

1. 17 days
2. 16 days

3. 15 days
4. 24 days
- 5.

Answer : 15 days

• Question No. 93

The marked price of an article is Rs 1500. A shopkeeper sells it by giving 20% discount on its marked price. If the cost price of the article is Rs 991. then his profit (in RS) is:

Options :

1. 319
2. 189
3. 229
4. 209
- 5.

Answer : 209

• Question No. 94

The average age of a group of 10 students is 30 years. Two persons of age 25 years and 30 years, left the group and 2 persons of age 54 years and 101 years, joined the group. Find the new average age of the group.

Options :

1. 37 years
2. 31 years
3. 43 years
4. 40 years
- 5.

Answer : 40 years

• Question No. 95

Two pipes A and B would fill a cistern in 15 and 45 hours respectively. If both pipes are opened together, find when the first pipe must be turned off so that the cistern may be just filled in 18 hours?

Options :

1. 9 hours
2. 8 hours
3. 6 hours
4. 3 hours
- 5.

Answer : 9 hours

• Question No. 96

The difference between compound interest and simple interest at the same rate for Rs. 2100 for 2 years is Rs. 21. The rate of interest per annum is:

Options :

1. 15%
2. 8%
3. 12%
4. 10%
- 5.

Answer : 10%

• Question No. 97

The difference between the cost price and sale price of an article is Rs.550 and the profit is 25%. Find the selling price.

Options :

1. Rs.2750
2. Rs.2960
3. Rs.2120
4. Rs.2500
- 5.

Answer : Rs.2750

• Question No. 98

If A varies directly as B and inversely as C and $A = 9$, $B = 3$ and $C = 4$, what is the value of A when $B = 3$ and $C = 2$?

Options :

1. 24
2. 18
3. 30
4. 16
- 5.

Answer : 18

• Question No. 99

P spends 22% of his salary on transportation, 30% on food, 15% on children's education and 25% on medical. He deposits the remaining amount of Rs. 640 in bank. How much total amount does he spend on transportation and food together?

Options :

1. Rs. 4800
2. Rs. 4560
3. Rs. 4160
4. Rs. 4060
- 5.

Answer : Rs. 4160

- Question No. 100

Two numbers are less than a third number by 25% and 40% respectively. Find the percent by which the second number is less than the first.

Options :

1. 15%
2. 12%
3. 10%
4. 20%
- 5.

Answer : 20%

[Attempt Mock Test Now](#)

All ixamBee Mock Test are FREE @ www.ixamBee.com


Prepare **50%** Faster