

Direction:

Select the related word/letters/number from the given alternatives.

- Question No. 1

Botany : Plants : : Cytology : ?

Options :

1. Finger prints
2. Ligaments
3. Living cells
4. Insects
- 5.

Answer : Living cells

Direction:

Select the related word/letters/number from the given alternatives.

- Question No. 2

ACQUIRE : ERIUQCA : : ? : YPAREHT

Options :

1. TRHEAPY
2. THEPRAY
3. THERAPY
4. THPYERA
- 5.

Answer : THERAPY

Direction:

Select the related word/letters/number from the given alternatives.

- Question No. 3

Lt : Og :: Sc : ?

Options :

1. Hx
2. mC
3. xE
4. Pk
- 5.

Answer : Hx

Direction:

Select the related word/letters/number from the given alternatives.

- Question No. 4

16 : 272 :: 9 : ?

Options :

1. 65
2. 78
3. 83
4. 90
- 5.

Answer : 90

- Question No. 5

Find out the odd word/letters/number/number pair from the given alternatives.

Options :

1. Sparrow

2. Peacock
3. Parrot
4. Tiger
- 5.

Answer : Tiger

- Question No. 6

Find out the odd word/letters/number/number pair from the given alternatives.

Options :

1. RI
2. EV
3. JQ
4. GH
- 5.

Answer : GH

- Question No. 7

Find out the odd word/letters/number/number pair from the given alternatives.

Options :

1. 6424
2. 8864
3. 5735
4. 2819
- 5.

Answer : 2819

- Question No. 8

Find out the odd word/letters/number/number pair from the given alternatives.

Options :

1. STV
2. DEG
3. GHJ
4. LMN
- 5.

Answer : LMN

• Question No. 9

A series is given with one term missing. Choose the correct alternative from the given ones that will complete the series.

DEFGMNOPWXYZRST ?

Options :

1. V
2. U
3. W
4. F
- 5.

Answer : U

• Question No. 10

A series is given with one term missing. Choose the correct alternative from the given ones that will complete the series.

325, 309, 284, ?, 199

Options :

1. 222
2. 279
3. 268

4. 248

5.

Answer : 248

Direction:

Two statements are given followed by two conclusions I and II. You have to consider the statements to be true even if they seem to be at variance from commonly known facts. You have to decide which of the given conclusions, if any, follow from the given statements.

• Question No. 11

Statements: All bricks are walls

All walls are poster.

Conclusions: I. Some bricks are poster.

II. Some walls are bricks.

Options :

1. Conclusion I follows.

2. Conclusion II follows.

3. Either conclusion I or II follows

4. Both conclusions I and II follow

5.

Answer : Both conclusions I and II follow

• Question No. 12

In a certain code language '781' means 'old is gold', '270' means 'sun is hot' and '098' means 'sun rays gold'. What number is the code for 'gold'.

Options :

1. 8

2. 0

3. 1

4. 9

5.

Answer : 8

- Question No. 13

A series is given with one term missing. Choose the correct alternative from the given ones that will complete the series.

EF, HI, LM, ? , WX

Options :

1. ZA

2. QR

3. CD

4. GE

5.

Answer : QR

- Question No. 14

The average age of 26 subordinates in an office is 32 years. If the age of Manager is added, the average age increases to 33 years. What is the age of the Manager?

Options :

1. 26

2. 36

3. 46

4. 59

5.

Answer : 59

- Question No. 15

Arrange the given words in the sequence in which they occur in the dictionary.

- i. Taxable
- ii. Transit
- iii. Tobacco
- iv. Tonight

Options :

- 1. ii, iii, iv, i
- 2. i, iii, iv, ii
- 3. iv, i, ii, iii
- 4. i, ii, iii, iv
- 5.

Answer : i, iii, iv, ii

Direction:

In a certain code language, "CHANGE" is written as "EJCPIG". How is "RATHER" written in that code language?

- Question No. 16

Options :

- 1. TGCVJT
- 2. TCGVJT
- 3. TCVJGT
- 4. TVJCGT
- 5.

Answer : TCVJGT

Direction:

In the following question, select the missing number from the given series.

2	3	7
7	6	8
5	9	4
37	57	?

- Question No. 17

Options :

1. 49
2. 39
3. 31
4. 27
- 5.

Answer : 39

- Question No. 18

If "A" denotes "multiplied by", "C" denotes "subtracted from", "D" denotes "added to" and "B" denotes "divided by", then

58 C 42 D 180 B 3 A 12 = ?

Options :

1. 736
2. 750
3. 830
4. 931

5.

Answer : 736

- Question No. 19

Which set of letters when sequentially placed at the gaps in the given letter series shall complete it?

k_m_kl_n_lm_

Options :

1. klmkn
2. Inkkk
3. Inmkn
4. nlkmn
- 5.

Answer : Inmkn

Direction:

Mahesh travels 30 km towards the south, and then takes a left, and travels 45 km further. Again, he takes a left and travels 30 km further. How far is he from his original position?

- Question No. 20

Options :

1. 55 km
2. 25 km
3. 35 km
4. 45 km
- 5.

Answer : 45 km

- Question No. 21

A word is represented by only one set of numbers as given in any one of the alternatives. The sets of numbers given in the alternatives are represented by two classes of alphabets as in two matrices given below. The columns and rows of Matrix I are numbered – form 0 to 4 and that Matrix II are numbered from 5 to 9. A letter from these matrices can be represented first by its row and next by its column, e.g., ‘V’ can be represented by 01, 14, etc. and F can be represented by 55, 66 etc. Similarly, you have to identify the set for the word **PHONE**.

MATRIX – I

	0	1	2	3	4
0	K	V	H	S	A
1	H	S	A	K	V
2	A	K	V	H	S
3	V	H	S	A	K
4	S	A	K	V	H

MATRIX – II

	5	6	7	8
5	F	N	E	O
6	E	F	P	N
7	P	O	F	E
8	O	P	N	F
9	N	E	O	P

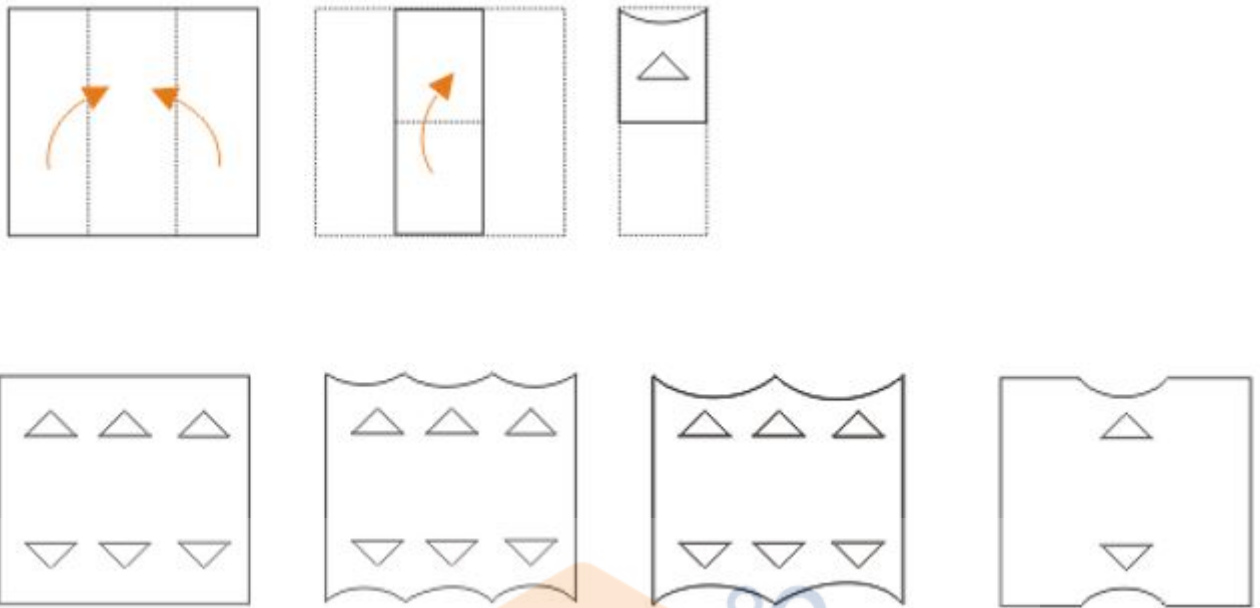
Options :

1. 59, 44, 69, 97, 96
2. 75, 32, 44, 85, 78
3. 98, 44, 97, 95, 96
4. 86, 10, 69, 95, 87
- 5.

Answer : 98, 44, 97, 95, 96

Direction:

In the question, a piece of paper is folded and cut as shown below in the questions figures. From the given option figures, which one indicates how it will appear when opened.



• Question No. 22

Options :

1. 1

2. 2

3. 3

4. 4

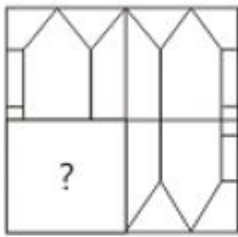
5.

Answer : 2

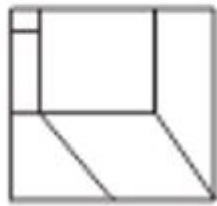
Direction:

Which Answer Figure will complete the pattern in the figure?

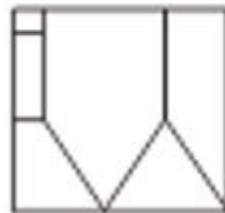




(1)



(2)



(3)



(4)

• Question No. 23

Options :

1. 3

2. 2

3. 1

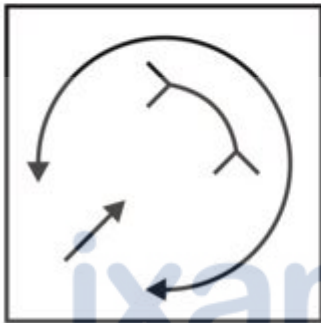
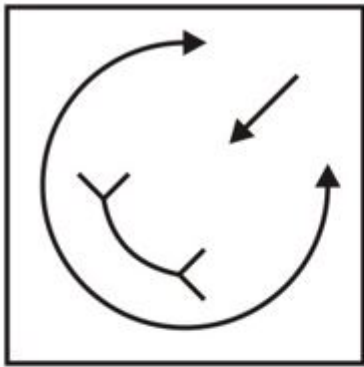
4. 4

5.

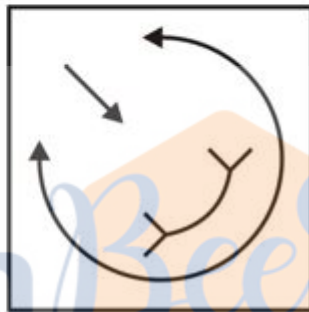
Answer : 3

Direction:

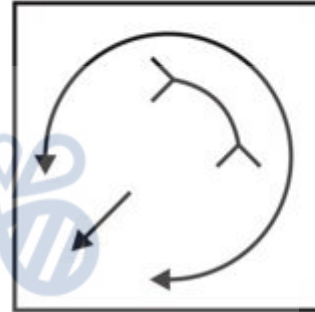
A mirror is placed and which of the Answer Figures is the right image of the given Question Figure?



(1)



(2)



(3)



(4)

• Question No. 24

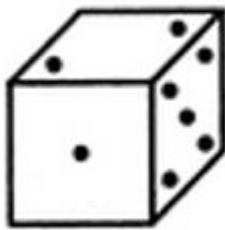
Options :

- 1. 1
- 2. 2
- 3. 3
- 4. 4
- 5. 5


Answer : 2

Direction:

Observe the dots on a dice (one to six dots) in the following figures. How many dots are contained on the face opposite to that containing four dots?



(i)



(ii)

- Question No. 25

Options :

1. 6
2. 3
3. 2
4. Cannot be determined
- 5.

Answer : 2

- Question No. 26

The Indo Greeks were the first ruler in India who issued

Options :

1. Gold coins
2. Silver coins
3. Bronze coins
4. Paper currency
- 5.

Answer : Gold coins

- Question No. 27

_____ is also known as the 'Tiger State' of India.

Options :

1. Madhya Pradesh
2. Uttar Pradesh
3. Assam
4. West Bengal
- 5.

Answer : Madhya Pradesh

- Question No. 28

Which city police got "Pink Hoysalas" to patrol the streets for the safety of women and children?

Options :

1. Mumbai
2. Hyderabad
3. Kochi
4. Bengaluru
- 5.

Answer : Bengaluru

- Question No. 29

India will have combined military exercise "Ajeya Warrior – 2017" with which of the following country?

Options :

1. Russia
2. United Kingdom
3. U.S.A
4. Germany
- 5.

Answer : United Kingdom

- Question No. 30

Who authored the book "Autoplay: Not-so Stories"?

Options :

1. Ruskin Bond
2. G Sampath
3. Githa Hariharan
4. Meena Menon
- 5.

Answer : G Sampath

- Question No. 31

_____ is known as the value of a commodity expressed in terms of money.

Options :

1. Value
2. Utility
3. Price
4. Wealth
- 5.

Answer : Price

- Question No. 32

The world's largest coral reef is

Options :

1. Red sea coral reef in Red sea

2. Great barrier coral reef in Australia
3. Andros barrier reef in Bahamas
4. Belize barrier reef in Belize
- 5.

Answer : Great barrier coral reef in Australia

• Question No. 33

Which private sector bank has launched a service recently where customers can make transactions using just their voice as a means of authentication?

Options :

1. AXIS Bank
2. HDFC Bank
3. ICICI Bank
4. Indusland Bank
- 5.

Answer : ICICI Bank

• Question No. 34

The new scheme "Pahal" by the Government of India is related to_____

Options :

1. Nutritional support to the secondary school children
2. Direct benefit transfer for LPG (DBTL)
3. Direct benefit transfer under Right to Food Act
4. Cash transfer to the farmers due to inclement weather and crop loss.
- 5.

Answer : Direct benefit transfer for LPG (DBTL)

- Question No. 35

The Zika Virus currently outbreaks in which continent

Options :

1. Asia
2. North America
3. South America
4. Africa
- 5.

Answer : South America

- Question No. 36

Which of the following dynasty is also known as the Mamluk Dynasty?

Options :

1. Sayyid Dynasty
2. Slave Dynasty
3. Tughlaq Dynasty
4. Khilji Dynasty
- 5.

Answer : Slave Dynasty

- Question No. 37

World Human Rights Day is celebrated ever year on_____

Options :

1. 10 December
2. 15 December
3. 10 January

4. 20 January

5.

Answer : 10 December

- Question No. 38

Rajatarangiri was composed by_____

Options :

1. Kalhana
2. Kautilya
3. Tulsidas
4. Harsh Vardhana
- 5.

Answer : Kalhana

- Question No. 39

Indian economy is a

Options :

1. Communistic Economy
2. Mixed Economy
3. Centralised Economy
4. None of these
- 5.

Answer : Mixed Economy

- Question No. 40

The low latitude zone of globe extends between

Options :

1. Tropic of Capricorn and Cancer
2. North pole to South pole
3. Tropic of Capricorn and equator
4. Equator and Tropic of Cancer
- 5.

Answer : Tropic of Capricorn and Cancer

• Question No. 41

Where does Hirakud Dam located?

Options :

1. Sikkim
2. Arunachal Pradesh
3. Andhra Pradesh
4. Odisha
- 5.

Answer : Odisha

• Question No. 42

What is the currency of Serbia?

Options :

1. Kina
2. Guaraní
3. Dinar
4. Leu
- 5.

Answer : Dinar

- Question No. 43

Which one is the first country to grant approval for the sales of a new dengue vaccine?

Options :

1. Philippines
2. Mexico
3. Denmark
4. Sri Lanka
- 5.

Answer : Mexico

- Question No. 44

Which of the following wire is also known as the 'Phase Wire'?

Options :

1. Neutral wire
2. Earth wire
3. Live wire
4. None of these
- 5.

Answer : Live wire

- Question No. 45

What is the chemical name of Vitamin C?

Options :

1. Biotin
2. Niacin
3. Retinol

4. Ascorbic Acid

5.

Answer : Ascorbic Acid

- Question No. 46

Who among the following has written the book 'The Way I See It'?

Options :

1. Arundati Roy

2. Kiran Desai

3. Gauri Lankesh

4. Anita Desai

5.

Answer : Gauri Lankesh

- Question No. 47

Pulitzer Prize is associated with _____

Options :

1. Industry

2. Sports

3. Science

4. Journalism

5.

Answer : Journalism

- Question No. 48

Apple, world's most valuable company has set up manufacturing plant in India. In which state the plant is located?

Options :

1. Gujrat
2. Andhra Pradesh
3. Telengana
4. Karnataka
- 5.

Answer : Karnataka

• Question No. 49

Which team is defeated by India in the final of the SAFF Cup Football?

Options :

1. Sri Lanka
2. Maldives
3. Nepal
4. Afghanistan
- 5.

Answer : Nepal

• Question No. 50

Gita was translated into Persian by _____.

Options :

1. Akbar
2. Murad
3. Shah Jahan
4. Dara Shikoh
- 5.

Answer : Dara Shikoh

• Question No. 51

Three cubes with sides 12cm, 16 cm and 20 cm are melted to form a bigger cube. The surface area of the bigger cube is:

Options :

1. 5832 cm²
2. 576 cm²
3. 3456 cm²
4. 24 cm²
- 5.

Answer : 3456 cm²

Direction:

The angle of elevation of the top of a building from the foot of a tower is 30° and the angle of elevation of the top of the tower from the foot of the building is 60°. If the height of the tower is 33 m, what is the height of the building?

• Question No. 52

Options :

1. $33/\sqrt{3}$ m
2. 11 m
3. $11\sqrt{3}$ m
4. $33\sqrt{3}$ m
- 5.

Answer : 11 m

• Question No. 53

The LCM of two numbers is 15 times their HCF. The sum of HCF and LCM of these numbers is 352. If one of the numbers is 110, find the other number.

Options :

1. 64
2. 66
3. 68
4. 70
- 5.

Answer : 66

• Question No. 54

Two trains travel in opposite directions at 54km/hr and 81 km/hr and a man sitting in the slower train observes that his train passes the faster train in 4 seconds. What is the length of the faster train?

Options :

1. 126 m
2. 140 m
3. 150 m
4. 145 m
- 5.

Answer : 150 m

• Question No. 55

Vasu started a business, investing Rs. 6000. Six months later Madhu joined him, investing Rs. 4000. If they made a profit of Rs. 5200 at the end of the year, then how much must be the share of Madhu?

Options :

1. Rs.2080
2. Rs.1300
3. Rs.1800
4. Rs.2600
- 5.

Answer : Rs.1300

- Question No. 56

If $\tan 2\alpha \times \tan 4\alpha = 1$ then the value of $\tan 3\alpha$ is

Options :

1. 2
2. 1
3. -1
4. 0
- 5.

Answer : 1

- Question No. 57

A right circular cone & a right circular cylinder have equal base & equal height. If the radius of the base & the height are in the ratio 9:40, then ratio of total surface area of the cylinder to that of the cone is

Options :

1. 25:28
2. 26:15
3. 27:45
4. 49:25
- 5.

Answer : 49:25

- Question No. 58

If the numerator of a fraction be increased by 12% and its denominator be diminished by 12%, the value of the fraction is $\frac{35}{44}$. Find the original fraction.

Options :

1. $\frac{3}{4}$
2. $\frac{7}{11}$
3. $\frac{5}{8}$
4. $\frac{3}{5}$
- 5.

Answer : $\frac{5}{8}$

• Question No. 59

A man can row 10 km/hr in still water. When the river is running at 2 km/hr, it takes him 5 hour to row to a place and back. How far is the place?

Options :

1. 12 km
2. 24 km
3. 48 km
4. 28 km
- 5.

Answer : 24 km

• Question No. 60

If a man purchases 33 chairs for Rs. 22 and sells 22 chairs for Rs.33. How much profit or loss percent does he make?

Options :

1. 125% Profit
2. 136% Loss
3. 96% Profit
4. 125 % Loss
- 5.

Answer : 125% Profit

Direction:

In what ratio must a grocer mix two varieties of tea worth Rs 20 a Kg and Rs 60 a Kg so that by selling the mixture at Rs 45 a Kg he may gain 50%?

- Question No. 61

Options :

1. 1:4
2. 3:2
3. 3:1
4. 1:6
- 5.

Answer : 3:1

- Question No. 62

If $x + 1/x = 2$ then $x^2 + 1/x^2 = ?$

Options :

1. 2
2. 3
3. 5
4. 7
- 5.

Answer : 2

- Question No. 63

A shopkeeper purchased a bracelet for Rs. 1400 and a necklace for Rs. 900. He sold the bracelet at a profit of 15% and the necklace at a loss of 8%. The overall loss or gain is

Options :

1. Rs. 138

2. Rs. 132
3. Rs. 136
4. Rs. 143
- 5.

Answer : Rs. 138

- Question No. 64

2/5th of a number is added to same number, and newly obtained number is multiplied by 30. The final resultant is 60% of 5600. What is the original number?

Options :

1. 50
2. 65
3. 70
4. 80
- 5.

Answer : 80

- Question No. 65

The area of a regular hexagon with side as 28 cm is

Options :

1. $846\sqrt{3} \text{ cm}^2$
2. $964\sqrt{3} \text{ cm}^2$
3. $1176\sqrt{3} \text{ cm}^2$
4. $1226\sqrt{3} \text{ cm}^2$
- 5.

Answer : $1176\sqrt{3} \text{ cm}^2$

Direction:

A man 1.5m tall is 20.5m away from a tower 22m high. Determine the angle of elevation of the top of the tower from the eye of the observer.

- Question No. 66

Options :

1. 60°
2. 30°
3. 45°
4. 90°
- 5.

Answer : 45°

- Question No. 67

600 men working 10 hrs a day complete $\frac{1}{3}$ rd of the work in 12 days. The number of additional men, working 9 hrs a day, required to done the remaining work in 20 days is?

Options :

1. 300
2. 250
3. 200
4. 350
- 5.

Answer : 200

- Question No. 68

Kamini and Saumi invested in a business in the ratio 11 : 14. If 25% of the total profit goes to charity and Kamini's share is Rs. 99000, the total profit is?

Options :

1. Rs.260500
2. Rs.410000
3. Rs.210000
4. Rs.300000
- 5.

Answer : Rs.300000

• Question No. 69

Find the difference between the simple interest and the compound interest at 3.5% per annum for 2 years on principal of Rs. 20000.

Options :

1. ₹ 27
2. ₹ 31.4
3. ₹ 24.5
4. ₹ 32
- 5.

Answer : ₹ 24.5

• Question No. 70

After the increase in the price of tea by 20%, Teena is able to buy 3.5 kg less for Rs. 420. Find the original and increased price of the tea per kg.

Options :

1. Rs 20 and Rs 24
2. Rs 25 and Rs 30
3. Rs 30 and Rs 40
4. Rs 15 and Rs 24
- 5.

Answer : Rs 20 and Rs 24

- Question No. 71

If $x/y = 5/6$ and $6x + 2y = 12$, then find the value of x .

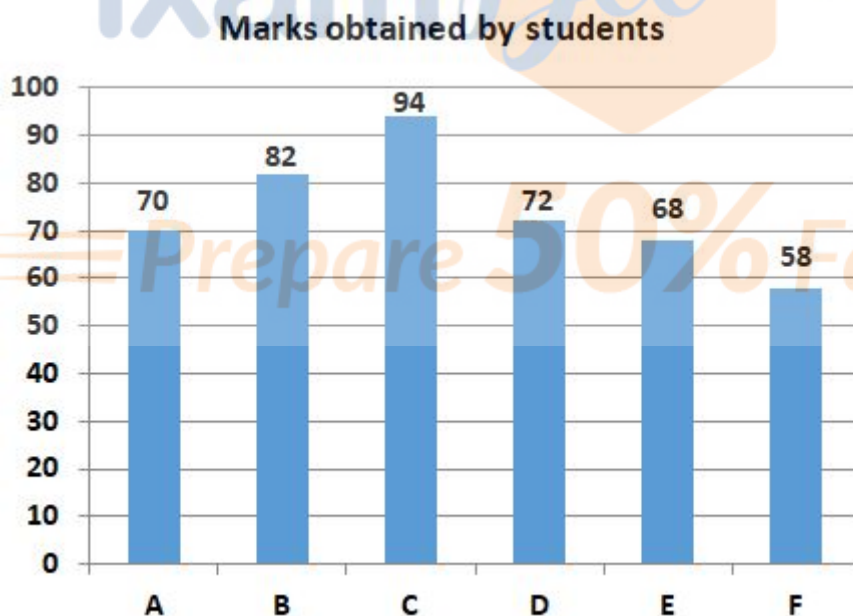
Options :

1. $11/5$
2. $10/7$
3. $11/7$
4. $10/5$
- 5.

Answer : $10/7$

Direction:

Read the data given below and answer the following questions. The Bar below shows the marks scored by 6 different students in an exam. The exam was conducted out of 100 marks.



- Question No. 72

What is the average score obtained by students in the exams?

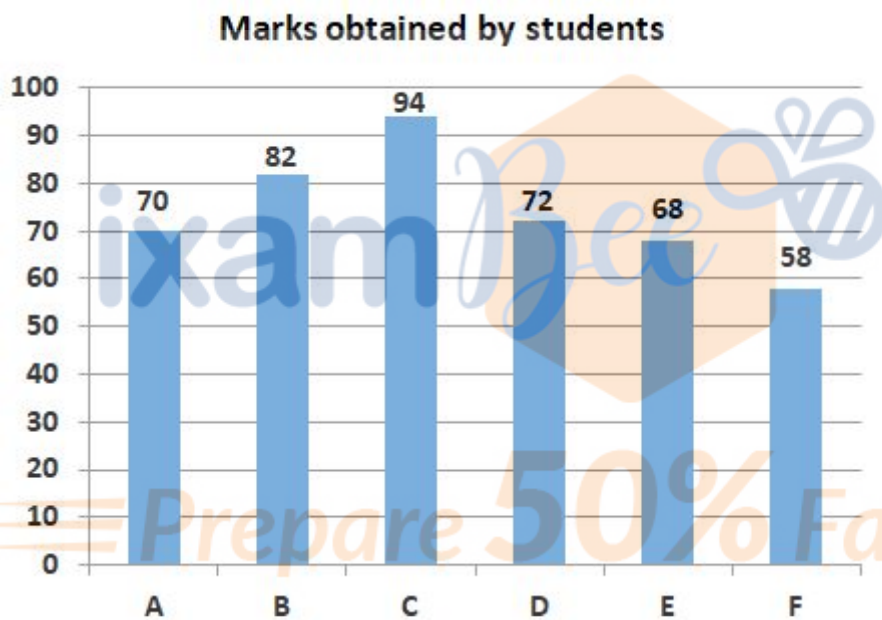
Options :

- 1. 76
- 2. 68
- 3. 62
- 4. 74
- 5.

Answer : 74

Direction:

Read the data given below and answer the following questions. The Bar below shows the marks scored by 6 different students in an exam. The exam was conducted out of 100 marks.



- Question No. 73

Who among the above mentioned students got highest percentage of marks in the exam?

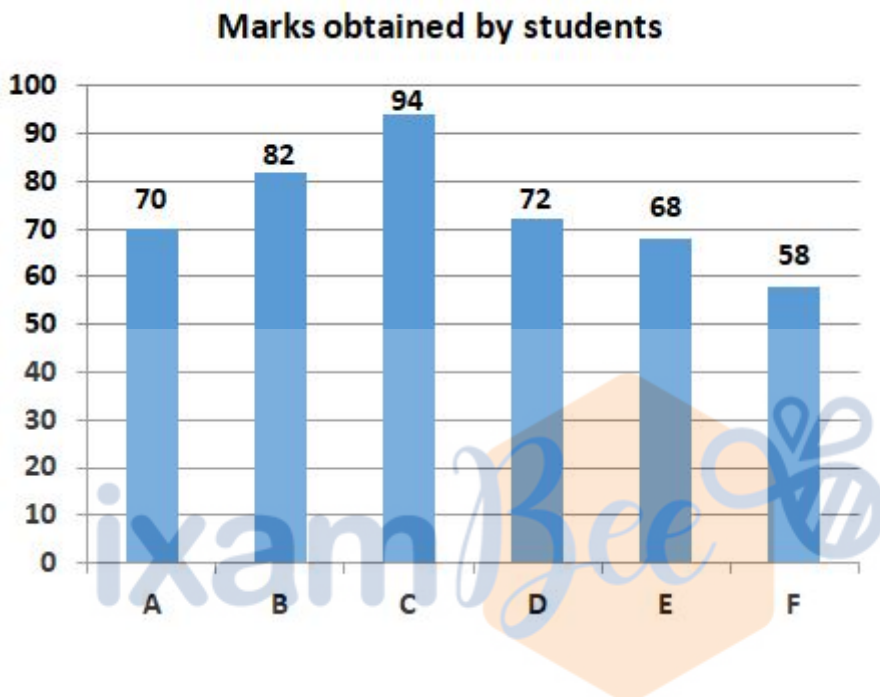
Options :

- 1. E
- 2. B
- 3. A
- 4. C
- 5.

Answer : C

Direction:

Read the data given below and answer the following questions. The Bar below shows the marks scored by 6 different students in an exam. The exam was conducted out of 100 marks.



- Question No. 74

— If the marks of D were entered 60 mistakenly in the report card then by what percent her score was reduced?

Options :

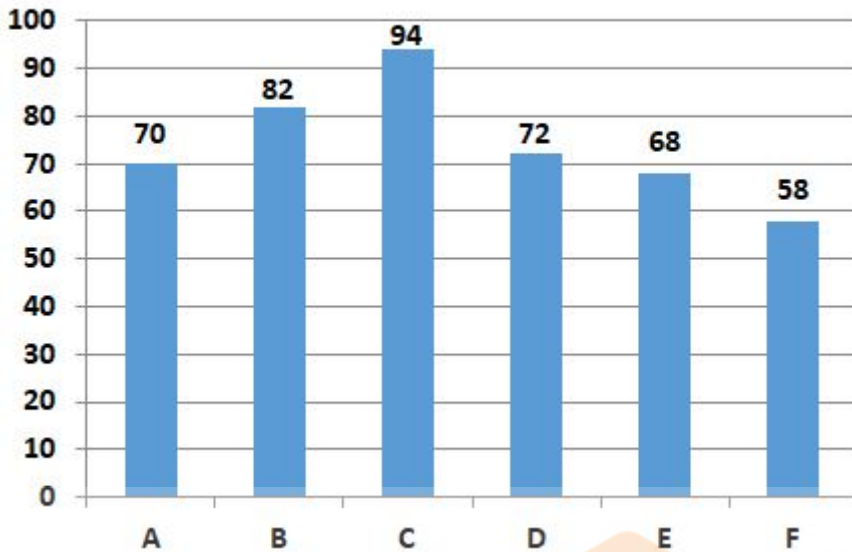
1. 16.66%
2. 33.33%
3. 66.66%
4. 10%
- 5.

Answer : 16.66%

Direction:

Read the data given below and answer the following questions. The Bar below shows the marks scored by 6 different students in an exam. The exam was conducted out of 100 marks.

Marks obtained by students



- Question No. 75

If there is another student P whose score is 74 is considered then what is the difference is observed between average marks obtained?

Options :

1. 4
2. 8
3. 0
4. 6
- 5.

Answer : 0

Direction:

In the following passage, some of the words have been left out, each of which is indicated by a number. Find the suitable word from the options given against each number and fill up the blanks with appropriate words to make the paragraph meaningfully complete.

The person who is truly enlightened has ___ (1) ___ experienced the ultimate or absolute nature of life itself. In that revelation, he has seen far ___ (2) ___ the boundaries of the personal self and ___ (3) ___ the universal nature of all his human experience. That explosive ___ (4) ___ liberates the self from the perpetual tyranny of being trapped in a relationship to life that is merely ___ (5) ___.

- Question No. 76

Find the appropriate word.

Options :

1. absolute
2. directly
3. usual
4. proper
- 5.

Answer : directly

Direction:

In the following passage, some of the words have been left out, each of which is indicated by a number. Find the suitable word from the options given against each number and fill up the blanks with appropriate words to make the paragraph meaningfully complete.

The person who is truly enlightened has ___ (1) ___ experienced the ultimate or absolute nature of life itself. In that revelation, he has seen far ___ (2) ___ the boundaries of the personal self and ___ (3) ___ the universal nature of all his human experience. That explosive ___ (4) ___ liberates the self from the perpetual tyranny of being trapped in a relationship to life that is merely ___ (5) ___.

- Question No. 77

Find the appropriate word.

Options :

1. beyond
2. before
3. after
4. away
- 5.

Answer : beyond

Direction:

In the following passage, some of the words have been left out, each of which is indicated by a number. Find the suitable word from the options given against each number and fill up the blanks with appropriate words to make the paragraph meaningfully complete.

The person who is truly enlightened has ___ (1) ___ experienced the ultimate or absolute nature of life itself. In that revelation, he has seen far ___ (2) ___ the boundaries of the personal self and ___ (3) ___ the universal nature of all his human experience. That explosive ___ (4) ___ liberates the self from the perpetual tyranny of being trapped in a relationship to life that is merely ___ (5) ___.

- Question No. 78

Find the appropriate word.

Options :

1. find
2. gave
3. discovered
4. rejected
- 5.

Answer : discovered

Direction:

In the following passage, some of the words have been left out, each of which is indicated by a number. Find the suitable word from the options given against each number and fill up the blanks with appropriate words to make the paragraph meaningfully complete.

The person who is truly enlightened has ___ (1) ___ experienced the ultimate or absolute nature of life itself. In that revelation, he has seen far ___ (2) ___ the boundaries of the personal self and ___ (3) ___ the universal nature of all his human experience. That explosive ___ (4) ___ liberates the self from the perpetual tyranny of being trapped in a relationship to life that is merely ___ (5) ___.

- Question No. 79

Find the appropriate word.

Options :

1. ignorance
2. disclose
3. remorse
4. realization
- 5.

Answer : realization

Direction:

In the following passage, some of the words have been left out, each of which is indicated by a number. Find the suitable word from the options given against each number and fill up the blanks with appropriate words to make the paragraph meaningfully complete.

The person who is truly enlightened has ___ (1) ___ experienced the ultimate or absolute nature of life itself. In that revelation, he has seen far ___ (2) ___ the boundaries of the personal self and ___ (3) ___ the universal nature of all his human experience. That explosive ___ (4) ___ liberates the self from the perpetual tyranny of being trapped in a relationship to life that is merely ___ (5) ___.

- Question No. 80

Find the appropriate word.

Options :

1. individual
2. personal
3. publicly
4. commonly
- 5.

Answer : personal

Direction:

In each question below three words which are numbered (1), (2), and (3) have been printed in bold, of which one word may be wrongly spelled or inappropriate in the context of the sentence. The number of that word is the answer. If you are unable to spot an error, mark (4) as your answer.

- Question No. 81

This **essentially** (1)/ amounts to advertising, as their 'brand' is **prompt** (2)/ among the public, many of whom are potential **litigants**(3)/ No Error (4).

Options :

1. 1
2. 2
3. 4
4. 3
- 5.

Answer : 2

Direction:

In each question below three words which are numbered (1), (2), and (3) have been printed in bold, of which one word may be wrongly spelled or inappropriate in the context of the sentence. The number of that word is the answer. If you are unable to spot an error, mark (4) as your answer.

- Question No. 82

The concept of **conservation** (1)/ should be a way of life as has been **practiced** (2)/ in India by the Adivasis - tribals who live on the **periphary**(3)/ of forests.No Error (4).

Options :

1. 2
2. 1
3. 3
4. 4
- 5.

Answer : 3

Direction:

In each question below three words which are numbered (1), (2), and (3) have been printed in bold, of which one word may be wrongly spelled or inappropriate in the context of the sentence. The number of that word is the answer. If you are unable to spot an error, mark (4) as your answer.

- Question No. 83

The reported move by capital markets regulator Securities and Exchange Board of India (Sebi) to **summarily**(1) / restrict investment in equity **derivatives**(2)/ by individual investors simply on the basis of income is **paternalist**(3)/, myopic and worse.No Error (4).

Options :

1. 3
2. 1
3. 2
4. 4
- 5.

Answer : 3

Direction:

In the following questions, a part of the sentence is highlighted. Below are given alternatives to the highlighted part which may improve the sentence. Choose the correct alternative. In case no improvement is needed choose 'No improvement'.

- Question No. 84

This belief has **fallen afar like ninepins**, with almost every large IT company failing to report any major acceleration in growth.

Options :

1. Fallen in like ninepins
2. Fallen for like ninepins
3. Fallen away like ninepins
4. No Improvement
- 5.

Answer : Fallen away like ninepins

Direction:

In the following questions, a part of the sentence is highlighted. Below are given alternatives to the highlighted part which may improve the sentence. Choose the correct alternative. In case no improvement is needed choose 'No improvement'.

- Question No. 85

It also **remains to see** what the cost of growth is for companies that end up reporting some acceleration.

Options :

1. Remaining to see
2. Remain to be seen
3. Remains to be seen
4. No Improvement
- 5.

Answer : Remains to be seen

Direction:

In the following questions, a part of the sentence is highlighted. Below are given alternatives to the highlighted part which may improve the sentence. Choose the correct alternative. In case no improvement is needed choose 'No improvement'.

- Question No. 86

The new models show that after the ejection of the envelope, the stars heat up three times **fast than finding in** older models.

Options :

1. Fast than found in
2. Faster than found in
3. Faster from finding in
4. No Improvement
- 5.

Answer : Faster than found in

Direction:

In the following question, out of the four alternatives, choose the alternative which best expresses the meaning of the Idiom/Phrase.

- Question No. 87

Once in a blue moon

Options :

1. happening on a daily basis
2. happens once everyday
3. happening infrequently
4. daily visitor
- 5.

Answer : happening infrequently

Direction:

In the following question, out of the four alternatives, choose the alternative which best expresses the meaning of the Idiom/Phrase.

- Question No. 88

See eye to eye

Options :

1. staring at someone
2. agreeing with someone
3. looking at someone continuously
4. talk face to face
- 5.

Answer : agreeing with someone

Direction:

In the following question, out of the four alternatives, choose the alternative which best expresses the meaning of the Idiom/Phrase.

- Question No. 89

A piece of cake

Options :

1. something very sweet
2. a small part of something
3. something very easy
4. something very difficult
- 5.

Answer : something very easy

Direction:

In the following question, out of the four alternatives, choose the alternative which best expresses the meaning of the Idiom/Phrase.

- Question No. 90

To feel under the weather

Options :

1. to feel good
2. to feel disappointed
3. to not feel well
4. to feel rejected
- 5.

Answer : to not feel well

Direction:

In the following question, out of the four alternatives, choose the alternative which best expresses the meaning of the Idiom/Phrase.

- Question No. 91

Break a leg

Options :

1. break someone's leg
2. break someone's heart
3. to wish bad for someone

4. to wish good luck

5.

Answer : to wish good luck

Direction:

In the following question, sentence given with blank to be filled in with an appropriate word(s). Four alternatives are suggested for the question. Choose the correct alternative out of the four and indicate it by selecting the appropriate option.

- Question No. 92

Prime Minister will be _____ UAE to boost ties.

Options :

1. seeing
2. visiting
3. watching
4. schedule
- 5.

Answer : visiting

Direction:

In the following question, sentence given with blank to be filled in with an appropriate word(s). Four alternatives are suggested for the question. Choose the correct alternative out of the four and indicate it by selecting the appropriate option.

- Question No. 93

We should not _____ in others' matters.

Options :

1. disturb
2. support
3. interfere
4. infer

5.

Answer : interfere

Direction:

In the following question, sentence given with blank to be filled in with an appropriate word(s). Four alternatives are suggested for the question. Choose the correct alternative out of the four and indicate it by selecting the appropriate option.

- Question No. 94

The scheme will help create more hospitals and will create lot of _____ for doctors and paramedical staff.

Options :

1. problems
2. cases
3. matter
4. employment
- 5.

Answer : employment

Direction:

In the following question, sentence given with blank to be filled in with an appropriate word(s). Four alternatives are suggested for the question. Choose the correct alternative out of the four and indicate it by selecting the appropriate option.

- Question No. 95

They filed case against the criminal but no one was ready to show up as a _____.

Options :

1. help
2. witness
3. support
4. denial
- 5.

Answer : witness

Direction:

In the following question, sentence given with blank to be filled in with an appropriate word(s). Four alternatives are suggested for the question. Choose the correct alternative out of the four and indicate it by selecting the appropriate option.

- Question No. 96

The cafeteria has been made in the _____ of the institute.

Options :

1. boundation
2. limit
3. fence
4. premises
- 5.

Answer : premises

Direction:

In each of the following questions, choose the word which can be substituted for the given phrase/sentence.

- Question No. 97

Unlawful taking of personal property

Options :

1. languor
2. languish
3. largesse
4. larceny
- 5.

Answer : larceny

Direction:

In each of the following questions, choose the word which can be substituted for the given phrase/sentence.

- Question No. 98

One who suffers from delusions of greatness

Options :

1. Paranoid
2. Optimist
3. Neopaganism
4. Megalomaniac
- 5.

Answer : Megalomaniac

Direction:

In each of the following questions, choose the word which can be substituted for the given phrase/sentence.

- Question No. 99

A special color scheme used as a design for vehicles

Options :

1. chivalry
2. livery
3. malady
4. modality
- 5.

Answer : livery

Direction:

In each of the following questions, choose the word which can be substituted for the given phrase/sentence.

- Question No. 100

The rise and fall in the pitch of a voice

Options :

1. intonation
2. annotation
3. relent
4. intransigent
- 5.

Answer : intonation

[Attempt Mock Test Now](#)

All ixamBee Mock Test are FREE @ www.ixamBee.com



Prepare **50%** Faster