

• Question No. 1

Select the most appropriate ANTONYM of the given word.

Opulence

Options :

1. Plethora
2. Plenitude
3. Deluge
4. Frugality
- 5.

Answer : Frugality

• Question No. 2

Select the sentence that has NO spelling error.

Options :

1. In the 1960s, an adoption agency in New York deleberately split up twins and placed them in different families as part of a controversial study.
2. In the 1960s, an adoption agency in New York delliberately split up twins and placed them in different families as part of a controversial study.
3. In the 1960s, an adoption agency in New York deliberately split up twins and placed them in different families as part of a controversial study.
4. In the 1960s, an adoption agency in New York delliberately split up twins and placed them in different families as part of a controversial study.
- 5.

Answer : In the 1960s, an adoption agency in New York deliberately split up twins and placed them in different families as part of a controversial study.

• Question No. 3

Select the most appropriate meaning of the proverb.

No man is an island

Options :

1. People always want what they don't have.
2. It's easier to do something as a team than by yourself.
3. Difficulties boost our skills and experience.
4. No one is truly capable of living alone.
- 5.

Answer : No one is truly capable of living alone.

• Question No. 4

Select the most appropriate meaning of the idiom.

Like a kid in a candy store

Options :

1. Very annoying
2. Very stubborn
3. Very clumsy
4. Very excited
- 5.

Answer : Very excited

Direction:

In the following passage, some words have been deleted. Read the passage carefully and select the most appropriate option to fill in each blank.

• Question No. 5

These days, it is not (1)_____ to see people listening to music or using their electronic gadgets while crossing busy roads or travelling on public transport, (2)_____ of the risks involved. I have often wondered why they take such risks: is it because they want to (3)_____ a sense of independence, or is it that they want to tell the world to stop bothering them? Or is it that they just (4)_____ to show how cool they are?

Options :

1. 1. bizarre, 2. heedless, 3. exhibit, 4. wish
2. 1. awesome, 2. blind, 3. secrete, 4. crave
3. 1. astonishing, 2. careless, 3. manifest, 4. need
4. 1. unusual, 2. regardless, 3. exude, 4. want
- 5.

Answer : 1. unusual, 2. regardless, 3. exude, 4. want

• Question No. 6

Select the most appropriate synonym of the **bold** word as used in the sentence.

The mystery of India's ancient port of Muziris has **captivated** archaeologists for decades.

Options :

1. Fascinated
2. Distracted
3. Preoccupied
4. Consumed
- 5.

Answer : Fascinated

• Question No. 7

Select the sentence that has NO spelling error.

Options :

1. Archaeologists have uncovered the remains of an Anglo-Saxon settlement.
2. Archaeologists have uncovered the remains of an Anglo-Saxon settlement.
3. Archeologists have uncovered the remains of an Anglo-Saxon settlement.
4. Archaeologists have uncovered the remains of an Anglo-Saxon settlement.
- 5.

Answer : Archaeologists have uncovered the remains of an Anglo-Saxon settlement.

Direction:

In the following passage, some words have been deleted. Read the passage carefully and select the most appropriate option to fill in each blank.

• Question No. 8

Whether it is a workman or an executive, earphones have become an (1)_____ part of our lives, sometimes even leading to tragicomic situations. The other day, an electrician had come to our house to (2)_____ something. We told him in (3)_____ what needed to be done. But after he left, I found that the man had done almost nothing. It later turned out that he could not hear our (4)_____ clearly because he had his earphones on.

Options :

1. 1. inalienable, 2. rehabilitate, 3. precise, 4. guidelines
2. 1. inseparable, 2. fix, 3. detail, 4. directions
3. 1. integral, 2. replace, 3. full, 4. assignment
4. 1. interwoven, 2. reconstruct, 3. part, 4. advice
- 5.

Answer : 1. inseparable, 2. fix, 3. detail, 4. directions

• Question No. 9

Select the most appropriate synonym of the **bold** word as used in the sentence.

The Korean War lasted from 1950 to 1953, ending in **armistice**.

Options :

1. Dispute

2. Bloodshed
3. Hostility
4. Ceasefire
- 5.

Answer : Ceasefire

• Question No. 10

Select the most appropriate option that can replace the **bold** word in the given sentence.

“What a tiring vacation! I’m glad to be back **from** my own bed again.”

Options :

1. in
2. beside
3. between
4. among
- 5.

Answer : in

Direction:

Sentences of a paragraph are given below in jumbled order. Arrange the sentences in the correct order to form a meaningful and coherent paragraph.

• Question No. 11

- 1) I think watermelons taste better than any other fruits and my whole family likes eating watermelons.
- 2) We ate at least three watermelons a week last year.
- 3) This year, I am going to eat watermelon every day, all summer long.
- 4) Watermelons are in the stores, and I plan to eat one every day for the next three months.

Options :

1. 1, 3, 2, 4
2. 3, 2, 1, 4
3. 4, 1, 2, 3
4. 2, 3, 1, 4
- 5.

Answer : 4, 1, 2, 3

• Question No. 12

Select the most appropriate option that can replace the **slow** word in the given sentence.

Sangeeta and Rina ran **slow** to get the bus.

Options :

1. quickly
2. quick
3. quicker
4. quickness
- 5.

Answer : quickly

Direction:

Sentences of a paragraph are given below in jumbled order. Arrange the sentences in the correct order to form a meaningful and coherent paragraph.

• Question No. 13

- 1) Lakshadweep is an archipelago located 200 – 400 km west of the coast of Kerala in the Arabian Sea.
- 2) Earlier the name Lakshadweep referred to the three archipelagos in the Indian Ocean, the present Lakshadweep, Maldives and Suvadives.
- 3) In Malayalam, Lakshadweep means a hundred thousand islands and it is the smallest union territory in India.
- 4) The archipelago consists of 36 main islands and many smaller islands, coral atolls and coral reefs.

Options :

1. 2, 1, 3, 4
2. 1, 3, 4, 2
3. 2, 3, 4, 1
4. 1, 4, 3, 2
- 5.

Answer : 1, 4, 3, 2

• Question No. 14

Select the most appropriate ANTONYM of the given word.

Influential

Options :

1. Virtuous
2. Persuasive
3. Efficacious
4. Insignificant
- 5.

Answer : Insignificant

Direction:

In the following passage, some words have been deleted. Read the passage carefully and select the most appropriate option to fill in each blank.

• Question No. 15

Scientists have (1)_____ a gel that helps brains recover from traumatic injuries. It has the potential to (2)_____ head injuries sustained in combat, car accidents, falls, or gunshot wounds. (3)_____ by Dr. Ning Zhang at Clemson University in South Carolina, the gel is (4)_____ in liquid form at the site of injury and stimulates the growth of stem cells there.

Options :

1. 1. manufactured, 2. heal, 3. Initiated, 4. implanted
2. 1. developed, 2. treat, 3. Developed, 4. injected
3. 1. produced, 2. medicate, 3. Established, 4. interjected
4. 1. constructed, 2. assist, 3. Devised, 4. inserted
- 5.

Answer : 1. developed, 2. treat, 3. Developed, 4. injected

• Question No. 16

Select the sentence that has NO spelling error.

Options :

1. More than 3,000 pupils have been evacuated from there homes in a Russian city after an undetonated explosive was found.
2. More than 3,000 people have been evacuated from their homes in a Russian city after an undettonated explosive was found.
3. More than 3,000 people have been evacuated from their homes in a Russian city after an undetonated explosive was found.
4. More than 3,000 people have been evacuated from their homes in a Russian city after an undettonated explosive was found.
- 5.

Answer : More than 3,000 people have been evacuated from their homes in a Russian city after an undetonated explosive was found.

Direction:

Read the given passage and answer the questions that follow.

The beginning of this fun-filled season with the sun hidden behind the grey clouds brings cheer to many of us waiting eagerly to splash in the rains. Of course, not everything about rain is glamorous. Especially when you think about endless traffic jams, the bad roads dotted with potholes, uncleared garbage and the spate of water borne diseases. Also, viral infections like cold and cough make their presence felt.

Most infectious diseases prevalent in the rainy season can be prevented by simply washing our hands regularly. Scrubbing hands regularly with water and soap can prevent us from contacting respiratory and diarrheal diseases.

Kids have a lower level of immunity and hence hand washing becomes a crucial part of their lifestyle. When playing especially during monsoon season, kids come into contact with germs and can unknowingly become infected simply by touching their nose, eyes or mouth. The Food and Drug Administration states that the human influenza virus can survive on surfaces for up to eight hours, making people susceptible to catching it each time they touch the infected surface. Hence, repeated hand washing is required.

To make the best of the rainy season we should follow some simple guidelines. First of all if we decide to get wet in rains we should change into a dry set of clothes at the earliest. Also, we should keep raw food items at bay and wash vegetables and fruits thoroughly before use. Moreover, strict kitchen hygiene should be maintained in order to enjoy one of the most beautiful seasons of the year. Also, in order to have a trouble free rainy season home made fresh food should be given preference over the fast food sold in the market.

- Question No. 17

Which of the following sentences is correct as per the facts given in the passage?

Options :

1. Hygiene should be maintained to prevent us from contacting respiratory and diarrheal diseases.
2. After getting wet in the rain we should put on dry clothes when we fall sick.
3. We should keep at bay home made fresh food so as to keep us disease free in the rainy season.
4. People wait for the rains since they can enjoy endless traffic jams.
- 5.

Answer : Hygiene should be maintained to prevent us from contacting respiratory and diarrheal diseases.

Direction:

Read the given passage and answer the questions that follow.

The beginning of this fun-filled season with the sun hidden behind the grey clouds brings cheer to many of us waiting eagerly to splash in the rains. Of course, not everything about rain is glamorous. Especially when you think about endless traffic jams, the bad roads dotted with potholes, uncleared garbage and the spate of water borne diseases. Also, viral infections like cold and cough make their presence felt.

Most infectious diseases prevalent in the rainy season can be prevented by simply washing our hands regularly. Scrubbing hands regularly with water and soap can prevent us from contacting respiratory and diarrheal diseases.

Kids have a lower level of immunity and hence hand washing becomes a crucial part of their lifestyle. When playing especially during monsoon season, kids come into contact with germs and can unknowingly become infected simply by touching their nose, eyes or mouth. The Food and Drug Administration states that the human influenza virus can survive on surfaces for up to eight hours, making people susceptible to catching it each time they touch the infected surface. Hence, repeated hand washing is required.

To make the best of the rainy season we should follow some simple guidelines. First of all if we decide to get wet in rains we should change into a dry set of clothes at the earliest. Also, we should keep raw food items at bay and wash vegetables and fruits thoroughly before use. Moreover, strict kitchen hygiene should be maintained in order to enjoy one of the most beautiful seasons of the year. Also, in order to have a trouble free rainy season home made fresh food should be given preference over the fast food sold in the market.

• Question No. 18

Select the most appropriate synonym of the given word as used in the passage.

Susceptible

Options :

1. Aroused
2. Resistant
3. Vulnerable
4. Receptive
- 5.

Answer : Vulnerable

Direction:

Read the given passage and answer the questions that follow.

The beginning of this fun-filled season with the sun hidden behind the grey clouds brings cheer to many of us waiting eagerly to splash in the rains. Of course, not everything about rain is glamorous. Especially when you think about endless traffic jams, the bad roads dotted with potholes, uncleared garbage and the spate of water borne diseases. Also, viral infections like cold and cough make their presence felt.

Most infectious diseases prevalent in the rainy season can be prevented by simply washing our hands regularly. Scrubbing hands regularly with water and soap can prevent us from contacting respiratory and diarrheal diseases.

Kids have a lower level of immunity and hence hand washing becomes a crucial part of their lifestyle. When playing especially during monsoon season, kids come into contact with germs and can unknowingly become infected simply by touching their nose, eyes or mouth. The Food and Drug Administration states that the human influenza virus can survive on surfaces for up to eight hours, making people susceptible to catching it each time they touch the infected surface. Hence, repeated hand washing is required.

To make the best of the rainy season we should follow some simple guidelines. First of all if we decide to get wet in rains we should change into a dry set of clothes at the earliest. Also, we should keep raw food items at bay and wash vegetables and fruits thoroughly before use. Moreover, strict kitchen hygiene should be maintained in order to enjoy one of the most beautiful seasons of the year. Also, in order to have a trouble free rainy season home made fresh food should be given preference over the fast food sold in the market.

• Question No. 19

Which of the following can be an appropriate title of the passage?

Options :

1. How to enjoy the Rainy Season
2. Fun-filled Seasons
3. Precautions for the Rainy Season
4. Precautions against Infectious Diseases
- 5.

Answer : Precautions for the Rainy Season

Direction:

Read the given passage and answer the questions that follow.

The beginning of this fun-filled season with the sun hidden behind the grey clouds brings cheer to many of us waiting eagerly to splash in the rains. Of course, not everything about rain is glamorous. Especially when you think about endless traffic jams, the bad roads dotted with potholes, uncleared garbage and the spate of water borne diseases. Also, viral infections like cold and cough make their presence felt.

Most infectious diseases prevalent in the rainy season can be prevented by simply washing our hands regularly. Scrubbing hands regularly with water and soap can prevent us from contacting respiratory and diarrheal diseases.

Kids have a lower level of immunity and hence hand washing becomes a crucial part of their lifestyle. When playing especially during monsoon season, kids come into contact with germs and can unknowingly become infected simply by touching their nose, eyes or mouth. The Food and Drug Administration states that the human influenza virus can survive on surfaces for up to eight hours, making people susceptible to catching it each time they touch the infected surface. Hence, repeated hand washing is required.

To make the best of the rainy season we should follow some simple guidelines. First of all if we decide to get wet in rains we should change into a dry set of clothes at the earliest. Also, we should keep raw food items at bay and wash vegetables and fruits thoroughly before use. Moreover, strict kitchen hygiene should be maintained in order to enjoy one of the most beautiful seasons of the year. Also, in order to have a trouble free rainy season home made fresh food should be given preference over the fast food sold in the market.

- Question No. 20

Identify the tone of the passage.

Options :

1. Derisive
2. Ethical
3. Aggressive
4. Humanistic
- 5.

Answer : Humanistic

- Question No. 21

Select the number from the given alternatives that can replace the question mark (?) in the following series.

17, 34, 53, 76, 105, 136, ?

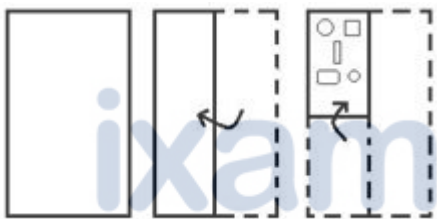
Options :

1. 181
2. 192
3. 160
4. 160
- 5.

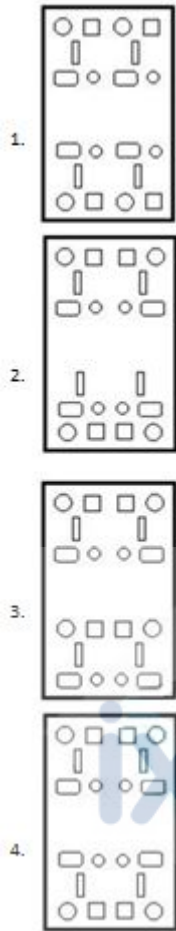
Answer : 160

• Question No. 22

The sequence of folding a transparent sheet of paper and the method of cutting the folded paper are shown in the following figures. What will this paper look like when you open it back?



Prepare **50%** Faster



Options :

- 1. 1
- 2. 2
- 3. 3
- 4. 4
- 5. 5

Answer : 4

• Question No. 23

In a certain code language, 'CLEAR' is written as '15-5-19' and 'PRIZE' is written as '34-9-31'. How will 'LUCID' be written in that language?

Options :

1. 33-3-10
2. 32-3-12
3. 30-3-13
4. 33-3-13
- 5.

Answer : 33-3-13

Direction:

Read the given statements and conclusions carefully. Assuming that the information given in the statements is true even if it seems to be at variance from commonly known facts, decide which of the given conclusions logically follows from the statements.

- Question No. 24

Statement:

All beds are cupboards.

Some beds are tables.

Some tables are pillows.

Conclusion:

I. Some cupboards are tables.

II. No cupboard is table.

III. All pillows are cupboard.

Options :

1. Only I and II follow
2. Only I follows
3. Only I and III follow
4. Only II follows
- 5.

Answer : Only I follows

- Question No. 25

When the mirror is placed on 'PQ' as shown, select the correct mirror image of the given combination.

d 4 2 S N F |
P
Q

1. F N S 2 4 P

2. F N S 2 4 P

3. F N S 2 4 P

4. F N S 2 4 P

Options :

1. 1

2. 2

3. 3

4. 4

5.

Answer : 2

Direction:

A statement is followed by two courses of action numbered I and II. Assuming everything in the statement is true, decide which of the suggested actions (decisions to be taken to follow up/improve the problem) logically follow.

- Question No. 26

statement:

Residents of this region are frequently faced with incidents of sudden power surges and voltage surges which cause damage to sensitive electronic equipment installed in their homes.

Courses of action:

- I. Residents should collectively write a letter to the Electricity Supply Office to investigate and rectify the issue.
- II. In case of such power surges witnessed by them, they should unplug these devices to avoid any possible damage to these sensitive electronics devices.

Options :

- 1. Only II follows
- 2. Neither I nor II follows
- 3. Only I follows
- 4. Both I and II follow
- 5.

Answer : Both I and II follow

• Question No. 27

If $B > R > D = M > A$, then which of the following conclusions is correct?

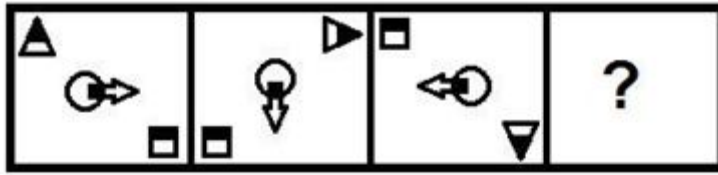
Options :

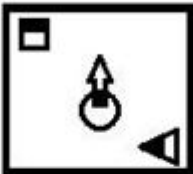



- 1. $T > R$
- 2. $R < A$
- 3. $M > H$
- 4. $T < B$
- 5.

Answer : $T > R$

• Question No. 28

Select the figure that will come next in the following series.



- 1. 
- 2. 
- 3. 
- 4. 

Options :

- 1. 1
- 2. 2
- 3. 3
- 4. 4
- 5. 5

Answer : 2

- Question No. 29

Select the option which is related to the fifth letter-cluster in the same way as the second letter-cluster is related to the first letter-cluster and the fourth letter-cluster is related to the third letter-cluster.

FIST : GHTS :: MART : NZSS :: BOSS : ?

Options :

1. CNTR
2. CPTS
3. APTR
4. CNRR
- 5.

Answer : CNTR

• Question No. 30

Each of P, Q, R, S, T, U and V has exam on different day of the same week starting from Monday and ending on Sunday. R's exam is immediately before U's exam. Only two persons have exam after S. P's exam is immediately after T's exam. Q's exam is immediately after V's exam. U's exam is on Sunday. V's exam is immediately after P's exam. What day is T's exam?

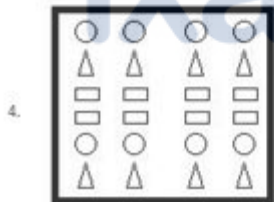
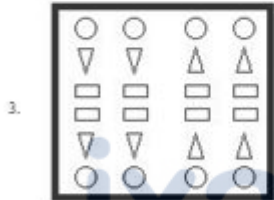
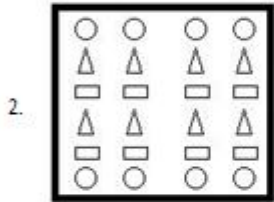
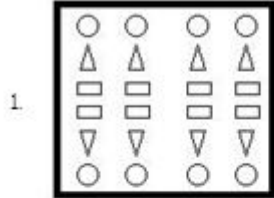
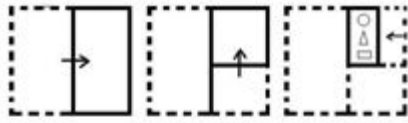
Options :

1. Monday
2. Thursday
3. Tuesday
4. Wednesday
- 5.

Answer : Monday

• Question No. 31

The sequence of folding a transparent sheet of paper and the method of cutting the folded paper are shown in the following figures. What will this paper look like when you open it back?



Options :

- 1.1
- 2.2
- 3.3
- 4.4
- 5.

Answer : 1

• Question No. 32

In a certain code language, 'COURAGE' is written as 'VPDQFHB' and 'MAGICAL' is written as 'HBNHMBD'. How will 'HOSTELS' be written in that language?

Options :

1. TPISTMF
2. TOISTNF
3. SPITTFM
4. TQISTNF
- 5.

Answer : TPISTMF

• Question No. 33

Select the term from the given alternatives which can replace the question mark (?) in the following series.

FTY-8, ERV-12, DPS-20, CNP-36, ?

Options :

1. BLN-68
2. BLM-68
3. BKM-70
4. BLM-64
- 5.

Answer : BLM-68

• Question No. 34

Select the correct water image of the given figure.



Options :

1.1

2.2

3.3

4.4

5.

Answer : 2

- Question No. 35

Select the option in which the given shape is embedded (rotation is not allowed).



1.



2.



3.



4.



Options :

1. 1

2. 2

3. 3

4. 4

5.

Answer : 2

• Question No. 36

Select the number from the given alternatives which can replace the question mark (?) in the following series.

13, 18, 33, 58, 93, ?

Options :

1. 122

2. 130

3. 138

4. 143

5.

Answer : 138

• Question No. 37

Four letter-clusters have been given, out of which three are alike in some manner and one is different. Select the incongruous letter-cluster.

Options :

1. TYDIN

2. GLQVA

3. UZEJO

4. MRWCG

5.

Answer : MRWCG

• Question No. 38

Each letter given below is given a unique number. Select a combination of numbers which when arranged with its corresponding letters forms a meaningful word.

1	2	3	4	5	6	7
R	E	S	A	N	T	O

Options :

1. 3, 7, 5, 4, 6, 2, 1

2. 3, 2, 5, 4, 6, 7, 1

3. 3, 4, 5, 2, 6, 1, 7

4. 2, 3, 5, 4, 7, 6, 1

5.

Answer : 3, 2, 5, 4, 6, 7, 1

• Question No. 39

Which two numbers should be interchanged to make the following equation equal?

$$16 + 8 \times 24 \div 4 - 26 = 30$$

Options :

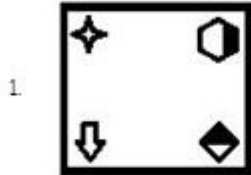
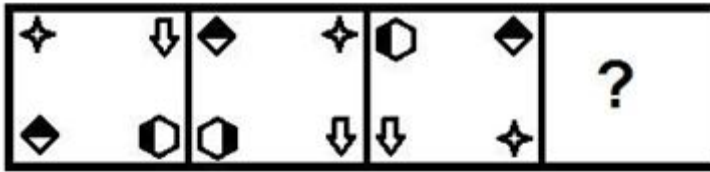
1. 16 and 4
2. 16 and 24
3. 8 and 4
4. 16 and 26
- 5.

Answer : 16 and 24

• Question No. 40

Select the figure which will come next in the following series.

Prepare **50%** Faster



Options :

- 1. 1
- 2. 2
- 3. 3
- 4. 4
- 5. 5

Answer : 3

• Question No. 41

With interest compounded half-yearly, a certain sum becomes ₹13,230 in one year at 10% annual interest rate. What will be the compound interest in 3 years on the same amount at the same interest rate, compounded annually?

Options :

1. ₹3,974
2. ₹3,792
3. ₹3,972
4. ₹3,729
- 5.

Answer : ₹3,972

• Question No. 42

Two identical cubes, each of volume 729 cm^3 , are joined together end to end. What will be the total surface area of the resulting cuboid?

Options :

1. 810 cm^2
2. 900 cm^2
3. 820 cm^2
4. 990 cm^2
- 5.

Answer : 810 cm^2

• Question No. 43

A person saves 18% of his income. If his income increases by 6.65% and his savings decrease by 20%, then by what percent will his expenditure increase?

Options :

1. 10.5%
2. 10%
3. 12.5%
4. 12%

5.

Answer : 12.5%

• Question No. 44

The cost price of an article is ₹600. A shopkeeper sells it for ₹680 after giving a discount of 15% on its list price. If he sells it after giving a discount of 10% on its list price, find the profit percentage.

Options :

1. 16%
2. 20%
3. 19.5%
4. 15%
- 5.

Answer : 20%

• Question No. 45

A is 20% less than B, and C is 30% more than A. If B decreases by 20% and C increases by 10%, then C is what percent more than the new value of B?

Options :

1. 43%
2. 45.75%
3. 47%
4. 47.25%
- 5.

Answer : 43%

• Question No. 46

The perimeter of a square is 120 cm. The length of a rectangle is 5 cm more than the side of the square, and the breadth of the rectangle is 6 cm less than the side of the square. The difference between the areas of the square and the rectangle is approximately what percent of the area of the rectangle?

Options :

1. 6.2%
2. 8%
3. 6.5%
4. 7%
- 5.

Answer : 7%

- Question No. 47

X, Y and Z start a partnership by investing their capital in the ratio 8 : 5 : 4. At the end of a year, the profit is distributed among X, Y and Z in the ratio 6 : 3 : 2. Find the time ratio for which X, Y and Z invested their capital?

Options :

1. 15 : 12 : 10
2. 18 : 5 : 9
3. 15 : 12 : 8
4. 13 : 8 : 5
- 5.

Answer : 15 : 12 : 10

- Question No. 48

Let r_1 and r_2 be the radii of spheres A and B respectively such that $r_1 + r_2 = 9$ units. The sum of the volumes of A and B is 792 cubic units. Find the value of $r_1^2 + r_2^2$. (Use $\pi = 22/7$)

Options :

1. 53

- 2. 45
- 3. 65
- 4. 41
- 5.

Answer : 41

• Question No. 49

If the square of the sum of two numbers is 25, and the square of the difference of the same two numbers is 15, then find their product.

Options :

- 1. 2.5
- 2. 2
- 3. 3
- 4. 3.5
- 5.

Answer : 2.5

Direction:

Study the following graph and answer the question given below.



Company P : कंपनी P

Company Q : कंपनी Q

- Question No. 50

Find the ratio of the average sales of company P in the first three years to the average sales of company Q in the last three years.

Options :

1. 6 : 7
2. 7 : 5
3. 7 : 6
4. 5 : 7
- 5.

Answer : 7 : 6

- Question No. 51

A certain sum amounts to ₹7,535 in 5 years at 7.4% simple interest per annum. If the interest is compounded half yearly, what will the same amount (in ₹) amount to in one year at 20% annual interest rate?

Options :

1. 7,920
2. 6,655
3. 6,413
4. 6,534
- 5.

Answer : 6,655

- Question No. 52

Rs 3,051 is divided among X, Y and Z and the ratio of the share of X and the share of Y and Z is 5 : 4. And the ratio of Z's share and the combined share of X and Y is 7 : 20. Find the share of Y?

Options :

1. ₹655
2. ₹566
3. ₹556
4. ₹565
- 5.

Answer : ₹565

- Question No. 53

Find the sum of the cubes of the first nine natural numbers.

Options :

1. 2000
2. 2055
3. 2025
4. 2520
- 5.

Answer : 2025

- Question No. 54

The average weight of 35 students in a class is 66 kg. Six students with average weight of 58.5 kg leave the class, and 11 students with average weight of 68 kg join the class. Now what is the average weight (in kg) of the students in the class?

Options :

1. 67.675
2. 66.5
3. 68.5
4. 66.375
- 5.

Answer : 67.675

- Question No. 55

A shopkeeper sells an article P for ₹ 6,210 at a profit of 15% and another article Q for ₹ 2,470 at a loss of 5%. Find his total profit percentage in the entire transaction?

Options :

1. 10.5%
2. 8.5%
3. 8%
4. 10%
- 5.

Answer : 8.5%

Direction:

Study the following table and answer the question given below.

Number of computers sold by stores A and B during January to June 2022.

माह	स्टोर	
	A	B
जनवरी	220	150
फरवरी	180	210
मार्च	240	200
अप्रैल	210	240
मई	340	290
जून	320	300

- Question No. 56

The average number of computers (per month) sold by Store B in February, April and June is what percent of the total number of computers sold by Store A in January, March and May?

Options :

1. 32.75%

2. 31.25%
3. 32%
4. 30%
- 5.

Answer : 31.25%

• Question No. 57

A can do $\frac{1}{5}$ of a work in 3 days and B can do the same work in 24 days. C can complete 40% of the work in 8 days. All three work together for x days, then A leaves the work, and B and C together complete the remaining work in x days. Find the value of x .

Options :

1. $3\frac{1}{2}$
2. 4
3. $4\frac{1}{2}$
4. $4\frac{3}{4}$
- 5.

Answer : 4

• Question No. 58

The ratio of spirit and water in solutions A and B is 2 : 3 and 7 : 8 respectively. Six liters of B is mixed with 9 liters of A. Find the percentage of spirit in the resulting mixture.

Options :

1. 44%
2. 40%
3. 52%
4. 56%
- 5.

Answer : 44%

- Question No. 59

यदि $a : b = \frac{1}{2} : \frac{1}{3}$ और $b : c = \frac{1}{4} : \frac{1}{7}$ है, तो $a : b : c = ?$

Options :

1. 21 : 14 : 8
2. 21 : 8 : 14
3. 8 : 14 : 21
4. 14 : 21 : 8
- 5.

Answer : 21 : 14 : 8

- Question No. 60

A boat takes one hour to cover a distance of 4 km upstream and 6 km downstream, while it takes 13 hours to cover a distance of 72 km upstream and 48 km downstream. Find the speed of the boat (in km/h) in still water.

Options :

1. 12
2. 15
3. 9
4. 10
- 5.

Answer : 10

- Question No. 61

In MS-Excel365, cell address D101 points to _____.

Options :

1. Row 101 'D' Column

2. row '101' column
3. row '10' column
4. fifth row 101 column
- 5.

Answer : Row 101; ; Column

• Question No. 62

In which of the following types of Internet connections, conventional telephone lines are used to provide the Internet connection?

Options :

1. cable internet
2. dial-up internet
3. satellite
4. wireless
- 5.

Answer : dial-up internet

Direction:

Match with the column named 'Description of the column containing the components of the mail system'.

• Question No. 63

मेल सिस्टम के घटक	विवरण
a) मेल यूजर एजेंट	i) यह ईमेल सिस्टम का आधार है। यह अपने प्रचालन के लिए सिंपल मेल ट्रांसपोर्ट प्रोटोकॉल (SMTP) का उपयोग करता है।
b) मेल सबमिशन एजेंट	ii) यह एक सॉफ्टवेयर एप्लिकेशन या एक प्रोग्राम है जिसका उपयोग ईमेल लिखने और पढ़ने के लिए किया जाता है।
c) मेल डिलीवरी एजेंट	iii) यह उपयोगकर्ता एजेंट से ईमेल लेता है और उन्हें मेल ट्रांसफर एजेंट को डिलीवर करता है।
d) मेल ट्रांसपोर्ट एजेंट	iv) यह मेल ट्रांसफर एजेंट से ईमेल लेता है और उन्हें मैसेज स्टोर में डिलीवर करता है।

Options :

1. a-ii, b-iv, c-iii, d-i
2. a-iii, b-ii, c-iv, d-i
3. a-ii, b-iii, c-iv, d-i
4. a-ii, b-iii, c-i, d-iv
- 5.

Answer : a-ii, b-iii, c-iv, d-i

Direction:

Match the column named 'Steps of Compiler Design' with the column named 'Description'.

- Question No. 64

कम्पाइलर डिजाइन के चरण	विवरण
a) इंटरमीडिएट कोड जनरेशन	i) यह चरण अनावश्यक कोड लाइनों को हटाता है और रिसोर्स को बर्बाद किए बिना प्रोग्राम के निष्पादन को गति देने के लिए स्टेटमेंट्स के अनुक्रम को व्यवस्थित करता है।
b) सिंटैक्स विश्लेषण	ii) इस चरण में, कम्पाइलर टारगेट मशीन के लिए सोर्स कोड का कोड उत्पन्न करता है।
c) सिमेंटिक विश्लेषण	iii) इस चरण में, कम्पाइलर सोर्स कोड के सिंटैक्स की जांच करता है ताकि यह सुनिश्चित हो सके कि यह प्रोग्रामिंग लैंग्वेज के नियमों के अनुरूप है।
d) कोड अनुकूलन	iv) इस चरण में, कम्पाइलर यह सुनिश्चित करने के लिए सोर्स कोड के अर्थ की जांच करता है कि यह अर्थपूर्ण है।

Options :

1. a-ii, b-iii, c-iv, d-i
2. a-iv, b-iii, c-i, d-ii
3. a-ii, b-iv, c-iii, d-i
4. a-iii, b-ii, c-iv, d-i
- 5.

Answer : a-ii, b-iii, c-iv, d-i

- Question No. 65

Which of the following options is not available under the 'Tracking' group in the 'Review' ribbon tab in MS-Word365?

Options :

1. Show Markup
2. Reviewing Pan
3. Previous Change
4. All Markup
- 5.

Answer : Previous Change

Direction:

Match the column named 'Short Form' with the column named 'Full Form'.

संक्षिप्त रूप	पूर्ण रूप
a) LCD	i) Printed Circuit Board (प्रिंटेड सर्किट बोर्ड)
b) ISP	ii) Liquid Crystal Display (लिक्विड क्रिस्टल डिस्प्ले)
c) SRAM	iii) Internet Service Provider (इंटरनेट सर्विस प्रोवाइडर)
d) PCB	iv) Static Random Access Memory (स्टेटिक रैंडम एक्सेस मेमोरी)

Options :

1. a-ii, b-iii, c-iv, d-i
2. a-iv, b-iii, c-i, d-ii
3. a-iii, b-ii, c-iv, d-i
4. a-ii, b-iv, c-iii, d-i
5. Prepare **50%** Faster

Answer : a-ii, b-iii, c-iv, d-i

- Question No. 67

Which of the given options best describes the truth of the following statements?

- i) The keyboard shortcut for superscript in MS-Word365 is Ctrl + Shift + +.
- ii) The keyboard shortcut to search text from a document in MS-Word365 is Ctrl + F.

Options :

1. i- true, ii- false
2. i- false, ii- false

3. i- false, ii- true

4. i- true, ii- true

5.

Answer : i- true, ii- true

• Question No. 68

Windows10 कीबोर्ड शॉर्टकट	विवरण
a) Shift + Delete	i) सेलेक्ट किए गए आइटम को कट करना।
b) Alt + Spacebar	ii) सेलेक्ट किए गए आइटम को रिसाइकिल बिन में ले जाए बिना मिटाना।
c) Shift + Ins	iii) एक्टिव विंडो के लिए शॉर्टकट मेनू खोलना।
d) Ctrl + X	iv) सेलेक्ट किए गए आइटम को पेस्ट करना।

Options :

1. a-ii, b-iv, c-iii, d-i

2. a-iv, b-iii, c-i, d-ii

3. a-ii, b-iii, c-iv, d-i

4. a-iii, b-ii, c-iv, d-i

5.

Answer : a-ii, b-iii, c-iv, d-i

• Question No. 69

Which of the given options best describes the truth of the following statements?

i) If the values in cells A15, A16 are 3, 5 respectively, and formula = A15^A16 is entered in cell A17, then the value of the cell will be 243.

ii) Function MATCH() of MS-Excel365 is used to search the specified item in a range of cells, and then returns the relative position of that item in the range.

iii) Donut chart of MS-Excel365 is used to show proportions of categorical data, in which the size of each part represents the proportion of each category.

Options :

1. i-false, ii-true, iii-true
2. i-true, ii-true, iii-false
3. i-true, ii-false, iii-true
4. i-true, ii-true, iii-true
- 5.

Answer : i-true, ii-true, iii-true

• Question No. 70

Which of the given options best describes the truth of the following statements?

- i) Assembler is a program for converting instructions written in high level language into relocatable machine code, and generating information for the loader.
- ii) The assembler must remain in main memory during execution of the assembly code.
- iii) Different types of assemblers include one pass assemblers and load-and-go assemblers.

Options :

1. i-true, ii-true, iii-false
2. i-true, ii-false, iii-true
3. i-true, ii-true, iii-true
4. i-false, ii-true, iii-true
- 5.

Answer : i-false, ii-true, iii-true

• Question No. 71

Which of the given options best describes the truth of the following statements?

- i) In Windows10, when Storage Sense is turned on, it will free up space when your PC is low on space.
- ii) In Windows10, 'Power & Sleep' option is used to save energy and battery lifetime.
- iii) In Windows10, Bluetooth, printer and mouse settings are in 'Devices' in PC Settings.

Options :

- 1. i-true, ii-true, iii-false
- 2. i-false, ii-true, iii-true
- 3. i-true, ii-true, iii-true
- 4. i-true, ii-false, iii-true
- 5.

Answer : i-true, ii-true, iii-true

• Question No. 72

Which of the given options best describes the truth of the following statements?

- i) Microsoft Outlook is an email application software.
- ii) Email clients use mail access protocols such as POP/IMAP protocols to retrieve/sync emails from the server.
- iii) Microsoft Exchange Server is a mail server and calendaring server developed by Sun Microsystems.





Options :

- 1. i-false, ii-true, iii-true
- 2. i-true, ii-false, iii-true
- 3. i-true, ii-true, iii-true
- 4. i-true, ii-true, iii-false
- 5.

Answer : i-true, ii-true, iii-false

Direction:

Match the column named 'MS-Word 365 Option Icon' with the column named 'Meaning'.

MS-Word 365 आप्शन आइकन	अर्थ
a) 	i) इनक्रीज फॉन्ट साइज
b) 	ii) पेज साइज
c) 	iii) लेफ्ट इंडेंट
d) 	iv) राइट इंडेंट

Options :

1. a-iv, b-iii, c-i, d-ii
2. a-ii, b-iv, c-iii, d-i
3. a-ii, b-iii, c-iv, d-i
4. a-iii, b-ii, c-iv, d-i
- 5.

Answer : a-ii, b-iii, c-iv, d-i

• Question No. 74

Which of the following is the full name of EDVAC?

Options :

1. Electronic Dedicated Variable Analog Computing
2. Electronic Data Variable Automatic Computer
3. Electronic Discrete Variable Automatic Computer
4. Electronic Discrete Variable Automatic Compiler
- 5.

Answer : Electronic Discrete Variable Automatic Computer

• Question No. 75

Which of the given options best describes the truth of the following statements?

- i) RSS is a process that makes the content of one website available on another website.
- ii) 'Cookies' are information created by a web server and stored on the user's computer.
- iii) Web server is a type of Database Management System (DBMS).

Options :

- 1. i-true, ii-true, iii-true
- 2. i-false, ii-true, iii-true
- 3. i-true, ii-false, iii-true
- 4. i-true, ii-true, iii-false
- 5.

Answer : i-true, ii-true, iii-false

• Question No. 76

What is the shortcut key Ctrl + C used for in MS-Word365?

Options :

- 1. To paste the contents of the clipboard
- 2. To copy selected content to the clipboard
- 3. To apply bold formatting to text
- 4. To select the contents of the entire document
- 5.

Answer : To copy selected content to the clipboard

• Question No. 77

Which of the following options is not available under 'This PC' Properties in Windows 10?

Options :

1. Tablet
2. Protect
3. Multitasking
4. Storage
- 5.

Answer : Protect

• Question No. 78

Which of the following options are available under 'SafeSearch' in Permission and History of Windows 10 Settings?

- i) Strict
- ii) Moderate
- iii) Off
- iv) On
- v) Low
- vi) Normal

Options :

1. ii, iii and iv
2. v and vi
3. i and ii
4. i, ii and iii
- 5.

Answer : i, ii and iii

• Question No. 79

Which of the given options best describes the truth of the following statements?

- i) IP address means Internet Protocol address.
- ii) The word MAN stands for Metropolitan Area Network.
- iii) The word CD-ROM means Copy and Display ROM.

Options :

- 1. i-false, ii-true, iii-true
- 2. i-true, ii-true, iii-true
- 3. i-true, ii-false, iii-true
- 4. i-true, ii-true, iii-false
- 5.

Answer : i-true, ii-true, iii-false

Direction:

Match the column named 'Excel Formula/Expression' with the column named 'Output'.

एक्सेल फॉर्मूला/एक्सप्रेशन	आउटपुट
a) =MID("mumbai metro",8,5)	i) Mumbai Metro
b) = REPT("mumbi metro",3)	ii) metro
c) = DEC2HEX(11)	iii) mumbi metromumbi metromumbi metro
d) =PROPER("mumbai metro")	iv) B

Options :

- 1. a-iii, b-ii, c-iv, d-i
- 2. a-ii, b-iv, c-iii, d-i

3. a-ii, b-iii, c-iv, d-i

4. a-iv, b-iii, c-i, d-ii

5.

Answer : a-ii, b-iii, c-iv, d-i

• Question No. 81

Answer the question given below on the basis of the given number and symbol series.

(left) 3 @ 2 \$ \$ # % 4 ^ * 6 @ 0 6 * % 2 £ 2 & 2 5 % 2 3 (right)

How many such numbers are there in the above series, each of which is immediately preceded by a symbol and immediately followed by a number?

Options :

1. 1

2. 4

3. 2

4. 3

5.

Answer : 3

• Question No. 82

Shreya's younger brother Sahil is elder to Surbhi. Suman is younger than Swati but older than Shreya. who is the tallest?

Options :

1. Shreya

2. Suman

3. Sahil

4. Swati

5.

Answer : Swati

- Question No. 83

Choose the most appropriate antonym of the given word.

RELAXED

Options :

1. Lazy
2. Carefree
3. Worried
4. Calm
- 5.

Answer : Worried

- Question No. 84

If in a certain code language 'ACE' is written as 'DGJ', or ARMS is written as DVRY, then how will 'STOP' be written in the same language?

Options :

1. UWTV
2. UXTV
3. VXTV
4. VXTU
- 5.

Answer : VXTV

- Question No. 85

I asked her / that why she was / beating about the bush.

Options :

1. No error
2. I asked her
3. that why she was
4. beating about the bush
- 5.

Answer : that why she was

• Question No. 86

If in a certain code language

1. 'nike ke pe' means 'where are you'.
2. 'ke na ra da' means 'you can sit there'.
3. 'lo ra ta' means 'please sit here'.

So what does 'nike' mean in this language?

1. Where
2. are
3. Where or are
4. None of these

Options :

1. 3
2. 2
3. 1
4. 4
- 5.

Answer : 3

- Question No. 87

Select the number from the given options which will come in place of the question mark (?) in the following series.

18, 23, 30, 39, 50, ?

Options :

1. 64
2. 59
3. 62
4. 63
- 5.

Answer : 63

- Question No. 88

Among five friends, Rohan is shorter than Sushila and taller than Hardik. Niza is taller than Harry but shorter than Hardik. Sushila is shorter than Rohan. Who is the tallest?

Options :

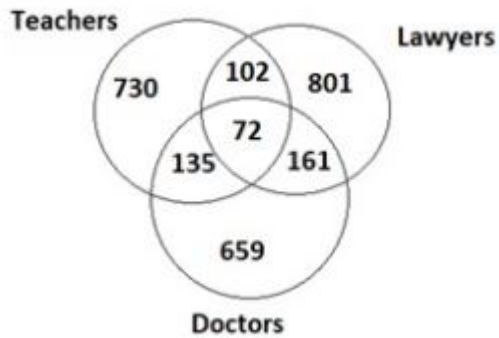
1. Niza
2. Sushila
3. Rohan
4. Hardik
- 5.

Answer : Rohan

Direction:

Study the given diagram carefully and answer the question.

The numbers in different sections indicate the number of persons.



- Question No. 89

How many people are only lawyers?

Options :

1. 102
2. 161
3. 72
4. 801
- 5.

Answer : 801

- Question No. 90

Select the misspelled word.

Options :

1. Pilgrimage
2. Frequented
3. Nonetheless
4. pleasant
- 5.

Answer : pleasant

Direction:

Read the given statements and conclusions carefully. Decide which of the given conclusions logically follows from the statements.

- Question No. 91

Statement: "It is difficult to form true selfless friendship with women after their marriage as they always give priority to their family over their friends." – A woman complains to her husband.

conclusion:

- I. Priority should be given to families by elders to maintain good relations within the family.
- II. Friendship with a married person is not possible.

Options :

1. Only conclusion II follows
2. Both conclusions follow
3. Only conclusion I follows
4. Neither conclusion I nor II follows
- 5.

Answer : Neither conclusion I nor II follows

Direction:

The following question is based on the five numbers given below. Study the given information and answer the following question.

- Question No. 92

649, 457, 189, 228, 497

What will be the product of the third digit of the second smallest number from the left and the first digit of the second largest number from the left?

Options :

1. 18
2. 32
3. 24

4. 40

5.

Answer : 32

Direction:

The following sentence has been divided into parts. There is an error in one of these parts. Select the part which contains the error from the given options. If you do not find any errors, select 'No Error' as your answer.

- Question No. 93

Work hard / lest you / may not fail.

Options :

1. lest you
2. Work hard
3. No error
4. may not fail
- 5.

Answer : may not fail

Direction:

Below are given some parts of a sentence in jumbled order. Arrange the parts in the correct order to make a meaningful sentence.

- Question No. 94

A. where little

B. barren area of land

C. precipitation occurs

D. a desert is a

Options :

1. BCDA

2. ADBC
3. CADB
4. DBAC
- 5.

Answer : DBAC

• Question No. 95

In the word OXYGEN, each vowel is replaced by the letter following it in the English alphabetical order and each consonant is replaced by the letter preceding it in the English alphabetical order. If each letter thus formed is arranged alphabetically, which letter will be fourth from the left?

Options :

1. W
2. M
3. F
4. P
- 5.

Answer : P

Direction:

Select the option which is related to the third word in the same way as the second word is related to the first word.

• Question No. 96

Clothes : Wardrobe :: Car : ?

Options :

1. mechanic
2. garage
3. Owner
4. highway
- 5.

Answer : garage

- Question No. 97

Just as Norway is related to Oslo, Kenya is related to _____.

Options :

1. nairobi
2. tehran
3. moscow
4. Nicosia
- 5.

Answer : nairobi

Direction:

Select the most appropriate option to fill in the blanks.

- Question No. 98

I was lucky to have _____ the plane crash.

Options :

1. Endured
2. Recovered
3. Handled
4. Survived
- 5.

Answer : Survived

- Question No. 99

Mark the incongruous.

Options :

1. Ghagra
2. Gandak
3. Kosi
4. hesitation
- 5.

Answer : hesitation

Direction:

From the given options, select the alphanumeric group which will come in place of the question mark (?) in the following series.

- Question No. 100

QU41, TO36, WI29, ZE18, ?

Options :

1. CA4
2. CA5
3. CA6
4. CA9
- 5.

Answer : CA5

[Attempt Mock Test Now](#)

All ixamBee Mock Test are FREE @ www.ixamBee.com