

• Question No. 1

Who among the following represents the full authority of the Lok Sabha?

Options :

1. President
2. Vice President
3. Speaker
4. Prime Minister
- 5.

Answer : Speaker

• Question No. 2

Who among the following is the author of the book 'The Indian Struggle'?

Options :

1. Jawaharlal Nehru
2. Mahatma Gandhi
3. Maulana Abul Kalam Azad
4. Subhash Chandra Bose
- 5.

Answer : Subhash Chandra Bose

• Question No. 3

The Sepoy Mutiny or First war of Independence against British rule took place in the year:

Options :

1. 1836
2. 1857

3. 1757

4. 1716

5.

Answer : 1857

• Question No. 4

The OECD (The Organisation for Economic Co-operation and Development) headquarters are situated in:

Options :

1. Paris

2. Geneva

3. Washington DC

4. Tokyo

5.

Answer : Paris

• Question No. 5

Kaziranga National Park is famous for:

Options :

1. Tiger

2. Lion

3. Thar

4. One-horn rhino

5.

Answer : One-horn rhino

• Question No. 6

Who was the first person to fly into space?

Options :

1. Yelena Serova
2. Valentina Goryacheva
3. Yuri Gagarin
4. Neil Armstrong
- 5.

Answer : Yuri Gagarin

• Question No. 7

The energy currency of the cell is called as:

Options :

1. AMP
2. ATP
3. DNA
4. RNA
- 5.

Answer : ATP

• Question No. 8

Amir Khusrau was born at _____ in Uttar Pradesh.:

Options :

1. Patiyali
2. Agra
3. Ghaziabad
4. Kanpur
- 5.

Answer : Patiyali

- Question No. 9

In which of the following years, Queen Victoria's Proclamation declared that thereafter India would be governed by and in the name of the British Monarch through a Secretary of State?

Options :

1. 1857
2. 1855
3. 1856
4. 1858
- 5.

Answer : 1858

- Question No. 10

Which gas is produced during the process of photosynthesis?

Options :

1. Carbon monoxide
2. Oxygen
3. Hydrogen
4. Carbon dioxide
- 5.

Answer : Oxygen

- Question No. 11

As of October 2020, who is the Chief Election Commissioner of India?

Options :

1. Achal Kumar Jyoti
2. Sunil Arora

3. Nasim Zaidi
4. Om Prakash Rawat
- 5.

Answer : Sunil Arora

• Question No. 12

Who wrote the novel 'A Passage to India'?

Options :

1. Aziz Ahmed
2. Nirad C Chaudhari
3. EM Forster
4. Gunnar Myrdal
- 5.

Answer : EM Forster

• Question No. 13

What was the total time taken to draft the Constitution of India?

Options :

1. 2 years, 10 months and 17 days
2. 2 years, 7 months and 17 days
3. 2 years, 11 months and 17 days
4. 2 years, 9 months and 10 days
- 5.

Answer : 2 years, 11 months and 17 days

• Question No. 14

When was the National Green Tribunal established by the Government of India?

Options :

1. 2009
2. 2011
3. 2012
4. 2010
- 5.

Answer : 2010

• Question No. 15

_____ a 17 year old girl from Surat has been appointed as Regional Ambassador for India by United Nations Environment Programme Tunza Eco-Generation in Sept 2020.

Options :

1. Janhvi Shah
2. Rina Navlekha
3. Khushi Chindaliya
4. Rani Patel
- 5.

Answer : Khushi Chindaliya

• Question No. 16

ESS is a Computer based system that allows users to transform enterprise data. ESS stands for:

Options :

1. Executive Support System
2. Executive Series System
3. Executive Senior System
4. Executive Service System
- 5.

Answer : Executive Support System

- Question No. 17

The Quit India Movement started in the year:

Options :

1. 1940
2. 1922
3. 1935
4. 1942
- 5.

Answer : 1942

- Question No. 18

Settling down of heavier insoluble components of a mixture of water and insoluble substances is called:

Options :

1. evaporation
2. decantation
3. filtration
4. sedimentation
- 5.

Answer : sedimentation

- Question No. 19

Who won the women's doubles Australian Open 2020?

Options :

1. Gabriela Dabrowski and Mate Pavić

2. Timea Babos and Kristina Mladenovic
3. Kristina Mladenovic and Caroline Garcia
4. Samantha Stosur and Zhang Shuai
- 5.

Answer : Timea Babos and Kristina Mladenovic

• Question No. 20

Which of the following nations was part of 'Axis Powers' in World War II?

Options :

1. Russia
2. Germany
3. Britain
4. USA
- 5.

Answer : Germany

• Question No. 21

As of January 2020, which of the following is NOT a Maharatna company?

Options :

1. Hindustan Newsprint Limited (HNL)
2. Gas Authority of India Limited (GAIL)
3. Bharat Heavy Electricals Limited (BHEL)
4. Indian Oil Corporation Limited (IOCL)
- 5.

Answer : Hindustan Newsprint Limited (HNL)

• Question No. 22

Which is the longest river in the world?

Options :

1. Yangtze
2. Nile
3. Amazon
4. Ganga
- 5.

Answer : Nile

- Question No. 23

Which is the highest waterfall of the world on land?

Options :

1. Angel
2. Ribbon
3. Gavarnie
4. Jog
- 5.

Answer : Angel

- Question No. 24

The Indian Air Force was established on:

Options :

1. 8 October 1932
2. 10 September 1932
3. 16 December 1932
4. 10 April 1932
- 5.

Answer : 8 October 1932

- Question No. 25

When did India carry out the first nuclear test at Pokhran?

Options :

1. 18 May 1974
2. 18 June 1974
3. 18 May 1975
4. 28 May 2005
- 5.

Answer : 18 May 1974

- Question No. 26

Which of the following is the CORRECT statement for the Kishor category under the Pradhan Mantri Mudra Yojana?

Options :

1. Loan to small businessmen from 25 thousand up to 5 lakhs
2. Loan to small businessmen from 75 thousand up to 15 lakhs
3. Loan to small businessmen from 35 thousand up to 7.5 lakhs
4. Loan to small businessmen from 50 thousand up to 5 lakhs
- 5.

Answer : Loan to small businessmen from 50 thousand up to 5 lakhs

- Question No. 27

Which among the following is the tallest tree species in the world?

Options :

1. Oak

2. Deodar
3. Redwood
4. Eucalyptus
- 5.

Answer : Redwood

- Question No. 28

Who is/are the author/s of the book 'The General Theory of Employment, Interest and Money'?

Options :

1. David Ricardo
2. Harrod and Domar
3. Lewis Carroll
4. John Maynard Keynes
- 5.

Answer : John Maynard Keynes

- Question No. 29

The battle in which Babur defeated Ibrahim Lodi was the:

Options :

1. Battle of Panipat
2. Battle of Chanderi
3. Battle of Chausa
4. Battle of Khanwa
- 5.

Answer : Battle of Panipat

- Question No. 30

Which Article of the Constitution of India provides for universal adult suffrage?

Options :

1. 326
2. 329A
3. 327
4. 325
- 5.

Answer : 326

- Question No. 31

Who has won the 'battle of Hydaspes'?

Options :

1. Porus
2. Alexander
3. Babur
4. Ashoka
- 5.

Answer : Alexander

- Question No. 32

Which article of the Indian constitution says, 'The state shall take steps to separate the judiciary from the executive in the public services of the state'?

Options :

1. Article 25
2. Article 55
3. Article 50
4. Article 35

5.

Answer : Article 50

- Question No. 33

National Skill Development Mission was launched by the Prime Minister of India in:

Options :

1. 2014

2. 2013

3. 2015

4. 2016

5.

Answer : 2015

- Question No. 34

Entomophily pollination occurs with the help of:

Options :

1. insects

2. animals

3. water

4. wind

5.

Answer : insects

- Question No. 35

The compound of a metal found in nature is called:

Options :

1. flux
2. mineral
3. ore
4. slag
- 5.

Answer : mineral

• Question No. 36

Who has built the Hawa Mahal?

Options :

1. Maharaja Kumar Singh
2. Maharana Pratap Singh
3. Maharaja Sawai Pratap Singh
4. Raja Jai Singh
- 5.

Answer : Maharaja Sawai Pratap Singh

• Question No. 37

Who among the following were awarded the Nobel Peace Prize for 2018?

Options :

1. Nadia Murad and Arthur Ashkin
2. Arthur Ashkin and George P Smith
3. Denis Mukwege and Arthur Ashkin
4. Denis Mukwege and Nadia Murad
- 5.

Answer : Denis Mukwege and Nadia Murad

- Question No. 38

Where did the Prime Minister inaugurate the Pandit Deendayal Upadhyaya Institute of Archaeology in 2019?

Options :

1. Mughalsarai
2. Greater Noida
3. Mumbai
4. Varanasi
- 5.

Answer : Greater Noida

- Question No. 39

In 1991, the government set up the Tax Reforms Committee under the chairmanship of:

Options :

1. Vijay Kelkar
2. Raja J Chelliah
3. Narasimha Rao
4. Raghuram Rajan
- 5.

Answer : Raja J Chelliah

- Question No. 40

_____ is the only State of India where the Sangai deer is found.

Options :

1. Madhya Pradesh
2. Manipur
3. Assam

4. Kerala

5.

Answer : Manipur

• Question No. 41

A question is given followed by two arguments. Decide which of the arguments is/are strong with respect to the question

Question:

Is boarding school system beneficial to children?

Arguments:

(i) Yes, boarding school system separates children from their homes which is beneficial.

(ii) No. getting separated from parents for long periods of time may damage children's relationship with them, leaving the children feeling anxious or alone.

Options :

1. None of the arguments is strong.

2. Both the arguments are strong.

3. Only argument (i) is strong.


4. Only argument (ii) is strong.

5.

Answer : Only argument (ii) is strong.

• Question No. 42

Study the given pattern carefully and select the number from among the given options that can replace the question mark (?).



Options :

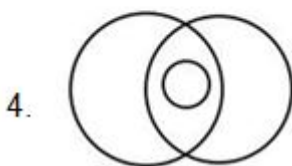
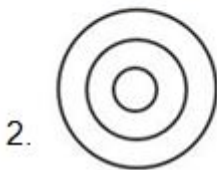
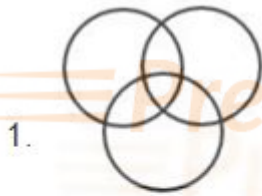
1. 6
2. 8
3. 10
4. 18
- 5.

Answer : 18

- Question No. 43

Select the Venn diagram that best represents the relationship between the following classes.

Rivers, Ganga, Water bodies



Options :

1. 1
2. 2
3. 3
4. 4
- 5.

Answer : 2

• Question No. 44

Read the given statements and conclusions carefully. Assuming that the information given in the statements is true, even if it appears to be at variance with commonly known facts, decide which of the given conclusions logically follow(s) from the statements

Statements:

Some eggs are onions

All onions are blue.

Conclusions:

I. All eggs are blue.

II. All onions are eggs.

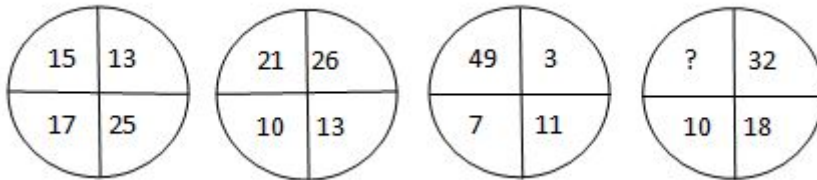
Options :

1. Neither conclusion I nor II follows.
2. Both the conclusions follow.
3. Only conclusion I follows.
4. Only conclusion II follows.
- 5.

Answer : Neither conclusion I nor II follows.

• Question No. 45

Study the given pattern carefully and select the number from among the given options that can replace the question mark (?).



Options :

1. 65
2. 69
3. 10
4. 8
- 5.

Answer : 10

- Question No. 46

Study the given pattern carefully and select the numbers from among the given options that can replace the question marks (?).

$$25 \blacklozenge 64 = 5 ; 8 ; 13$$

$$144 \blacklozenge 36 = 12 ; 6 ; 18$$

$$121 \blacklozenge 81 = ? ; ? ; ?$$

Options :

1. 2; 5; 7
2. 11; 9; 20
3. 12; 18; 30
4. 7; 10; 17
- 5.

Answer : 11; 9; 20

- Question No. 47

Walter is Heisenberg's twin brother. Heisenberg is Eva's brother, Newton is Eva's father and Skyler's brother. Skyler is the mother of two children and has two nephews and three nieces. How is Skyler related to Walter's mother?

Options :

1. Father's sister
2. Mother's sister
3. Husband's mother
4. Husband's sister
- 5.

Answer : Husband's sister

- Question No. 48

Study the given pattern carefully and select the number from among the given options that can replace the question mark (?).



Options :

1. 2
2. 4
3. 3
4. 8
- 5.

Answer : 4

- Question No. 49

In a certain code language, ALBINISM is written as 79. How will NEURON be written in that code?

Options :

1. 87
2. 98
3. 45
4. 39
- 5.

Answer : 87

- Question No. 50

A question is given followed by two arguments. Decide which of the arguments is/are strong with respect to the question.

Question:

Should parents buy war-type video games for their children?

Arguments:

(i) Yes, such games are useful in developing strategy and planning skills in children.

(ii) No, war-type toys do not teach children good values.

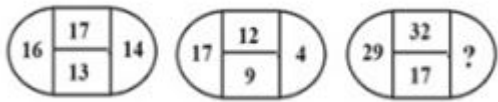
Options :

1. None of the arguments is strong.
2. Only argument (ii) is strong.
3. Only argument (i) is strong.
4. Both the arguments are strong.
- 5.

Answer : Both the arguments are strong.

- Question No. 51

Study the given pattern carefully and select the number from among the given options that can replace the question mark (?)



Options :

1. 28
2. 32
3. 20
4. 22
- 5.

Answer : 20

- Question No. 52

Five girls Priya, Usha, Riya, Shreya and Tina wrote a novel. The one who wrote first gave it to Riya. The one who wrote last took it from Priya. Tina was not the first or the last to write. There were two writers in between Usha and Priya. Who was the last to write the novel?

Options :

1. Shreya
2. Usha
3. Priya
4. Riya
- 5.

Answer : Shreya

- Question No. 53

Select the option in which the words share the same relationship as that shared by the given pair of words.

Train : Travel

Options :

1. Round : Circle
2. Ideas : Dreams
3. Food : Noodles
4. Pen : Write
- 5.

Answer : Pen : Write

• Question No. 54

Study the given pattern carefully and select the number from among the given options that can replace the question mark (?).



Options :

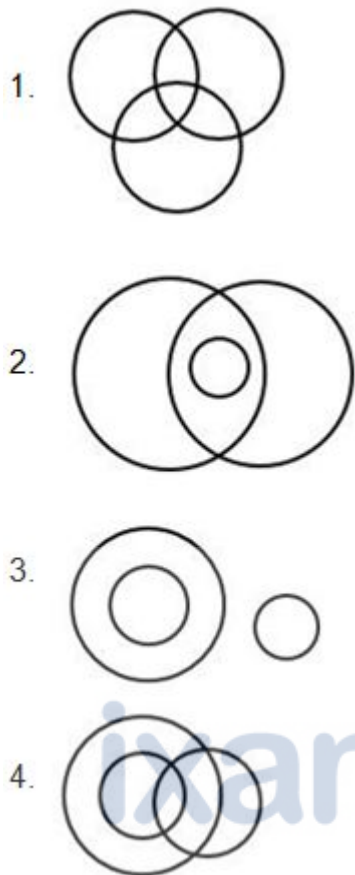
1. 240
2. 177
3. 320
4. 126
- 5.

Answer : 240

• Question No. 55

Select the Venn diagram that best represents the relationship between the following classes.

Honesty, Banana, Virtue



Options :

1.1

2.2

3.3

4.4

5.

Answer : 3

- Question No. 56

In a certain code language, BAYWATCH is written as ZYWUYRAF. How will EFRON be written in that code?

Options :

1. CDPML

2. DEQNO
3. BCOLK
4. DCOLN
- 5.

Answer : CDPML

• Question No. 57

Select the option in which the words share the same relationship as that shared by the given pair of words.

Kingfisher : Bird

Options :

1. Apple : Fruit
2. Cold : Hot
3. Fat : Body
4. Fur : Cat
- 5.

Answer : Apple : Fruit

• Question No. 58

Four word-pairs have been given, out of which three are alike in some manner and one is different. Select the odd one.

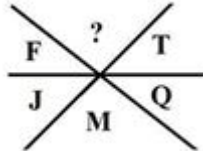
Options :

1. Tomato : Fruit
2. Cricket : Sport
3. Nut : Almond
4. Adidas : Brand
- 5.

Answer : Nut : Almond

- Question No. 59

Study the given pattern carefully and select the letter from among the given options that can replace the question mark



Options :

1. U
2. V
3. W
4. X
- 5.

Answer : X

- Question No. 60

Four words have been given, out of which three are alike in some manner and one is different. Select the odd one.

Options :

1. Fillers
2. Incisors
3. Canines
4. Premolars
- 5.

Answer : Fillers

- Question No. 61

Select the term from among the given options that can replace the question mark (?) in the following series.

2A, 3C, 5F, 7J, 11O, ?

Options :

1. 13U
2. 15U
3. 17U
4. 13V
- 5.

Answer : 13U

- Question No. 62

Study the given pattern carefully and select the letter from among the given options that can replace the question mark (?)



Options :

1. Q
2. M
3. O
4. P
- 5.

Answer : M

- Question No. 63

Select the term from among the given options that can replace the question mark (?) in the following series.

D4W, G5T, K9P, ?, S23H, V37E

Options :

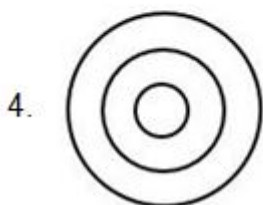

1. O13L
2. P13L
3. O13M
4. O14L
- 5.

Answer : O14L

• Question No. 64

Select the Venn diagram that best represents the relationship between the following classes.

Blue, Water, Star



Options :

- 1.1

2. 2

3. 3

4. 4

5.

Answer : 2

• Question No. 65

Select the combination of mathematical symbols from among the given options that when sequentially placed in the blank boxes will result in a balanced equation.

$$57 \square 3 \square 2 \square 2 \square 15 \square 25$$

Options :

1. $\div, \times, =, +, +$

2. $\div, \times, +, =, +$

3. $+, =, \div, \times, +$

4. $\div, \times, -, =, \times$

5.

Answer : $\div, \times, +, =, +$

• Question No. 66

What is the remainder of function $4a^3 - 12a^2 + 14a - 3$ when divided by $(2a-1)$?

Options :

1. $-2/3$

2. $-3/2$

3. $2/3$

4. $3/2$

5.

Answer : $3/2$

- Question No. 67

What is the greatest number which divides 13, 26, and 39 and gives the remainder as 1, 2, and 3 respectively?

Options :

1. 4
2. 6
3. 12
4. 2
- 5.

Answer : 12

- Question No. 68

If the sum of three numbers is zero, then which of the options below will always be equal to the value of the sum of the cubes of those numbers?

Options :

1. one
2. three times the product of the three numbers
3. product of the three numbers
4. zero
- 5.

Answer : three times the product of the three numbers

- Question No. 69

The LCM of x and y is 2079 and their HCF is 27. If $x = 189$, what will be the value of y ?

Options :

1. 167
2. 197

3. 267

4. 297

5.

Answer : 297

- Question No. 70

If the value of $\frac{1}{36.18}$ is 0.0276, then what is the value of $\frac{1}{0.0003618}$?

Options :

1. 2760

2. 276.0

3. 2760

4. 2.76

5.

Answer : 2760

- Question No. 71

A sum of money, invested for 8 years on 5% per annum simple interest, amounted to ₹175 on maturity.

What was the sum invested?

Options :

1. ₹120

2. ₹125

3. ₹140

4. ₹175

5.

Answer : ₹125

- Question No. 72

12 people can sweep the floor in 4 days with 12 brooms. In how many days can 8 people sweep the floor with 8 brooms?

Options :

1. 6
2. 5
3. 1
4. 7
- 5.

Answer : 6

- Question No. 73

The measure of an angle is one-half of its supplementary angle. Find its measure.

Options :

1. 30°
2. 90°
3. 60°
4. 120°
- 5.

Answer : 60°

- Question No. 74

If $\cos \theta + \sec \theta = \sqrt{3}$, then the value of $\cos^3 \theta + \sec^3 \theta$ is:

Options :

1. $2\sqrt{3}$
2. $1/\sqrt{3}$

3. $\sqrt{3}$

4. 0

5.

Answer : 0

• Question No. 75

How many factors of $2^3 \times 3^3 \times 5^4 \times 7^2$ are divisible by 50 but not by 100?

Options :

1. 42

2. 40

3. 36

4. 38

5.

Answer : 36

• Question No. 76

If the length of a rectangle is increased by 70%, what would be the percentage decrease (correct to the nearest integer) in the width to maintain the same area?

Options :

1. 61%

2. 60%

3. 59%

4. 58%

5.

Answer : 59%

• Question No. 77

The speeds of three cars are in the ratio of 2: 3: 4. The ratio of respective time taken by these cars to travel the same distance is:

Options :

1. 2 : 4: 6
2. 6: 4: 3
3. 6: 5: 3
4. 1: 2: 3
- 5.

Answer : 6: 4: 3

- Question No. 78

A Man sold 2 articles for ₹4,000 each, gained 15% on one and lost 15% on the other. What is the total gain or loss rounded to the nearest integer?

Options :

1. ₹200 gain
2. ₹190 loss
3. ₹184 loss
4. ₹175 gain
- 5.

Answer : ₹184 loss

- Question No. 79

What is the number of divisors of 120?

Options :

1. 16
2. 19
3. 15

4. 17

5.

Answer : 16

- Question No. 80

What is the maximum value of a given item per kg out of the given years of the given table: -

Year	Quantity (in kg)	Value (in ₹)
1993	110	230
1994	95	210
1995	125	340
1996	130	430

Options :

1. 3.3

2. 2.7

3. 2.21

4. 2.09

5.

Answer : 3.3

- Question No. 81

A cube of volume 324 cm^3 is molded into a cuboid whose length, width, and height are in the ratio 3: 2: 2. Find the length of the cuboid.

Options :

1. 6 cm

2. 12 cm

- 3. 9 cm
- 4. 7.5 cm
- 5.

Answer : 9 cm

- Question No. 82

What is the value of $\frac{7}{9} - \frac{11}{12} + \frac{13}{16} - \frac{1}{8}$?

Options :

- 1. 79/144
- 2. 150/144
- 3. 144/79
- 4. 34/144
- 5.

Answer : 79/144

- Question No. 83

If 50L of liquid containing 20% spirit is added with 10L of water then what would be the percentage of spirit in the resulting mixture?

Options :

- 1. 12(1/2)%
- 2. 20%
- 3. 16(2/3)%
- 4. 33(1/3)%
- 5.

Answer : 16(2/3)%

- Question No. 84

A bowl contains 9 blue balls, 7 white, and 5 black balls. If 2 balls are drawn in one go, then the probability of exactly one ball being white is:

Options :

1. $7/15$
2. $1/14$
3. $7/21$
4. $7/14$
- 5.

Answer : $7/15$

- Question No. 85

A train service was disrupted due to an accident after a travel of 30 km. The speed was reduced to four-fifths of the original speed. This caused it a delay of 45 min. If the accident had happened 18 km farther, it would have been running late for 36 min. What was the original speed of the train?

Options :

1. 30 km/h
2. 60 km/h
3. 50 km/h
4. 40 km/h
- 5.

Answer : 30 km/h

- Question No. 86

What is the place value of 3 in 367892141?

Options :

1. 3×10^8
2. 3×10^7

3. 3×10^3

4. 3×10^4

5.

Answer : 3×10^4

- Question No. 87

What is the value of $(6 + 4) \times \frac{4}{2} + 5 - 3$?

Options :

1. 12

2. 22

3. 24

4. 42

5.

Answer : 22

- Question No. 88

X can work as fast as Y and Z together. X and Y together can finish the same task 3 times as fast as Z. If all three working together can finish the task in 15 days, how many days, will Z take to finish the task?

Options :

1. 70

2. 80

3. 60

4. 90

5.

Answer : 60

- Question No. 89

From a watch tower of 200 m height, the angles of depression of two cliffs in a horizontal line through the base of the tower are 45° and 30° . Find the distance between the cliffs if they are on the same side.

1. $\frac{200}{(1-\sqrt{3})}$ m
2. $200(1+\sqrt{3})$ m
3. $200(\sqrt{3}-1)$ m
4. $\frac{200}{\sqrt{3}}$ m

Options :

1. 1
2. 2
3. 3
4. 4
- 5.

Answer : 3

- Question No. 90

In a circle, two chords of lengths x and y subtend the angles of 60° and 90° at the center respectively. Which of the following is correct in this scenario?

Options :

1. $y = \sqrt{2}x$
2. $y = 2x$
3. $x = 2y$
4. $y = \sqrt{2}x$
- 5.

Answer : $y = \sqrt{2}x$

- Question No. 91

What is the value of $\frac{(6 \times 2)}{(8 - 1 + 5)}$?

Options :

1. 1
2. 6
3. 2
4. 9
- 5.

Answer : 1

- Question No. 92

In a given population, 20% of the population is affected with asthma out of which 90% of asthma patients used to work in flour mills. If 30% of the total population was working in flour mills, then what will be the percentage of the people working in flour mills who are suffering from asthma?

Options :

1. 60%
2. 30%
3. 40%
4. 50%
- 5.

Answer : 60%

- Question No. 93

What is the value of $\sqrt{75} + \sqrt{147}$?

Options :

1. $5\sqrt{3}$
2. $7\sqrt{3}$

3. $12\sqrt{3}$

4. $12\sqrt{3}$

5.

Answer : $12\sqrt{3}$

• Question No. 94

18 skilled workers can complete a task in 12 days while 24 semi-skilled workers need 15 days to complete the same task. 12 skilled workers started the task but 3 of them left after a few days. How many semi-skilled workers should replace the 3 skilled ones who left so that the task can be completed in stipulated time?

Options :

1. 5

2. 4

3. 7

4. 6

5.

Answer : 5

• Question No. 95

The sum of cost prices of two bikes is ₹1,00,000. One bike was sold at a profit of 20% and the second one was sold at a loss of 20%. If the selling prices are same, what is the cost price of the first bike sold?

Options :

1. ₹60,000

2. ₹35,000

3. ₹50,000

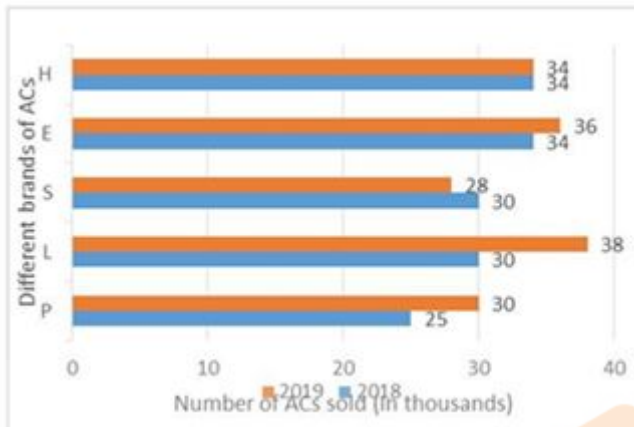
4. ₹40,000

5.

Answer : ₹40,000

Direction:

The given bar graph shows the total number of air conditioners (ACS) of different brands, P, L, S, E and H (in thousand numbers) sold by a supplier in 2018 and 2019. Study the graph carefully and answer the following question.



- Question No. 96

For which of the following pairs of brands was the total number of ACs sold in 2018 and 2019 together equal?

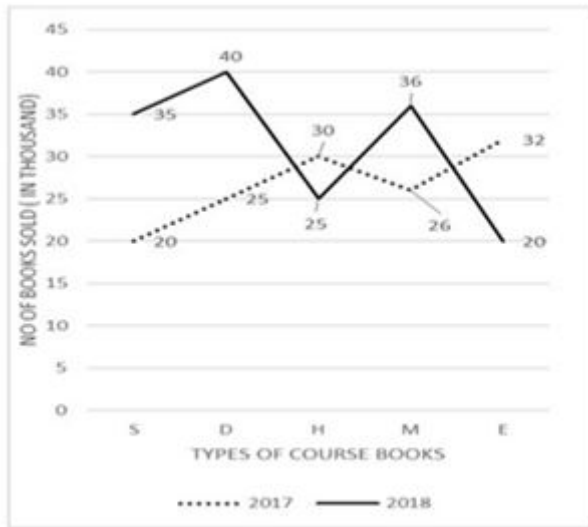
Options :

1. E and H
2. S and H
3. P and S
4. H and L
- 5.

Answer : H and L

Direction:

The given line graph shows the total number of course books of Science (S), Drawing (D), Hindi (H), Mathematics (M) and English (E) (in thousand numbers) sold by a printing company in 2017 and 2018. Study the graph carefully and answer the following question.



- Question No. 97

Sales for books in which subject have fallen the most between 2017 and 2018?

Options :

1. Drawing
2. English
3. Hindi
4. Maths
- 5.

Answer : English

Direction:

Study the given table that shows the number of students who appeared in the UPSC exam from five different states of India, and answer the following question.

States \ Years	A.P	U.P	MP	Punjab	Kerala
2014	280	300	250	500	440
2015	320	400	280	450	400
2016	260	450	240	320	350
2017	400	500	400	500	380
2018	350	430	540	410	420

- Question No. 98

What is the ratio of the total number of students who appeared in the UPSC exams in 2016 and 2017 from AP to that of students who appeared from UP for these years?

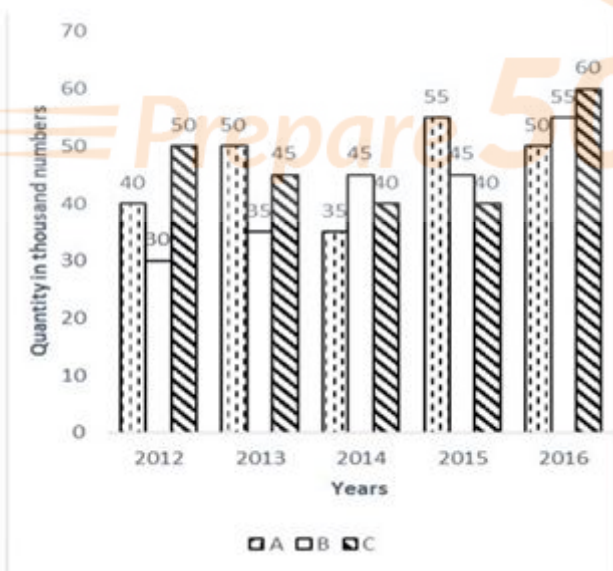
Options :

1. 66: 95
2. 85: 52
3. 2: 6
4. 15: 7
- 5.

Answer : 66: 95

Direction:

The given bar graph shows the data of the production of XYZ automobiles (in thousand numbers) by three branches, A, B and C of, a company over 5 years



- Question No. 99

Which branch has recorded the highest percentage growth in production of XYZ automobiles in the given period?

Options :

1. Branch B with greater than 80% growth
2. Branch C with 100% growth
3. Branch A with greater than 50% growth
4. Branch B with approximately 50% growth
- 5.

Answer : Branch B with greater than 80% growth

• Question No. 100

Four words have been given, out of which three are alike in some manner and one is different. Select the odd one.

Options :

1. Teacher
2. Principal
3. Engineer
4. Doctor
- 5.

Answer : Principal

[Attempt Mock Test Now](#)

All ixamBee Mock Test are FREE @ www.ixamBee.com