

• Question No. 1

In the following question below are given some statements followed by some conclusions based on those statements. Taking the given statements to be true even if they seem to be at variance from commonly known facts. Read all the conclusions and then decide which of the given conclusion(s) logically follows the given statements.

Statements:

I. All land are vacant.

II. No land is girl.

Conclusions:

I. All vacant are land.

II. All girls are vacant.

Options :

1. Only conclusion II follows
2. Neither conclusion follows
3. Only conclusion I follows
4. Both conclusions I and II follows
- 5.

Answer : Neither conclusion follows

• Question No. 2

Eight boys B1, B2, B3, B4, B5, B6, B7 and B8 are sitting in a row facing towards the north (not necessarily in the same order). B6 is fifth to the right of B1. B4 is fifth to the right of B5. B5 is to the immediate right of B1. B8 is third to the left of B4. B2 is third to the right of B7. B7 is an immediate neighbour of B1. Who is sitting on the immediate right of B2?

Options :

1. B8
2. B7
3. B5
4. B6
- 5.

Answer : B8

• Question No. 3

Which of the following letter-number cluster will replace the blank (___) in the given series?

ME18, OG22, QI26, SK30, UM34, _____

Options :

1. WO38
2. WO36
3. VO38
4. VO36
- 5.

Answer : WO38

• Question No. 4

'E × F' means 'E is the wife of F'

'E + F' means 'E is the brother of F'

'E ÷ F' means 'E is the sister of F'

'E - F' means 'E is the son of F'

How is J related to L in the expression I + J ÷ K - L'?

Options :

1. Mother
2. Sister
3. Daughter
4. Wife
- 5.

Answer : Daughter

• Question No. 5

If $7 * 5 @ 10 \# 20 = 370$ and $4 * 3 @ 5 \# 30 = 90$, then

$2 * 3 @ 4 \# 5 = ?$

Options :

1. 19
2. 27
3. 29
4. 21
- 5.

Answer : 29

• Question No. 6

Six friends P, Q, R, S, T, and U are sitting around a circular table facing away from the center. U sits exactly between R and S. S sits to the immediate left of T. P is sitting to the immediate right of Q. Who sits to the opposite of T?


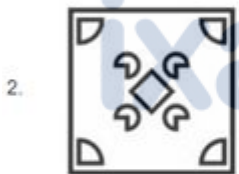

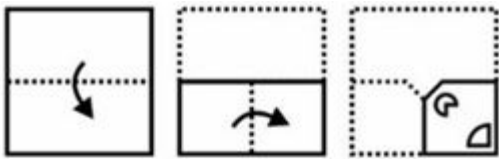
Options :

1. S
2. U
3. R
4. Q
- 5.

Answer : R

• Question No. 7

A piece of paper is folded and punched as shown below in the question figures. From the given option figures, indicate how it will appear when opened?



Options :

1. 1

2. 2

3. 3

4. 4

5.

Answer : 4

- Question No. 8

In the following question, select the missing number from the given series.

85, 84, 92, 83, 147, ?

Options :

1. 130
2. 120
3. 122
4. 131
- 5.

Answer : 122

- Question No. 9

In the following question, select the related letters from the given alternatives.

MICS : LHBR :: JRVP : ?

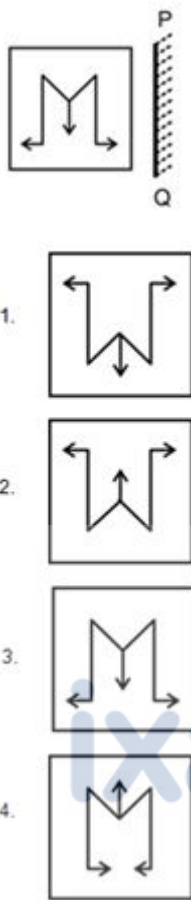
Options :

1. IQUO
2. OCSN
3. RDHH
4. MLUK
- 5.

Answer : IQUO

- Question No. 10

Select the correct mirror image of the given figure when the mirror PQ is placed to the right side of the figure.



Options :

- 1. 1
- 2. 2
- 3. 3
- 4. 4
- 5.

Answer : 3

• Question No. 11

A series is given with one term missing. Select the correct alternative from the given ones that will complete the series.

RT, VT, VX, ZX, ?

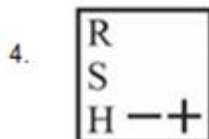
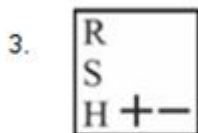
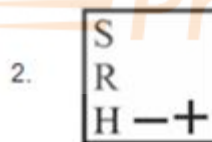
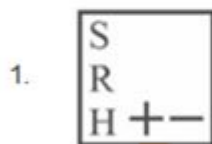
Options :

1. ZR
2. RM
3. ZB
4. ZO
- 5.

Answer : ZB

• Question No. 12

In the following question, select the figure which can be placed at the sign of question mark (?) from the given alternatives.



Options :

- 1.1
- 2.2

3. 3

4. 4

5.

Answer : 2

• Question No. 13

After arranging the given words according to dictionary order, which word will come at Third position?

1. Recant

2. Receive

3. Recent

4. Recess

5. Recall

Options :

1. Recess

2. Receive

3. Recant

4. Recent

5.

Answer : Receive

• Question No. 14

Select the option that is related to the fifth letter cluster in the same way as the fourth letter cluster is related to the third letter cluster, and the second letter cluster is related to the first letter cluster.

AWESOME : EWASEMO :: IMPRESS : PMIRSSE :: CONFUSE : ?

Options :

1. NOCFESU
2. NOFCESU
3. NOCFSEU
4. NOCFEUS
- 5.

Answer : NOCFESU

• Question No. 15

In the following question, select the figure which can be placed at the sign of question mark (?) from the given alternatives.



Options :

- 1.1
- 2.2

3. 3

4. 4

5.

Answer : 4

• Question No. 16

Which answer figure will complete the pattern in the question figure? (rotation is not allowed)



Options :

1. 1

2. 2

3. 3

4. 4

5.

Answer : 3

• Question No. 17

In a certain code language, 'EATING' is coded as 'ELGRYC'. What is the code for 'COFFEE' in that code language?

Options :

1. CCDDNB
2. CCDDMA
3. CCDDMB
4. CCEEMB
- 5.

Answer : CCDDMA

• Question No. 18

By interchanging which two signs and two numbers (not digits) the equation will be correct?

$$8 - 4 \times 9 + 6 \div 3 = 29$$

Options :

1. + and \times , 4 and 6
2. - and \times , 6 and 9
3. \times and \div , 8 and 4
4. - and \times , 9 and 3
- 5.

Answer : - and \times , 6 and 9

• Question No. 19

In a certain code language, if DESK is coded as 'BCQI1', CHAIR is coded as 'AFYGP2', then what will 'TABLE' be coded as?

Options :

1. RHAKE
2. RHAKE2
3. RYZJC3
4. RYZJC2
- 5.

Answer : RYZJC2

• Question No. 20

In the following question, select the missing number from the given series.

27, 46, 65, ?, 103

Options :

1. 80
2. 81
3. 88
4. 84
- 5.

Answer : 84

• Question No. 21

Disrespecting of National Flag is a violation of which of the following Fundamental Duties mentioned in the Indian Constitution?

Options :

1. Article 51A(a)
2. Article 51A(d)
3. Article 51A(b)
4. Article 51A(c)
- 5.

Answer : Article 51A(a)

• Question No. 22

Who has been conferred the first ever 'Udyog Ratna' award instituted by the Maharashtra government in August 2023?

Options :

1. Savitri Jindal
2. Ratan Tata
3. Adar Poonawala
4. Anand Mahindra
- 5.

Answer : Ratan Tata

• Question No. 23

"PM Programme for Restoration, Awareness, Nourishment and Amelioration of Mother Earth" (PM-PRANAM) scheme launched in 2023 aims _____.

Options :

1. to make India self-reliant in automobile sector
2. to provide food to poor
3. to promote usage of alternative fertilizers and balanced use of chemical fertilizers
4. to provide education to young girls
- 5.

Answer : to promote usage of alternative fertilizers and balanced use of chemical fertilizers

• Question No. 24

On the bank of now dry course of which river, the ancient city of Harappa was built?

Options :

1. Gandak
2. Ravi
3. Kosi
4. Yamuna
- 5.

Answer : Ravi

• Question No. 25

Which term is used to denote the mean income computed for every man, woman, and child in a particular group including those living in group quarters?

Options :

1. Per capita income
2. Per hundred income
3. GDP
4. PRCS
- 5.

Answer : Per capita income

• Question No. 26

Kathak dance is known as combination of _____.

Options :

1. Music and narrative only
2. Music and drama only
3. Music and dance only
4. Music, dance and narrative
- 5.

Answer : Music, dance and narrative

- Question No. 27

Which instrument is played by Pandit Ravi Shankar?

Options :

1. Sarod
2. Guitar
3. Sitar
4. Tabla
- 5.

Answer : Sitar

- Question No. 28

Which of the following is NOT a writ issued by the Supreme Court of India?

Options :

1. Jus soli
2. Prohibition
3. Habeas corpus
4. Quo warranto
- 5.

Answer : Jus soli

- Question No. 29

Radha Sridhar is associated with which of the following classical dance?

Options :

1. Sattriya
2. Bharatnatyam
3. Kathak

4. Manipuri

5.

Answer : Bharatnatyam

- Question No. 30

The Simon Commission arrived in India in _____.

Options :

1. 1931

2. 1919

3. 1922

4. 1928

5.

Answer : 1928

- Question No. 31

The proportion of the population below the poverty line is called the poverty ratio or _____.

Options :

1. Income Disparity Index

2. headcount ratio

3. Socioeconomic Quotient

4. Gini Coefficient

5.

Answer : headcount ratio

- Question No. 32

Gurpurab is celebrated by which of the following community?

Options :

1. Hindu
2. Christian
3. Sikh
4. Parsi
- 5.

Answer : Sikh

• Question No. 33

Which sport is played by the Indian sportsperson Anjum Chopra?

Options :

1. Lawn Tennis
2. Cricket
3. Badminton
4. Football
- 5.

Answer : Cricket

• Question No. 34

Which Chief Minister made an announcement regarding the issuance of Kunbi certificates to old Maratha Kunbis in 2023?

Options :

1. Pema Khandu
2. Jagdish Mukhi
3. Eknath Shinde
4. Biswabhusan Harichandan
- 5.

Answer : Eknath Shinde

- Question No. 35

Which country hosted the FIFA U-17 World Cup 2023?

Options :

1. Spain
2. Portugal
3. Japan
4. Indonesia
- 5.

Answer : Indonesia

- Question No. 36

Rukmini Devi is regarded as one of the most distinguished artists of _____.

Options :

1. Bharatanatyam
2. Kathakali
3. Mohiniattam
4. Bhortal Dance
- 5.

Answer : Bharatanatyam

- Question No. 37

Who of the following is an agricultural scientist who has played an important role in the green revolution in India?

Options :

1. C. Subramaniam

2. Monkombu Sambasivan Swaminathan
3. Vikram Sarabhai
4. Verghese Kurien
- 5.

Answer : Monkombu Sambasivan Swaminathan

- Question No. 38

Direct change of gas to solid without changing in to liquid is called _____.

Options :

1. Vaporization
2. Deposition
3. Evaporation
4. Sublimation
- 5.

Answer : Deposition

- Question No. 39

A football match is played by two teams, each with a maximum of _____.

Options :

1. eleven players
2. ten players
3. five players
4. seven players
- 5.

Answer : eleven players

- Question No. 40

Which among the following have the lowest sex-ratio as per 2011 Census?

Options :

1. Tamil Nadu
2. Andhra Pradesh
3. Madhya Pradesh
4. Rajasthan
- 5.

Answer : Rajasthan

- Question No. 41

The simple interest on a certain sum of money at rate of interest 6% per annum for 2 years is Rs. 960. What is the compound interest (compounding annually) on the same sum for the same period and at the same rate of interest?

Options :

1. Rs. 985.4
2. Rs. 988.8
3. Rs. 1122.2
4. Rs. 1025.1
- 5.

Answer : Rs. 988.8

- Question No. 42

If the diagonals of a rhombus are 48 cm and 64 cm, then what is the perimeter of the rhombus?

Options :

1. 120 cm
2. 75 cm
3. 225 cm
4. 160 cm

5.

Answer : 160 cm

• Question No. 43

Price of 1 kg of wheat is increased by 50 percent and the increase is of Rs. 25. What is the new price of the wheat per kg?

Options :

1. Rs. 45
2. Rs. 60
3. Rs. 75
4. Rs. 55
- 5.

Answer : Rs. 75

• Question No. 44

If a car travels 150 km at a speed of 50 km/h, how long does it take to complete the journey?

Options :

1. 3 hours
2. 3.5 hours
3. 4.5 hours
4. 4 hours
- 5.

Answer : 3 hours

• Question No. 45

A watch is purchased for Rs. 6000 and sold for Rs. 5500. What is the loss percentage?

Options :

1. 8.08 percent
2. 11.11 percent
3. 8.33 percent
4. 7.28 percent
- 5.

Answer : 8.33 percent

• Question No. 46

The average of P, Q, and R is 40. If the average of P and Q is 35 and the average of Q and R is 45, what is the value of Q?

Options :

1. 32
2. 40
3. 28
4. 48
- 5.

Answer : 40

• Question No. 47

The average age of 30 students in a class is 20 years. If each student's age is increased by 5 years, then determine the number by which the average age is increased.

Options :

1. 8
2. 7
3. 5
4. 3

5.

Answer : 5

- Question No. 48

If $M : N : P = 3 : 7 : 5$ and $P : Q = 1 : 2$, then what is the value of $M : Q$?

Options :

1. 2 : 1

2. 2 : 3

3. 1 : 3

4. 3 : 10

5.

Answer : 3 : 10

- Question No. 49

W and X together can complete a work in 40 days. X and Y together can complete the same work in 60 days. If W, X and Y all work together, then the same work gets completed in 30 days. How many days will W and Y together take to complete the same work?

Options :

1. 45 days

2. 40 days

3. 50 days

4. 36 days

5.

Answer : 40 days

- Question No. 50

If Marked price of an article is Rs. 4500 and selling price is Rs. 3900. What is the discount?

Options :

1. 500
2. 600
3. 700
4. 850
- 5.

Answer : 600

• Question No. 51

After giving 50 percent discount on an article there is still a profit of 50 percent. What will be the profit percentage when no discount is given?

Options :

1. 300 percent
2. 100 percent
3. 150 percent
4. 200 percent
- 5.

Answer : 200 percent

• Question No. 52

If the difference between the two numbers is 30 percent of their sum, then what is the ratio of larger number and smaller number?

Options :

1. 14 : 3
2. 12 : 5
3. 13 : 7
4. 15 : 7

5.

Answer : 13 : 7

- Question No. 53

Convert $0.4\bar{1}$ into fraction.

Options :

1. $5/9$
2. $3/7$
3. $37/90$
4. $4/9$
- 5.

Answer : $37/90$

- Question No. 54

Which of the following number is not divisible by 9?

Options :

1. 3789
2. 7857
3. 1845
4. 3658
- 5.

Answer : 3658

- Question No. 55

Amar is 10 percent more efficient than Sachin. If Sachin alone can finish a work in 44 days, then in how many days will Amar alone finish the same work?

Options :

1. 40 days
2. 52 days
3. 47 days
4. 45 days
- 5.

Answer : 40 days

• Question No. 56

The product of two numbers is 1408, and their LCM is 352. Find the HCF.

Options :

1. 4
2. 2
3. 3
4. 7
- 5.

Answer : 4

• Question No. 57

If $X : Y = 11 : 5$, then what is the value of $(X - Y) : (X + Y)$?

Options :

1. 6 : 15
2. 3 : 8
3. 5 : 16
4. 8 : 3
- 5.

Answer : 3 : 8

- Question No. 58

Find the HCF of 258, 301, and 387.

Options :

1. 29
2. 27
3. 22
4. 43
- 5.

Answer : 43

- Question No. 59

The simple interest received on a certain sum is Rs.1782 for 3 years. What will be the simple interest on the same sum at the same rate of interest for 10 years?

Options :

1. Rs. 6940
2. Rs. 6800
3. Rs. 5940
4. Rs. 6840
- 5.

Answer : Rs. 5940

- Question No. 60

Anurag sold a refrigerator for ₹28000, at a loss of 30%. If he wanted to earn a profit of 25%, at what price should he have sold the refrigerator?

Options :

1. Rs. 52,700

2. Rs. 52,000
3. Rs. 50,000
4. Rs. 51,500
- 5.

Answer : Rs. 50,000

• Question No. 61

Choose the option which are antonyms (opposite of) the word used in the sentence given below: Although her happiness was manifest in her cheerful demeanour, the hidden sorrow in her eyes revealed a deeper emotional struggle.

Options :

1. manifest/hidden
2. demeanour/sorrow
3. happiness/struggle
4. manifest/revealed
- 5.

Answer : manifest/hidden

Direction:

Choose the most appropriate synonym of the **bold** word.

• Question No. 62

The trend of artwork among Middle Eastern ladies is nothing new, yet nail paint is frequently **overlooked**.

Options :

1. Appreciated
2. Pranked
3. Sedated
4. Neglected

5.

Answer : Neglected

• Question No. 63

Choose the word that is opposite in meaning to the given word.

Ache

Options :

1. Colic
2. Serene
3. Ease
4. Gloomy
- 5.

Answer : Ease

Direction:

Find the part of the given sentence that has an error in it. If there is no error, choose 'No error'.

• Question No. 64

Snow was falling light when everyone was leaving church.

Options :

1. No error
2. light when everyone
3. Snow was falling
4. was leaving church.
- 5.

Answer : light when everyone

Direction:

Improve the **bold** part of the sentence. Choose "No improvement as an answer if the sentence is grammatically correct.

- Question No. 65

They **plan to marrying** in the spring.

Options :

1. plan to marry
2. No improvement
3. plans to marry
4. plan to married
- 5.

Answer : plan to marry

Direction:

Choose the idiom/phrase that can substitute the **bold** group of words meaningfully.

- Question No. 66

My son was not well yesterday and today I'm **feeling sick**.

Options :

1. Under the weather
2. Call it a day
3. Face the music
4. Break a leg
- 5.

Answer : Under the weather

Direction:

Select the most appropriate word to fill in the blank.

- Question No. 67

_____ of the shops in the High Street have closed recently.

Options :

1. Most
2. Quite
3. Little
4. Very
- 5.

Answer : Most

Direction:

Select the most appropriate word to fill in the blank.

- Question No. 68

This _____ a challenging time for us all.

Options :

1. was been
2. are
3. has been
4. had being
- 5.

Answer : has been

- Question No. 69

Select the sentence with no spelling errors.

Options :

1. Napoleon went to great lenth to craft his image as a benign ruler.
2. Napoleon went to great lengths to craft his image as a benign ruler.
3. Napoleon went to great lengths to craft his image as a benign rouler.
4. Napoleon went to great lengths to craft his image as a benine ruler.
- 5.

Answer : Napoleon went to great lengths to craft his image as a benign ruler.

Direction:

Select the incorrectly spelt word from the given sentence.

- Question No. 70

As a jazz lover, I want people to embrace the music for its entrinsic qualities, not its symbolic resonance.

Options :

1. qualities
2. resonance
3. entrinsic
4. embrace
- 5.

Answer : entrinsic

Direction:

Find the part of the given sentence that has an error in it. If there is no error, choose 'No error'.

- Question No. 71

My parents are best people, but they get quite emotional sometimes.

Options :

1. but they get
2. No error
3. My parents are best people

4. quite emotional sometimes

5.

Answer : My parents are best people

Direction:

In the following question, out of the given four alternatives, select the alternative which best expresses the meaning of the Idiom/Phrase.

• Question No. 72

To be on one's last legs

Options :

1. To be near death
2. To fuss about a trifle
3. To get married soon
4. Last day of work
- 5.

Answer : To be near death

Direction:

Improve the **bold** part of the sentence. Choose "No improvement" as an answer if the sentence is grammatically correct.

• Question No. 73

We should **enjoyed playing** all sorts of games.

Options :

1. enjoy playing
2. enjoy play
3. No improvement
4. enjoyed play

5.

Answer : enjoy playing

Direction:

Fill in the blank with the correct synonym of the word "lavish":

• Question No. 74

Her _____ donation to the cause greatly benefited the community.

Options :

1. stingy
2. contradictory
3. generous
4. miserly
- 5.

Answer : generous

Direction:

Find the part of the given sentence that has an error in it. If there is no error, choose 'No error'.

• Question No. 75

She promises to meet me at her mother's house yesterday.

Options :

1. house yesterday.
2. me at her mother's
3. She promises to meet
4. No error
- 5.

Answer : She promises to meet

Direction:

Read the passage carefully and select the correct answer for the given blanks out of the four alternatives.

The concentrations of greenhouse gases (GHG) that (1) _____ heat in the Earth's atmosphere rose to record levels (2) _____ 2022, according to the GHG bulletin released by the World Meteorological Organisation (WMO) on November 15, 2023. The rise in concentrations of GHGs is mainly (3) _____ the use of fossil fuels for various human activities.

This would lead to a (4) _____ rise in global average temperatures, sea-level rise, glacial melting and increase in frequency and intensity of rapid-onset extreme weather events (5) _____ torrential rainfall, flash floods, tropical cyclones and heatwaves.

• Question No. 76

Select the most appropriate option for blank (1)

Options :

1. bark
2. waste
3. trap
4. hang
- 5.

Answer : trap

Direction:

Read the passage carefully and select the correct answer for the given blanks out of the four alternatives.

The concentrations of greenhouse gases (GHG) that (1) _____ heat in the Earth's atmosphere rose to record levels (2) _____ 2022, according to the GHG bulletin released by the World Meteorological Organisation (WMO) on November 15, 2023. The rise in concentrations of GHGs is mainly (3) _____ the use of fossil fuels for various human activities.

This would lead to a (4) _____ rise in global average temperatures, sea-level rise, glacial melting and increase in frequency and intensity of rapid-onset extreme weather events (5) _____ torrential rainfall, flash floods, tropical cyclones and heatwaves.

• Question No. 77

Select the most appropriate option for blank (2)

Options :

1. of
2. at
3. on
4. in
- 5.

Answer : in

Direction:

Read the passage carefully and select the correct answer for the given blanks out of the four alternatives.

The concentrations of greenhouse gases (GHG) that (1) _____ heat in the Earth's atmosphere rose to record levels (2) _____ 2022, according to the GHG bulletin released by the World Meteorological Organisation (WMO) on November 15, 2023. The rise in concentrations of GHGs is mainly (3) _____ the use of fossil fuels for various human activities.

This would lead to a (4) _____ rise in global average temperatures, sea-level rise, glacial melting and increase in frequency and intensity of rapid-onset extreme weather events (5) _____ torrential rainfall, flash floods, tropical cyclones and heatwaves.

• Question No. 78

Select the most appropriate option for blank (3)

Options :

1. rather than
2. of
3. that
4. due to
- 5.

Answer : due to

Direction:

Read the passage carefully and select the correct answer for the given blanks out of the four alternatives.

The concentrations of greenhouse gases (GHG) that (1) _____ heat in the Earth's atmosphere rose to record levels (2) _____ 2022, according to the GHG bulletin released by the World Meteorological Organisation (WMO) on November 15, 2023. The rise in concentrations of GHGs is mainly (3) _____ the use of fossil fuels for various human activities.

This would lead to a (4) _____ rise in global average temperatures, sea-level rise, glacial melting and increase in frequency and intensity of rapid-onset extreme weather events (5) _____ torrential rainfall, flash floods, tropical cyclones and heatwaves.

- Question No. 79

Select the most appropriate option for blank (4)

Options :

1. further
2. far
3. for
4. farther
- 5.

Answer : further

Direction:

Read the passage carefully and select the correct answer for the given blanks out of the four alternatives.

The concentrations of greenhouse gases (GHG) that (1) _____ heat in the Earth's atmosphere rose to record levels (2) _____ 2022, according to the GHG bulletin released by the World Meteorological Organisation (WMO) on November 15, 2023. The rise in concentrations of GHGs is mainly (3) _____ the use of fossil fuels for various human activities.

This would lead to a (4) _____ rise in global average temperatures, sea-level rise, glacial melting and increase in frequency and intensity of rapid-onset extreme weather events (5) _____ torrential rainfall, flash floods,

tropical cyclones and heatwaves.

- Question No. 80

Select the most appropriate option for blank (5)

Options :

1. such as
2. such
3. So
4. like as
- 5.

Answer : such as

[Attempt Mock Test Now](#)

All ixamBee Mock Test are FREE @ www.ixamBee.com

Prepare **50%** Faster