

• Question No. 1

In a certain code language, 'FRY' is written as '147'. How will 'SEIZE' be written in that language?

**Options :**

1. 254
2. 210
3. 236
4. 320
- 5.

Answer : 320

• Question No. 2

Select the option that is related to the third word in the same way as the second word is related to the first word.

Fuel : Diesel : : Utensils : ?

**Options :**

1. Spoon
2. Iron
3. Kitchen
4. Steel
- 5.

Answer : Spoon

• Question No. 3

Which of the following letter-clusters will replace the question mark (?) in the given series?

LOK, JMI, HKG, FIE, ?

**Options :**

1. DHG
2. DGD
3. EGD
4. DGC
- 5.

Answer : DGC

• Question No. 4

Select the option that is related to the third number in the same way as the second number is related to the first number.

9 : 90 :: 15 : ?

Options :

1. 120
2. 95
3. 240
4. 135
- 5.

Answer : 240

• Question No. 5

Among seven friends A, B, C, D, E, F and G, B is taller than only four other friends. C is taller than D. A is taller than F. E is taller than one person only that is G, who is the shortest in height among all friends. B is taller than A. Who is the tallest among all the friends?

Options :

1. E
2. A
3. C

4. B

5.

Answer : C

• Question No. 6

Study the given pattern carefully and select the number that can replace the question mark (?) in it.

15 14 220

20 18 290

11 40 ?

Options :

1. 320

2. 390

3. 340

4. 310

5.

Answer : 310

• Question No. 7

Select the option that is related to the third letter-cluster in the same way as the second letter-cluster is related to the first letter-cluster.

TEMPO : TPOME :: DOLPHIN : ?

Options :

1. PNOILHD

2. EPMQIJO

3. PONLIHD

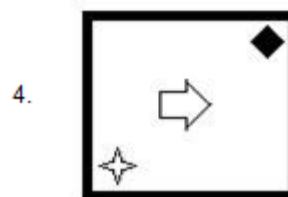
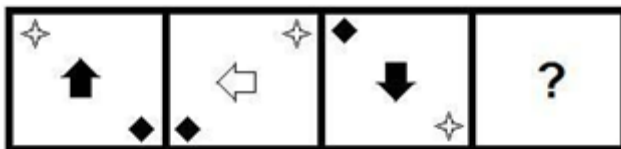
4. ROMLIKD

5.

Answer : PONLIHD

• Question No. 8

Select the option that will replace the question mark (?) in the following figure series.



Options :

1.1

2.2

3.3

4.4

5.

Answer : 4

• Question No. 9

Select the option figure in which the given figure (X) is embedded as its part (rotation is NOT allowed).



1.



2.



3.



4.



Options :

1.1

2.2

3.3

4.4

5.

Answer : 3

• Question No. 10

If A denotes 'addition', B denotes 'multiplication', C denotes 'subtraction', and D denotes 'division', then what will be the value of the following expression?

$$14 \text{ B } (18 \text{ D } 3) \text{ A } 5 \text{ B } 7 \text{ C } 12 \text{ B } (24 \text{ D } 4)$$

Options :

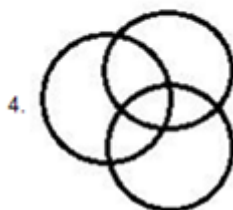
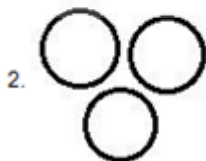
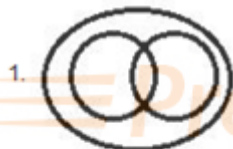
1. 47
2. 77
3. 41
4. 53
- 5.

Answer : 47

• Question No. 11

Select the Venn diagram that best illustrates the relationship between the following classes.

Animals, Lizards, Octopuses



**Options :**

1. 1
2. 2
3. 3
4. 4
- 5.

Answer : 3

• Question No. 12

Six students are sitting around a circular table facing the centre. Puneet is sitting between Iqbal and Aman. Joya is sitting at the second place to the right of Iqbal. Pratiksha is sitting at the third place to the left of Aman. Anamika is sitting between Joya and Aman. Who is sitting between Puneet and Anamika?

**Options :**

1. Pratiksha
2. Joya
3. Iqbal
4. Aman
- 5.

Answer : Aman

• Question No. 13

Which of the following numbers will replace the question mark (?) in the given series?

15, 15, 17, 51, 55, ?

**Options :**

1. 275
2. 110
3. 255

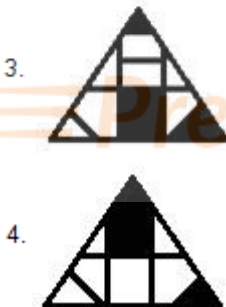
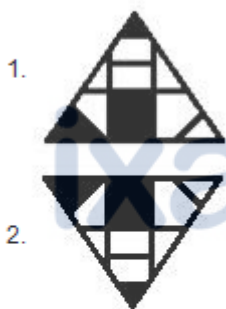
4. 165

5.

Answer : 275

- Question No. 14

Select the correct mirror image of the given figure when the mirror is placed at MN as shown below.



Options :

1. 1

2. 2

3. 3

4. 4

5.

Answer : 3



- Question No. 15

In a certain code language, 'CRECH' is written as 'DTHGM'. How will 'FETCH' be written in that language?

**Options :**

1. GHXGM
2. GGWHN
3. GGWGM
4. GHVHM
- 5.

Answer : GGWGM

- Question No. 16

Which of the following numbers will replace the question mark (?) in the given series?

42, 41, 45, 36, 52, 27, ?

**Options :**

1. 63
2. 81
3. 91
4. 49
- 5.

Answer : 63

- Question No. 17

In a certain code language, 'FUTILE' is written as 'UFITEL'. How will 'OCTAVE' be written in that language?

**Options :**

1. COATEV

2. PDUBWF
3. COTAEV
4. LXGRWG
- 5.

Answer : COATEV

• Question No. 18

Two statements are given followed by two conclusions numbered I and II. Assuming the statements to be true, even if they seem to be at variance with commonly known facts, decide which of the conclusions logically follow(s) from the statements.

**Statements:**

Some diaries are books.

Some books are registers.

**Conclusions:**

I. Some registers are diaries.

II. All registers are diaries.

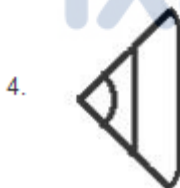
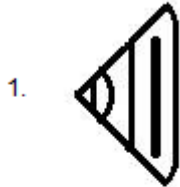
**Options :**

1. Only conclusion I follows
2. Both conclusions I and II follow
3. Neither conclusion I nor II follows
4. Only conclusion II follows
- 5.

Answer : Neither conclusion I nor II follows

• Question No. 19

Select the option figure that will replace the question mark (?) in the figure given below to complete the pattern.



Options :

- 1. 1
- 2. 2
- 3. 3
- 4. 4
- 5.

Answer : 2

• Question No. 20

Which two numbers should be interchanged to make the given equation correct?

$$14 + 32 - 56 \div 28 \times 5 = 40$$

**Options :**

1. 28 and 32
2. 5 and 14
3. 14 and 32
4. 28 and 14
- 5.

Answer : 28 and 14

• Question No. 21

Two statements are given followed by three conclusions numbered I, II and III. Assuming the statements to be true, even if they seem to be at variance with commonly known facts, decide which of the conclusions logically follow(s) from the statements.

**Statements**

All shops are parks.

Some shops are schools.

**Conclusions:**

I. Some parks are schools.

II. No school is a park.

III. Some parks are shops.

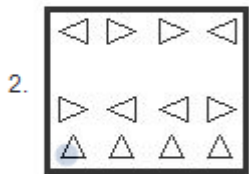
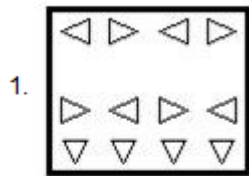
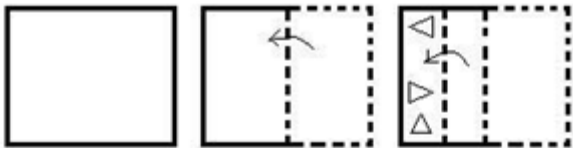
**Options :**

1. Only conclusions I and III follow
2. Only conclusions II and III follow
3. Only conclusions I and II follow
4. All of the conclusions follow
- 5.

Answer : Only conclusions I and III follow

• Question No. 22

A paper is folded and cut as shown below. How will it appear when unfolded?



Options :

- 1.1
- 2.2
- 3.3
- 4.4
- 5.

Answer : 3

• Question No. 23

Select the option that is related to the third word in the same way as the second word is related to the first word.

Cataract : Eyes : : Eczema : ?

**Options :**

1. Allergy
2. Joints
3. Itching
4. Skin
- 5.

Answer : Skin

- Question No. 24

In a certain code language, 'FORCE' is written as '641832' and 'MIST' is written as '1331920'. How will 'URANUS' be written in that language?

**Options :**

1. 618114618
2. 518113519
3. 518114519
4. 218132119
- 5.

Answer : 518114519

- Question No. 25

Six friends K, L, M, N, O and P are sitting in two rows; both the rows are facing north. Four friends are in the first row, whereas two friends are in the second row. L is sitting between O and P. M is just behind O. N is just behind L. There is nobody sitting behind K and P, who are sitting at the corners. Who among them are sitting in the first row?

**Options :**

1. P, L, N and K
2. K, L, O and P
3. K, L, P and M
4. M, N, L and P
- 5.

Answer : K, L, O and P

• Question No. 26

What is the mean proportional between the fourth proportionals of (1, 2, 7) and (14, 16, 2401)?

Options :

1. 224
2. 196
3. 14
4. 392
- 5.

Answer : 196

• Question No. 27

X can do half and Y can do one-third of a certain work in 5 and 10 days, respectively, Working together, in how many days will they be able to complete double of the work?

Options :

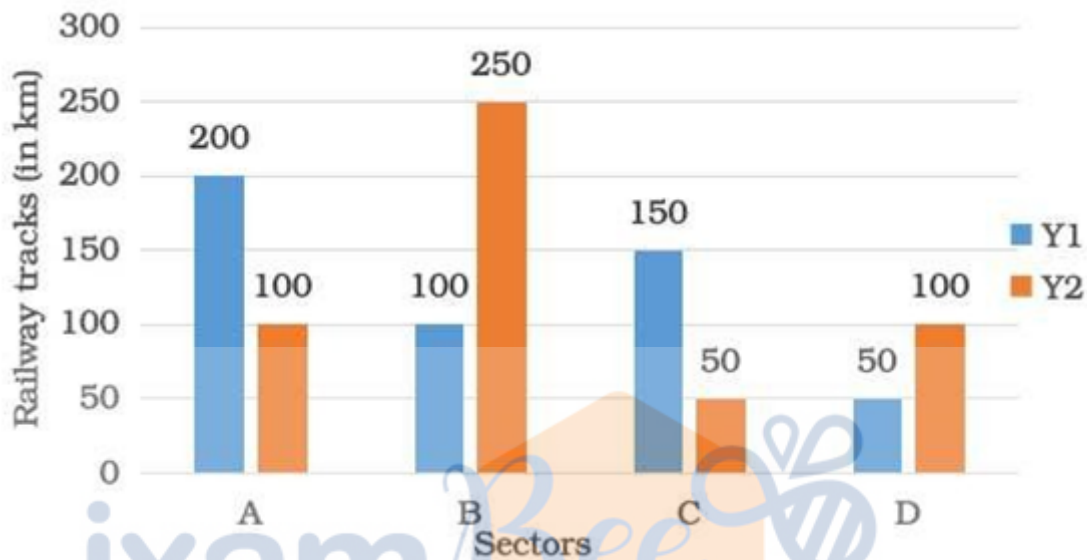
1.  $16\frac{1}{2}$
2.  $7\frac{1}{2}$
3. 15
4. 16
- 5.

Answer : 15

Direction:

Study the bar graph and answer the question that follows.

The extent of construction of new railway tracks (in km) in four railway sectors A, B, C, D during two consecutive financial years Y1 and Y2 is presented through the given bar graph.



- Question No. 28

How much is the percentage increase in the railway track length from Y1 to Y2 greater for B than that for D from Y1 and Y2?

Options :

1. 25
2. 100
3. 40
4. 50
- 5.

Answer : 50

- Question No. 29

Simplify the following expression.



$4 - 3 \text{ of } (3/2 + 1/3 \div 1/2 \text{ of } 4 - 1/4)$

**Options :**

1. -8
2.  $17/12$
3.  $-(1/4)$
4.  $-(19/4)$
- 5.

Answer :  $-(1/4)$

• Question No. 30

A retailer purchased 50 kg of a vegetable from a wholesale market. He sold half of it at a profit of ₹450, and the rest at a loss of ₹275. What was the difference (increase ₹) between the two selling prices per kg of the vegetable?

**Options :**

1. 29
2. 18
3. 7
4. 12
- 5.

Answer : 29

• Question No. 31

The value of  $5(6/29) - [15/4 \div \{3/4 \times (3/2 - 1/5 - 1/3)\}]$  is :

**Options :**

1.  $2/29$
2.  $4/29$
3.  $3/29$
4.  $1/29$

5.

Answer : 1/29

• Question No. 32

Three jugs of equal capacity are filled with mixtures of milk and water in the proportions 3 : 1, 7 : 1 and 11 : 5. The three jugs are emptied into a single container. What will be the ratio of water to milk in the said container?

**Options :**

1. 14: 45

2. 11: 37

3. 12: 41

4. 15: 49

5.

Answer : 11: 37

• Question No. 33

While listing N consecutive even numbers for determining their average, the last number, by mistake, got replaced by the next odd number and thereby the average turned out to be more than the desired value by 0.0125. What is the value of N?

**Options :**

1. 80

2. 40

3. 50

4. 100

5.

Answer : 80

• Question No. 34

A sum of ₹16,000 invested at compound interest, amounts to a ₹21,160 in two years. What is the rate per cent per annum?

**Options :**

1. 16.5
2. 17.5
3. 15
4. 10
- 5.

Answer : 15

- Question No. 35

The lengths of one side and a diagonal of a rectangle are 63 cm and 65 cm, respectively. What is the perimeter (in cm) of a square whose area is one-seventh of that of the rectangle?

**Options :**

1. 36
2. 64
3. 24
4. 48
- 5.

Answer : 48

- Question No. 36

Which number lying between 800 and 900 is such that when it is divided by either of 34 and 51, the remainder left is 19?

**Options :**

1. 887
2. 821

3. 835

4. 869

5.

Answer : 835

• Question No. 37

A shopkeeper sells an article at 14% discount on its marked price and still gains 20%. If the cost price of the article is ₹184.90, then what is its marked price?

**Options :**

1. ₹264

2. ₹272

3. ₹278

4. ₹258

5.

Answer : ₹258

• Question No. 38

The total surface area of a solid right circular cone is equal to that of a sphere of the same radius. The height of the cone is how many times the diameter of the sphere?

**Options :**

1.  $\sqrt{2}$

2.  $\mathbb{Q}$

3.  $2\sqrt{2}$

4.  $\sqrt{2}/2$

5.

Answer :  $\sqrt{2}$

- Question No. 39

x and y are two numbers having opposite signs such that.  $x^2 : y^2 = 49 : 64$ . What is the value of  $(5x - 6y) : (6x - 7y)$ ?

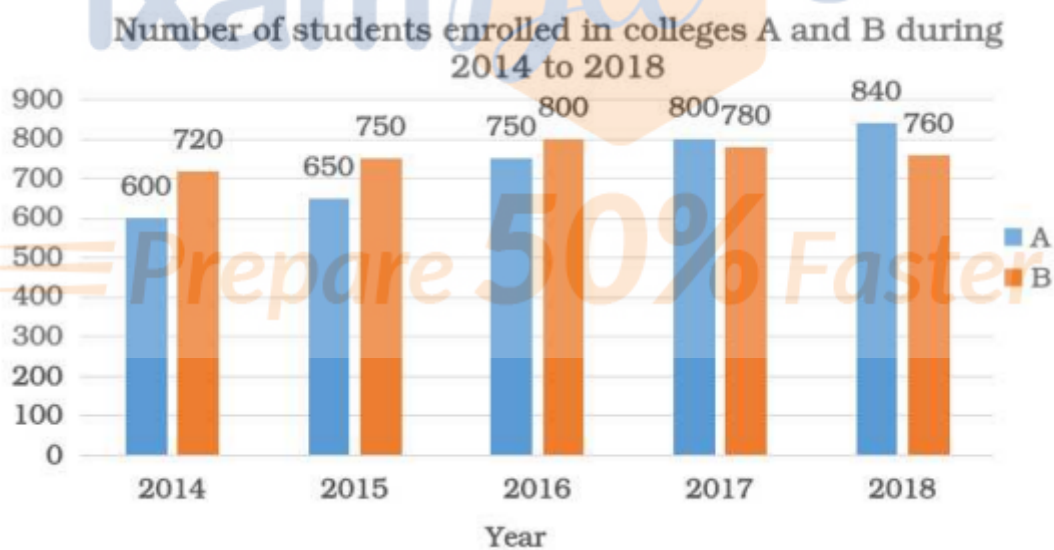
**Options :**

1. 44 : 65
2. 44 : 65
3. 94 : 117
4. 83 : 98
- 5.

Answer : 83 : 98

Direction:

Study the given graph and answer the question that follows.



- Question No. 40

What is the ratio of the average number of students enrolled in college B in 2014, 2015 and 2017 to the number of students enrolled in college A in 2014?

**Options :**

1. 5:4

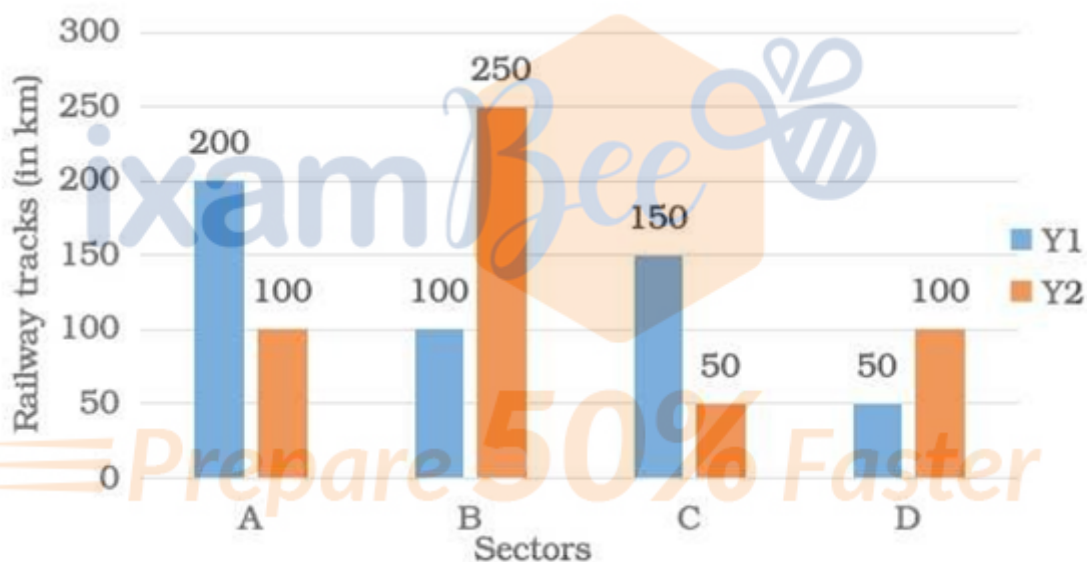
2. 15 : 8
3. 3 : 2
4. 5 : 3
- 5.

Answer : 15 : 8

Direction:

**Study the bar graph and answer the question that follows.**

The extent of construction of new railway tracks (in km) in four railway sectors A, B, C, D during two consecutive financial years Y1 and Y2 is presented through the given bar graph.



- Question No. 41

How much is the average and track length (in km) of A, B, D during Y2 more or less than that of C in Y1 ?

**Options :**

1. 100 less
2. 33.33 more
3. Neither more nor less
4. 50 less
- 5.

Answer : Neither more nor less

• Question No. 42

At a recruitment test, the candidates were tested for General Awareness (GA) and Quantitative Techniques (QT). 54% and 45%, failed in GA and QT, respectively, while 16%, failed in both. If 136 candidates passed in both. what was the total number of candidates?

**Options :**

1. 800
2. 640
3. 600
4. 850
- 5.

Answer : 800

• Question No. 43

During rainy season, huge inflow of water takes place into a reservoir. Measures are taken to clear the reservoir while water keeps flowing into it at a constant rate. It has been observed that seven and five men can clear the reservoir in 20 and 50 days, respectively, with the initial quantity of water in the reservoir being 24 and 36 kilolitres, respectively. What is the rate of inflow of water into the reservoir in litres per day?

**Options :**

1. 480
2. 540
3. 600
4. 640
- 5.

Answer : 480

• Question No. 44

The average of a number and its reciprocal is 1. What is the average of its square, cube and fourth power?

**Options :**

1. 2
2. 1
3. 1.33
4. 2.67
- 5.

Answer : 1

• Question No. 45

The mean of a set of 120 observations is 80.10 is subtracted from each observation and each of the corresponding result is divided by 7. What is the mean of the new set?

**Options :**

1. 7
2. 10
3.  $5\frac{5}{6}$
4.  $7\frac{1}{12}$
- 5.

Answer : 10

• Question No. 46

In case of a particular transaction, the profit earned is  $14\frac{2}{7}\%$ . What fraction is the cost price of the selling price?

**Options :**

1.  $\frac{1}{7}$
2.  $\frac{8}{7}$
3.  $\frac{7}{8}$
4.  $\frac{1}{8}$



5.

Answer : 7/8

## • Question No. 47

A man had to travel 49 km, which he divided into six stretches which were exact multiples of either 4 km or 5 km. The first four stretches were 4 km, 5 km, 8 km and 10 km. Multiples of 4 km and 5 km were travelled at the rates of 40 and 60 km/h, respectively, and between two consecutive stretches, he rested for six minutes. What was his average speed (in km/h) for the whole journey?

**Options :**

1.  $31\frac{7}{11}$
2.  $32\frac{4}{13}$
3.  $33\frac{3}{8}$
4.  $34\frac{4}{15}$
- 5.

Answer :  $32\frac{4}{13}$ 

## • Question No. 48

Three circles, each having radius equal to 4 cm, are drawn with the vertices of an equilateral triangle as the centres. If the length of each side of the triangle is equal to 8 cm, then what is the area (in  $\text{cm}^2$ ) of the portion of the triangle that is NOT covered by the sectors of the circles?

**Options :**

1.  $16(2\sqrt{3} - \pi)$
2.  $8(2\sqrt{3} - \pi)$
3.  $8(2\sqrt{3} - \pi/2)$
4.  $16(2\sqrt{3} - \pi/2)$
- 5.

Answer :  $8(2\sqrt{3} - \pi)$

- Question No. 49

A man takes a loan of ₹6,000 from his friend on 1<sup>st</sup> January 2019 with the condition that he will repay with accrued simple interest at the rate 6.25%, as and when the interest touches ₹75. On which date does the loan period expire?

**Options :**

1. 14 February 2019
2. 15 January 2020
3. 20 October 2019
4. 15 March 2019
- 5.

Answer : 15 March 2019

- Question No. 50

A steamer and a motor boat cover the stretch between a seaport and a dock in 7 hours 20 minutes and 10 hours 40 minutes, respectively. What is the ratio of their speeds?

**Options :**

1. 15 : 11
2. 3 : 2
3. 16 : 11
4. 8 : 5
- 5.

Answer : 16 : 11

- Question No. 51

The given sentence contains a grammatical error. Identify the segment that contains the error.

Gopi's father asked him not stay out late again.

**Options :**

1. Gopi's father
2. not stay out
3. late again
4. asked him
- 5.

Answer : not stay out

• Question No. 52

Select the most appropriate synonym of the given word.

CONCLUDE

Options :

1. End
2. Include
3. Open
4. Exclude
- 5.

Answer : End

• Question No. 53

The given sentence contains a grammatical error. Identify the segment that contains the error.

"You can meet me always you like," our teacher told us.

Options :

1. our teacher told us
2. me always
3. You can meet
4. you like
- 5.

Answer : me always

• Question No. 54

Select the most appropriate word which means the same as the group of words given.

Something that is given to counter the effect of poison

**Options :**

1. Antidote
2. Antibiotic
3. Medicine
4. Artichoke
- 5.

Answer : Antidote

• Question No. 55

Select the most appropriate option to fill in the blank.

Let us go to the museum, \_\_\_\_\_?

**Options :**

1. do we
2. don't we
3. will we
4. shall we
- 5.

Answer : shall we

• Question No. 56

Select the most appropriate option to substitute the bold segment in the given sentence.

Don't forget **post** these letters.

**Options :**

1. in posting
2. to post
3. to posting
4. posted
- 5.

Answer : to post

- Question No. 57

Select the most appropriate ANTONYM of the given word.

AGREE

**Options :**

1. Distance
2. Support
3. Question
4. Oppose
- 5.

Answer : Oppose

- Question No. 58

Select the most appropriate option to substitute the bold segment in the given sentence. If there is no need to substitute it, select 'No substitution required'.

If the world was to end tomorrow **why would** you spend your day today?

**Options :**

1. when would

2. how would
3. what would
4. No substitution required
- 5.

Answer : how would

• Question No. 59

The given sentence contains a grammatical error. Identify the segment that contains the error.

The man whose sitting at the corner table is my uncle.

**Options :**

1. whose sitting
2. is my uncle
3. at the corner table
4. The man
- 5.

Answer : whose sitting

• Question No. 60

Choose the correctly spelt word.

**Options :**

1. Sandwish
2. Sandwich
3. Sandwitch
4. Standwich
- 5.

Answer : Sandwich

- Question No. 61

Select the most appropriate option to fill in the blank.

I had to go to the ATM \_\_\_\_\_ some money.

**Options :**

1. by getting
2. to get
3. to getting
4. for to ge
- 5.

Answer : to get

- Question No. 62

Select the most appropriate option to substitute the bold segment in the given sentence. If there is no need to substitute it, select 'No substitution required'.

There **is many food** for all of us.

**Options :**

1. is enough food
2. No substitution required
3. are much food
4. are plenty foods
- 5.

Answer : is enough food

- Question No. 63

Select the most appropriate meaning of the given idiom.

Carry on

**Options :**

1. Continue doing something
2. Throw something away
3. Take someone or something away
4. Put something into action
- 5.

Answer : Continue doing something

- Question No. 64

Select the most appropriate ANTONYM of the given word.

EAGER

**Options :**

1. Different
2. Easier
3. Indifferent
4. Loveable
- 5.

Answer : Indifferent

- Question No. 65

Select the most appropriate meaning of the given idiom.

Fall for

**Options :**

1. To be supported by
2. To be tricked or fooled by



3. To invite someone
4. To fall down and injure oneself
- 5.

Answer : To be tricked or fooled by

• Question No. 66

Choose the correctly spelt word.

**Options :**

1. Disendant
2. Decendent
3. Desendent
4. Descendant
- 5.

Answer : Descendant

• Question No. 67

Select the most appropriate word to fill in the blank.

The workers who returned \_\_\_\_\_ during the lockdown did not go back to work.

**Options :**

1. Hope
2. House
3. Office
4. Home
- 5.

Answer : Home

• Question No. 68

Select the most appropriate word which means the same as the group of words given.

Breathe hard and with difficulty

**Options :**

1. Pant
2. Cough
3. Strangle
4. Choke
- 5.

Answer : Pant

- Question No. 69

Select the most appropriate synonym of the given word.

OBSTRUCTION

**Options :**

1. Guesswork
2. Construction
3. Destruction
4. Hindrance
- 5.

Answer : Hindrance

- Question No. 70

Select the most appropriate word to fill in the blank.

Until recently, the village women \_\_\_\_\_ water from common wells or hand pumps, but now they have water taps.

**Options :**

1. Sold
2. Fetched
3. Bought
4. Threw
- 5.

Answer : Fetched

Direction:

**In the following passage, some words have been deleted. Fill in the blanks with the help of the alternatives given. Select the most appropriate option for each blank.**

According to a news report, a former captain of the Indian wheelchair cricket team has now been forced to (1)\_\_\_\_\_ as a labourer to support his family. In the context of the Covid-19 pandemic and lockdown, the children he used to (2)\_\_\_\_\_ earlier have stopped coming to him for a few months. Their parents said there was no money to pay for their (3)\_\_\_\_\_. Before the lockdown, he was giving coaching to wheelchair-bound children who were (4)\_\_\_\_\_ in playing cricket. The coach has now returned to his village where his old parents live. He said to the reporter who interviewed him, "These are difficult times, but I know I will be able to (5)\_\_\_\_\_ them," with a smile on his face.

- Question No. 71

Select the most appropriate option to fill in blank no. 1.

**Options :**

1. Supervise
2. Work
3. Employ
4. Serve
- 5.

Answer : Work

Direction:

**In the following passage, some words have been deleted. Fill in the blanks with the help of the alternatives given. Select the most appropriate option for each blank.**

According to a news report, a former captain of the Indian wheelchair cricket team has now been forced to (1)\_\_\_\_\_ as a labourer to support his family. In the context of the Covid-19 pandemic and lockdown, the children he used to (2)\_\_\_\_\_ earlier have stopped coming to him for a few months. Their parents said there was no money to pay for their (3)\_\_\_\_\_. Before the lockdown, he was giving coaching to wheelchair-bound children who were (4)\_\_\_\_\_ in playing cricket. The coach has now returned to his village where his old parents live. He said to the reporter who interviewed him, "These are difficult times, but I know I will be able to (5)\_\_\_\_\_ them," with a smile on his face.

• Question No. 72

Select the most appropriate option to fill in blank no. 2.

Options :

1. Coach
2. Learn
3. Teach
4. Study
- 5.

Answer : Coach

Direction:

**In the following passage, some words have been deleted. Fill in the blanks with the help of the alternatives given. Select the most appropriate option for each blank.**

According to a news report, a former captain of the Indian wheelchair cricket team has now been forced to (1)\_\_\_\_\_ as a labourer to support his family. In the context of the Covid-19 pandemic and lockdown, the children he used to (2)\_\_\_\_\_ earlier have stopped coming to him for a few months. Their parents said there was no money to pay for their (3)\_\_\_\_\_. Before the lockdown, he was giving coaching to wheelchair-bound children who were (4)\_\_\_\_\_ in playing cricket. The coach has now returned to his village where his old parents live. He said to the reporter who interviewed him, "These are difficult times, but I know I will be able to (5)\_\_\_\_\_ them," with a smile on his face.

• Question No. 73

Select the most appropriate option to fill in blank no. 3.

**Options :**

1. Employment
2. Training
3. Schooling
4. Studies
- 5.

Answer : Training

- Question No. 74

Select the most appropriate option to fill in blank no. 4

**Options :**

1. Interested
2. Encouraged
3. Forced
4. Asked
- 5.

Answer : Interested

- Question No. 75

Select the most appropriate option to fill in blank no. 5.

**Options :**

1. Lose
2. Overcome
3. Excel
4. Win
- 5.

Answer : Overcome

- Question No. 76

Which country launched the first artificial satellite Sputnik 1?

**Options :**

1. USSR
2. France
3. USA
4. Germany
- 5.

Answer : USSR

- Question No. 77

Which part of the plant allows for the uptake of carbon dioxide and limits the loss of water due to evaporation?

**Options :**

1. Lamina
2. Stipule
3. Stomata
4. Petiole
- 5.

Answer : Stomata

- Question No. 78

'Rang Ghar', one of Asia's oldest amphitheatres, was built by the king of the \_\_\_\_\_ dynasty.

**Options :**

1. Sen

2. Ahom
3. Mughal
4. Gupta
- 5.

Answer : Ahom

- Question No. 79

For which of the following productions is the Ramagundam power plant famous?

**Options :**

1. Hydroelectricity
2. Nuclear energy
3. Thermal energy
4. Bio-gas
- 5.

Answer : Thermal energy

- Question No. 80

In which year was the Communist Party of India - Marxist (CPI-M) formed?

**Options :**

1. 1951
2. 1964
3. 1962
4. 1972
- 5.

Answer : 1964

- Question No. 81

Who among the following is the author of the book 'Dollar Bahu'?

**Options :**

1. Tasleema Nasreen
2. Jhumpa Lahiri
3. Sudha Murty
4. Arundhati Roy
- 5.

Answer : Sudha Murty

- Question No. 82

Who among the following has been the first sportsperson to receive the Padma Shri award from the Government of India?

**Options :**

1. Balbir Singh Dosanjh
2. Milkha Singh
3. Manpreet Singh
4. Dhanraj Pillay
- 5.

Answer : Balbir Singh Dosanjh

- Question No. 83

Which Indian actor has won the 'Russian Audience Heart' Award for 2020?

**Options :**

1. Prabhas
2. Ranveer Singh
3. Salman Khan
4. Mahesh Babu



5.

Answer : Prabhas

• Question No. 84

Which of the following is NOT a synovial joint in the human body?

**Options :**

1. Condylod joint
2. Sutures joint
3. Ball-and-socket joint
4. Hinge joint
- 5.

Answer : Sutures joint

• Question No. 85

As on July 2020, employees whose monthly wages are \_\_\_\_\_ or below are covered under the ESI Act.

**Options :**

1. ₹21,000
2. ₹17,000
3. ₹25,000
4. ₹15,000
- 5.

Answer : ₹21,000

• Question No. 86

In which Indian state is the 'Pookode Lake' located?

**Options :**

1. Punjab
2. Gujarat
3. Kerala
4. Tamil Nadu
- 5.

Answer : Kerala

• Question No. 87

The first English factory was set up on the banks of the river \_\_\_\_\_ in 1651.

Options :

1. Mandovi
2. Narmada
3. Godavari
4. Hugli
- 5.

Answer : Hugli

• Question No. 88

In which state of India does the 'Weinia Falls' lie?

Options :

1. Sikkim
2. Himachal Pradesh
3. Meghalaya
4. Goa
- 5.

Answer : Meghalaya

- Question No. 89

The ancient city of Hampi was the capital of the \_\_\_\_\_ empire.

**Options :**

1. Rashtrakuta
2. Nayaka
3. Maratha
4. Vijayanagar
- 5.

Answer : Vijayanagar

- Question No. 90

What is the intermediate level in the Panchayati Raj Institutions called?

**Options :**

1. Gram Panchayat
2. Kshetra Panchayat
3. Panchayat Samiti
4. Zilla Panchayat
- 5.

Answer : Panchayat Samiti

- Question No. 91

Which one of the following is the primary component of natural gas?

**Options :**

1. Helium
2. Carbon Dioxide
3. Nitrogen

4. Methane

5.

Answer : Methane

• Question No. 92

Which Article of the Constitution of India provides that there will be Governors of

**Options :**

1. 136

2. 148

3. 124

4. 153

5.

Answer : 153

• Question No. 93

\_\_\_\_\_ became the first Indian to win the under-18 title in the Orange Bowl tournament in 2008.

**Options :**

1. Rohan Bopanna

2. Manas Dhamne

3. Leander Paes

4. Yuki Bhambri

5.

Answer : Yuki Bhambri

• Question No. 94

In which year was the Foreign Exchange Management Act (FEMA) enacted to replace the Foreign Exchange Regulation Act (FERA)?

**Options :**

1. 1999
2. 1998
3. 2014
4. 1992
- 5.

Answer : 1999

• Question No. 95

Kinetic and potential energies of a body are the components of its \_\_\_\_\_ energy.

**Options :**

1. Chemical
2. Electrical
3. Mechanica
4. Heat
- 5.

Answer : Mechanica

• Question No. 96

What is the full form of SIDBI?

**Options :**

1. Service Industries Development Bank of India
2. Service Investment Development Bank of India
3. Small Investment Development Bank of India
4. Small Industries Development Bank of India
- 5.

Answer : Small Industries Development Bank of India

- Question No. 97

Churahi, Mandeali and Keonthali are dialects spoken in the state of:

**Options :**

1. Madhya Pradesh
2. Arunachal Pradesh
3. Uttar Pradesh
4. Himachal Pradesh
- 5.

Answer : Himachal Pradesh

- Question No. 98

To which state does the 'Gheriya Nritya' belong?

**Options :**

1. Gujarat
2. Maharashtra
3. Punjab
4. Haryana
- 5.

Answer : Gujarat

- Question No. 99

'Chad Sukra', a popular traditional dance-festival of Meghalaya, is celebrated as a \_\_\_\_\_.

**Options :**

1. community marriage festival
2. thanksgiving festival
3. birth festival

4. sowing festival

5.

Answer : sowing festival

- Question No. 100

Who among the following is the author of the book 'Amnesty'?

**Options :**

1. Vikram Seth
2. Amish Tripathi
3. Shashi Tharoor
4. Aravind Adiga
- 5.

Answer : Aravind Adiga

[Attempt Mock Test Now](#)

All ixamBee Mock Test are FREE @ [www.ixamBee.com](http://www.ixamBee.com)

Prepare **50%** Faster