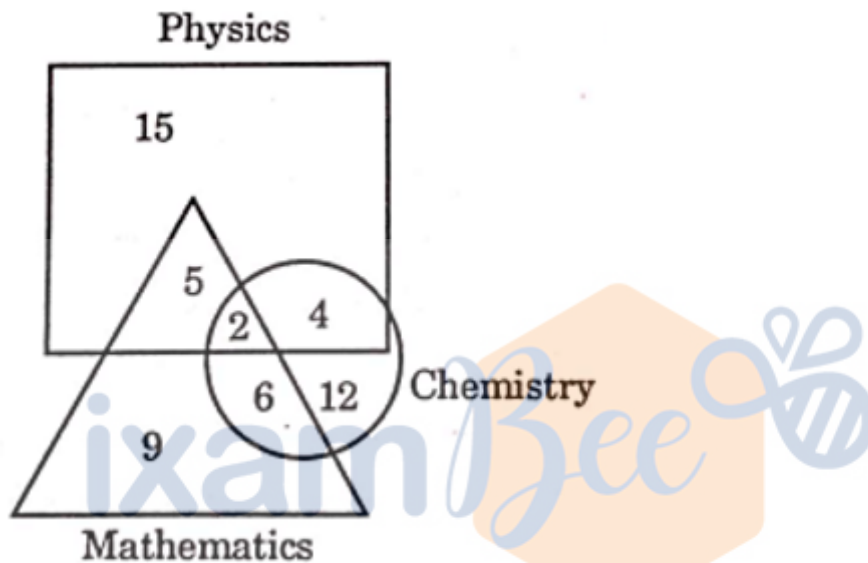


## • Question No.1

Study the given diagram carefully and answer the question. The numbers in different sections indicate the number of students who have scored more than 70% in three subjects, Physics, Chemistry and Mathematics.



What is the number of students who have scored more than 70% in both Physics and Chemistry, but not in Mathematics?

Options :

1. 4
2. 6
3. 12
4. 2
- 5.

Answer : 4

## • Question No.2

Given below is a question followed by two statements numbered I and II, each containing some information. You have to decide which of the statements is/are sufficient to answer the question. Read both the statements and

decide the appropriate answer.

What is the number of students in the class?

Statements:

I. Rank of Chetan is 19th from the top and 12th from the last.

II. 11 students got lower rank than Chetan.

**Options :**

1. Statement II alone is sufficient to answer the question while statement I alone is not sufficient.
2. Either statement I alone or statement II alone is sufficient to answer the question.
3. Both statements I and II together are necessary to answer the question.
4. Statement I alone is sufficient to answer the question while statement II alone is not sufficient.
- 5.

Answer : Statement I alone is sufficient to answer the question while statement II alone is not sufficient.

• Question No. 3

'A + B' means 'A is the wife of B'.

'A - B' means 'A is the father of B'.

'A × B' means 'A is the brother of B'.

'A ÷ B' means 'A is the daughter of B'.

Based on the above, if "T ÷ V × Q ÷ S + M - F", then how is 'M' related to 'T'?

**Options :**

1. Mother's mother
2. Father's brother
3. Mother's brother
4. Father's father
- 5.

Answer : Father's father

• Question No. 4

Arpit started from his office and travelled 2 km towards west, then he turned right and travelled 2 km and then turned left and travelled 3 km. From there he took a bus which travelled straight towards north and he travelled 10 km by this bus and reached his home. What is the shortest distance between his home and office?

**Options :**

1. 12 km
2. 13 km
3. 14 km
4. 10 km
- 5.

Answer : 13 km

• Question No. 5

Pointing to Sushmita, a man said, 'She is the only daughter of my daughter's paternal grandmother How is that man related to Sushmita?

**Options :**

1. Brother
2. Father's brother
3. Mother's brother
4. Father
- 5.

Answer : Brother

• Question No. 6

One morning Raghav met Bhaskar while walking in the park. Bhaskar noted that Raghav's shadow was exactly to the left of Raghav. If they were facing each other, which direction was Raghav facing

**Options :**

1. West
2. North
3. South
4. East
- 5.

Answer : North

• Question No. 7

Six friends Arunesh, Jitendra, Charu, Devansh, Pradeep and Kitu live on different floors of a six-storey building. Charu does not live on the top floor. Only three friends live above Pradeep's floor. Only four friends live below Jitendra's floor. Only Arunesh lives between the floors of Devansh and Pradeep. Who lives on the top floor?

**Options :**

1. Pradeep
2. Kitu
3. Devansh
4. Jitendra
- 5.

Answer : Kitu

• Question No. 8

Given below is a question followed by two statements numbered I and II, each containing some information. You have to decide which of the statements is/are sufficient to answer the question. Read both the statements and decide the appropriate answer.

What is the code for 'beautiful' in a certain code language?

Statements:

I. In the same code language, 'She is beautiful' is written as 'Ta Re Na'.

II. In the same code language, 'Red beautiful flower' is written as 'Sa Ge Ta'.

**Options :**

1. Statement II alone is sufficient to answer the question, while statement I alone is not sufficient.
2. Either statement I alone or statement II one is sufficient to answer the question.
3. Both statements I and II together are necessary to answer the question.
4. Statement I alone is sufficient to answer the question, while statement II alone is not sufficient.
- 5.

Answer : Both statements I and II together are necessary to answer the question.

• Question No. 9

Two statements labelled as Assertion (A) and Reason (R) are given. Read both the statement carefully and select the correct answer with the help of the codes.

Assertion (A): Use of electric vehicles is being promoted.

Reason (R): Electric vehicles are more environments friendly.

**Options :**

1. Both (A) and R) are true, but (R) is not the correct explanation of (A).
2. (A) is false, but (R) is true.
3. (A) is true, but (R) is false.
4. Both (A) and (R) are true and (R) is the correct explanation of (A).
- 5.

Answer : Both (A) and (R) are true and (R) is the correct explanation of (A).

• Question No. 10

Two statements labelled as Assertion (A) and Reason (R) are given. Read both the statements carefully and select the correct answer with the help of the codes.

Assertion (A): We celebrate Republic Day on 26th January every year.

Reason (R): India became free from British rule on 26th January, 1947.

**Options :**

1. Both (A) and R) are true, but (R) is not the correct explanation of (A).
2. (A) is false, but (R) is true.
3. (A) is true, but (R) is false.
4. Both (A) and (R) are true and (R) is the correct explanation of (A).
- 5.

Answer : (A) is true, but (R) is false.

• Question No. 11

The given question consists of a statement, followed by two assumptions numbered I and II. You have to decide which of the assumptions is/are implicit in the statement. Statement: IPL is popular among the Indian youths.

Assumptions:

I. Indian senior citizens do not like IPL.

II. All Indian youth like to watch IPL matches.

**Options :**

1. Only II is implicit.
2. Both I and II are implicit.
3. Neither I nor II is implicit.
4. Only I is implicit.
- 5.

Answer : Only II is implicit.

• Question No. 12

There are six teachers in school, viz. Bhanu, Raghav, Abdul, Shekhar, Kunal and Devesh. Since a ch of the there is no games teacher in the school, each of teachers is allocated one day for taking games class during six days of the week. There is no class on Sunday. Abdul takes the games class on the very next day to that of Raghav. Bhanu takes the games class on Friday and Shekhar takes the games class on Wednesday. Kunal takes the games class one day after Shekhar. On which day does Devesh take the games class?

**Options :**

1. Tuesday
2. Saturday
3. Wednesday
4. Monday
- 5.

Answer : Saturday

• Question No. 13

In this question, two statements are followed by two conclusions, numbered I and II. Find out wh conclusion(s) is/are definitely true, based on the given statements.

Statement:  $D > B \geq W, Y > W > M$

Conclusions: I.  $B \geq M$

II.  $M$

**Options :**

1. Only conclusion II is true.
2. Either conclusion I or conclusion II is true.
3. Both conclusions I and II are true.
4. Only conclusion I is true.
- 5.

Answer : Only conclusion II is true.

• Question No. 14

In this question, two statements are followed by two conclusions, numbered I and II. Find out which conclusion(s) is/are definitely true, based on the given statements.

Statement: G Q

Conclusions: I. G

II.  $W \geq L$

**Options :**

1. Only conclusion II is true.
2. Either conclusion I or conclusion II is true.
3. Both conclusions I and II are true.
4. Only conclusion I is true.
- 5.

Answer : Only conclusion I is true.

• Question No. 15

Six friends Vinay, Kapil, Suman, Mukul, Nain and David are sitting around a circle facing away from the centre. Mukul is sitting third to the left of Vinay and Suman is sitting to the immediate left of Vinay. Only Naina is sitting between, David and Vinay. Who is sitting second to the right of David?

**Options :**

1. Kapil
2. Vinay
3. Mukul
4. Suman
- 5.

Answer : Kapil



• Question No. 16

In this question, three statements are given, followed by two conclusions numbered I and II Assuming the statements to be true, even if they seem to be at variance with commonly known facts, decide which of the conclusions logically follow(s) from the statements.

Statements:

- All cars are buses.
- All buses are toys.
- All toys are gifts.

Conclusions:

- I. All cars are gifts.
- II. Some toys are cars.

**Options :**

1. Only conclusion II follows.
2. Both conclusions I and II follow
3. Neither conclusion I nor II follows.
4. Only conclusion I follows.
- 5.

Answer : Both conclusions I and II follow

• Question No. 17

What should come in the place of question mark (?n the following number series?

13, 27, 83, 335, ?

**Options :**

1. 672

2. 1128

3. 1679

4. 548

5.

Answer : 1679

• Question No. 18

Refer to the following letter sequence and answer the question given below:

Left) P, T, S, A, Q, R, G, P, Q, N, D, F, L, H, R, F, A, N (Right)

If every third letter in the given sequence is replaced by its next letter in the English alphabet, which letter will come second to the right of the fifteenth letter from the right end?

Options :

1. S

2. Q

3. T

4. R

5.

Answer : S

• Question No. 19

Six friends A, L, K, D, B and G are sitting on a bench facing towards north. 'A' is sitting second to the left of 'G' And 'G' is sitting fourth to the right of 'K'. 'B' is sitting immediate right of 'G'. Who is sitting on the extreme left end ?

Options :

1. K

2. L

3. D

4. A

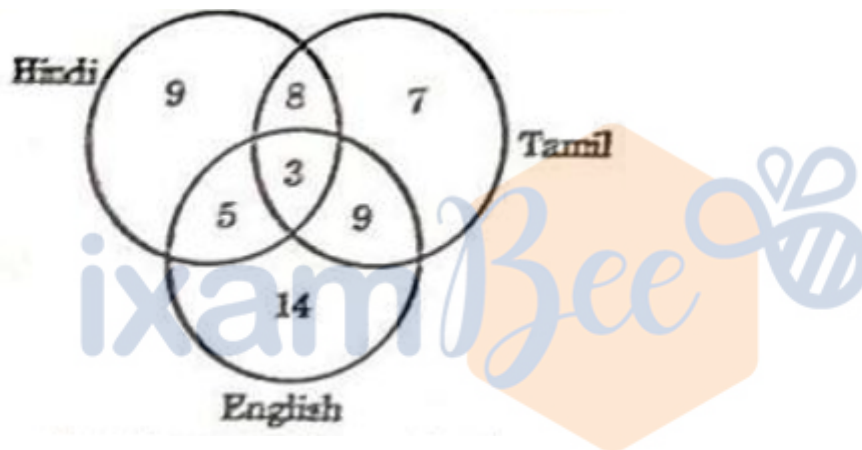
5.

Answer : K

- Question No. 20

Study the given diagram carefully and answer the question. The number in different sections indicates the number of persons who speak different languages.

What is the number of persons who speak at least two languages?



Options :

1. 17
2. 22
3. 25
4. 14
- 5.

Answer : 25

- Question No. 21

Rakesh obtained 25% more marks than Ambuj Suresh obtained 40% less marks than Rakesh. Marks obtained by Suresh are what percent less than marks obtained by Ambuj?

Options :

1. 28
2. 30
3. 20
4. 25
- 5.

Answer : 25

• Question No. 22

The largest three-digit number which gives the same remainder 3 when divided by 4, 9, 6 is:

Options :

1. 979
2. 982
3. 972
4. 975
- 5.

Answer : 975

• Question No. 23

Seema sold a laptop at a profit of 15%. If she had bought it at 10% less and sold it for ₹ 2,100 less, she would have gained 20%. What was the cost price (in ₹) of the laptop?

Options :

1. 30,000
2. 31,500
3. 27,500
4. 29,000
- 5.

Answer : 30,000

• Question No. 24

The average age of the husband, wife, and their child 4 years ago was 24 years and that of the husband and the child 5 years ago was 19 years. The present age of the wife is:

**Options :**

1. 36 years
2. 37 years
3. 30 years
4. 34 years
- 5.

Answer : 36 years

• Question No. 25

Which one of the following numbers is divisible by 11?

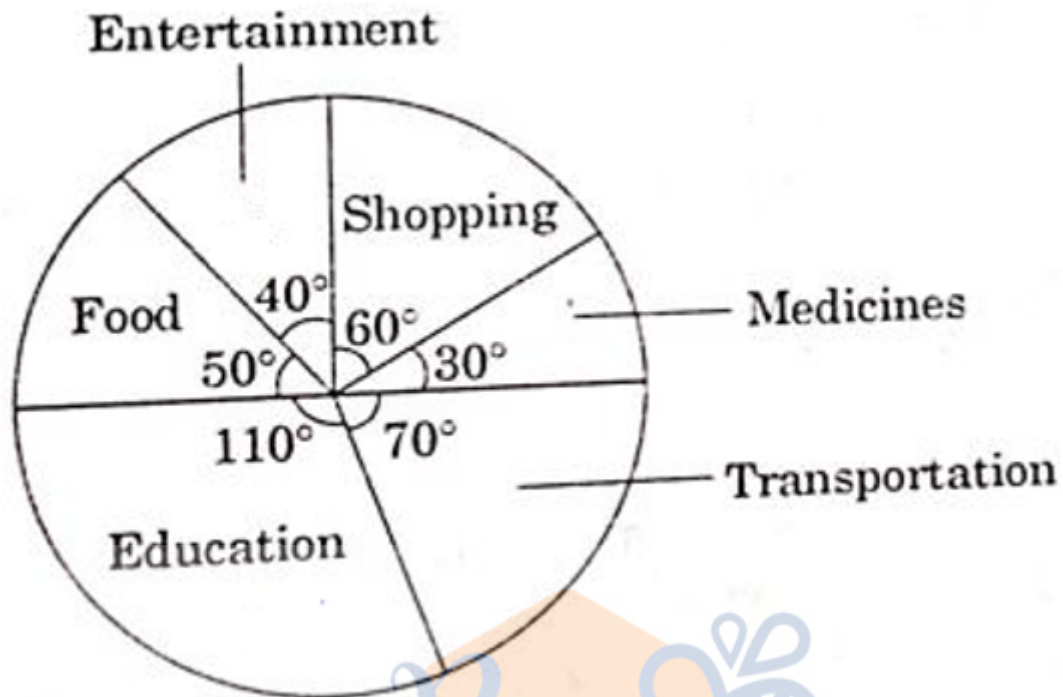
**Options :**

1. 4873524
2. 1987645
3. 2875944
4. 3587645
- 5.

Answer : 1987645

• Question No. 26

Total expenditure of a family on different heads is shown in the pie-chart. If total expenditure of the family is 72,000, then what is the total expenditure (in ₹) on Education and Entertainment?



Options :

1. 25,000
2. 30,000
3. 32,000
4. 22,000
- 5.

Answer : 30,000

• Question No. 27

The average age of 12 boys in a group is 8 years. If 3 more boys join the group, the average is increased by 1 year. What is the average age (in years) of the three new boys in the group?

Options :

1. 10
2. 12
3. 13

4. 9

5.

Answer : 13

• Question No. 28

A sum of ₹ 2,400 compounded annually at a certain rate of compound interest in 2 years amounts to ₹ 2,904. What will be the simple interest (in ₹) on the amount at the same time and at the same interest rate?

**Options :**

1. 436

2. 460

3. 480

4. 389

5.

Answer : 480

• Question No. 29

The amount becomes ₹ 1,451.25 in one year on a simple rate of interest. If the rate of interest was 2% higher, the amount would have been ₹ 27 more. What is the amount invested?

**Options :**

1. ₹ 1,275

2. ₹ 1,350

3. ₹ 1,380

4. ₹ 1,200

5.

Answer : ₹ 1,350

• Question No. 30

The average age of the husband, wife and their child 4 years ago was 24 years and that of the husband and the child 5 years ago was 19 years. The present age of the wife is:

**Options :**

1. 34 years
2. 36 years
3. 37 years
4. 30 years
- 5.

Answer : 36 years

• Question No. 31

In an election between two candidates Abhay and Bharti, Abhay got 55% of the total valid votes, 20% of the total votes were invalid. If the total number of votes was 10,000, the number of val votes that Abhay got was:

**Options :**

1. 4400
2. 4800
3. 5000
4. 4200
5. none of these

Answer : 4400

• Question No. 32

Which of the following fractions lies between  $\frac{3}{7}$  and  $\frac{8}{9}$ ?

**Options :**

1.  $\frac{2}{5}$
2.  $\frac{4}{9}$
3.  $\frac{5}{13}$



4.  $\frac{1}{3}$

5.

Answer :  $\frac{4}{9}$

• Question No. 33

Rakesh obtained 25% more marks than Ambuj and Suresh obtained 40% less marks than Rakesh. Marks obtained by Suresh are what percent less than marks obtained by Ambuj?

**Options :**

1. 25

2. 28

3. 30

4. 20

5.

Answer : 25

• Question No. 34

Study the given table to answer the question that follows.

The table shows the number of students who appeared in the 12th Board Examination from four schools A, B, C and D in different years.

Year	2018	2019	2020	2021	2022
School					
A	81	78	82	83	80
B	83	84	80	78	75
C	70	85	81	65	79
D	78	69	86	89	84

From which school is the total number of students that appeared in the 12th Board Examination from 2019 to 2022 the highest?

Options :

1. B
2. C
3. D
4. A
- 5.

Answer : D

- Question No. 35

The largest three-digit number which gives the same remainder 3 when divided by 4, 9, 6 is:

Options :

1. 975
2. 979
3. 982
4. 978
- 5.

Answer : 975

• Question No. 36

Seema sold a laptop at a profit of 15%. If she had bought it at 10% less and sold it for 2,100 less, she would have gained 20%. What was the cost price (in ₹) of the laptop?

**Options :**

1. 29,000
2. 30,000
3. 31,500
4. 27,500
- 5.

Answer : 30,000

• Question No. 37

The value of  $\frac{\sqrt{324}}{\sqrt{729}} + \frac{1}{3} - \frac{\sqrt{169}}{\sqrt{676}} + \frac{1}{2}$  is:

**Options :**

1. 1/2
2. 1
3. 2
4. 0
- 5.

Answer : 1

• Question No. 38

The value of

$$\frac{7}{10} \div \frac{3}{4} \times 1\frac{2}{5} - \frac{2}{3} \times 1\frac{1}{4} \div 4\frac{1}{6} + \frac{1}{15}$$

**Options :**

1. 1/5
2. 3/7
3. 8/15
4. 1
- 5.

Answer : 8/15

- Question No. 39

₹ 6,900 is divided between L, M and N in the ratio of 6: 8: 9. If 'L' and 'M' each gave ₹ 300 to N then the new ratio of shares of L, M and N is:

**Options :**

1. 3 : 7 : 9
2. 5 : 7 : 11
3. 5 : 7 : 9
4. 3 : 5 : 9
- 5.

Answer : 5 : 7 : 11

- Question No. 40

Saurabh can complete a piece of work in 20 days. He worked for 5 days and left. Anirudh completed the remaining work in 12 days. If both of them had done the work together, the work would have been completed in how many days?

**Options :**

1. 8(8/9)
2. 9
3. 9(8/9)
4. 8
- 5.

Answer : 8(8/9)

• Question No. 41

Which of the following is/are among the four National Curriculum Frameworks (NCF) to be developed under the aegis of NEP 2020?

- A. NCF for School Education
- B. NCF for Early Childhood Care and Education
- C. NCF for Spiritual Education
- D. NCF for Vocational Education

Choose the correct answer from the codes given below :

Options :

1. Only C and D
2. Only A and B
3. Only A, B and C
4. Only A
- 5.

Answer : Only A and B

• Question No. 42

Consider the following statements:

- A. The two main genres of Indian classical music are Carnatic and Hindustani.

B. The Bharat Ratna awardee M.S. Subbulakshmi belongs to the genre of Hindustani music.

Choose the correct answer from the codes given below :

**Options :**

1. A is wrong but B is correct
2. Both A and B are correct
3. Neither A nor B is correct
4. A is correct but B is wrong
- 5.

Answer : A is correct but B is wrong

- Question No. 43

Who among the following is the winner of the 2023 "Goldman Environmental Prize" for winning a landmark case against Formosa Plastic, one of the world's largest petrochemical companies, for the illegal dumping of toxic plastics waste on Texas Gulf Coast?

**Options :**

1. Delima Silalahi
2. Tero Mustonen
3. Alessandra Korap Munduruku
4. Diane Wilson
- 5.

Answer : Diane Wilson

- Question No. 44

Which of the following statements is/are correct about friction?

- A. Friction can be entirely eliminated on any surface.
- B. Rolling reduces friction.

C. Sliding friction is smaller than the rolling friction.

Choose the correct answer from the codes given below:

**Options :**

1. Only A and C are correct
2. Only B and C are correct
3. Only B is correct
4. Only A and B are correct
- 5.

Answer : Only B is correct

- Question No. 45

What is the mean annual average temperature zones? (in degrees Celsius) in Temperate vegetation zones?

**Options :**

1. 17° C to 24°C
2. 7°C to 17°C
3. Below 7°C
4. Above 24°C
- 5.

Answer : 7°C to 17°C

- Question No. 46

As per the Status of Tigers, 2022 Report released in April 2023, what percentage of the total world wild tiger population does India account for?

**Options :**

1. 50%
2. 60%

3. 70%

4. 40%

5.

Answer : 70%

• Question No. 47

Which of the following grades does the Secondary stage cover as per the Curricular and Pedagogical Structure mentioned in the National Education Policy, 2020?

**Options :**

1. Grades 6 to 12

2. Grades 9 to 10

3. Grades 9 to 12

4. Grades 6 to 10

5.

Answer : Grades 9 to 12

• Question No. 48

Which of the following States is not covered under Strengthening Teaching-Learning and Results for States (STARS) Project?

**Options :**

1. Rajasthan

2. Madhya Pradesh

3. Karnataka

4. Himachal Pradesh

5.

Answer : Karnataka



• Question No. 49

In which of the following States did India host the Hero Asian Champions Trophy hockey tournament in August 2023?

**Options :**

1. Odisha
2. Punjab
3. Tamil Nadu
4. Manipur
- 5.

Answer : Tamil Nadu

• Question No. 50

Which of the following organizations is entrusted with the task of developing the Assessment Framework of National Achievement Survey (SAS), 2021?

**Options :**

1. National Institute of Educational Planning and Administration (NIEPA)
2. National Institute of Open Schooling (NIOS)
3. Central Board of Secondary Education (CBSE)
4. National Council for Educational Research and Training (NCERT)
- 5.

Answer : National Council for Educational Research and Training (NCERT)

• Question No. 51

Which of the following is a thermosetting plastic?

**Options :**

1. Polythene

2. PVC
3. Nylon
4. Melamine
- 5.

Answer : Melamine

- Question No. 52

Speed of light is about \_\_\_\_\_.

**Options :**

1. 30,00,000 km/s
2. 3,00,000 m/s
3. 30,00,000 m/s
4. 3,00,000 km/s
- 5.

Answer : 3,00,000 km/s

- Question No. 53

Which of the following teams won the Tata Indian Premier League 2023 title

**Options :**

1. Chennai Super Kings
2. Lucknow Super Giants
3. Mumbai Indians
4. Gujarat Titans
- 5.

Answer : Chennai Super Kings

- Question No. 54

Which Indian city was earlier referred to as the Manchester of India?

**Options :**

1. Kolkata
2. Patna
3. Chennai
4. Ahmedabad
- 5.

Answer : Ahmedabad

- Question No. 55

Who among the following was awarded Padma Vibhushan 2023 in the field of Art?

**Options :**

1. Vani Jairam
2. Suman Kalyanpur
3. Zakir Hussain
4. S M Krishna
- 5.

Answer : Zakir Hussain

- Question No. 56

According to the Economic Survey of India 2022-23, the School Gross Enrolment Ratio is the highest at which level of schooling as per the latest data available for the year 2021-22?

**Options :**

1. Primary
2. Upper Primary
3. Secondary
4. Pre School

5.

Answer : Upper Primary

- Question No. 57

An International Museum Expo was organized in May in New Delhi to celebrate the 47th International Museum Day.

What was the theme of the International Museum Day this year?

**Options :**

1. Museums, Heritage, History
2. Museums, Memory, Welfare
3. Museums, Sustainability and Well Being
4. Museums are History
- 5.

Answer : Museums, Sustainability and Well Being

- Question No. 58

Which of the following was awarded the Best International Feature Film at the 95th Academy Awards 2023?

**Options :**

1. All Quiet on the Western Front
2. TAR
3. The Quiet Girl
4. The Elephant Whisperers
- 5.

Answer : All Quiet on the Western Front

- Question No. 59

Which of the following planets has moons called "Ophelia" and "Puck" which have been named after characters from William Shakespeare's works?

**Options :**

1. Jupiter
2. Pluto
3. Mars
4. Uranus
- 5.

Answer : Uranus

• Question No. 60

Which of the following images during the French Revolution stood for the symbol of Eternity?

**Options :**

1. The broken chain
2. The eye within a triangle
3. A snake biting its tail to form a ring
4. The winged woman
- 5.

Answer : A snake biting its tail to form a ring

• Question No. 61

Which of the following rivers in the world does not have a single bridge across it?

**Options :**

1. Thames
2. Amazon
3. Negro
4. Nile
- 5.

Answer : Amazon

• Question No. 62

Which of the following places is known as the “City of Peace and Justice”?

**Options :**

1. Warsaw
2. Montreal
3. Munich
4. The Hague
- 5.

Answer : The Hague

• Question No. 63

Which of the following organizations is associated with the people’s movement for Right to Information which eventually led to the enactment of the Right to Information Act ?

**Options :**

1. People’s Union for Civil Liberties
2. Jan Adhikar Morcha
3. Mazdoor Kisan Shakti Sangathan
4. Safai Karamchari Sabha
- 5.

Answer : Mazdoor Kisan Shakti Sangathan

• Question No. 64

Which among the following States has seen a steady increase every year from 2017-18 to 2020-21 in the overall scores of the Performance Grading Index (PGI)?

**Options :**

1. Tamil Nadu

2. Chhattisgarh
3. Telangana
4. Maharashtra
- 5.

Answer : Maharashtra

- Question No. 65

Which of the following Indian cities hosted the Squash World Cup in June 2023 ?

**Options :**

1. Mumbai
2. Chennai
3. Ahmedabad
4. Kolkata
- 5.

Answer : Chennai

- Question No. 66

Skill Acquisition and Knowledge Awareness for Livelihood Promotion (SANKALP) is a skill development programme in India assisted by which of the following?

**Options :**

1. International Labour Organization
2. SAARC
3. World Bank
4. USA
- 5.

Answer : World Bank

- Question No. 67

Smiling Buddha was the codename for which of the following operations in India?

**Options :**

1. India's first successful nuclear bomb test in 1974
2. India's peace-keeping mission on the western border of Pakistan in 1970
3. India's launch of the first satellite into space
4. India's counter insurgency operation against China in 1962
- 5.

Answer : India's first successful nuclear bomb test in 1974

- Question No. 68

Which of the following options correctly describes the sequence of formation of the following states in independent India in chronological order starting from the earliest to the last?

**Options :**

1. Tripura □ Nagaland □ Meghalaya
2. Tripura □ Jharkhand □ Nagaland
3. Meghalaya □ Nagaland □ Mizoram
4. Meghalaya □ Mizoram □ Jharkhand
- 5.

Answer : Meghalaya □ Mizoram □ Jharkhand

- Question No. 69

Who was the founder of the Independent Labour Party in India?

**Options :**

1. Ram Manohar Lohia
2. B.R. Ambedkar



3. Jayaprakash Narayan
4. V.V. Giri
- 5.

Answer : B.R. Ambedkar

• Question No. 70

Which of the following Fundamental Rights is not suspended when a Proclamation of Emergency in operation according to the Indian Constitution?

**Options :**

1. Freedom to assemble peaceably and without arms
2. Protection in respect of conviction for offences
3. Equality of opportunity in matters of public employment
4. Freedom of speech and expression
- 5.

Answer : Protection in respect of conviction for offences

• Question No. 71

Choose the word opposite in meaning to the given word :

MODESTY

**Options :**

1. Meekness
2. Arrogance
3. Violence
4. Anger
- 5.

Answer : Arrogance

- Question No. 72

Rearrange the parts in correct order to make meaningful sentence:

- A. and finally caught him
- B. while he was jumping onto
- C. they ran after the thief
- D. a speeding bus

**Options :**

1. CBDA
2. BADC
3. ADCB
4. DBAC
- 5.

Answer : CBDA

- Question No. 73

In the given sentence, identify the part which contains an error.

It seems that/he hasn't met you / for a long time, /is it?

- a                      b                      c                      d

**Options :**

1. a
2. b
3. c
4. d
- 5.

Answer : d

- Question No. 74

Choose the correct meaning of the idiom/phrase given below :

be down with

**Options :**

1. coming from a poor background
2. being humiliated
3. bidding one's time
4. suffering from an ailment
- 5.

Answer : bidding one's time

- Question No. 75

Choose the word nearest in meaning to the given word:

MELANCHOLIC

**Options :**

1. Jubilant
2. Serious
3. Sad
4. Frustrated
- 5.

Answer : Sad

- Question No. 76

Fill in the blank with the appropriate Article.

We should always take care of \_\_\_\_\_ poor.

**Options :**

1. an
2. the
3. No article
4. a
- 5.

Answer : the

• Question No. 77

Fill in the blank with the appropriate form of the verb that agrees with the Subject.

Each one of the workers \_\_\_\_\_ a raise in salary from the coming month.

**Options :**

1. wants
2. are wanting
3. have wanted
4. want
- 5.

Answer : wants

• Question No. 78

Choose the option which correctly identifies the tense of the given sentence.

Aren't they going to meet you soon?

**Options :**

1. Present Continuous Tense
2. Past Continuous Tense
3. Present Perfect Continuous Tense

4. Future Perfect Continuous Tense

5.

Answer : Present Continuous Tense

- Question No. 79

Fill in the blank by choosing the correct form of the Verb.

By the time I met him, he \_\_\_\_\_ reading the voluminous novel.

**Options :**

1. had finished
2. was finishing
3. will finish
4. finished
- 5.

Answer : had finished

- Question No. 80

Choose the best option in which the given sentence has been changed from Active Voice to Passive Voice.

I lost my watch in the rural fair.

**Options :**

1. My watch was lost in the rural fair.
2. In the rural fair, I lost my watch.
3. My watch is lost in the rural fair.
4. My watch has been lost in the rural fair.
- 5.

Answer : My watch was lost in the rural fair.

Direction:

Read the passage given below and answer the questions (81-85) that follow:

Dadi had come to the hospital for operation for eye ailment. The operation had gone well and she was on the road to recovery. On the day of the expected discharge, when Tanuja's mother came to the hospital to complete the formalities and take her home, she was accosted by some hospital inmates at the gate who told her, Where have you been all this time? Your old mother slipped from her bed at night and broke her hip bone.'s; Tanuja's mother rushed in to provide succour to her mother. After emergency treatment, Dadi was shifted to the orthopaedic ward. A complicated surgery followed which necessitated her stay in the hospital for six weeks for cavaleren, In the hospital, who was looked after by Tanuja and Machhli during the day, while Taneja's treabhar stayed with her during the night. After a few days, when Markti found Tanuja's mother worked as she had to take care of her home too, she offered with the night shift too. Machhli's deernoon servien for 5 brought her closer to dadi and his family.

Over the years, Machhli had served many, many patients best there was something so affectionate, so endearing in Dadi that brought Machhli close to her. Machhli could not help recalling that in her village home too, she had a grandmother who resembled Dadi in many ways, including the way Dadi showered affection on all those who came in contact with her. In the hospital, Dadi showered affection on doctors, nurses, attendants, in fact, on all those who touched her life even in oblique ways. The hospital personnel too called her Dadi and gave her due respect and regard.

- Question No. 81

What unfortunate thing had happened to dadi?

**Options :**

1. She had broken her hip bone.
2. She had fainted unexpectedly.
3. She had stumbled on the roadside.
4. She had suffered a heart attack.
- 5.

Answer : She had broken her hip bone.

Direction:

Read the passage given below and answer the questions (81-85) that follow:

Dadi had come to the hospital for operation for eye ailment. The operation had gone well and she was on the road to recovery. On the day of the expected discharge, when Tanuja's mother came to the hospital to complete the formalities and take her home, she was accosted by some hospital inmates at the gate who told her, Where have you been all this time? Your old mother slipped from her bed at night and broke her hip bone.'s; Tanuja's mother rushed in to provide succour to her mother. After emergency treatment, Dadi was shifted to the orthopaedic ward. A complicated surgery followed which necessitated her stay in the hospital for six weeks for cavaleren, In the hospital, who was looked after by Tanuja and Machhli during the day, while Taneja's treabhar stayed with her during the night. After a few days, when Markti found Tanuja's mucher verworked as she had to take care of her home toy, she offered with the night shift two. Machlis dernoorn servien for 5 brought her closer to dadi and him family.

Over the years, Machhli had served many, pubny patients best there was wurmething so affectionate, so endearing in Dadi that brought Machhli clong to her. Machli could not help recalling that in her village home too, she had a grandmother who resembled Dadi in many ways, including the way Dadi showered affection on all those who came in contact with her. In the hospital, Dadi shunered affection on doctors, nurses, attendants, in fact, on all those who touched her life even in oblique ways. The hospital personnel too called her Dadi and gave her due respect and regard.

- Question No. 82

What does 'convalescence' mean?

**Options :**

1. getting weaker day by day
2. showing no signs of recovery
3. feeling depressed
4. Improvement in health condition
- 5.

Answer : Improvement in health condition

Direction:

Read the passage given below and answer the questions (81-85) that follow:

Dadi had come to the hospital for operation for eye ailment. The operation had gone well and she was on the road to recovery. On the day of the expected discharge, when Tanuja's mother came to the hospital to complete the formalities and take her home, she was accosted by some hospital inmates at the gate who told her, Where have you been all this time? Your old mother slipped from her bed at night and broke her hip bone.'s; Tanuja's mother rushed in to provide succour to her mother. After emergency treatment, Dadi was shifted to the orthopaedic ward. A complicated surgery followed which necessitated her stay in the hospital for six weeks for cavaleren, In the hospital, who was looked after by Tanuja and Machhli during the day, while Taneja's treabhar stayed with her during the night. After a few days, when Markti found Tanuja's mucher verworkd as ahe had to take care of her home toy, she offered with the night shift two. Machlis dernoorn servien for 5 brought her closer to dadi and him family.

Over the years, Machhli had served many, pubny patients best there was wurmething so affectionate, so endearing in Dadi that brought Machhli clong to her. Machli could not help recalling that in her village home too, she had a grandmother who resembled Dadi in many ways, including the way Dadi showered affection on all those who came in contact with her. In the hospital, Dadi shunered affection on doctors, nurses, attendants, in fact, on all those who touched her life even in oblique ways. The hospital personnel too called her Dadi and gave her due respect and regard.

- Question No. 83

State which of the following statements is true/false.

A. The hospital personnel treated Dadi with contempt.

B. Dadi was affectionate towards everyone.

**Options :**

1. Both A and B are false.
2. A is true but B is false
3. A is false but B is true
4. Both A and B are true
- 5.

Answer : A is false but B is true

Direction:



Read the passage given below and answer the questions (81-85) that follow:

Dadi had come to the hospital for operation for eye ailment. The operation had gone well and she was on the road to recovery. On the day of the expected discharge, when Tanuja's mother came to the hospital to complete the formalities and take her home, she was accosted by some hospital inmates at the gate who told her, Where have you been all this time? Your old mother slipped from her bed at night and broke her hip bone.'s; Tanuja's mother rushed in to provide succour to her mother. After emergency treatment, Dadi was shifted to the orthopaedic ward. A complicated surgery followed which necessitated her stay in the hospital for six weeks for cavaleren, In the hospital, who was looked after by Tanuja and Machhli during the day, while Taneja's treabhar stayed with her during the night. After a few days, when Markti found Tanuja's mother worked as she had to take care of her home too, she offered with the night shift too. Machhli's devious servant for 5 brought her closer to dadi and his family.

Over the years, Machhli had served many, poor patients best there was something so affectionate, so endearing in Dadi that brought Machhli close to her. Machhli could not help recalling that in her village home too, she had a grandmother who resembled Dadi in many ways, including the way Dadi showered affection on all those who came in contact with her. In the hospital, Dadi showered affection on doctors, nurses, attendants, in fact, on all those who touched her life even in oblique ways. The hospital personnel too called her Dadi and gave her due respect and regard.

- Question No. 84

**Options :**

1. cold and uncaring
2. friendly and devoted
3. thoughtless and frivolous
4. vain and arrogant
- 5.

Answer : friendly and devoted

Direction:

Read the passage given below and answer the questions (81-85) that follow:

Dadi had come to the hospital for operation for eye ailment. The operation had gone well and she was on the road to recovery. On the day of the expected discharge, when Tanuja's mother came to the hospital to complete the formalities and take her home, she was accosted by some hospital inmates at the gate who told her, Where have you been all this time? Your old mother slipped from her bed at night and broke her hip bone.'s; Tanuja's mother rushed in to provide succour to her mother. After emergency treatment, Dadi was shifted to the orthopaedic ward. A complicated surgery followed which necessitated her stay in the hospital for six weeks for cavaleren, In the hospital, who was looked after by Tanuja and Machhli during the day, while Taneja's treabhar stayed with her during the night. After a few days, when Markti found Tanuja's mucher verworked as she had to take care of her home toy, she offered with the night shift two. Machlis dernoorn servien for 5 brought her closer to dadi and him family.

Over the years, Machhli had served many, pubny patients best there was wurmething so affectionate, so endearing in Dadi that brought Machhli clong to her. Machli could not help recalling that in her village home too, she had a grandmother who resembled Dadi in many ways, including the way Dadi showered affection on all those who came in contact with her. In the hospital, Dadi shunered affection on doctors, nurses, attendants, in fact, on all those who touched her life even in oblique ways. The hospital personnel too called her Dadi and gave her due respect and regard.

- Question No. 85

The tone of the passage is:

**Options :**

1. discursive
2. narrative
3. argumentative
4. reflective
- 5.

Answer : narrative

- Question No. 86

नमिन्लखिति में से कौन-सा वकिल्प सही नहीं है ?

**Options :**

1. सप्ताह में एक बार प्रकाशति होने वाला - साप्ताहकि
2. वर्ष में एक बार प्रकाशति होने वाला - वार्षकि
3. पखवाड़े में एक बार प्रकाशति होने वाला - पाक्षकि
4. माह में एक बार प्रकाशति होने वाला - मासकि
- 5.

Answer : पखवाड़े में एक बार प्रकाशति होने वाला - पाक्षकि

• Question No. 87

'सड़क नापना' मुहावरे का सटीक अर्थ है:

**Options :**

1. सड़क की लंबाई मापना
2. बेकार काम करना
3. मन का काम न मलिना
4. व्यर्थ में इधर-उधर घूमना
- 5.

Answer : व्यर्थ में इधर-उधर घूमना

• Question No. 88

नमिनलखिति शब्दों में से 'पत्नी' का पर्यायवाची नहीं है:

**Options :**

1. गृहणिी
2. कामनीी
3. दारा
4. वामांगी
- 5.

Answer : कामनीी

- Question No. 89

'पीपर पात सरसि मन डोला' पंक्ति में अलंकार है:

**Options :**

1. उपमा
2. रूपक
3. उत्प्रेक्षा
4. यमक
- 5.

Answer : उपमा

- Question No. 90

'तुलसीकृत' शब्द में समास है :

**Options :**

1. तत्पुरुष
2. कर्मधारय
3. द्वन्द्व
4. अव्ययीभाव
- 5.

Answer : तत्पुरुष

- Question No. 91

निम्नलिखित में से वसिर्ग संघि वाला शब्द नहीं है:

**Options :**

1. दगिबर
2. दुरुपयोग
3. बहरिमुख

4. नरिशा

5.

Answer : दगिबर

- Question No. 92

वर्तनी की दृष्टिसे अशुद्ध शब्द है :

**Options :**

1. उपलक्ष्य

2. मध्याह्न

3. उज्ज्वल

4. स्टेशन

5.

Answer : उज्ज्वल

- Question No. 93

' आप भ्रला तो जग भला ' लोकोक्तिका नमिनलखिति में से सटीक अर्थ है:

**Options :**

1. सबका भला करना चाहिए

2. अच्छे को सभी अच्छे लगते हैं

3. सबको समान समझना चाहिए

4. संसार हमारी तरह है

5.

Answer : अच्छे को सभी अच्छे लगते हैं

- Question No. 94

नमिनलखिति में से अशुद्ध वाक्य है:

**Options :**

1. उसकी माताजी दलिली में रहती हैं।
2. वह पुस्तक मैंने पढ़ी है।
3. वह धीमे स्वर में बोला।
4. वे अभी-अभी गाना गाए हैं।
- 5.

Answer : वे अभी-अभी गाना गाए हैं।

• Question No. 95

नमिंलखिति में से स्वर संधिवाला शब्द नहीं है:

**Options :**

1. जगन्नाथ
2. उमेश
3. परोपकार
4. परमेश्वर
- 5.

Answer : जगन्नाथ

• Question No. 96

नमिंलखिति में से असंगत वलिोमार्थी शब्द-युग्म है :

**Options :**

1. ताप - शीत
2. जीवति - मृत
3. जटलि - सरल
4. दुर्जन - सजन
- 5.

Answer : दुर्जन - सजन







- Question No. 100

शक्ति से इस प्रकार की चेतना नहीं आएगी कलोग :

**Options :**

1. राष्ट्र की समस्या के समाधान में योगदान दें।
2. परिवार का जीवन स्तर तय होगा।
3. समाज के विकास में सहायता होगी।
4. राष्ट्र के वषिय में सोच सकें।
- 5.

Answer : राष्ट्र की समस्या के समाधान में योगदान दें।

- Question No. 101

Which out of the following is the combination of keys used to copy a selected text in word processing software?

**Options :**

1. Alt+C
2. Ctrl + P
3. Ctrl+ Y
4. Ctrl + C
- 5.

Answer : Ctrl + C

- Question No. 102

Which out of the following is the correct full form of TCP?

**Options :**

1. Transportation Control Protocol
2. Transmission Central Protocol
3. Transport Control Protocol

4. Transmission Control Protocol

5.

Answer : Transmission Control Protocol

- Question No. 103

\_\_\_\_\_ are the visual effects which appear in PowerPoint when one slide moves to next.

**Options :**

1. Slide Transitions

2. Slide Effects

3. Slide Frames

4. Slide Movements

5.

Answer : Slide Transitions

- Question No. 104

Which out of the following is the correct full form of VoIP?

**Options :**

1. Voice on Internet Protocol

2. Voice over Internet Protocol

3. Voice over Internetwork Protocol

4. Video over Internet Protocol

5.

Answer : Voice over Internet Protocol

- Question No. 105

\_\_\_\_\_ is used to quickly apply the same formatting, such as colour, font style and size, or border style, to multiple pieces of text or graphics.

**Options :**

1. Format Stamp
2. Format Painter
3. Format Move
4. Format Copy
- 5.

Answer : Format Painter

• Question No. 106

Tarunji Sen is planning to buy a new smartphone. Which one of the following aspects should he not be bothered about?

**Options :**

1. Camera Pixels
2. Operating System
3. Ethernet Port
4. Internal Memory
- 5.

Answer : Ethernet Port

• Question No. 107

Which out of following is not a file extension of a video file?

**Options :**

1. .avi
2. .mp4
3. .pdf
4. .mov
- 5.

Answer : .pdf

- Question No. 108

The first supercomputer developed in India is

**Options :**

1. PARAM
2. ARYABHATA
3. VISHAL
4. BUDDHA
- 5.

Answer : PARAM

- Question No. 109

Which out of the following is not an example of IP Address?

**Options :**

1. 10.10.10.120
2. 202.54.256.30.
3. 25.16.25.100
4. 198.168.30.9
- 5.

Answer : 25.16.25.100

- Question No. 110

An Operating System is an example of:

**Options :**

1. Language Processor

2. Utility Software
3. System Software
4. Application Software
- 5.

Answer : System Software

- Question No. 111

Which of the following is not valid about an email address?

**Options :**

1. Email Address can have multiple dot (.) operators
2. Email Address cannot have space in it.
3. Email Address can have any number of @ symbols
4. Email Address should have one @ symbol
- 5.

Answer : Email Address should have one @ symbol

- Question No. 112

What is the full form of CPU?

**Options :**

1. Central Process Unit
2. Central Primary Unit
3. Center Processing Unit
4. Central Processing Unit
- 5.

Answer : Central Processing Unit

- Question No. 113

Eena Khande is creating her project report as a document and is interested in typing the same in an easy-to-use software with facility of formatting page setting and styling features. Which out of the following software will be ideal for the same?

**Options :**

1. Calc
2. Notepad
3. Acrobat Reader
4. MS Word
- 5.

Answer : MS Word

- Question No. 114

Which out of the following is the correct file extension of an Excel file?

**Options :**

1. .xlsx
2. .xel
3. .xelx
4. .excel
- 5.

Answer : .xlsx

- Question No. 115

Mohak Shangle is interested in making a digital presentation for marketing his company's new product using an Open Source Software. Which of the following software will you suggest for the same?

**Options :**

1. Calc
2. Writer

3. PowerPoint
4. Impress
- 5.

Answer : PowerPoint

• Question No. 116

What is the full form of bps in terms of computer networking?

**Options :**

1. bytes per second
2. bits per system
3. bytes per system
4. A bits per second
- 5.

Answer : A bits per second

• Question No. 117

Which out of the following is the extension of MS PowerPoint file?

**Options :**

1. .pdocx
2. .pwpt
3. .ppoint
4. .pptx
- 5.

Answer : .pptx

• Question No. 118

Which out of the following cannot be reported as Cyber Crime?

**Options :**

1. Theft of a brand new hard disk from a showroom
2. Sharing of pornographic content online
3. Entering into someone's online bank account and transferring money from there
4. Threatening someone on social media platform
- 5.

Answer : Theft of a brand new hard disk from a showroom

• Question No. 119

Which out of the following is true about cell range in MS Excel?

**Options :**

1. Collection of formulae
2. Collection of values
3. Collection of occupied cells
4. Collection of chosen cells
- 5.

Answer : Collection of occupied cells

• Question No. 120

What does 's' stand for in https?

**Options :**

1. Security
2. Stream
3. Space
4. Secure
- 5.

Answer : Secure



- Question No. 121

Which of the following is the correct full form of HTTP

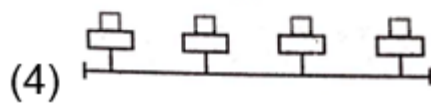
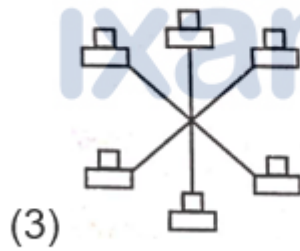
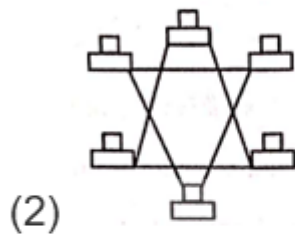
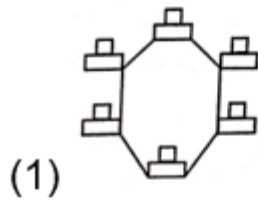
**Options :**

1. Higher Text Transfer Protocol
2. Hyper Text Transfer Protocol
3. Hyper Text Transmission Protocol
4. Hyper Transfer Text Protocol
- 5.

Answer : Hyper Text Transfer Protocol

- Question No. 122

Which out of the following represents STAR topology of Network?



Options :

1. Option 1
2. Option 2
3. Option 3
4. Option 4
- 5.

Answer : Option 2

- Question No. 123

Gafoor Shanty is planning to connect 24 computers in his office using Ethernet Cable as part of a Local Area Network. Which one of the following devices should he use for the same?

**Options :**

1. Switch
2. Repeater
3. HDMI Splitter
4. Booster
- 5.

Answer : Switch

- Question No. 124

Which of the following is not a file extension of an image file?

**Options :**

1. .jpg
2. .tiff
3. .png
4. .wav
- 5.

Answer : .jpg

- Question No. 125

Which out of the following ports will be most suitable for connecting High Quality Audio-Video output on a PC/laptop?

**Options :**

1. PS2

2. HDMI
3. VGA
4. USB
- 5.

Answer : HDMI

- Question No. 126

Which out of the following is not an example of a Relational Database Management System (RDBMS)?

**Options :**

1. MS SQL Server
2. MS Excel
3. IBM DB2
4. MySQL
- 5.

Answer : MySQL

- Question No. 127

Which out of the following companies are not known for developing Antivirus software

**Options :**

1. Tally
2. McAfee
3. Kaspersky
4. Norton
- 5.

Answer : Tally

- Question No. 128

Which out of the following is not an input device ?

**Options :**

1. Plotter
2. Joystick
3. Barcode Scanner.
4. Touchpad
- 5.

Answer : Plotter

- Question No. 129

Which out of the following is not an example of Operating System ?

**Options :**

1. MS Windows
2. Linux
3. Mozilla Firefox
4. MacOS
- 5.

Answer : Mozilla Firefox

- Question No. 130

Which out of the following is the largest memory unit?

**Options :**

1. Petabyte
2. Exabyte
3. Gigabyte
4. Kilobyte
- 5.

Answer : Petabyte

[Attempt Mock Test Now](#)

All ixamBee Mock Test are FREE @ [www.ixamBee.com](http://www.ixamBee.com)



Prepare **50%** Faster