

- Question No. 1

Select the letter cluster from among the given option that can replace the question mark (?) in the following series.

LUI, OYF, RCC, UGZ, ?

**Options :**

1. YLV
2. STU
3. XKW
4. MNI
- 5.

Answer : XKW

- Question No. 2

Three of the following four options are alike in a certain way based on the Alphabetical series. Which one among the following doesn't belong to the group?

**Options :**

1. KQ
2. YE
3. HN
4. SL
- 5.

Answer : SL

- Question No. 3

Praveen walks 25 m south, then he turns to his left and walks 15 m, then he turns to his right and walks 25 m, again he turns to his right and walks 15 m and stops. How far is he from his starting point and in which direction?

**Options :**

1. 30 m, east
2. 35 m, west
3. 40 m, south
4. 50 m, south
- 5.

Answer : 50 m, south

• Question No. 4

Select the related number from the given alternatives:

17 : ? :: 16 : 4097

**Options :**

1. 4910
2. 4914
3. 4925
4. 4916
- 5.

Answer : 4914

• Question No. 5

Car : Garage :: Bees : ?

**Options :**

1. Apiary
2. Aviary
3. Cellar
4. Armourer
- 5.

Answer : Apiary

• Question No. 6

Six persons H, I, J, K, L and M have different weights in kg. I is heavier than J but lighter than H, who is the second heaviest among all. L is lighter than M, who is not the heaviest. Who among the following is the heaviest?

**Options :**

1. K
2. I
3. J
4. L
- 5.

Answer : K

• Question No. 7

In a certain code language 'SCREW' is written as 'RBQFV' and 'PEACH' is written as 'OFBBG'. How is 'TOKEN' written in that code?

**Options :**

1. SPJFM
2. SJBMF
3. JSMBF
4. FMBJS
- 5.

Answer : SPJFM

• Question No. 8

W is the son of S. V is the son of T. W is married to U. U is T's daughter. How is V related to W?

**Options :**

1. Brother
2. Uncle
3. Father-in-law
4. Brother-in-law
- 5.

Answer : Brother-in-law

• Question No. 9

Find the missing term in the series?

37, 45, 55, 67, 81, \_\_\_

Options :

1. 97
2. 98
3. 93
4. 95
- 5.

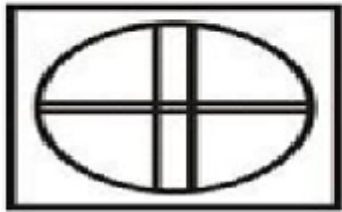
Answer : 97

• Question No. 10

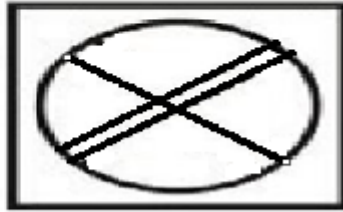
Select the option in which the given figure is embedded.




Prepare **50%** Faster



(1)



(2)



(3)



(4)

Options :

1. 1
2. 2
3. 3
4. 4
- 5.

Answer : 2

• Question No. 11

If 'Shame lame tame pave fame is' is written as 439516; 'Shame tame lame fame life' is 04396 and 'Pave is pure' is 857, which digit represents 'pave'?

Options :

1. 5
2. 8
3. 7
4. Cannot be determined
- 5.

Answer : 5

Direction:

Read the directions carefully and answer the following question.

• Question No. 12

Among five friends W is taller Z but not K. U is taller than K but not O. If they stand in increasing order according to their heights then who stand at the last?

Options :

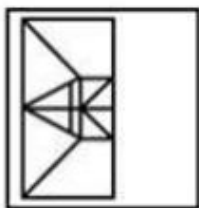
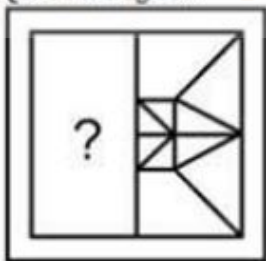
- 1. Z
- 2. O
- 3. W
- 4. K
- 5.

Answer : Z

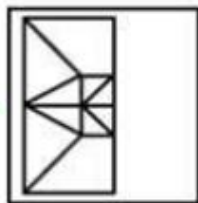
• Question No. 13

Which answer figure will complete the pattern in the question figure?

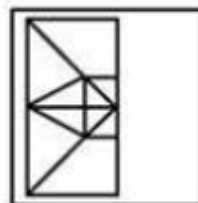
Question Figure:



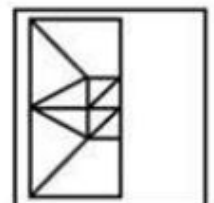
(1)



(2)



(3)



(4)

**Options :**

1. 1
2. 2
3. 3
4. 4
- 5.

Answer : 2

- Question No. 14

Find the odd one out from the following options.

**Options :**

1. 148, 12
2. 229, 15
3. 405, 20
4. 533, 23
- 5.

Answer : 405, 20

- Question No. 15

Arrange the given words in the sequence in which they occur in the dictionary.

- A) Grind
- B) Ground
- C) Grocery
- D) Groove

**Options :**

1. A, C, D, B
2. A, C, B, D
3. C, A, B, D
4. D, A, C, B
- 5.

Answer : A, C, D, B

• Question No. 16

Select the correct mirror image of the given combination where the mirror is placed MN as shown.



1. K E T Y J G H
2. K E T Y J G H
3. K E T Y J G H
4. K E T Y J G H

Options :

- 1.1
- 2.2



3.3

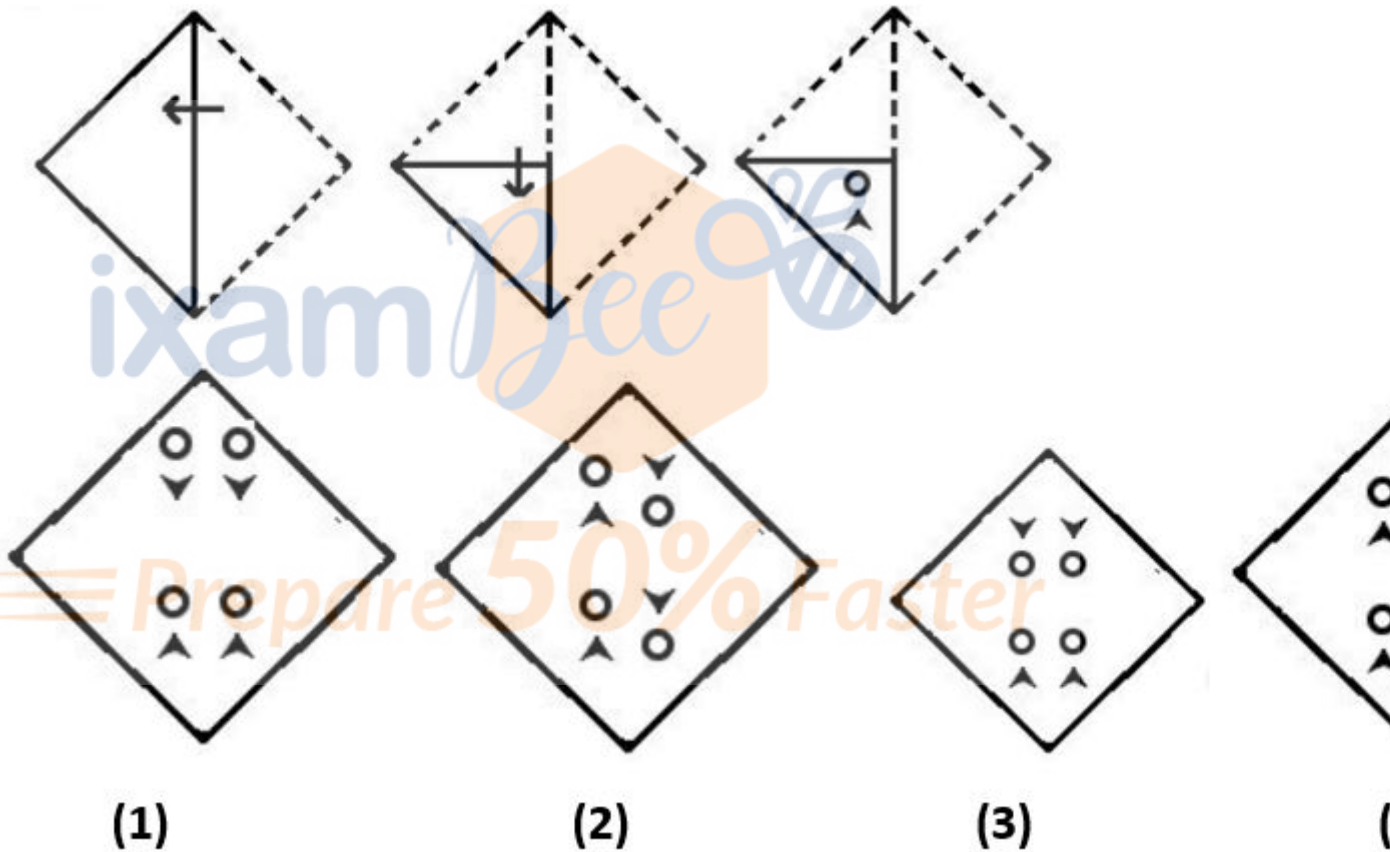
4.4

5.

Answer : 1

• Question No. 17

A paper is folded and cut as shown in the following figures. How would this paper look when unfolded?



Options :

1.1

2.2

3.3

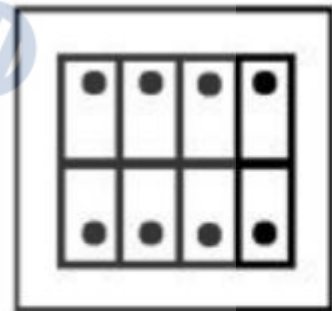
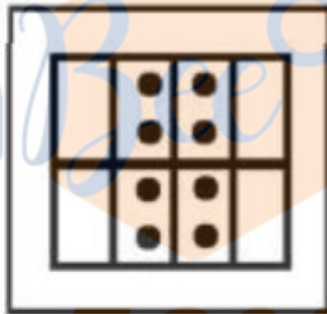
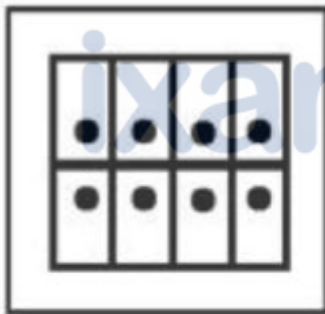
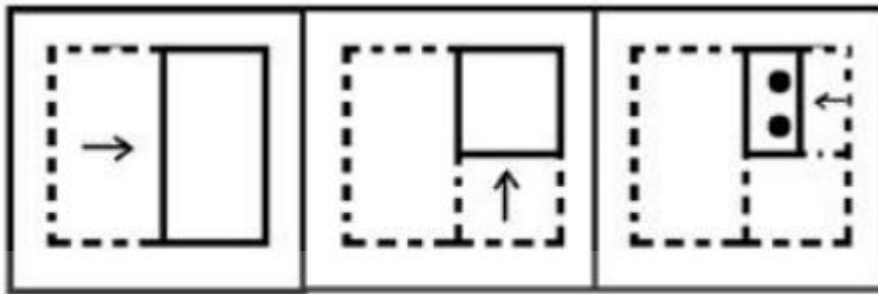
4.4

5.

Answer : 3

• Question No. 18

The sequence of folding a piece of paper and the manner in which the folded paper has cut is shown in the following figures. How would this paper look when unfolded?



(1)

(2)

(3)

Options :

1. 1

2. 2

3. 3

4. 4

5.

Answer : 4

• Question No. 19

If '÷' means '-', '-' means '+', '+' means 'x' and 'x' means '÷', compute the value of the expression:  $126 \times 14 - 7 \div 18 + 5$ .


Options :

1. -75
2. -82
3. 72
4. -74
- 5.

Answer : -74

• Question No. 20

Select the figure from the options that can replace the question mark (?) in the following series.




(1)



(2)



(3)



(4)

Options :

1. 1
2. 2
3. 3
4. 4

5.

Answer : 3

• Question No. 21

A bought an article at 20% less of the marked price and sold it at 25% more than the marked price. Find the profit earned by him.

**Options :**

1. 52.25%

2. 50.25%

3. 56.25%

4. 54.25%

5.

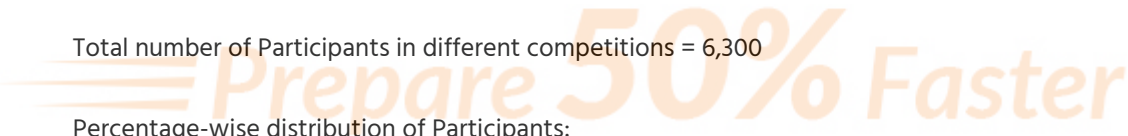
Answer : 56.25%

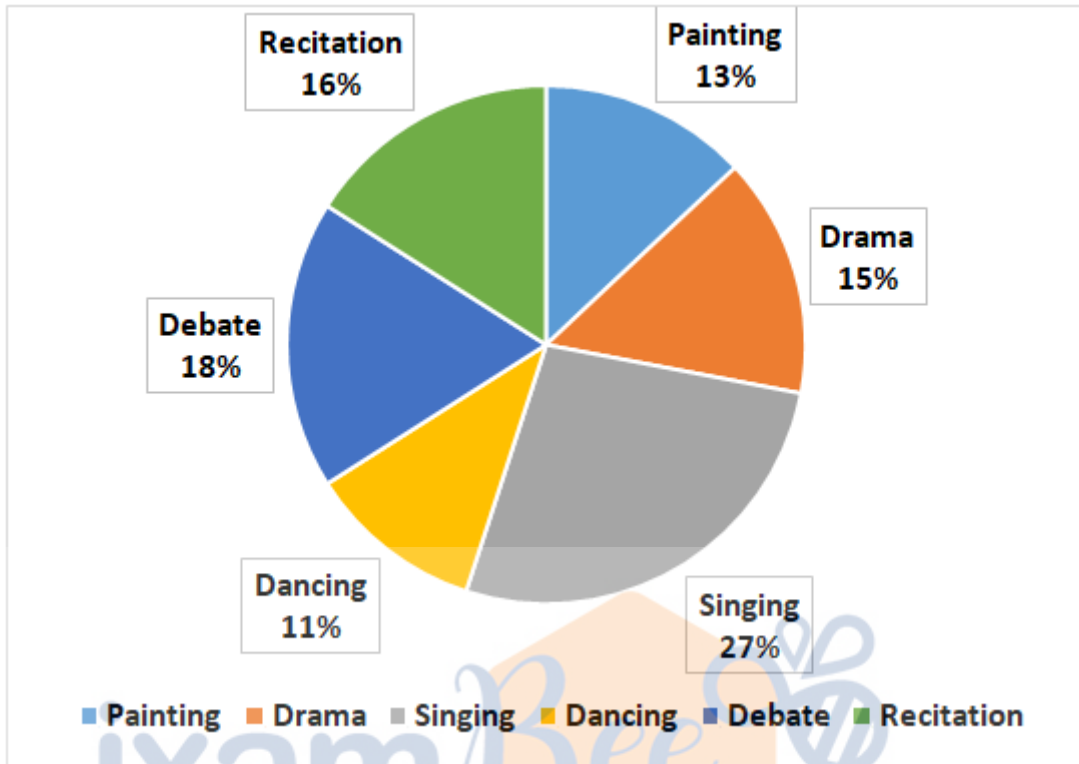
Direction:

**Study the following pie-chart and answer the following questions.**

Total number of Participants in different competitions = 6,300

Percentage-wise distribution of Participants:





- Question No. 22

What is the sum of the central angles corresponding to the participants in Singing and Debate together?

Options :

1. 48 degree
2. 112 degree
3. 162 degree
4. 194 degree
- 5.

Answer : 162 degree

- Question No. 23

A scored 32% marks and failed by 70 marks whereas B scored 64% marks, which was 90 more than the passing marks of the examination. Find the total marks of the examination.

**Options :**

1. 600
2. 450
3. 500
4. 400
- 5.

Answer : 500

• Question No. 24

Anil and Ashish receive Rs.2000 for work of 10 days. If Anil is 4 times efficient than Ashish, then find the daily wage received by Ashish.

**Options :**

1. Rs.50
2. Rs.75
3. Rs.60
4. Rs.40
- 5.

Answer : Rs.40

• Question No. 25

Viraj invested Rs. 3500 at 20% p.a. simple interest for 3 years. After 3 years, he invested the amount received by him at the 20% p.a. compound interest, compounded annually for another 2 years. Find the final amount received by Viraj at the end of 5 years.

**Options :**

1. Rs. 8064
2. Rs. 7488
3. Rs. 8640

4. Rs. 9216

5.

Answer : Rs. 8064

• Question No. 26

The population of a city is decreased by 12% in the first year and then increased by 25% in the second year. Find the population of the city at the end of the second year, if two years ago the population was 20,000.

**Options :**

1. 16640

2. 22000

3. 15300

4. 10736

5.

Answer : 22000

Direction:

What will come in the place of question mark (?) in the following given question:

• Question No. 27

$116\frac{2}{3}\%$  of 18600 +  $666\frac{2}{3}\%$  of 1290 =  $457\frac{1}{7}\%$  of 1750 +  $555\frac{5}{9}\%$  of 3150 + ?

**Options :**

1. 5200

2. 4800

3. 4200

4. 5600

5.

Answer : 4800

• Question No. 28

Suyash have total amount of Rs.2600 out of which, he spent 30% on food, 45% of the rest on travelling. Out of remaining amount he spends Rs.561 on miscellaneous and saves the rest. Find the amount he saved.

**Options :**

1. 730
2. 670
3. 585
4. 440
- 5.

Answer : 440

• Question No. 29

'A' and 'B' started moving towards each other at same time with a speed of 24 km/hr and 12 km/hr, respectively. If the distance covered by 'A' is 15 km more than that by 'B', when they meet then find the initial distance between them.

**Options :**

1. 45 km
2. 40 km
3. 47 km
4. 48 km
- 5.

Answer : 45 km

• Question No. 30

Ratio of runs scored by A, B and C is 3:10:8, respectively. Total number of runs scored by the team is 200, which is four times the runs scored by B. Find the difference between the runs scored by A and C.



**Options :**

1. 20
2. 22
3. 28
4. 25
- 5.

Answer : 25

• Question No. 31

Cost price of a bag is Rs.600. The shopkeeper marked it 60% above the cost price and sold it after giving a discount of 20%. If the shopkeeper had sold it at a profit of 40%, then find the difference between original and new selling price of a bag.

**Options :**

1. Rs.54
2. Rs.25
3. Rs.72
4. Rs.45
- 5.

Answer : Rs.72

• Question No. 32

The ratio of the cost price and marked price of an article is 5:9, respectively. The article is sold after giving a discount of Rs. 900 such that there is a profit of 60%. Find the amount by which the article is marked up above its cost price.

**Options :**

1. Rs 1280
2. Rs 1250

- 3. Rs 1125
- 4. Rs 3600
- 5.

Answer : Rs 3600

• Question No. 33

The volume and height of a cylinder are  $7436 \text{ cm}^3$  and 14 cm. Find the radius of the cylinder.

**Options :**

- 1. 13 cm
- 2. 11 cm
- 3. 9 cm
- 4. 12 cm
- 5.

Answer : 13 cm

• Question No. 34

Two trains of same length are running in parallel tracks in the same direction with speed 26 km/hr and 80 km/hr respectively. The latter completely crosses the former in 20 seconds. Find the length of each train (in m).

**Options :**

- 1. 150 m
- 2. 100 m
- 3. 125 m
- 4. 225 m
- 5.

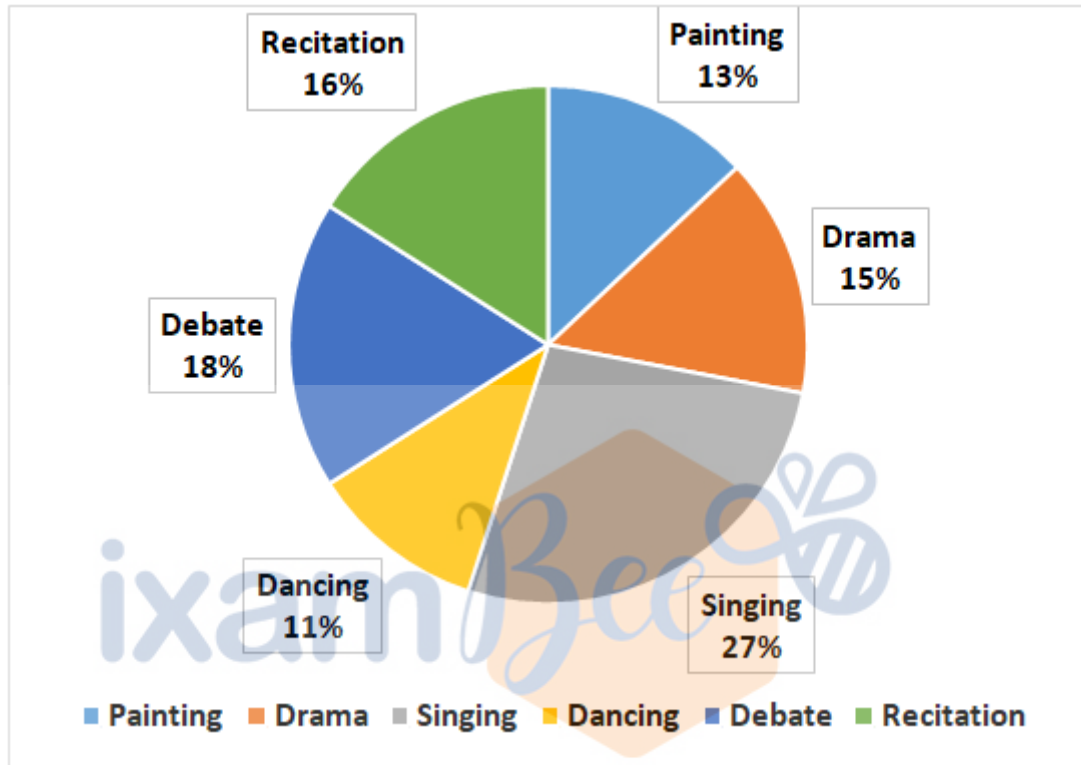
Answer : 150 m

Direction:

**Study the following pie-chart and answer the following questions.**

Total number of Participants in different competitions = 6,300

Percentage-wise distribution of Participants:



• Question No. 35

The number of participants in painting competition is approximately what per cent of the number of participants in recitation?

**Options :**

1. 71%
2. 81%
3. 52%
4. 62%
- 5.

Answer : 81%

- Question No. 36

Ratio of the work done by P, Q and R in one day is 7:3:8 respectively. They all together can complete the work in 42 days. Q and R worked on it for 21 days. In how many days P will complete the remaining work.

**Options :**

1. 56 days
2. 67 days
3. 58 days
4. 75 days
- 5.

Answer : 75 days

- Question No. 37

If  $a + b + c = 12$  and  $ab + bc + ca = 50$ , then find the value of  $a^2 + b^2 + c^2$ .

**Options :**

1. 44
2. 104
3. 194
4. 54
- 5.

Answer : 44

- Question No. 38

The difference between compound interest and simple interest at rate of 24% per annum for 2 years is Rs. 288. Find the simple interest obtained on same amount for a period of 2 years at rate of 10% per annum.

**Options :**

1. Rs. 2000

2. Rs. 3000
3. Rs. 1000
4. Rs. 1500
- 5.

Answer : Rs. 1000

• Question No. 39

The sum of the total surface areas of two cubes is  $1926 \text{ cm}^2$ . If the product of the length of their edges is  $136 \text{ cm}^2$ , then find the difference (in cm) between the lengths of their edges.

Options :

1. 4 cm
2. 6 cm
3. 5 cm
4. 7 cm
- 5.

Answer : 7 cm

• Question No. 40

The value of  $[(4a^3 - a)/(2a + 1)(6a - 3)]$  when  $a = 999$  is

Options :

1. 111
2. 333
3. 222
4. 666
- 5.

Answer : 333

- Question No. 41

Magnus Carlsen is related to which sport?

**Options :**

1. Chess
2. Hockey
3. Cricket
4. Basketball
- 5.

Answer : Chess

- Question No. 42

In Aug 2022 PM Modi inaugurate Homi Bhabha Cancer Hospital in which city?

**Options :**

1. Mumbai
2. Varanasi
3. Pune
4. Mohali
- 5.

Answer : Mohali

- Question No. 43

Xinjiang city of China is famous for?

**Options :**

1. Crude Oil
2. Natural Gas
3. Gold

4. All of the above

5.

Answer : All of the above

- Question No. 44

Mopin Festival is famous in which state?

**Options :**

1. Assam

2. Nagaland

3. Arunachal Pradesh

4. Tripura

5.

Answer : Arunachal Pradesh

- Question No. 45

'The Race of My life' is the autobiography of which Indian athlete?

**Options :**

1. Milkha Singh

2. Abhinav Bindra

3. Avni Lekhra

4. None of the above

5.

Answer : Milkha Singh

- Question No. 46

Which province is not under Ashoka territory?

**Options :**

1. Takshashila
2. Suvarnagiri
3. Ujayini
4. Kamrupa
- 5.

Answer : Kamrupa

• Question No. 47

How were the Indian textile industries affected by the industrial revolution in Britain?

**Options :**

1. Local Industry destroyed
2. Boom in Cotton Industry
3. Equal effect on both
4. None of the above
- 5.

Answer : Local Industry destroyed

• Question No. 48

According to the World Bank's List of Countries Classified by Income level 2020-21, India was in which group?

**Options :**

1. High Income
2. Middle Income
3. Low Income
4. Very Low income
- 5.

Answer : Low Income



- Question No. 49

Which word is not in Preamble?

**Options :**

1. Secular
2. Socialist
3. Sovereign
4. Communist
- 5.

Answer : Communist

- Question No. 50

Which traditional folk dance of Rajasthan was performed by Bhil tribe to worship Goddess Saraswati?

**Options :**

1. Ghoomar
2. Garba
3. Giddha
4. Bihu
- 5.

Answer : Ghoomar

- Question No. 51

Which folk dance performed for balancing a pot on the head?

**Options :**

1. Mohiniattam
2. Bharatnatyam
3. Karagam Dance

4. None of the above

5.

Answer : Karagam Dance

- Question No. 52

The temporary winter home of Eskimo tribe is known as?

**Options :**

1. Igloo

2. Juhu

3. Kiribathi

4. None of the above

5.

Answer : Igloo

- Question No. 53

First session of INC was held in which city?

**Options :**

1. Kolkata

2. Bombay

3. Madras

4. Pune

5.

Answer : Bombay

- Question No. 54

Ilyas khan was related to which Musical instrument?

**Options :**

1. Santoor
2. Guitar
3. Sitar
4. Tabla
- 5.

Answer : Sitar

• Question No. 55

Asian Games of 1982 was held in which city?

**Options :**

1. Sydney
2. Delhi
3. Wellington
4. Canberra
- 5.

Answer : Delhi

• Question No. 56

What is the average temperature of Human body?

**Options :**

1. 98.6 F
2. 37 C
3. 310 K
4. All of the above
- 5.

Answer : All of the above

- Question No. 57

Total Biosphere reserves in India?

**Options :**

1. 18
2. 20
3. 22
4. 25
- 5.

Answer : 18

- Question No. 58

Article 63 is related to?

**Options :**

1. Vice President of India
2. President of India
3. CAG of India
4. Chief Justice of India
- 5.

Answer : Vice President of India

- Question No. 59

Who can establish Inter-state council under article 263?

**Options :**

1. Supreme Court
2. Vice President
3. President

4. High Court

5.

Answer : President

- Question No. 60

Third Battle of Panipat was held in which year?

**Options :**

1. 1526

2. 1556

3. 1761

4. 1757

5.

Answer : 1761

- Question No. 61

Vishakhapatnam has been announced the capital of which State?

**Options :**

1. Telangana

2. Karnataka

3. Kerala

4. Andhra Pradesh

5.

Answer : Andhra Pradesh

- Question No. 62

Women 20 Inception meeting under India's G20 Presidency held in which city?

**Options :**

1. Aurangabad
2. Pune
3. Mumbai
4. None of the above
- 5.

Answer : Aurangabad

• Question No. 63

Who was the winner of IPL 2022?

**Options :**

1. Rajasthan Royals
2. Gujarat Titans
3. Mumbai Indians
4. Delhi Capitals
- 5.

Answer : Gujarat Titans

• Question No. 64

How many times national emergency imposed in India?

**Options :**

1. 1
2. 2
3. 3
4. 4
- 5.

Answer : 3

- Question No. 65

Which is a semi classical Indian dance with martial and folk traditions?

**Options :**

1. Chau Dance
2. Satariya
3. Kathak
4. Nautanki
- 5.

Answer : Chau Dance

- Question No. 66

Select the most appropriate **ANTONYM** of the given word in bold

**Callous**

**Options :**

1. Insensible
2. Hard-hearted
3. compassionate
4. Irregular
- 5.

Answer : compassionate

- Question No. 67

Select the most appropriate **SYNONYM** of the given word in bold

**Clandestine**

**Options :**

1. Open

2. fugitive
3. covert
4. Imaginary
- 5.

Answer : covert

- Question No. 68

Cordial

**Options :**

1. Amiable
2. Furious
3. bellicose
4. Ambiguous
- 5.

Answer : Amiable

- Question No. 69

Comic

**Options :**

1. frivolous
2. humorous
3. non-fiction
4. Serious
- 5.

Answer : humorous

- Question No. 70



Blithe

**Options :**

1. serious
2. Euphoric
3. confused
4. Turmoil
- 5.

Answer : Euphoric

- Question No. 71

Select the most appropriate meaning of the given word

Noble

**Options :**

1. Honest
2. Senior
3. unimpressive
4. Situation
- 5.

Answer : Honest

Direction:

**In the following passage, some words have been deleted. Read the passage carefully and select the most appropriate option to fill in each blank**

Farm incomes \_\_\_\_\_ (1) be doubled or tripled only \_\_\_\_\_ (3) those truly dependent on agriculture and having enough land to \_\_\_\_\_ (2) deploy labor and capital resources. They must be enabled to do so, through improved \_\_\_\_\_ (4) to markets, water, electricity, credit, and other productivity-enhancing inputs. The whole focus should be to lower \_\_\_\_\_ (5) production costs by raising yields.

- Question No. 72

Select the most appropriate option to fill in the blank number 1

**Options :**

1. Shall
2. Could
3. can
4. Would
- 5.

Answer : can

Direction:

**In the following passage, some words have been deleted. Read the passage carefully and select the most appropriate option to fill in each blank**

Farm incomes \_\_\_\_\_ (1) be doubled or tripled only \_\_\_\_\_ (3) those truly dependent on agriculture and having enough land to \_\_\_\_\_ (2) deploy labor and capital resources. They must be enabled to do so, through improved \_\_\_\_\_ (4) to markets, water, electricity, credit, and other productivity-enhancing inputs. The whole focus should be to lower \_\_\_\_\_ (5) production costs by raising yields.

- Question No. 73

Select the most appropriate option to fill in the blank number 2

**Options :**

1. To
2. Off
3. of
4. For
- 5.

Answer : For

Direction:

**In the following passage, some words have been deleted. Read the passage carefully and select the most appropriate option to fill in each blank**

Farm incomes \_\_\_\_\_ (1) be doubled or tripled only \_\_\_\_\_ (3) those truly dependent on agriculture and having enough land to \_\_\_\_\_ (2) deploy labor and capital resources. They must be enabled to do so, through improved \_\_\_\_\_ (4) to markets, water, electricity, credit, and other productivity-enhancing inputs. The whole focus should be to lower \_\_\_\_\_ (5) production costs by raising yields.

• Question No. 74

Select the most appropriate option to fill in the blank number 3

**Options :**

1. Producing
2. Productively
3. productive
4. product
- 5.

Answer : Productively

Direction:

**In the following passage, some words have been deleted. Read the passage carefully and select the most appropriate option to fill in each blank**

Farm incomes \_\_\_\_\_ (1) be doubled or tripled only \_\_\_\_\_ (3) those truly dependent on agriculture and having enough land to \_\_\_\_\_ (2) deploy labor and capital resources. They must be enabled to do so, through improved \_\_\_\_\_ (4) to markets, water, electricity, credit, and other productivity-enhancing inputs. The whole focus should be to lower \_\_\_\_\_ (5) production costs by raising yields.

• Question No. 75

Select the most appropriate option to fill in the blank number 4

**Options :**

1. Excessive
2. Access
3. accept

4. Excess

5.

Answer : Access

Direction:

**In the following passage, some words have been deleted. Read the passage carefully and select the most appropriate option to fill in each blank**

Farm incomes \_\_\_\_\_ (1) be doubled or tripled only \_\_\_\_\_ (3) those truly dependent on agriculture and having enough land to \_\_\_\_\_ (2) deploy labor and capital resources. They must be enabled to do so, through improved \_\_\_\_\_ (4) to markets, water, electricity, credit, and other productivity-enhancing inputs. The whole focus should be to lower \_\_\_\_\_ (5) production costs by raising yields.

- Question No. 76

Select the most appropriate option to fill in the blank number 5

**Options :**

1. There

2. Them

3. their

4. That

5.

Answer : their

- Question No. 77

Select the most appropriate meaning of the given idiom

Once in a blue moon

**Options :**

1. To not feel well

2. Something that will never happen

3. an event that happens infrequently
4. A person who is an introvert
- 5.

Answer : an event that happens infrequently

• Question No. 78

To kill two birds with one stone

**Options :**

1. To solve two problems at once
2. A person who is an avicide
3. to be unsure between two things
4. To be overexcited
- 5.

Answer : To solve two problems at once

• Question No. 79

Select the option that can be meaning of given idioms

To add insult to injury

**Options :**

1. To make the injury worse
2. To make a situation worse
3. to hurt one's ego
4. To make someone jealous
- 5.

Answer : To make a situation worse

• Question No. 80

**Choose the correct word that can replace the given phrase.**

a person who is fanatical about cleanliness and tidiness

**Options :**

1. Obsessive
2. Fastidious
3. Meticulous
4. Sloppy
- 5.

Answer : Fastidious

- Question No. 81

**Choose the correct word that can replace the given phrase.**

a person who is skilled in the use of words and language

**Options :**

1. Linguist
2. Philosopher
3. Orator
4. Grammarian
- 5.

Answer : Linguist

- Question No. 82

Vinay had been reading news paper (A)/ since (B)/ two days. (C)/ No error (D)

**Options :**

1. A
2. B

3. C

4. D

5.

Answer : B

• Question No. 83

I think (A) / the news (B) / might true (C) / No Error (D)

**Options :**

1. A

2. B

3. C

4. D

5.

Answer : C

• Question No. 84

A big change that (A) / I notice in Divya is that she (B) / avoids to speak to me. (C) / No error (D)

**Options :**

1. A

2. B

3. C

4. D

5.

Answer : C

• Question No. 85

There was renewed sense (A) / of supremacy in (B) / completing the project. (C) / No error (D)

**Options :**

1. A
2. B
3. C
4. D
- 5.

Answer : D

- Question No. 86

The Property (a) / divided among (b) / the two brothers. (c) / No error (d)

**Options :**

1. A
2. B
3. C
4. D
- 5.

Answer : B

- Question No. 87

For India, therefore,

P: a priority along with ecological balance

Q: Industrialisation is not a new objective,

R: but has always been

**Options :**

1. RQP
2. RPQ



3. PRQ

4. QRP

5.

Answer : QRP

• Question No. 88

**Choose the correct answer to fill the given blank**

The cat \_\_\_\_\_ on the windowsill for hours.

**Options :**

1. lay

2. laid

3. lies

4. lain

5.

Answer : lies

• Question No. 89

**Choose the correct answer to fill the given blank**

My friends and I \_\_\_\_\_ planning a trip to Europe next summer.

**Options :**

1. is

2. am

3. are

4. be

5.

Answer : are

- Question No. 90

Improve the bold part of the sentence. Choose 'No improvement' as an answer if the sentence is grammatically correct.

The temple is **too highest** for me to reach.

**Options :**

1. too highly
2. more higher
3. No improvement
4. too high
- 5.

Answer : too high

[Attempt Mock Test Now](#)

All ixamBee Mock Test are FREE @ [www.ixamBee.com](http://www.ixamBee.com)

Prepare **50%** Faster