

Direction:

In this question, three statements are given, followed by two conclusions numbered I and II. Assuming the statements to be true, even if they seem to be at variance with commonly known facts, decide which of the conclusion(s) logically follow(s) from the statements.

• Question No. 1

Statements:

All cakes are pastries.

Some pastries are chocolates.

All chocolates are biscuits.

Conclusions:

I. Some biscuits are pastries.

II. All cakes are chocolates.

Options :

1. Only conclusion II follows.
2. Both conclusions I and II follow.
3. Neither conclusion I nor II follows.
4. Only conclusion I follows.
- 5.

Answer : Only conclusion I follows.

• Question No. 2

Select the correct combination of mathematical signs to sequentially replace the * signs and to balance the given equation.

$$17 * 4 * 6 * 2 * 4 = 9$$

Options :

1. $- \times + \div$
2. $\times \div + -$
3. $+ - \div \times$
4. $- + \div \times$
- 5.

Answer : $+ - \div \times$

Direction:

In this question, three statements are given, followed by three conclusions numbered I, II and III. Assuming the statements to be true, even if they seem to be at variance with commonly known facts, decide which of the conclusion(s) logically follow(s) from the statements.

• Question No. 3

Statements:

Some mugs are jars.

All jars are bottles.

All glasses are mugs.

Conclusions:

I. All glasses are jars.

II. Some glasses are bottles.

III. Some mugs are bottles.

Options :

1. Only conclusions I and III follow.
2. Only conclusions II and III follow.
3. Only conclusion III follows.
4. Only conclusion I follows

5.

Answer : Only conclusion III follows.

• Question No. 4

In a code language, 'FINGER' is coded as GJOFDQ and 'KIDNEY' is coded as LJEMDX.

How will 'MUSCLE' be coded in the same language?

Options :

1. NVTBKD
2. MURBKD
3. NVRBLD
4. NUTCKD
- 5.

Answer : NVTBKD

• Question No. 5

Select the option that is related to the fifth letter-cluster in the same way as the second letter-cluster is related to the first letter-cluster and the fourth letter-cluster is related to the third letter-cluster.

GARLIC : IZTNHE :: ONIONS : NPHNPU :: CARROT : ?

Options :

1. EZTTNV
2. EATTNV
3. BBQQPU
4. EZTTPV
- 5.

Answer : EZTTNV

• Question No. 6

Select the set in which the numbers are related in the same way as are the numbers of the following sets.

(NOTE : Operations should be performed on the whole numbers, without breaking down the numbers into its constituent digits. E.g. 13 – Operations on 13 such as adding/deleting/multiplying etc. to 13 can be performed. Breaking down 13 into 1 and 3 and then performing mathematical operations on 1 and 3 is not allowed.)

(31, 4, 47)

(17, 8, 81)

Options :

1. (19, 11, 41)

2. (2, 12, 16)

3. (23, 7, 30)

4. (19, 5, 44)

5.

Answer : (19, 5, 44)

• Question No. 7

In a code language, 'ROSE' is coded as 228 and 'TULIP' is coded as 390. How will 'DAHLIA' be coded in the same language?

Options :

1. 140

2. 105

3. 320

4. 210

5.

Answer : 210

• Question No. 8

Which of the following letter-clusters will replace the question mark (?) in the given series?

GEA, IFB, LHA, QKB, XOA, ?

Options :

1. ISB
2. HUB
3. HTB
4. ITB
- 5.

Answer : ITB

• Question No. 9

Select the option that is related to the fifth letter-cluster in the same way as the second letter-cluster is related to the first letter-cluster and the fourth letter-cluster is related to the third letter-cluster.

MOBILE : CPNFMJ :: PHONES : PIQTFO :: CHARGE : ?

Options :

1. BIFDHS
2. BIDFSH
3. BIDFHS
4. BIEFHS
- 5.

Answer : BIDFHS

• Question No. 10

In a code language, 'COUCH' is coded as FLXZK and 'TABLE' is coded as WXEIH. How will 'CHAIR' be coded in the same language?

Options :

1. FEDEU
2. FEDFU
3. EFDEU
4. EFDV
- 5.

Answer : FEDFU

• Question No. 11

Which of the following letter-clusters will replace the question mark (?) in the given series?

JV, MU, OT, RS, TR, ?

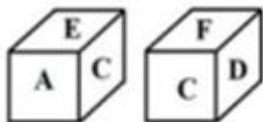
Options :

1. WQ
2. XQ
3. YQ
4. WR
- 5.

Answer : WQ

• Question No. 12

Two dimensions of the same dice are given. What letter will be on the face opposite to the face having the letter E?



Options :

1. C
2. D

3. F

4. A

5.

Answer : D

• Question No. 13

In a certain code language, 'TEA' is coded as 78, and 'SHAKE' is coded as 220. How will 'COFFEE' be coded in that language?

Options :

1. 200

2. 340

3. 160

4. 240

5.

Answer : 240

• Question No. 14

In a code language, 'CAKE' is coded as 64, and 'WAFER' is coded as 125. How will 'BISCUIT' be coded in the same language?

Options :

1. 343

2. 210

3. 392

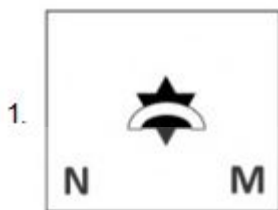
4. 255

5.

Answer : 343

- Question No. 15

Select the figure from among the given options that can replace the question mark (?) in the following series.



Options :

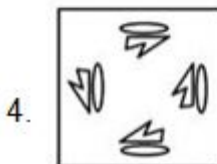
- 1.1
- 2.2
- 3.3
- 4.4

5.

Answer : 3

• Question No. 16

The following figures show the sequence of folding a piece of paper. The last figure shows the manner in which the folded paper has been cut. Choose a figure which would most closely resemble the unfolded form of the paper.



Options :

1.1

2.2

3.3

4.4


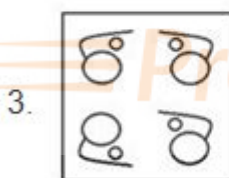
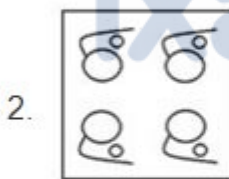
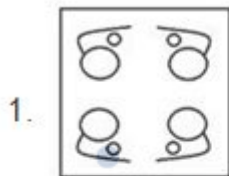
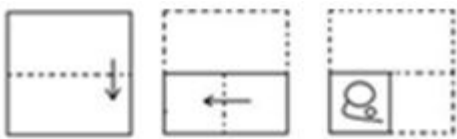
5.

Answer : 3

• Question No. 17

The sequence of folding a piece of paper and the manner in which the folded paper has been cut is shown below.

Choose a figure which would most closely resemble the unfolded form of the paper.



Options :

1.1

2.2

3.3

4.4

5.

Answer : 1

Direction:

'P @ Q' means 'P is the husband of Q'

'P & Q' means 'P is the wife of Q'


'P % Q' means 'P is the mother of Q'

'P # Q' means 'P is the father of Q'

- Question No. 18

If 'R @ S %T & U # V', then how is R related to U?

Options :

1. Father's father
2. Father
3. Father-in-law
4. Brother
5. 

Answer : Father-in-law

- Question No. 19

Select the correct option that indicates the arrangement of the following words in a logical and meaningful order.

1. Lung
2. Kidney
3. Tongue
4. Eyes

5. Nose

Options :

1. 2, 5, 4, 3, 1
2. 2, 3, 5, 1, 4
3. 2, 1, 3, 5, 4
4. 3, 1, 2, 4, 5
- 5.

Answer : 2, 1, 3, 5, 4

• Question No. 20

Select the option that represents the correct order of the given words as they would appear in an English dictionary.

1. Imperceptible
2. Imperialism
3. Impersonal
4. Imperative
5. Imperfect

Options :

1. 3, 5, 1, 4, 2
2. 4, 1, 5, 2, 3
3. 2, 4, 5, 1, 3
4. 1, 2, 3, 4, 5
- 5.

Answer : 4, 1, 5, 2, 3

• Question No. 21

Select the option that is related to the fifth term in the same way as the second term is related to the first term and the fourth term is related to the third term.

HOUSE : GRPUF :: LOTUS : KROWT :: LEMON : ?

Options :

1. LIHQO
2. LHHQO
3. KIHQO
4. KHHQO
- 5.

Answer : KHHQO

• Question No. 22

Select the option that is related to the fifth term in the same way as the second term is related to the first term and the fourth term is related to the third term.

BELL : IOBE :: STOP : MRQV :: ARCS : ?

Options :

1. PFOD
2. PFNC
3. QGOD
4. QGNC
- 5.

Answer : PFOD

• Question No. 23

I is the father of L. L and K are the children of M. L is the husband of N. O is the husband of K. P is the son of O. How is I related to P?

Options :

1. Father
2. Brother
3. Father's father
4. Mother's father
- 5.

Answer : Mother's father

• Question No. 24

In a certain code language, 'FINAL' is written as 'GHPNY' and 'VISIT' is written as 'GXUVG'. How will 'GROUP' be written in that language?

Options :

1. IEMWS
2. PISMR
3. PIRMS
4. PIQRS
- 5.

Answer : PIQRS

• Question No. 25

Which of the following numbers will replace the question mark (?) in the given series?

213, 199, 235, 221, 257, 243, ?

Options :

1. 271
2. 265
3. 281
4. 279

5.

Answer : 279

• Question No. 26

The name of which chemical element of group 1 was discovered in 1817 from the Greek word meaning stone?

Options :

1. Sodium
2. Potassium
3. Hydrogen
4. Lithium
- 5.

Answer : Lithium

• Question No. 27

Cooperative sector industries are operated by producers and suppliers of raw material. Which of the following is an example of a cooperative sector industry?

Options :

1. BHEL
2. TISCO
3. Sugar industry
4. Oil India Ltd.
- 5.

Answer : Sugar industry

• Question No. 28

Who among the following leaders was known as 'Deshbandhu'?

Options :

1. Balashastri Jambhekar
2. Gopalhari Deshmukh
3. Chittaranjan Das
4. Bal Gangadhar Tilak
- 5.

Answer : Chittaranjan Das

• Question No. 29

How many members are there in the Committee on Public Undertakings in India?

Options :

1. 22
2. 15
3. 35
4. 30
- 5.

Answer : 22

• Question No. 30

Under which Amendment to the Constitution Act was the reservation for OBCs in educational institutions made?

Options :

1. 95th Amendment
2. 94th Amendment
3. 93rd Amendment
4. 96th Amendment
- 5.

Answer : 93rd Amendment

- Question No. 31

The tomb of Sher Shah Suri is located at which of the following places?

Options :

1. Patna
2. Shergarh
3. Hyderabad
4. Sasaram
- 5.

Answer : Sasaram

- Question No. 32

_____ union territory has the highest literacy rate as per 2011 census.

Options :

1. Pondicherry
2. Chandigarh
3. Andaman and Nicobar Islands
4. Lakshadweep
- 5.

Answer : Lakshadweep

- Question No. 33

Which of the following is a micronutrient, and plays a role in cell division, cell growth, wound healing and the breakdown of carbohydrates?

Options :

1. Fe
2. Zn

3. Cu

4. Ca

5.

Answer : Zn

• Question No. 34

By whom among the following personalities who lived in the White House is 'Living History' a famous book written?

Options :

1. Ivanka Trump

2. Hillary Rodham Clinton

3. Laura Bush

4. Melania Trump

5.

Answer : Hillary Rodham Clinton

• Question No. 35

Tsunami is NOT caused by:

Options :

1. Hurricanes

2. volcanic eruptions

3. undersea landslides

4. Earthquakes

5.

Answer : Hurricanes

• Question No. 36

Macaulay's Minute on Education was passed in:

Options :

1. 1837
2. 1834
3. 1835
4. 1832
- 5.

Answer : 1835

• Question No. 37

Who among the following appoints the Governor of State?

Options :

1. The Vice President
2. The Prime Minister
3. The Attorney General
4. The President
- 5.

Answer : The President

• Question No. 38

Manika Batra won the 82nd Senior National Table Tennis Championship (Female Category) held at Panchkula in _____ 2021.

Options :

1. September
2. June
3. February
4. April
- 5.

Answer : February

• Question No. 39

Which Union Territory's appropriation Bill passed in Lok Sabha in 2021 allowed the Central Government to authorise payment and appropriation of certain further sums from and out of the Consolidated Fund of the said Union Territory for the services of the financial year 2020-21?

Options :

1. Lakshadweep
2. Chandigarh
3. Delhi
4. Puducherry
- 5.

Answer : Puducherry

• Question No. 40

Rana Pratap Singh fought against the Mughals at _____ in 1576.

Options :

1. Haldighati
2. Chittor
3. Ranakpur
4. Kumbhalgarh
- 5.

Answer : Haldighati

• Question No. 41

Which state showed the lowest levels of poverty, according to the Multidimensional Poverty Index 2021?

Options :

1. Mizoram
2. Goa
3. Punjab
4. Kerala
- 5.

Answer : Kerala

• Question No. 42

Who among the following was defeated by Prithviraj Chauhan in the first battle of Tarain?

Options :

1. Muhammad Ghori
2. Mahmud Ghazni
3. Iltutmish
4. Qutbuddin Aibak
- 5.

Answer : Muhammad Ghori

• Question No. 43

Who among the following released a signature tune for 'Vande Bharatam' in March 2022?

Options :

1. Smriti Zubin Irani
2. Pratima Bhowmik
3. Meenakshi Lekhi
4. Anupriya Patel
- 5.

Answer : Meenakshi Lekhi

- Question No. 44

In April 2021, _____ was selected for the award instituted by the Pookkad Kalalayam in Kozhikode, in memory of noted musician Malabar Sukumaran Bhagavathar in recognition of her comprehensive contribution to classical dance.

Options :

1. Srirangam Gopalaratnam
2. Bhanupriya
3. Sreelakshmy Govardhanan
4. P Ramadevi
- 5.

Answer : P Ramadevi

- Question No. 45

Mozzarella, cheddar and camembert are varieties of:

Options :

1. yoghurt
2. vinegar
3. bread
4. cheese
- 5.

Answer : cheese

- Question No. 46

The language of the Aryan texts was:

Options :

1. Ardh-Magadha Prakrit

2. Prakrit
3. Persian
4. Sanskrit
- 5.

Answer : Sanskrit

- Question No. 47

Which river was known as the 'Sorrow of Bengal'?

Options :

1. Ganga
2. Damodar
3. Yamuna
4. Kosi
- 5.

Answer : Damodar

- Question No. 48

Who among the following personalities is an exponent of the Manipuri dance form?

Options :

1. Kumudini Lakhia
2. Rajkumar Singhajit Singh
3. MK Saroja
4. Makar Dhawaja Darogha
- 5.

Answer : Rajkumar Singhajit Singh

- Question No. 49

On 8 February 2009, for the 51st Grammy Awards, _____ won in the category Contemporary World Music Album for his collaborative album Global Drum Project along with Mickey Hart, Sikiru Adepaju and Giovanni Hidalgo.

Options :

1. Zakir Hussain
2. Anindo Chatterjee
3. Kumar Bose
4. Swapan Chaudhuri
- 5.

Answer : Zakir Hussain

- Question No. 50

The first Republic Day parade was held in which of the following years?

Options :

1. 1952
2. 1951
3. 1949
4. 1950
- 5.

Answer : 1950

- Question No. 51

Simplify the following:

$$\frac{8.79 \times 8.79 \times 8.79 - 6.79 \times 6.79 \times 6.79}{8.79 \times 8.79 + 8.79 \times 6.79 + 6.79 \times 6.79}$$

Options :

1. 14
2. 8
3. 6
4. 2
- 5.

Answer : 2

• Question No. 52

Two pipes X and Y can fill a tank in 12 minutes and 18 minutes, respectively. If both the pipes are opened simultaneously, how long will it take to fill the tank?

Options :

1. 15 minutes
2. $5/36$ minutes
3. 14 minutes
4. $7(1/5)$ minutes
- 5.

Answer : $7(1/5)$ minutes

• Question No. 53

A car travels at a speed of 40 km/h for 15 minutes and at a speed of 72 km/h for the next 5 minutes. The average speed of the car for the whole journey is:

Options :

1. 43 km/h
2. 41 km/h
3. 45 km/h
4. 48 km/h
- 5.

Answer : 48 km/h

• Question No. 54

A sum of ₹2,400 is divided among A, B and C such that A receives 25% less than B and B receives 20% less than C. The ratio between A's amount and B's amount is:

Options :

1. 3 : 4
2. 5 : 4
3. 4 : 5
4. 3 : 5
- 5.

Answer : 3 : 4

• Question No. 55

A car is sold on for successive discounts of 10%, 12%, 15% and 20%. If the selling price of the car is ₹1,68,300, then what is the marked price of the car?

Options :

1. ₹4,25,600
2. ₹4,12,800
3. ₹3,12,500
4. ₹5,11,600
- 5.

Answer : ₹3,12,500

• Question No. 56

X can complete a work in 5 days and Y in 10 days. If they work on it together for 2 days, then the fraction of the work that is left is:

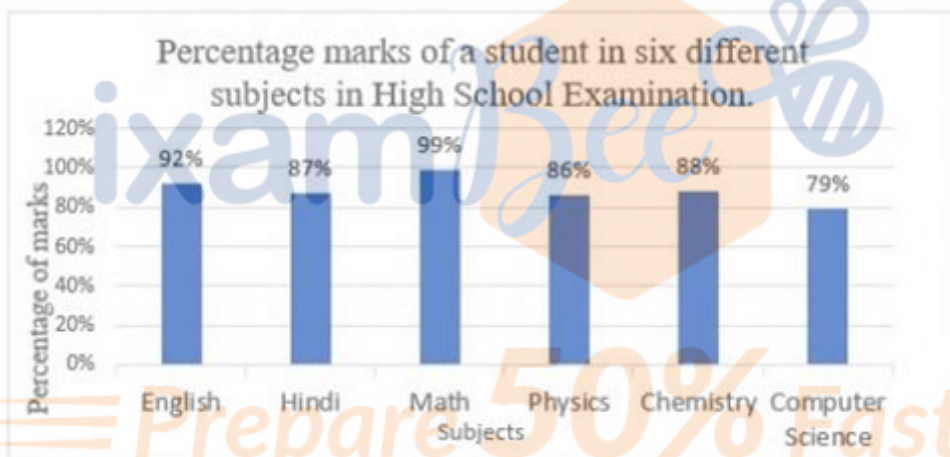
Options :

1. 1/5
2. 2/3
3. 2/5
4. 1/2
- 5.

Answer : 2/5

Direction:

The following bar graph displays the information about the percentage marks of a student in six different subjects in the High School Examination. The maximum marks of all the subject are equal. Study the bar graph carefully and answer the question that follows.



- Question No. 57

What is the percentage score of all the six subjects combined?

Options :

1. 90.6 Percent
2. 84.8 Percent
3. 86.9 Percent
4. 88.5 Percent
- 5.

Answer : 88.5 Percent

- Question No. 58

A chord of a circle of radius 21 cm makes a right angle at the centre. Find the area of major segment (take $\pi = 22/7$) closest to nearest integer.

Options :

1. 1360 cm²
2. 1436 cm²
3. 1260 cm²
4. 1160 cm²
- 5.

Answer : 1260 cm²

- Question No. 59

A girl, 4 feet tall can cast a shadow on the ground that is 5 feet long. How tall is a boy who can cast a shadow that is 10 feet long?

Options :

1. 7 feet
2. 5 feet
3. 6 feet
4. 8 feet
- 5.

Answer : 8 feet

Direction:

The following table shows the number of students in different streams in 5 departments.

Study the table carefully answer the question based on the table.

Stream	Department				
	A	B	C	D	E
Physics	400	500	350	300	600
Chemistry	750	600	700	500	450
Mathematics	350	400	450	500	650
Computer Science	250	300	380	550	750

- Question No. 60

Find the ratio of students in departments A and B in Physics, Chemistry and Mathematics streams.

Options :

1. 1:3
2. 3:1
3. 1:1
4. 2:1
- 5.

Answer : 1:1

- Question No. 61

A seller sells oranges at the rate of 10 for Rs.28, gaining thereby 40%. For how much did he buy a dozen oranges?

Options :

1. Rs.20
2. Rs.28
3. Rs.24
4. Rs.48
- 5.

Answer : Rs.24

- Question No. 62

The value of $\sin 135^\circ + \cos 270^\circ$ is:

Options :

1. $1/\sqrt{3}$
2. $1\sqrt{2}$
3. $-1\sqrt{2}$
4. $-1/\sqrt{3}$
- 5.

Answer : $1\sqrt{2}$

- Question No. 63

The length of the tangent to a circle from a point P, is 17 cm. Point P is 20 cm away from the centre. What is the radius of the circle?

Options :

1. $\sqrt{111}$ cm
2. $\sqrt{126}$ cm
3. $\sqrt{121}$ cm
4. $\sqrt{131}$ cm
- 5.

Answer : $\sqrt{111}$ cm

Direction:

A table showing the percentages of the total population of a state by age groups for the year 2019 is given.

Age group in years	Up to 16	17-24	25-32	33-40	41-48	49-56	57 and above
Percentage	28.00	16.35	17.20	14.45	15.21	7.15	1.64

- Question No. 64

Out of every 3,800 persons what is the number of persons below 25 years? (Correct to closest integer value)

Options :

1. 1,264 approx.
2. 1,432 approx.
3. 1,685 approx.
4. 1,543 approx.
- 5.

Answer : 1,685 approx.

• Question No. 65

Raj's monthly income was Rs.12,000 and his monthly expenditure was Rs.8,500. Next year his income increased by 10% and his expenditure increased by 10%. What was the percentage increase or decrease in his savings?

Options :

1. 20% decrease
2. 10% decrease
3. 10% increase
4. 20% increase
- 5.

Answer : 10% increase

• Question No. 66

The average age of the father and his five children is 10 years which is decreased by 6 years if the age of the father is excluded. The age of the father is:

Options :

1. 40 years
2. 45 years
3. 37 years
4. 25 years

5.

Answer : 40 years

• Question No. 67

A retailer marks up the price of his goods by 30%. He sells 50% of his goods at a discount of 8% and the remaining at a discount of 6%. Find his profit percentage.

Options :

1. 13.2%
2. 19.4%
3. 20.9%
4. 17.6%
- 5.

Answer : 20.9%

• Question No. 68

A thief steals a scooter at 1:40 p.m. and drives it at 54 km/h. The theft is discovered at 2:10 p.m. and the owner sets off to chase the thief on another scooter at 72 km/h. At what time will he catch the thief?

Options :

1. 3:40 p.m.
2. 4:10 p.m.
3. 4:50 p.m.
4. 3:20 p.m.
- 5.

Answer : 3:40 p.m.

• Question No. 69

If $\frac{x-1}{x} = 5$, then the value of $1 + \frac{1}{x^2}$ is:

Options :

1. 16
2. 18
3. 17
4. 27
- 5.

Answer : 17

- Question No. 70

If a man deposits Rs.12,100 in a bank at a simple interest of 15% per annum, then how much money will he receive from the bank after 3 years?

Options :

1. Rs.17,545
2. Rs.16,520
3. Rs.15,115
4. Rs.17,200
- 5.

Answer : Rs.17,545

- Question No. 71

A student obtained 72 marks in Biology, 84 marks in Hindi, 91 marks in Mathematics, 80 marks in Science and 73 marks in English (out of 100). Find his average marks.

Options :

1. 65
2. 70

3. 60

4. 80

5.

Answer : 80

• Question No. 72

Find the fourth proportional to $m + 3$, $m + 7$ and $15m$ if $m = 3$.

Options :

1. 58

2. 50

3. 75

4. 62

5.

Answer : 75

• Question No. 73

A cuboid of length 18m, breadth 12m, and height 8m is melted and recast into a cube.

Find the length of diagonal of the cube.

Options :

1. $8\sqrt{3}$ m

2. $9\sqrt{3}$ m

3. $18\sqrt{3}$ m

4. $12\sqrt{3}$ m

5.

Answer : $12\sqrt{3}$ m

• Question No. 74

If the product $6352 \times 7A1$ is divisible by 12, then the value of A is:

Options :

1. 6
2. 3
3. 5
4. 4
- 5.

Answer : 4

- Question No. 75

What is the value of $0.\overline{34}$ expressed as a fraction?

Options :

1. $\frac{34}{90}$
2. $\frac{3444}{90}$
3. $\frac{31}{100}$
4. $\frac{31}{90}$
- 5.

Answer : $\frac{31}{90}$

- Question No. 76

Select the option that expresses the given sentence in indirect speech.

Raman said, "Let us enjoy some snacks."

Options :

1. Raman said that they will enjoy some snacks.
2. Raman proposed that they should enjoy some snacks.
3. Raman suggested that let they be enjoyed some snacks.

4. Raman said that let us enjoy some snacks.

5.

Answer : Raman proposed that they should enjoy some snacks.

• Question No. 77

Select the INCORRECTLY spelt word.

Options :

1. Capacity

2. Library

3. Advocate

4. Imagination

5.

Answer : Capacity

Direction:

Sentences of a paragraph are given below in jumbled order. Arrange the sentences in the correct order to form a meaningful and coherent paragraph.

• Question No. 78

A. He had a tiny room in a basement, the one window of which looked out on to the street.

B. There was hardly a pair of boots in the neighbourhood that had not been once or twice through his hands.

C. In a certain town there lived a cobbler, Martin Avdeitch by name.

D. Through it one could see the feet of those who passed by, but Martin recognised the people by their boots.

Options :

1. CADB

2. CBDA

3. CDBA

4. CABD



Prepare 50% Faster

5.

Answer : CADB

• Question No. 79

Select the option that expresses the given sentence in indirect speech.

Sunny's parents said to her, "Do not take anything from strangers."

Options :

1. Sunny's parents asked her do not take anything from strangers.
2. Sunny's parents said to her that do not take anything from strangers.
3. Sunny's parents advised her not to take anything from strangers.
4. Sunny's parents told to her not to take anything from strangers.
- 5.

Answer : Sunny's parents advised her not to take anything from strangers.

• Question No. 80

Select the most appropriate option that can substitute the **bold** segment in the given sentence.

I asked two people the way to Diana's house **but no one of them knew it**.

Options :

1. whether either of them knew it
2. if none of them knew it
3. that no one of them knew it
4. but neither of them knew it
- 5.

Answer : but neither of them knew it

• Question No. 81

Select the most appropriate ANTONYM of the given word.

Frail

Options :

1. Brittle
2. Stout
3. Horrible
4. Precarious
- 5.

Answer : Stout

- Question No. 82

Select the most appropriate meaning of the **bold** word in a sentence.

He appealed to the laws of the land to **vindicate** from his assailants.

Options :

1. prove
2. exonerate
3. banish
4. assess
- 5.

Answer : exonerate

- Question No. 83

Select the most appropriate option that can substitute the **bold** segment in the given sentence. If there is no need to substitute it, select 'No substitution required'.

I'll try to phone you **in the meeting**.

Options :

1. at the meeting
2. during the meeting
3. in meeting
4. No substitution required
- 5.

Answer : during the meeting

• Question No. 84

Select the option that expresses the given sentence in direct speech.

She said that she had already eaten her dinner.

Options :

1. She said, "I am already eating my dinner."
2. She said, "I had my dinner."
3. She said, "I have already eaten my dinner."
4. She said, "I had already ate my dinner."
- 5.

Answer : She said, "I have already eaten my dinner."

• Question No. 85

Select the most appropriate option to substitute the **bold** segment in the given sentence.

The magazine teaches parents **how to behaves towards** children.

Options :

1. how should behave towards their
2. how will behave towards
3. how to behaving their
4. how to behave towards
- 5.

Answer : how to behave towards

• Question No. 86

Select the option that expresses the given sentence in passive voice.

What makes you nervous before exams?

Options :

1. Why exams are making you nervous?
2. Why do exams make you nervous?
3. By what are you made nervous before exams?
4. How is nervousness caused before exams?
- 5.

Answer : By what are you made nervous before exams?

• Question No. 87

Select the most appropriate meaning of the **bold** idiom.

His grandfather always **laughs like a drain**.

Options :

1. Laugh bitterly
2. Laugh fearfully
3. Laugh silently
4. Laugh loudly
- 5.

Answer : Laugh loudly

• Question No. 88

Select the most appropriate meaning of the **bold** idiom in the given sentence.

In his speech on dowry, he **set forth** his views at length.

Options :

1. ran
2. started
3. explained
4. hid
- 5.

Answer : explained

- Question No. 89

Select the option that can be used as a one-word substitute for the given group of words.

One who is extravagantly romantic, chivalrous and impractical.

Options :

1. Blonde
2. Quixotic
3. Teetotaler
4. Virago
- 5.

Answer : Quixotic

- Question No. 90

Select the correct superlative degree of comparison for the given sentence.

This is one of the beautiful places in the area.

Options :

1. This is one of the most beautiful places in the area.
2. This is one of the more beautiful places in the area.

3. This is one of the beautiful places in the area.
4. This is a beautiful place in the area.
- 5.

Answer : This is one of the most beautiful places in the area.

Direction:

In the following passage, some words have been deleted. Read the passage carefully and select the most appropriate option to fill in each blank.

Thousands of persons must (91) _____ the same thing to her since, but I happened to be the first in the line. Anyone likes to hear flattering sentiments, and more than others, I suppose, dancers. They like (92) _____ every hour of the day how well they keep their steps. I praised her art whenever I could (93) _____ alone with her and whisper in her ear, out of range of that husband of hers. Oh, what a man! I have not met a more grotesque creature in my life. Instead of calling herself Rosie, she could more logically (94) _____ him Marco Polo. He dressed like a man about to undertake an expedition— with his thick coloured glasses, thick jacket and a thick helmet over which was perpetually stretched a green, shiny waterproof cover, giving him the appearance of a space traveller. I have, of course, no idea of the original Marco Polo's appearance, but I wanted to call this man Marco (95) _____, and I have not bothered to associate him with any other name since.

- Question No. 91

Select the most appropriate option to fill in blank number 91.

Options :

1. have said
2. says
3. saying
4. said
- 5.

Answer : have said

Direction:

In the following passage, some words have been deleted. Read the passage carefully and select the most appropriate option to fill in each blank.

Thousands of persons must (91) _____ the same thing to her since, but I happened to be the first in the line. Anyone likes to hear flattering sentiments, and more than others, I suppose, dancers. They like (92) _____ every hour of the day how well they keep their steps. I praised her art whenever I could (93) _____ alone with her and whisper in her ear, out of range of that husband of hers. Oh, what a man! I have not met a more grotesque creature in my life. Instead of calling herself Rosie, she could more logically (94) _____ him Marco Polo. He dressed like a man about to undertake an expedition— with his thick coloured glasses, thick jacket and a thick helmet over which was perpetually stretched a green, shiny waterproof cover, giving him the appearance of a space traveller. I have, of course, no idea of the original Marco Polo's appearance, but I wanted to call this man Marco (95) _____, and I have not bothered to associate him with any other name since.

- Question No. 92

Select the most appropriate option to fill in blank number 92.

Options :

1. told
2. tell
3. to be told
4. to have told
5. _____

Answer : to be told

Direction:

In the following passage, some words have been deleted. Read the passage carefully and select the most appropriate option to fill in each blank.

Thousands of persons must (91) _____ the same thing to her since, but I happened to be the first in the line. Anyone likes to hear flattering sentiments, and more than others, I suppose, dancers. They like (92) _____ every hour of the day how well they keep their steps. I praised her art whenever I could (93) _____ alone with her and whisper in her ear, out of range of that husband of hers. Oh, what a man! I have not met a more grotesque creature in my life. Instead of calling herself Rosie, she could more logically (94) _____ him Marco Polo. He dressed like a man about to undertake an expedition— with his thick coloured glasses, thick jacket and a thick helmet over which was perpetually stretched a green, shiny waterproof cover, giving him the appearance of a space traveller. I have, of course, no idea of the original Marco Polo's appearance, but I wanted to

call this man Marco (95) _____, and I have not bothered to associate him with any other name since.

• Question No. 93

Select the most appropriate option to fill in blank number 93.

Options :

1. snatches a moment
2. snatched a moment
3. snatch a moment
4. have snatched a moment
- 5.

Answer : snatch a moment

Direction:

In the following passage, some words have been deleted. Read the passage carefully and select the most appropriate option to fill in each blank.

Thousands of persons must (91) _____ the same thing to her since, but I happened to be the first in the line. Anyone likes to hear flattering sentiments, and more than others, I suppose, dancers. They like (92) _____ every hour of the day how well they keep their steps. I praised her art whenever I could (93) _____ alone with her and whisper in her ear, out of range of that husband of hers. Oh, what a man! I have not met a more grotesque creature in my life. Instead of calling herself Rosie, she could more logically (94) _____ him Marco Polo. He dressed like a man about to undertake an expedition— with his thick coloured glasses, thick jacket and a thick helmet over which was perpetually stretched a green, shiny waterproof cover, giving him the appearance of a space traveller. I have, of course, no idea of the original Marco Polo's appearance, but I wanted to call this man Marco (95) _____, and I have not bothered to associate him with any other name since.

• Question No. 94

Select the most appropriate option to fill in blank number 94.

Options :

1. called

2. had called
3. have called
4. been called
- 5.

Answer : have called

Direction:

In the following passage, some words have been deleted. Read the passage carefully and select the most appropriate option to fill in each blank.

Thousands of persons must (91) _____ the same thing to her since, but I happened to be the first in the line. Anyone likes to hear flattering sentiments, and more than others, I suppose, dancers. They like (92) _____ every hour of the day how well they keep their steps. I praised her art whenever I could (93) _____ alone with her and whisper in her ear, out of range of that husband of hers. Oh, what a man! I have not met a more grotesque creature in my life. Instead of calling herself Rosie, she could more logically (94) _____ him Marco Polo. He dressed like a man about to undertake an expedition— with his thick coloured glasses, thick jacket and a thick helmet over which was perpetually stretched a green, shiny waterproof cover, giving him the appearance of a space traveller. I have, of course, no idea of the original Marco Polo's appearance, but I wanted to call this man Marco (95) _____, and I have not bothered to associate him with any other name since.

- Question No. 95

Select the most appropriate option to fill in blank number 95.

Options :

1. at first sight
2. over first sight
3. on first sight
4. in first sight
- 5.

Answer : at first sight

Direction:

Read the given passage and answer the questions that follow.

Rao kept his important papers stacked in an almirah, which he kept locked, and the key hidden under a lining paper in another cupboard where he kept his clothes and a few odds and ends, and the key of this second cupboard also was hidden somewhere, so that no one could have access to the two cupboards, which contained virtually all the clues to his life.

Occasionally on an afternoon, at his hour of clarity and energy, he'd leave his easy-chair, bolt the door and open the first cupboard, take out the key under the paper lining, and then open the other cupboard containing his documents—title-deeds, diaries, papers and a will.

• Question No. 96

Which of the following is most nearly similar in meaning to the phrase 'Odds and ends' as used in the passage?

Options :

1. Lost items of different types
2. Various things of different types
3. Precious items of different types
4. Rare items of different types
- 5.

Answer : Various things of different types

Direction:

Read the given passage and answer the questions that follow.

Rao kept his important papers stacked in an almirah, which he kept locked, and the key hidden under a lining paper in another cupboard where he kept his clothes and a few odds and ends, and the key of this second cupboard also was hidden somewhere, so that no one could have access to the two cupboards, which contained virtually all the clues to his life.

Occasionally on an afternoon, at his hour of clarity and energy, he'd leave his easy-chair, bolt the door and open the first cupboard, take out the key under the paper lining, and then open the other cupboard containing his documents—title-deeds, diaries, papers and a will.

• Question No. 97

What sort of papers were considered important by Rao?

Options :

1. Title-deeds, diaries, papers and a will
2. Love letters
3. Bank passbooks
4. Share market papers
- 5.

Answer : Title-deeds, diaries, papers and a will

Direction:

Read the given passage and answer the questions that follow.

Rao kept his important papers stacked in an almirah, which he kept locked, and the key hidden under a lining paper in another cupboard where he kept his clothes and a few odds and ends, and the key of this second cupboard also was hidden somewhere, so that no one could have access to the two cupboards, which contained virtually all the clues to his life.

Occasionally on an afternoon, at his hour of clarity and energy, he'd leave his easy-chair, bolt the door and open the first cupboard, take out the key under the paper lining, and then open the other cupboard containing his documents—title-deeds, diaries, papers and a will.

- Question No. 98

Which of the following is the most appropriate word to substitute the word 'stacked' as used in the passage?

Options :

1. Removed
2. Torn
3. Piled
4. Spoiled
- 5.

Answer : Piled

Direction:

Read the given passage and answer the questions that follow.

Rao kept his important papers stacked in an almirah, which he kept locked, and the key hidden under a lining paper in another cupboard where he kept his clothes and a few odds and ends, and the key of this second cupboard also was hidden somewhere, so that no one could have access to the two cupboards, which contained virtually all the clues to his life.

Occasionally on an afternoon, at his hour of clarity and energy, he'd leave his easy-chair, bolt the door and open the first cupboard, take out the key under the paper lining, and then open the other cupboard containing his documents—title-deeds, diaries, papers and a will.

- Question No. 99

How did Rao ensure the safety of his important papers?

Options :

1. By putting them in the custody of his wife
2. By stacking them in a bank lockup
3. By stacking them in an almirah with lock and key
4. By getting them laminated
- 5.

Answer : By stacking them in an almirah with lock and key

Direction:

Read the given passage and answer the questions that follow.

Rao kept his important papers stacked in an almirah, which he kept locked, and the key hidden under a lining paper in another cupboard where he kept his clothes and a few odds and ends, and the key of this second cupboard also was hidden somewhere, so that no one could have access to the two cupboards, which contained virtually all the clues to his life.

Occasionally on an afternoon, at his hour of clarity and energy, he'd leave his easy-chair, bolt the door and open the first cupboard, take out the key under the paper lining, and then open the other cupboard containing his documents—title-deeds, diaries, papers and a will.

- Question No. 100

Which of the following is most nearly similar in meaning to the word 'Access' as used in the passage?

Options :

1. To be able to decrease something
2. To be able to increase something
3. To be able to obtain something
4. To be able to overpower
- 5.

Answer : To be able to obtain something

[Attempt Mock Test Now](#)

All ixamBee Mock Test are FREE @ www.ixamBee.com


Prepare **50%** Faster