

• Question No.1

LCNT is related to NEPV in a certain way based on the English alphabetical order. In the same way, HBER is related to JDGT. To which of the following is OSCF related to, following the same logic?

Options :

1. PUDJ
2. RVEH
3. QVEI
4. QUEH
- 5.

Answer : QUEH

• Question No.2

What will come in the place of '?' in the following equation, if '+' and '-' are interchanged and 'x' and '÷' are interchanged?

$$111 \times 3 - 13 + 3 \div 26 = ?$$

Options :

1. 50
2. 70
3. 40
4. 60
- 5.

Answer : 50

• Question No.3

What should come in place of '?' in the given series?

24 103 498 2473 12348 ?

Options :

1. 60983
2. 63487
3. 62457
4. 61723
- 5.

Answer : 61723

• Question No. 4

Select the set in which the numbers are related in the same way as are the numbers of the following sets. (NOTE: Operations should be performed on the whole numbers, without breaking down the numbers into its constituent digits. E.g. 13-Operations on 13 such as adding /subtracting/multiplying etc. to 13 can be performed. Breaking down 13 into 1 and 3 and then performing mathematical operations on 1 and 3 is not allowed)

(8, 720, 9)

(16, 800, 5)

Options :

1. 7, 125, 8
2. 13, 169, 5
3. 14, 238, 5
4. 18, 1260, 7
- 5.

Answer : 18, 1260, 7

• Question No. 5

What should come in place of? in the given series based on the English alphabetical order?

LPA, PSY, TVW, XYU, ?

Options :

1. CBR
2. BBS
3. CDS
4. DCR
- 5.

Answer : BBS

Direction:

Read the given statement(s) and conclusions carefully.

Assuming that the information given in the statements is true, even if it appears to be at variance with commonly known facts, decide which of the given conclusions logically follow(s) from the statement(s).

- Question No. 6

Statements: All buildings are chalks. No chalk is a toffee.

Conclusions:

(I) No building is a toffee.

(II) All chalks are buildings.

Options :

1. Both conclusions (I) and (II) are follows.
2. Only conclusion (I) is follows.
3. Neither conclusion (I) nor (II) is follows.
4. Only conclusion (II) is follows.
- 5.

Answer : Only conclusion (I) is follows.

- Question No. 7

In a certain code language, 'NAME' is coded as '2473' and 'MEND' is coded as '7642'. What is the code for 'D' in the given code language?

Options :

1. 4
2. 6
3. 7
4. 2
- 5.

Answer : 6

- Question No. 8

If 4 November 2021 is a Thursday, then what will be the day of the week on 13 May 2023?

Options :

1. Monday
2. Sunday
3. Friday
4. Saturday
- 5.

Answer : Saturday

- Question No. 9

8 is related to 40 following a certain logic. Following the same logic, 3 is related to 15. To which of the following is 52 related to, following the same logic?

Options :

1. 261

2. 262

3. 260

4. 263

5.

Answer : 260

• Question No. 10

In a certain code language, 'CHORAL' is coded as 'OHCLAR' and 'FOREGO' is coded as 'ROFOGE'. What is the code for 'GALLEY' in the given code language?

Options :

1. GYALLE

2. ELLAGY

3. LAGYEL

4. YELLAG

5.

Answer : LAGYEL

• Question No. 11

What should come in place of ? in the given series?

64 61 55 46 34 ?

Options :

1. 19

2. 24

3. 15

4. 21

5.

Answer : 19

• Question No. 12

If 'I' stands for '+', 'J' stands for '×', 'K' stands for '÷' and 'L' stands for '-' what will come in place of the question mark (?) in the following equation?

$$105 L (72 K 9) I 43 L (9 J 4) = ?$$

Options :

1. 104
2. 114
3. 106
4. 126
- 5.

Answer : 104

• Question No. 13

E, F, G, H, I and J are sitting around a circular table facing the center. J sits immediate left of I. G sits second to the right of I. E sits second to the right of G. H sits second to the left of F.

Who sits third to the right of E?

Options :

1. F
2. □
3. I
4. J
- 5.

Answer : □

• Question No. 14

What should come in place of '?' in the given series?

77 754 ? 75224 752224 7522224 75222224

Options :

1. 7544
2. 7254
3. 7425
4. 7524
- 5.

Answer : 7524

Direction:

Read the given statements and conclusions carefully.

You have to take the given statements to be true even if they seem to be at variance from commonly known facts.

You have to decide which conclusion/s logically follow/s from the given statements.

- Question No. 15

Statements: All cakes are biscuits. Some biscuits are tarts. All tarts are puddings.

Conclusion I: Some biscuits are cakes.

Conclusion II: Some puddings are biscuits.

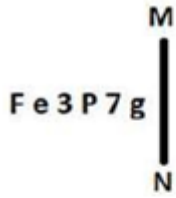
Options :

1. Neither conclusion (I) nor (II) is follow.
2. Both conclusions (I) and (II) are follow.
3. Only conclusion (I) is follow.
4. Only conclusion (II) is follow.
- 5.

Answer : Both conclusions (I) and (II) are follow.

- Question No. 16

Select the correct mirror image of the given figure when the mirror is placed at MN as shown below.



1. g 7 9 e 3 F

2. g 7 P 7 g F e P 7 g

3. g 7 9 e 3 F

4. g 7 P 7 g F e P 7 g

Options :

1.1

2.2

3.3

4.4

5.

Answer : 3

• Question No. 17

Which figure should replace the question mark (?) if the following figure series were to be continued?

6	☆	☆	B	U	H	H	B	
U	B	H	□	6	U	☆	B	Z
Z	□	H	Z	6	□	Z	6	?

1.

6		Z
☆	H	□
B		U

2.

☆		Z
H	B	6
U		□

3.

6		☆
B	H	Z
□		U

4.

6		Z
☆	B	□
U		H

Options :

- 1.1
- 2.2
- 3.3
- 4.4
- 5.

Answer : 2

- Question No. 18

What should come in place of? in the given series based on the English alphabetical order?

UDM, XGP, AJS, DMV, ?

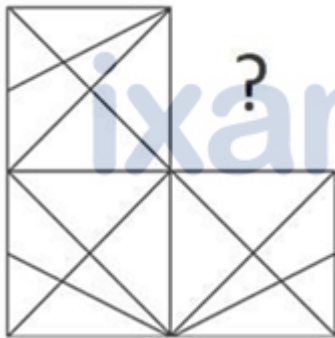
Options :

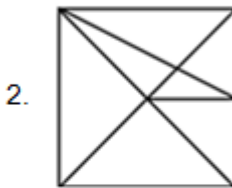
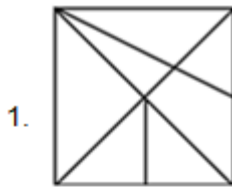
1. GPY
2. FPX
3. EOX
4. FOY
- 5.

Answer : GPY

• Question No. 19

Identify the figure that completes the pattern (rotation is NOT allowed).





Options :

- 1.1
- 2.2
- 3.3
- 4.4
- 5.

Answer : 4

• Question No. 20

What should come in place of? in the given series based on the English alphabetical order?

□□□, UQB, VSE, WUH, ?

Options :

1. YVJ
2. ZWI
3. YUI
4. XWK
- 5.

Answer : XWK

• Question No. 21

A certain sum is to be divided between A, B, and C in the ratio 2 : 5 : 7. But by mistake, it was divided in the ratio 5 : 2 : 7. Thus B loses by ₹150. Find the sum.

Options :

1. ₹700
2. ₹850
3. ₹900
4. ₹625
- 5.

Answer : ₹700

• Question No. 22

2 Four books and eight pens were bought for ₹260. If the average price of a book is ₹35, then the average price of a pen would be:

Options :

1. ₹31
2. ₹5
3. ₹15
4. ₹10

5.

Answer : ₹15

- Question No. 23

The fourth proportional to 1.5, 4.8 and 8 is:

Options :

1. 25.6

2. 26.5

3. 22.6

4. 24.5

5.

Answer : 25.6

- Question No. 24

X can type 8 pages in 3 minutes. Y can type 3 pages in 5 minutes. Working together, how many pages can they type in 15 minutes?

Options :

1. 42

2. 40

3. 46

4. 49

5.

Answer : 49

- Question No. 25

The average weight of 20 students of a class was 30.5 kg. After 6 new students joined the class, its average weight increased by 2 kg. Find the average weight of the 6 new students who joined the class (rounded off to one decimal

place).

Options :

1. 30.5 kg
2. 32.5 kg
3. 39.2 kg
4. 38.5 kg
- 5.

Answer : 39.2 kg

- Question No. 26

A batsman makes 96 runs in the 13th innings and thus his average increases by 3. Find his average after 13 innings.

Options :

1. 65
2. 50
3. 70
4. 60
- 5.

Answer : 60

- Question No. 27

Surjeet alone can finish an assignment in 8 days and Manjeet alone can finish the same assignment in 6 days.

Surjeet and Manjeet decided to do this assignment by working on alternate days, starting with Surjeet. In how many days will the assignment be finished?

Options :

1. 7 days
2. 8.5 days
3. 8 days

4. 7.5 days

5.

Answer : 7 days

- Question No. 28

Two numbers are in the ratio of 2 : 5. Their LCM is 80. Find the numbers.

Options :

1. 18, 38

2. 14, 36

3. 16, 40

4. 16, 38

5.

Answer : 16, 40

- Question No. 29

Two trains of equal length are running on parallel lines in the same direction at 36 km/h and 54 km/h. The faster train passes the slower train in 48 seconds. The length of each train (in m) is:

Options :

1. 80

2. 160

3. 240

4. 120

5.

Answer : 120

- Question No. 30

If the sides of a triangle are in the ratio 3 : 4 : 5 and its perimeter is 24 m. then find the area of the triangle.

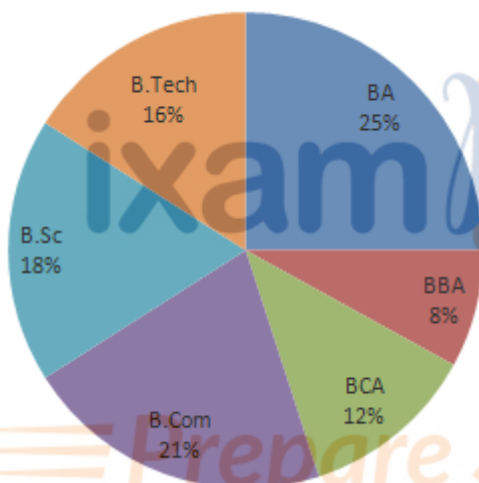
Options :

1. 32 m^2
2. 37 m^2
3. 16 m^2
4. 24 m^2
- 5.

Answer : 24 m^2

Direction:

The pie chart shows the percentage of students studying different courses in a college.



- Question No. 31

The ratio between the number of students studying in BCA and B.se. if the total number of students is 1200, is:

Options :

1. 14 : 27
2. 32 : 63
3. 7 : 9
4. 2 : 3
- 5.

Answer : 2 : 3

- Question No. 32

Simplify the following expression.

$$45 - 22 \div 2 + 12 + 70 \div 35 + 0.4 \div 0.8 + 1.5 \div 3 + 1$$

Options :

1. 50
2. 50.5
3. 48.5
4. 54.5
- 5.

Answer : 50

- Question No. 33

Find the simple interest (in ₹) on ₹5,400 for 7 years at 4% per annum.

Options :

1. 1,512
2. 1,230
3. 1,380
4. 1,172
- 5.

Answer : 1,512

- Question No. 34

What is the length of the longest pole that can be placed in an indoor stadium 24 m long, 18 m wide and 16 m high?

Options :

1. 38 m

2. 34 m
3. 42 m
4. 36 m
- 5.

Answer : 34 m

Direction:

Study the given table and answer the question that follows.

The table shows the centre and post-wise number of candidates.

Centre	Officer	Clerk	Supervisor	Field Officer
Mumbai	12000	18000	8000	200
Chennai	8000	10000	6000	100
Hyderabad	10000	12000	7000	150
Bengaluru	9000	6000	5000	80
Kolkata	14000	18000	6500	120

- Question No. 35

Which centre has the highest number of candidates?

Options :

1. Mumbai
2. Kolkata
3. Chennai
4. Hyderabad
- 5.

Answer : Kolkata

- Question No. 36

A thief is spotted by a policeman from a distance of 108 m. The thief starts running and the policeman chases him. If the speed of the thief and policeman are 21 km/h and 23 km/h, respectively, then how far will the thief have to run (in m) before he is overtaken by the policeman?

Options :

1. 2534
2. 3121
3. 1216
4. 1124
- 5.

Answer : 1124

• Question No. 37

What is the difference between the compound interest, interest compounded half yearly on ₹72,000 for 1.5 years at 10% per annum and its simple interest for 3 years at 5% per annum?

Options :

1. ₹559
2. ₹549
3. ₹540
4. ₹449
- 5.

Answer : ₹549

• Question No. 38

The profit obtained by a vendor on selling goods at ₹3,200 is equal to $\frac{7}{5}$ th of the profit obtained by selling the same goods at ₹3,000. What is the cost price (in ₹) of the goods?

Options :

1. 2,500
2. 2,700
3. 2,400
4. 2,900

5.

Answer : 2,500

• Question No. 39

A spends 20% of the daily income. If the expenditure is ₹250, then the daily income is:

Options :

1. ₹800
2. ₹1,250
3. ₹2,500
4. ₹1,500
- 5.

Answer : ₹1,250

• Question No. 40

By selling a book at some price, Ankita gains 10%. If the book is sold at twice the price, then what will be the gain percentage for Ankita?

Options :

1. 140%
2. 100%
3. 120%
4. 125%
- 5.

Answer : 120%

• Question No. 41

The Guide is a 1958 novel written in English by the Indian author _____.

Options :

1. Mulk Raj Anand
2. Khushwant Singh
3. RK Narayan
4. Nirad Chaudhuri
- 5.

Answer : RK Narayan

• Question No. 42

The stretch between Mumbai to Goa of western coast of India is known as _____.

Options :

1. Coromandel coast
2. Konkan coast
3. Malabar Coast
4. Kannada Plain
- 5.

Answer : Konkan coast

• Question No. 43

Which of the following autobiographies is NOT correctly matched with the concerned cricketer?

Options :

1. Playing it My Way - VVS Laxman
2. The Test of My Life: From Cricket to Cancer and Back - Yuvraj Singh
3. Straight from the Heart - Kapil Dev
4. Cricket Delightful - Mushtaq Ali
- 5.

Answer : Playing it My Way - VVS Laxman

- Question No. 44

What does El Niño refer to?

Options :

1. Hot water current
2. Pressure water current
3. High air pressure
4. Low air pressure
- 5.

Answer : Hot water current

- Question No. 45

Where was the 13th Hockey India senior women's national hockey championship held?

Options :

1. Andhra Pradesh
2. New Delhi
3. Punjab
4. Karnataka
- 5.

Answer : Andhra Pradesh

- Question No. 46

Which Article of the Constitution of India provides for a Council of Ministers with the Prime Minister at the head to aid and advice the President in the exercise of the President's functions?

Options :

1. Article 77
2. Article 74

3. Article 71
4. Article 72
- 5.

Answer : Article 74

• Question No. 47

Which of the following is a key objective of Micro Finance Institutions in India?

Options :

1. Providing loans exclusively to women entrepreneurs
2. Encouraging large-scale industrialisation
3. Maximising profits for shareholders
4. Promoting financial inclusion and poverty alleviation
- 5.

Answer : Promoting financial inclusion and poverty alleviation

• Question No. 48

_____ is one of the most important festivals of Kamakhya temple of Guwahati. It is held every year during the monsoon (mid-June) season, when the temple is closed for three days for tantric rites.

Options :

1. Ambubachi
2. Bihu
3. Baishagu
4. Me-Dum-Me-Phi
- 5.

Answer : Ambubachi

• Question No. 49

In which city is the Kamakhya temple situated?

Options :

1. Dehradun
2. Bhopal
3. Guwahati
4. Indore
- 5.

Answer : Guwahati

- Question No. 50

Which of the following statements best defines a Micro Finance Institution (MFI)?

Options :

1. MFIs are investment firms that cater exclusively to high-net-worth individuals.
2. MFIs are non-profit organisations that provide financial services to low-income individuals and small businesses.
3. MFIs are banks that provide loans only to large corporations.
4. MFIs are government agencies that regulate the microfinance sector.
- 5.

Answer : MFIs are non-profit organisations that provide financial services to low-income individuals and small businesses.

- Question No. 51

Mumbai Indians defeated which team to win Women's Premier League in March, 2023?

Options :

1. UP Warriors
2. Royal Challengers
3. Delhi Capitals

4. Gujarat Giants

5.

Answer : Delhi Capitals

• Question No. 52

The Songi Mukhawate dance of _____ celebrates the victory of truth over falsehood. The name of the dance is derived from the two lion masks worn by two dancers who represent Narasimha, an aspect of Lord Vishnu.

Options :

1. Madhya Pradesh

2. Jharkhand

3. Maharashtra

4. Gujarat

5.

Answer : Maharashtra

• Question No. 53

Who among the following is best known for creating a fusion style of dance by adapting European theatrical techniques to Indian classical dance?

Options :

1. Yamini Krishnamurthy

2. Uday Shankar

3. Gopi Krishna

4. Sonal Mansingh

5.

Answer : Uday Shankar

• Question No. 54

Where was the Hindustan Socialist Republican Association founded in 1928?

Options :

1. Kanpur
2. Amritsar
3. Lucknow
4. Delhi
- 5.

Answer : Delhi

- Question No. 55

Which process is sometimes called "reduction division" because it reduces the number of chromosomes to half the normal number to form sperm and eggs?

Options :

1. Amitosis
2. Meiosis
3. Cytokinesis
4. Karyokinesis
- 5.

Answer : Meiosis

- Question No. 56

Which chemical element with atomic number 35 has a dark reddish-brown liquid with a burning pungent odour?

Options :

1. Tennessine
2. Chlorine
3. Astatine
4. Bromine

5.

Answer : Bromine

• Question No. 57

In which year did Pakistan win the Kabaddi (Circle style) World Cup?

Options :

1. 2016

2. 2014

3. 2020

4. 2013

5.

Answer : 2020

• Question No. 58

The North–South corridor, which is a part of the Golden Quadrilateral super highways, links which two cities of India from the following?

Options :

1. Delhi and Chennai

2. Leh and Chennai

3. Jammu and Kanyakumari

4. Srinagar and Kanyakumari

5.

Answer : Srinagar and Kanyakumari

• Question No. 59

For which community was a journal Rast Goftar started for the purpose of social-religious reforms?

Options :

1. Sikhs
2. Muslim
3. Parsis
4. Hindu
- 5.

Answer : Parsis

• Question No. 60

26 January was selected as the date of the inauguration of the Constitution because on the same date in 1930, the Indian National Congress had revealed _____.

Options :

1. Quit India Movement
2. Purna Swaraj Movement
3. Namak Satyagraha
4. Khilafat Movement
- 5.

Answer : Purna Swaraj Movement

• Question No. 61

What is the name of the scheme launched by Uttar Pradesh government to boost milk production?

Options :

1. Nand Baba Milk Mission
2. Gokul Milk Mission
3. Krishna Balram Milk Mission
4. Gua Ras Mission
- 5.

Answer : Nand Baba Milk Mission

- Question No. 62

What is the source of Directive Principles of State Policy?

Options :

1. The instrument of instructions from GOI Act 1919
2. The instrument of instructions from GOI Act 1935
3. The instrument of instructions from GOI Act 1909
4. The instrument of instructions from GOI Act 1947
- 5.

Answer : The instrument of instructions from GOI Act 1935

- Question No. 63

How many classical dance forms does the Sangeet Natak Akademi in India officially recognise, as of August 2021?

Options :

1. 9
2. 6
3. 7
4. 8
- 5.

Answer : 8

- Question No. 64

According to the Human Development Report 2021-22, what is the rank of India among 191 countries?

Options :

1. 117

2. 180

3. 148

4. 132

5.

Answer : 132

- Question No. 65

Which Indian musical legend is credited with composing Talas such as Trimukhi, Panchamukhi, Saptamukhi and Navamukhi?

Options :

1. M Balamuralikrishna

2. Bade Ghulam Ali Khan

3. KJ Yesudas

4. Pandit Jasraj

5.

Answer : M Balamuralikrishna

- Question No. 66

Select the most appropriate meaning of the **bold** idiom.

The Indian team had its **back against the wall**, but managed to fight back.

Options :

1. In extreme joy or exhilaration

2. Stuck in a difficult circumstance with no escape

3. Forced to indulge in propaganda

4. Throwing the opposition off guard

5.

Answer : Stuck in a difficult circumstance with no escape

- Question No. 67

The following sentence has been split into four segments. Identify the segment that contains a grammatical error.

This is the first time / I ate such / a tasty cake.

Options :

1. I ate such
2. This is the first time
3. No error
4. a tasty cake
- 5.

Answer : I ate such

- Question No. 68

Select the option that can be used as a one-word substitute for the given group of words.

A lover of books

Options :

1. Philosopher
2. Librarian
3. Teacher
4. Bibliophile
- 5.

Answer : Bibliophile

- Question No. 69

Select the most appropriate option to fill in the blank.

Tom waited until _____ to start working on his term paper but managed to finish it just in time.

Options :

1. the twelfth hour
2. the thirteenth hour
3. the tenth hour
4. the eleventh hour
- 5.

Answer : the eleventh hour

• Question No. 70

Select the most appropriate synonym of the given word.

Cordial

Options :

1. Unfriendly
2. Friendly
3. Brave
4. Aromatic
- 5.

Answer : Friendly

• Question No. 71

Select the most appropriate meaning of the given idiom.

Bigger fish to fry

Options :

1. To barely get something done
2. Having something more important to take care of
3. Having work more than one's capacity

4. To be similar to one's parents in some way

5.

Answer : Having something more important to take care of

• Question No. 72

There is a spelling error in the given sentence. Select the option that contains the INCORRECTLY spelt word.

The hungry goblin scratched the grammar book with a feather.

Options :

1. hungry

2. scratched

3. feather

4. grammar

5.

Answer : hungry

• Question No. 73

Select the most appropriate option to fill in the blank.

The rusty door made a _____ screeching noise.

Options :

1. low

2. soft

3. harsh

4. smooth

5.

Answer : harsh

- Question No. 74

Select the most appropriate option to fill in the blank.

The tone of his voice seemed to _____ that he knew more than he was letting on.

Options :

1. incise
2. intent
3. inculcate
4. imply
- 5.

Answer : imply

- Question No. 75

Select the most appropriate ANTONYM of the given word.

Enormous

Options :

1. Tiny
2. Inapposite
3. Irrelevant
4. Gigantic
- 5.

Answer : Tiny

- Question No. 76

There is a spelling error in the given sentence. Select the option that contains the INCORRECTLY spelt word.

The questionnaire appeared to be misrably designed.

Options :

1. designed
2. questionnaire
3. miserably
4. appeared
- 5.

Answer : miserably

• Question No. 77

Select the most appropriate option to fill in the blank.

COVID-19 _____ structural weaknesses in health systems worldwide and negatively impacted individuals, societies, and economies.

Options :

1. concealed
2. laid
3. hit
4. revealed
- 5.

Answer : revealed

• Question No. 78

Select the most appropriate option that can substitute the **bold** segment in the given sentence.

She **will handling** the baby as tenderly as possible.

Options :

1. wills handle
2. shall handles

3. will handle
4. will handled
- 5.

Answer : will handle

• Question No. 79

Parts of the following sentence have been given as options. Select the option that contains an error.

A old woman suddenly laughed, sounding just like an amused hen.

Options :

1. like an amused hen
2. sounding just
3. A old woman
4. suddenly laughed
- 5.

Answer : A old woman

• Question No. 80

Select the most appropriate ANTONYM of the given word.

Annoy

Options :

1. Gratify
2. Vex
3. Irritate
4. Thrill
- 5.

Answer : Gratify

• Question No. 81

Four words of the following sentence have been **bold** and given as options.

Select the option that contains a spelling error.

All life depends on a healthy planet, but the **interwoven** systems of atmosphere, oceans, **watercourses**, land, ice cover and **biosphere**, which form the natural environment, are **threatned** by human activities.

Options :

1. interwoven
2. threatned
3. biosphere
4. watercourses
- 5.

Answer : threatned

• Question No. 82

Select the most appropriate meaning of the given idiom.

A storm in a teacup

Options :

1. Much excitement over something trivial
2. A signal for upcoming storm
3. Easy money
4. Suffering in silence
- 5.

Answer : Much excitement over something trivial

• Question No. 83

Select the most appropriate option to fill in the blank.

Varun has to _____ his studies for the sake of his ill father.

Options :

1. sacrifice
2. imitate
3. reverse
4. applaud
- 5.

Answer : sacrifice

• Question No. 84

Parts of the following sentence have been given as options. Select the option that contains an error.

Vikram is very stronger than I am.

Options :

1. very stronger
2. I am
3. Vikram is
4. than
- 5.

Answer : very stronger

• Question No. 85

Select the most appropriate option that can substitute the **bold** segment in the given sentence.

You are always **try with jump** over the wall.

Options :

1. trying in jumping
2. try to jump
3. trying to jump
4. tried with jump
- 5.

Answer : trying to jump

Direction:

In the following passage, some words have been deleted. Read the passage carefully and select the most appropriate option to fill in the blanks.

Kasturi went to the garden looking for her mother. Her dog Rex was waiting (86)_____ her. Kasturi picked up a stick and threw it. Rex (87)_____ the stick and brought it back. Kasturi ran (88)_____ the house. Rex chased her. Kasturi ran through the garden and Rex (89)_____ her. Mother yelled at both of them. She told them to stay (90)_____ of the garden and play somewhere else. Kasturi apologised to her mother. She went for a bike ride while Rex ran next to the bike.

- Question No. 86

Select the most appropriate option to fill in blank number 86.

Options :

1. with
2. by
3. to
4. for
- 5.

Answer : for

Direction:

In the following passage, some words have been deleted. Read the passage carefully and select the most appropriate option to fill in the blanks.

Kasturi went to the garden looking for her mother. Her dog Rex was waiting (86)_____ her. Kasturi picked up a stick and threw it. Rex (87)_____ the stick and brought it back. Kasturi ran (88)_____ the house. Rex chased her. Kasturi

ran through the garden and Rex (89)_____ her. Mother yelled at both of them. She told them to stay (90)_____ of the garden and play somewhere else. Kasturi apologised to her mother. She went for a bike ride while Rex ran next to the bike.

• Question No. 87

Select the most appropriate option to fill in blank number 87.

Options :

1. chases
2. throws
3. threw
4. chased
- 5.

Answer : chased

Direction:

In the following passage, some words have been deleted. Read the passage carefully and select the most appropriate option to fill in the blanks.

Kasturi went to the garden looking for her mother. Her dog Rex was waiting (86)_____ her. Kasturi picked up a stick and threw it. Rex (87)_____ the stick and brought it back. Kasturi ran (88)_____ the house. Rex chased her. Kasturi ran through the garden and Rex (89)_____ her. Mother yelled at both of them. She told them to stay (90)_____ of the garden and play somewhere else. Kasturi apologised to her mother. She went for a bike ride while Rex ran next to the bike.

• Question No. 88

Select the most appropriate option to fill in blank number 88.

Options :

1. in
2. around
3. round

4. about

5.

Answer : around

Direction:

In the following passage, some words have been deleted. Read the passage carefully and select the most appropriate option to fill in the blanks.

Kasturi went to the garden looking for her mother. Her dog Rex was waiting (86)_____ her. Kasturi picked up a stick and threw it. Rex (87)_____ the stick and brought it back. Kasturi ran (88)_____ the house. Rex chased her. Kasturi ran through the garden and Rex (89)_____ her. Mother yelled at both of them. She told them to stay (90)_____ of the garden and play somewhere else. Kasturi apologised to her mother. She went for a bike ride while Rex ran next to the bike.

• Question No. 89

Select the most appropriate option to fill in blank number 89.

Options :

1. obey

2. listen

3. followed

4. came

5.

Answer : followed

Direction:

In the following passage, some words have been deleted. Read the passage carefully and select the most appropriate option to fill in the blanks.

Kasturi went to the garden looking for her mother. Her dog Rex was waiting (86)_____ her. Kasturi picked up a stick and threw it. Rex (87)_____ the stick and brought it back. Kasturi ran (88)_____ the house. Rex chased her. Kasturi ran through the garden and Rex (89)_____ her. Mother yelled at both of them. She told them to stay (90)_____ of the garden and play somewhere else. Kasturi apologised to her mother. She went for a bike ride while Rex ran next to the bike.

- Question No. 90

Select the most appropriate option to fill in blank number 90.

Options :

1. of
2. in
3. from
4. out
- 5.

Answer : out

[Attempt Mock Test Now](#)

All ixamBee Mock Test are FREE @ www.ixamBee.com


Prepare **50%** Faster