

• Question No. 1

Four letter-clusters have been given, out of which three are alike in some manner and one is different. Select the letter-cluster that is different.

Options :

1. FDB
2. OMK
3. JHF
4. USP
- 5.

Answer : USP

• Question No. 2

In a certain code language, 'MANGO' is written as 'QERKS' and 'APPLE' is written as 'ETTP'. How will 'GUAVA' be written in that language?

Options :

1. KYFXF
2. KYGZE
3. KYEZE
4. KXEZE
- 5.

Answer : KYEZE

• Question No. 3

In a certain code language, GAME is written as TUZANOVW, and CAR is written as XYZAIJ. How will POST be written in that language?

Options :

1. OQNPRTSV
2. QRPQTUUV
3. KLLMHIGH
4. KLMNJKGH
- 5.

Answer : KLLMHIGH

• Question No. 4

Select the option that is related to the third number in the same way as the second number is related to the first number.

20 : 480 :: 25 : ?

Options :

1. 700
2. 725
3. 655
4. 625
- 5.

Answer : 725

• Question No. 5

Select the option that is related to the third term in the same way as the second term is related to the first term.

ZYGOTE : ZYTOGE :: SEQUENCE : ?

Options :

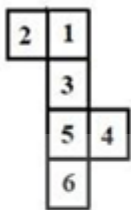
1. USQNEEEC
2. USQENCEE
3. SUQNEEEC
4. USNQEEEC

5.

Answer : USQNEEEC

- Question No. 6

Select the dice that can be formed by folding the given sheet along the lines.



1. Only B and D
2. Only B, C and D
3. Only B
4. Only A and C

Options :

- 1.1
- 2.2
- 3.3
- 4.4
- 5.

Answer : 2

- Question No. 7

Aditi is the daughter of Sanket. Vritti is the daughter of Ankit. Kriti is the mother of Mahi. Neeta is Sanket's wife. Neeta is the mother-in-law of Vritti's mother Kriti. Which of the following statements is NOT correct?

Options :

1. Ankit is the father of Mahi.
2. Vritti is the sister of Mahi.
3. Aditi is the daughter of Neeta.
4. Kriti is the daughter of Sanket.
- 5.

Answer : Kriti is the daughter of Sanket.

- Question No. 8

If 'A' denotes 'addition', 'B' denotes 'multiplication', 'C' denotes 'subtraction', and 'D' denotes 'division', then what will be the value of the following expression?

100 D (1 B 4) A 2 B (13 A 11) C 3 B (17 C 12)

Options :

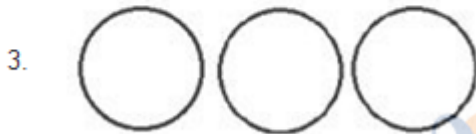
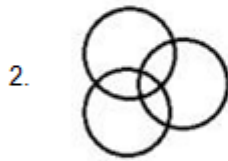
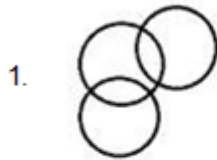
1. 52
2. 58
3. 49
4. 60
- 5.

Answer : 58

- Question No. 9

Select the Venn diagram that best represents the relationship between the following classes.

School, Teacher, Employee



Options :

1. 1

2. 2

3. 3

4. 4

5.

Answer : 2

- Question No. 10

Select the number from among the given options that can replace the question mark (?) in the following series.

5, 9, 18, 34, ?, 95

Options :

1. 65

2. 69

3. 63

4. 59

5.

Answer : 59

• Question No. 11

Four number triads have been given, out of which three are alike in some manner and one is different. Select the number triad that is different.

Options :

1. (46, 65, 82)

2. (54, 73, 90)

3. (21, 40, 57)

4. (39, 48, 75)

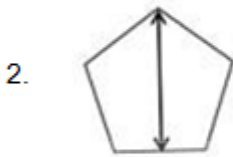
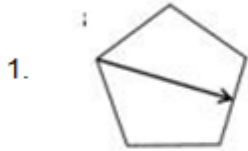
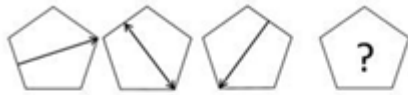
5.

Answer : (39, 48, 75)

• Question No. 12

Prepare **50%** Faster

Select the figure from among the given options that can replace the question mark (?) in the following series.



Options :

- 1. 1
- 2. 2
- 3. 3
- 4. 4
- 5.

Answer : 4

• Question No. 13

Select the correct option that indicates the arrangement of the given words in the order in which they appear in an English dictionary.

- 1. Dermatitis

2. Desistance

3. Derogation

4. Descendant

5. Dereliction

Options :

1. 5, 4, 1, 3, 2

2. 5, 1, 3, 2, 4

3. 5, 2, 1, 3, 4

4. 5, 1, 3, 4, 2

5.

Answer : 5, 1, 3, 4, 2

• Question No. 14

Select the combination of letters that when sequentially placed in the blanks of the given series will complete the series.

A _ _ B _ _ A B _ C A _ B B C

Options :

1. B, C, A, A, A, B

2. B, A, B, A, C, B

3. A, B, C, A, B, A

4. B, B, C, C, A, B

5.

Answer : A, B, C, A, B, A

• Question No. 15

O, P, Q, R, S, T and U are sitting in a row facing north. U is sitting to the immediate right of T. Q is sitting in between R and O. P, who is on the extreme right, is sitting to the immediate right of O. S is sitting to the immediate left of R. Who is sitting in the middle of the row?

Options :

1. S
2. R
3. T
4. Q
- 5.

Answer : R

Direction:

Read the given statements and conclusions carefully. Assuming that the information given in the statements is true, even if it appears to be at variance with commonly known facts, decide which of the given conclusions logically follow(s) from the statements.

- Question No. 16

Statements:

Some cats are animals.

All animals are plants.

Conclusions:

I. All cats are plants.

II. Some plants are cats.

III. Some plants are animals.

IV. All animals are cats.

Options :

1. Only conclusion I follow
2. All the conclusions follow
3. Only conclusions I, II and III follow
4. Only conclusions II and III follow
- 5.

Answer : Only conclusions II and III follow

• Question No. 17

Six friends are sitting in a straight line. E is 4th from the right. E is between B and D. A is adjacent to B. D is adjacent to C. D is between E and C. F is adjacent to C. Who is sitting between F and D?

Options :

1. A
2. E
3. C
4. B
- 5.

Answer : C

• Question No. 18

Select the number from among the given options that can replace the question mark (?) in the following series.


153, 149, 143, 135, ?

Options :

1. 131
2. 125
3. 129
4. 127
- 5.

Answer : 125

- Question No. 19

'Experimenter' is related to 'Lab' in the same way as 'Chef' is related to '_____'.


Options :

1. Cooking
2. Food
3. Dishes
4. Kitchen
- 5.

Answer : Kitchen

- Question No. 20

Select the letter-cluster from among the given options that can replace the question mark (?) in the following series.

IOM, NTR, SYW, ?

Options :

1. XDB
2. JPN
3. NSX
4. OTZ
- 5.

Answer : XDB

- Question No. 21

Select the correct mirror image of the given combination when the mirror is placed at 'PQ' as shown.

MERCHANT | ^P
_Q

1. ТИАНСЯЕМ
2. WEВЧНЛ
3. ТИОНАЯЕМ
4. WEВСНЛ

Options :

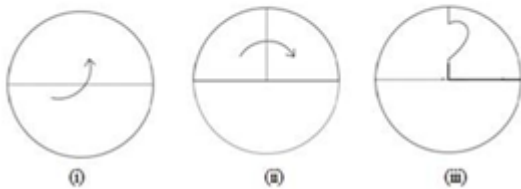
- 1.1
- 2.2
- 3.3
- 4.4
- 5.

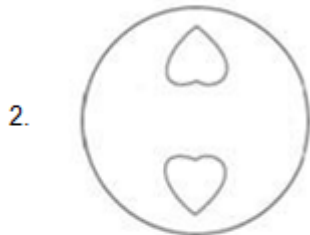
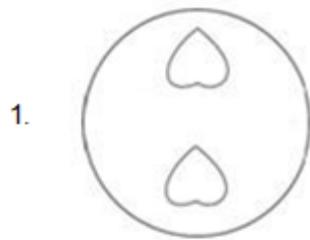
Answer : 1

Prepare 50% Faster

• Question No. 22

The sequence of folding a piece of paper and the manner in which the folded paper has been cut is shown in the following figures. How would this paper look when unfolded?





Options :

1.1

2.2

3.3

4.4

5.

Answer : 4

• Question No. 23

In a certain code language, 'PHENYL' is coded as '9-11-17-8-5-13' and 'COLONY' is coded as '6-12-13-12-8-5'. How will 'COLONEL' be coded in that language?

Options :

1. 6-12-12-13-8-17-13
2. 6-12-13-12-8-17-13
3. 6-12-12-13-8-11-13
4. 6-17-12-13-8-13-11
- 5.

Answer : 6-12-13-12-8-17-13

• Question No. 24

Select the option in which the given figure is embedded (rotation is NOT allowed).



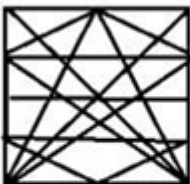
1.



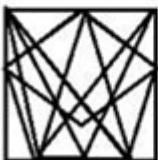
2.



3.



4.



Options :

1. 1

2. 2

3. 3

4. 4

5.

Answer : 2

- Question No. 25

Tvesa Malik is an Indian _____ player.

Options :

1. Volleyball

2. Golf

3. Chess

4. Basketball

5.

Answer : Golf

- Question No. 26

_____ launched the Fit India Mobile App at an event at Major Dhyan Chand National Stadium, New Delhi in August 2021.

Options :

1. Anurag Singh Thakur

2. Nisith Praman k

3. Ravi Mittal

4. Usha Sharma

5.

Answer : Anurag Singh Thakur

• Question No. 27

The acceleration of an object is said to be _____ when an object travels in a straight line and its velocity increases or decreases by equal amount in equal intervals of time.

Options :

1. Negative
2. non-uniform
3. uniform
4. positive
- 5.

Answer : uniform

• Question No. 28

Who was appointed as the State Election Commissioner of Jammu and Kashmir on October 30, 2020?

Options :

1. Kewal Kumar Sharma
2. V Bhaskaran
3. Shatrunjay Kumar Singh
4. Manoj Kumar
- 5.

Answer : Kewal Kumar Sharma

• Question No. 29

Which of the following animals breathes through its skin?

Options :

1. Frog
2. Rabbit

3. Peacock
4. Deer
- 5.

Answer : Frog

• Question No. 30

Which of the following is the most reactive metal?

Options :

1. Silver
2. Aluminium
3. Iron
4. Potassium
- 5.

Answer : Potassium

• Question No. 31

Which non-metal among the following is poly-atomic?

Options :

1. Sulphur
2. Argon
3. Oxygen
4. Helium
- 5.

Answer : Sulphur

• Question No. 32

Who among the following was appointed as the first Municipal Commissioner of Bombay in 1865?

Options :

1. William Hunter
2. Charles Atkinson
3. H Fowler
4. Arthur Crawford
- 5.

Answer : Arthur Crawford

• Question No. 33

'La Liga' title is associated with _____.

Options :

1. Tennis
2. Football
3. Cricket
4. Sprinting
- 5.

Answer : Football

• Question No. 34

In which of the following states is the Bhoramdeo temple located, where each year in the last week of March 'Bhramdeo Mahotsav' is celebrated?

Options :

1. West Bengal
2. Karnataka
3. Tamil Nadu
4. Chhattisgarh
- 5.

Answer : Chhattisgarh

• Question No. 35

Who became the first Indian Air Force pilot to perform a wingsuit skydive jump? S/he achieved this feat in July 2019.

Options :

1. Shital Mahajan Rane
2. Archana Sardana
3. Rachel Thomas
4. Tarun Chaudhri
- 5.

Answer : Tarun Chaudhri

• Question No. 36

_____ was the son of a Chief of the Jnatrika (or Jhatrika) Kshatriya clan.

Options :

1. Gautama Buddha
2. Rishabhanath
3. Vardhamana Mahavira
4. Parshvanath
- 5.

Answer : Vardhamana Mahavira

• Question No. 37

_____ was the residence of the Mughal emperors of India for nearly 200 years until 1857.

Options :

1. Jehangir Mahal
2. Red Fort
3. Agra Fort
4. Pari Mahal
- 5.

Answer : Red Fort

• Question No. 38

Which of the following states won the 'Best Tableau' award at the 71st Republic Day parade in January 2020?

Options :

1. Assam
2. Goa
3. Odisha
4. Uttar Pradesh
- 5.

Answer : Assam

• Question No. 39

The Uttar Pradesh cabinet approved a proposal to name a zoological garden at _____ after the freedom fighter and revolutionary Ashfaqullah Khan.

Options :

1. Gorakhpur
2. Faizabad
3. Shahjahanpur
4. Ghaziabad
- 5.

Answer : Gorakhpur

- Question No. 40

Which of the following statements about the Mahanadi river is INCORRECT?

Options :

1. It rises in the highlands of Chhattisgarh.
2. It drains into the Arabian Sea.
3. A part of its river basin lies in Maharashtra.
4. It is about 860 km long.
- 5.

Answer : It drains into the Arabian Sea.

- Question No. 41

Who is the author of the book 'Courts of India: Past to Present'?

Options :

1. Shashi Tharoor
2. Satyarth Nayak
3. Jayanta Kalita
4. Ranjan Gogoi
- 5.

Answer : Ranjan Gogoi

- Question No. 42

The Government of India approved the Ayushman Bharat Pradhan Mantri Jan Arogya Yojana (AB-PM-JAY) in the year _____.

Options :

1. 2018
2. 2014

3. 2015

4. 2016

5.

Answer : 2018

• Question No. 43

The money value of all the final goods and services produced within the country during a particular year is called

-----.

Options :

1. per capita income

2. net Domestic Product

3. national Income

4. gross Domestic Product

5.

Answer : gross Domestic Product

• Question No. 44

Which of the following options gives the correct chronological order of rulers of the Mauryan Empire?

Options :

1. Brihadratha - Chandragupta - Bindusara - Ashoka

2. Ashoka - Brihadratha - Chandragupta - Bindusara

3. Chandragupta - Bindusara - Ashoka - Brihadratha

4. Bindusara - Chandragupta - Ashoka - Brihadratha

5.

Answer : Chandragupta - Bindusara - Ashoka - Brihadratha

• Question No. 45

Which of the following is NOT a fundamental right under the 44th Amendment Act, 1978 of Indian Constitution?

Options :

1. Right to property
2. Right to equality
3. Right against exploitation
4. Right to religion
- 5.

Answer : Right to property

- Question No. 46

Which of the following countries hosted the 13th edition of the 2020 ICC Under 19 Cricket World Cup?

Options :

1. England
2. South Africa
3. Australia
4. India
- 5.

Answer : South Africa

- Question No. 47

In which state is the Hogenakkal Falls located?

Options :

1. Andhra Pradesh
2. Kerala
3. Maharashtra
4. Tamil Nadu
- 5.

Answer : Tamil Nadu

- Question No. 48

The Life Insurance Corporation of India Act was passed by the Parliament in the year _____.

Options :

1. 1956
2. 1948
3. 1971
4. 1965
- 5.

Answer : 1956

- Question No. 49

Which of the following is a biometric enabled digital service for pensioners launched by the Government of India?

Options :

1. Pradhan Mantri Jeevan Jyoti Beema Yojna
2. Pradhan Mantri Mudra Yojna
3. Pradhan Mantri Jan Dhan Yojna
4. Jeevan Pramaan
- 5.

Answer : Jeevan Pramaan

- Question No. 50

If the diagonal of a square is increased by 4 cm, its area increases by 56 cm^2 . Find the ratio of the new area of the square to the initial area of the square.

Options :

1. 16 : 9
2. 13 : 8
3. 18 : 11
4. 12 : 5
- 5.

Answer : 16 : 9

• Question No. 51

The value of $42 \div 9$ of $6 - [64 \div 48 \times 3 - 15 \div 8 \times (11 - 17) \div 9] \div 14$ is:

Options :

1. 19/36
2. 7/18
3. 29/72
4. 5/12
- 5.

Answer : 29/72

• Question No. 52

A can do $(2/5)$ of a work in 6 days and B can do 30% of the same work in 3 days. They worked together for 4 days. The remaining work was completed by C alone in 6 days. B and C together can complete 70% of the original work in:

Options :

1. $5(1/2)$ days
2. 4 days
3. 5 days
4. $4(1/2)$ days
- 5.

Answer : $4(1/2)$ days

- Question No. 53

The amount of a certain sum in 3 years at simple interest at $x\%$ p.a. is ₹5,472 and the amount of the same sum in $7\frac{1}{2}$ years at the same rate, at simple interest is ₹6,930. The value of x is:

Options :

1. 7.2
2. 8.5
3. 8
4. 6.5
- 5.

Answer : 7.2

- Question No. 54

There are two sections A and B of a class, consisting of 38 and 42 students, respectively. If the average weight of the students of section A is 55 kg and that of section B is 32 kg, find the average weight of all the students in the class.

Options :

1. 42 kg
2. 42.925 kg
3. 44.925 kg
4. 40.925 kg
- 5.

Answer : 42.925 kg

- Question No. 55

A dealer sold an article at a loss of 4%. Had he sold it for ₹120 more, he would have gained 8%. To gain 11%, he should sell the article for?

Options :

1. ₹1,110
2. ₹1,200
3. ₹1,320
4. ₹1,210
- 5.

Answer : ₹1,110

- Question No. 56

A sum fetched a simple interest of ₹3,040 at the rate of 8 %p.a. in 5 years. What is the sum?

Options :

1. ₹8,600
2. ₹7,600
3. ₹7,700
4. ₹6,600
- 5.

Answer : ₹7,600

- Question No. 57

The greatest number that on dividing 2675 and 2320 leaves the reminders 5 and 6, respectively, is:

Options :

1. 168
2. 170
3. 187
4. 178
- 5.

Answer : 178

- Question No. 58

Speed of an aircraft is 120 km/min. This speed in m/sec is:

Options :

1. 120000
2. 12000
3. 1200
4. 2000
- 5.

Answer : 2000

- Question No. 59

A and B can complete a piece of work in 120 days, B and C can complete it in 150 days, and A and C can complete it in 200 days. In how many days can B alone complete two-fifths of the same work?

Options :

1. 200
2. 100
3. 80
4. 175
- 5.

Answer : 80

- Question No. 60

If the sides of a triangle measure 21 cm, 35 cm and 28 cm, what is the measure of its in radius? (in cm)

Options :

1. 8 cm
2. 7 cm

3. 21 cm

4. 9 cm

5.

Answer : 7 cm

• Question No. 61

After giving a discount of 20% on the marked price of an article, it is sold for ₹120. Had the discount not been given, the profit would have been 20%. What is the cost price of the article?

Options :

1. ₹120

2. ₹130

3. ₹100

4. ₹125

5.

Answer : ₹125

• Question No. 62

A discount of 20% on the price of an article is the same as a discount of 25% on the price of another article. The prices of the two articles will be, respectively:

Options :

1. ₹40 and ₹50

2. ₹60 and ₹50

3. ₹50 and ₹40

4. ₹50 and ₹60

5.

Answer : ₹50 and ₹40

- Question No. 63

The sides of a triangular park are 96 m, 110 m and 146 m. Its area is equal to the area of a field in the shape of a rhombus, one of whose diagonals is 60 m. The length (in m) of its other diagonal is:

Options :

1. 176
2. 132
3. 218
4. 88
- 5.

Answer : 176

- Question No. 64

What is the third proportional to 9 and 36?

Options :

1. 72
2. 288
3. 144
4. 122
- 5.

Answer : 144

- Question No. 65

Solve the following:

$$523 + 523 \times 523 \div 523$$

Options :

1. 1005
2. 1235
3. 1542
4. 1046
5. none of these

Answer : 1046

• Question No. 66

A shopkeeper has some toys. He sells two-third of the toys at a profit of 35% and the remaining toys at 10% loss.

What is his overall percentage of profit?

Options :

1. 16%
2. 20%
3. 18%
4. 25%
- 5.

Answer : 20%

• Question No. 67

Two trains start from places A and B, respectively, and travel towards each other at the speeds of 60 km/h and 50 km/h, respectively. By the time they meet, the faster train has travelled 110 km more than the slower train. What is the distance between A and B?

Options :

1. 1100 km
2. 1200 km
3. 1150 km
4. 1210 km
- 5.

Answer : 1210 km

• Question No. 68

The ratio of two numbers is 9: 5. If 8 is added to the larger number and 4 is subtracted from the smaller number, the greater number becomes twice the smaller number. The larger number is:

Options :

1. 110
2. 104
3. 144
4. 114
- 5.

Answer : 114

• Question No. 69

Vignesh spends 42% of his monthly salary on food, 16% on house rent, 11% on entertainment and 7% on conveyance. But due to some family function, he has to borrow ₹12,000 from a money lender to meet the expenses of ₹18,000. What is his monthly salary?

Options :

1. ₹20,000
2. ₹24,000
3. ₹30,000
4. ₹25,000
- 5.

Answer : ₹25,000

• Question No. 70

The average of 4, 6, 8, 12 and x is 7 and the average of x, 9, 13, 15 and y is 9. What is the value of $2x - 3y$?

Options :

1. 5
2. 3
3. 19
4. 1
- 5.

Answer : 1

• Question No. 71

If the compound interest on a certain sum of money for two years at 9% p.a. is ₹3,762, then the sum is:

Options :

1. ₹20,000
2. ₹18,000
3. ₹25,000
4. ₹24,000
- 5.

Answer : ₹20,000

• Question No. 72

The ratio of the ages of A, B and C, 5 years ago, was 4 : 5 : 7. The sum of their present ages is 135 years. What will be the sum of the ages (in years) of B and C, 3 years from now?

Options :

1. 100
2. 96
3. 106
4. 112
- 5.

Answer : 106

• Question No. 73

Three numbers are in the ratio 4 : 9 : 13 and their LCM is 2340. Their HCF is:

Options :

1. 7
2. 3
3. 4
4. 5
- 5.

Answer : 5

• Question No. 74

A man sells two articles at 29,180 each. He gains 8% on one article and loses 15% on the other. His overall profit or loss is:

Options :

1. Profit ₹840
2. Loss ₹840
3. Loss ₹940
4. Profit ₹940
- 5.

Answer : Loss ₹940

• Question No. 75

The price of a car increased by 5% while its sales decreased by 16%. What is the percentage change in the total revenue?

Options :

1. 5% decrease
2. 9% increase
3. 9% decrease
4. 5% increase
- 5.

Answer : 5% increase

• Question No. 76

Select the most appropriate meaning of the given idiom.

To be on the same page

Options :

1. To be published together
2. To read a book together
3. To understand what the other says
4. To agree on something
- 5.

Answer : To agree on something

• Question No. 77

Select the option that can be used as a one-word substitute for the given group of words.

One who collects coins

Options :

1. Fatalist
2. Philatelist
3. Numismatist
4. Anthropologist
- 5.

Answer : Numismatist

- Question No. 78

Select the most appropriate ANTONYM of the given word.

Spellbound

Options :

1. Amazed
2. Captivated
3. Enthralled
4. Disenchanted
- 5.

Answer : Disenchanted

- Question No. 79

The following sentence has been split into four segments. Identify the segment that contains a grammatical error.

We'll look at / your pet / when you go / on a vacation.

Options :

1. We'll look at
2. on a vacation
3. when you go
4. your pet
- 5.

Answer : We'll look at

- Question No. 80

Select the most appropriate option that can substitute the bold word in the given sentence.

Besides generating revenue, tourism brings a break from the **ceremony** of daily life.

Options :

1. Scrutiny
2. Symphony
3. Monotony
4. Company
- 5.

Answer : Monotony

- Question No. 81

Select the correctly spelt word.

Options :

1. Asassination
2. Bureaucracy
3. Philanthropist
4. Peadeatrician
- 5.

Answer : Peadeatrician

- Question No. 82

Select the most appropriate meaning of the given idiom.

Tickled pink

Options :

1. Fond of pink
2. Very sensitive
3. Very pleased

4. Easily teased

5.

Answer : Very pleased

• Question No. 83

Select the most appropriate option to fill in the blank.

My sister bought the _____ watch.

Options :

1. Antipathy

2. Colloquial

3. Antilocal

4. Antique

5.

Answer : Antique

• Question No. 84

Select the most appropriate SYNONYM of the given word.

Ample

Options :

1. Sparse

2. Sufficient

3. Limited

4. Scarce

5.

Answer : Sufficient

- Question No. 85

Select the option that can be used as a one-word substitute for the given group of words.

Many fish swimming together

Options :

1. Shoal
2. Bevy
3. Brood
4. Flock
- 5.

Answer : Shoal

- Question No. 86

Select the option that can be used as a one-word substitute for the given group of words.

A person who supervises during an examination

Options :

1. Invigilator
2. Examinee
3. Principal
4. Administrator
- 5.

Answer : Invigilator

- Question No. 87

The following sentence has been split into four segments. Identify the segment that contains a grammatical error.

The most important / of all my goals / are to/ learn English.

Options :

1. of all my goals
2. The most important
3. are to
4. learn English
- 5.

Answer : are to

• Question No. 88

Select the most appropriate option that can substitute the bold segment in the given sentence. If there is no need to substitute it, select 'No substitution required'.

The condition of the house **had been so deteriorated** from lack of maintenance that nobody wanted to purchase it.

Options :

1. No substitution required
2. was deteriorating
3. was so deteriorated
4. had so deteriorated
- 5.

Answer : had so deteriorated

• Question No. 89

Select the most appropriate synonym of the given word.

Submissive

Options :

1. Adamant
2. Obdurate

3. Obedient
4. Obstinate
- 5.

Answer : Obedient

• Question No. 90

Select the option that will improve the bold part of the given sentence. In case no improvement is needed, select 'No improvement required'.

The new President has **bring in** many reforms.

Options :

1. No improvement required
2. brought about
3. bring up
4. brought out
- 5.

Answer : brought about

• Question No. 91

Select the most appropriate ANTONYM of the given word.

Fictitious

Options :

1. False
2. Factual
3. Imaginative
4. Subjective
- 5.

Answer : Factual

- Question No. 92

Select the most appropriate option to fill in the blank.

She _____ why I had not sent her an invitation.

Options :

1. Granted
2. Enquired
3. Desired
4. Denied
- 5.

Answer : Enquired

- Question No. 93

Select the most appropriate option to fill in the blank.

The government should take steps to _____ pollution.

Options :

1. Control
2. Convey
3. Conduct
4. Consume
- 5.

Answer : Control

- Question No. 94

Select the INCORRECTLY spelt word.

Options :

1. Wistle
2. Cereal
3. Tunnel
4. Rustle
- 5.

Answer : Wistle

• Question No. 95

The following sentence has been split into four segments. Identify the segment that contains a grammatical error.

I wish / I am / the Principal / of the school!

Options :

1. I wish
2. of the school
3. I am
4. the Principal
- 5.

Answer : I am

Direction:

In the following passage, some words have been deleted. Read the passage carefully and select the most appropriate option to fill in each blank.

Writing is a form (1)_____, and neat handwriting is important when writing (2)_____ that will be read by someone else. We (3)_____ by the quality of our handwriting, and (4)_____ our handwriting is poor, we (5)_____ to be lazy or incompetent.

• Question No. 96

Select the most appropriate option to fill in blank no. 1.

Options :

1. in expression
2. to expressing
3. for expression
4. of expression
- 5.

Answer : of expression

Direction:

In the following passage, some words have been deleted. Read the passage carefully and select the most appropriate option to fill in each blank.

Writing is a form (1)_____, and neat handwriting is important when writing (2)_____ that will be read by someone else. We (3)_____ by the quality of our handwriting, and (4)_____ our handwriting is poor, we (5)_____ to be lazy or incompetent.

- Question No. 97

Select the most appropriate option to fill in blank no. 2.

Options :

1. Nothing
2. Everything
3. Anything
4. each thing
- 5.

Answer : Anything

Direction:

In the following passage, some words have been deleted. Read the passage carefully and select the most appropriate option to fill in each blank.

Writing is a form (1)_____, and neat handwriting is important when writing (2)_____ that will be read by someone else. We (3)_____ by the quality of our handwriting, and (4)_____ our handwriting is poor, we (5)_____ to be lazy or incompetent.

- Question No. 98

Select the most appropriate option to fill in blank no. 3.

Options :

1. should be often judged
2. are often judged
3. have been often judged
4. judged often
- 5.

Answer : are often judged

Direction:

In the following passage, some words have been deleted. Read the passage carefully and select the most appropriate option to fill in each blank.

Writing is a form (1)_____, and neat handwriting is important when writing (2)_____ that will be read by someone else. We (3)_____ by the quality of our handwriting, and (4)_____ our handwriting is poor, we (5)_____ to be lazy or incompetent.

- Question No. 99

Select the most appropriate option to fill in blank no. 4.

Options :

1. As
2. While
3. Where
4. When
- 5.

Answer : When

Direction:

In the following passage, some words have been deleted. Read the passage carefully and select the most appropriate option to fill in each blank.

Writing is a form (1)_____, and neat handwriting is important when writing (2)_____ that will be read by someone else. We (3)_____ by the quality of our handwriting, and (4)_____ our handwriting is poor, we (5)_____ to be lazy or incompetent.

- Question No. 100

Select the most appropriate option to fill in blank no. 5.

Options :

1. Appear
2. See
3. Expose
4. Look
- 5.

Answer : Appear

[Attempt Mock Test Now](#)

All ixamBee Mock Test are FREE @ www.ixamBee.com