

• Question No. 1

Select the word-pair that best represents a similar relationship to the one expressed in the given pair of words.

(The words must be considered as meaningful English words and must not be related to each other based on the number of letters/number of consonants/vowels in the word)

Police : Protection

Options :

1. Thief : Jail
2. Minister : Governance
3. King : Kingdom
4. Teacher : Class
- 5.

Answer : Minister : Governance

• Question No. 2

After arranging the given words according to dictionary order, which word will come at the 'Third' position?

1. Series
2. Serious
3. Serein
4. Serial
5. Serried

Options :

1. Serial
2. Serein
3. Serious

4. Series

5.

Answer : Series

• Question No. 3

In the following question, four number pairs are given. In each pair the number on left side of (-) is related to the number of the right side of (-) with some Logic/Rule/Relation. Three pairs are similar on basis of same Logic/Rule/Relation. Select the odd one out from the given alternatives. (NOTE: Operations should be performed on the whole numbers, without breaking down the numbers into its constituent digits. E.g.13 – Operations on 13 such as adding /subtracting /multiplying etc. to 13 can be performed. Breaking down 13 into 1 and 3 and then performing mathematical operations on 1 and 3 is not allowed)

Options :

1. 13 – 172

2. 9 – 84

3. 11 – 124

4. 15 – 220

5.

Answer : 15 – 220

• Question No. 4

Which of the following letter-clusters will replace the question mark (?) in the given series?

MU, NE, PX, QF, SA, TG, ?

Options :

1. VC

2. VD

3. UC

4. VE

5.

Answer : VD

• Question No. 5

Three statements are given followed by three conclusions numbered I, II and III. Assuming the statements to be true, even if they seem to be at variance with commonly known facts, decide which of the conclusions logically follow(s) from the statements.

Statements:

Some tests are exams.

Some exams are viva.

All viva are theories.

Conclusions:

I. Some theories are exams.

II. Some theories are viva.

III. Some tests are viva.

Options :

1. Only conclusions I and III follow
2. Only conclusions II and III follow
3. All conclusions follow
4. Only conclusions I and II follow
- 5.

Answer : Only conclusions I and II follow

• Question No. 6

In a certain code language, 'PLANNED' is written as 'RNCNPGF' and 'PROMOTE' is written as 'RTQMQVG'. How will 'IMPROVE' be written in that language?

Options :

1. KORTQXG
2. KORTOXG
3. KOQRQXG
4. KORRQXG
- 5.

Answer : KORRQXG

• Question No. 7

Select the set in which the numbers are related in the same way as are the numbers of the following set.

(NOTE: Operations should be performed on the whole numbers, without breaking down the numbers into its constituent digits.)

(2, 8, 36)

(4, 9, 25)

Options :

1. (21, 15, 35)
2. (12, 14, 26)
3. (14, 18, 9)
4. (13, 20, 49)
- 5.

Answer : (13, 20, 49)

• Question No. 8

Three of the following letter-clusters are alike in some manner and hence form a group. Which letter-cluster does not belong to that group?

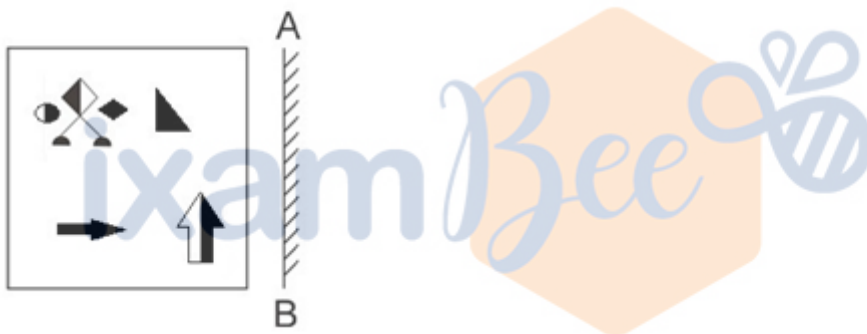
Options :

1. SXHP
2. VCDR
3. XCCU
4. UZFR
- 5.

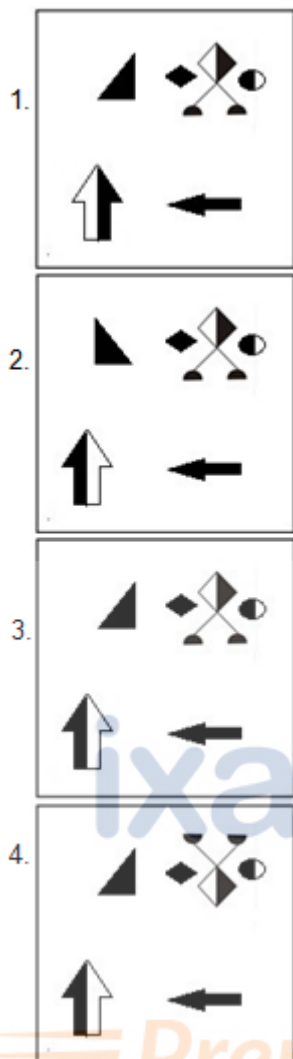
Answer : VCDR

• Question No. 9

Select the correct mirror image of the given figure when the mirror is placed at AB as shown.



Prepare **50%** Faster



Options :

- 1.1
- 2.2
- 3.3
- 4.4
- 5.

Answer : 3

- Question No. 10

If $A - B$ means that A is the brother of B, $A + B$ means that A is the sister of B, $A \times B$ means that A is the father of B then which of the following expression shows that P is the brother of R?

Options :

1. $P + Q - R$

2. $P - Q \times R$

3. $P - Q + R$

4. $P \times Q + R$

5.

Answer : $P - Q + R$

• Question No. 11

Select the correct combination of mathematical signs to sequentially replace the * signs and to balance the given equation.

$30 * 4 * 2 * 1 * 121$

Options :

1. $\times, -, +, =$

2. $\times, -, \div, =$

3. $\times, +, -, =$

4. $\div, +, -, =$

5.

Answer : $\times, +, -, =$

• Question No. 12

A & B means 'A is the son of B'

A # B means 'A is the sister of B'

A @ B means 'A is the brother of B'

A % B means 'A is the father of B'

A - B means 'A is the daughter of B'

A * B means 'A is the wife of B'

If C # D @ E % Z & L # M - N * P, then how is E related to L?

Options :





1. Husband
2. Son
3. Father
4. Son-in-law
- 5.

Answer : Husband

• Question No.13

Select the figure from among the given options that can replace the question mark (?) in the following series.



1. 
2. 
3. 
4. 

Options :

1. 1
2. 2
3. 3
4. 4
- 5.

Answer : 2

• Question No. 14

A series is given with one term missing. Select the correct alternative from the given ones that will complete the series.

QRM, PWD, OBU, NGL, ?

Options :

1. MQR
2. MRS
3. MCL
4. MLC
- 5.

Answer : MLC

• Question No. 15

By interchanging the given two signs which of the following equation will be not correct?

× and –

Options :

1. $11 + 6 \times 3 - 8 \div 2 = 5$
2. $5 - 6 \times 3 + 16 \div 4 = 31$

3. $15 + 5 \div 1 - 9 \times 4 = 70$

4. $15 - 4 \times 3 + 6 \div 1 = 63$

5.

Answer : $15 + 5 \div 1 - 9 \times 4 = 70$

• Question No. 16

Select the option that is related to the fifth letter-cluster in the same way as the second letter-cluster is related to the first letter-cluster and the fourth letter-cluster is related to the third letter-cluster

LEISURE : USIELER :: INTENSE : NETNIES :: EXCITED : ?

Options :

1. TICXEDE

2. XEDETCI

3. EXEDTCI

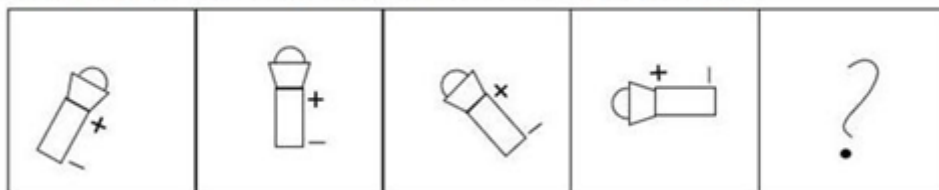
4. CTEDEXI

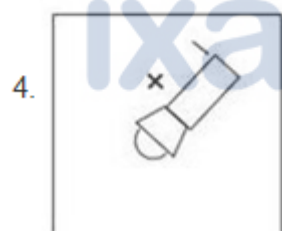
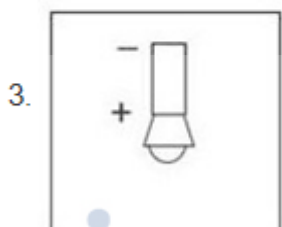
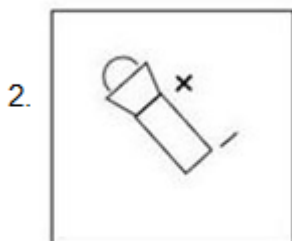
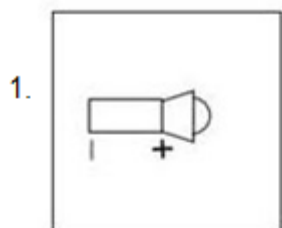
5.

Answer : TICXEDE

• Question No. 17

Select the figure that will come next in the following figure series.





Options :

- 1. 1
- 2. 2
- 3. 3
- 4. 4
- 5.

Answer : 4

- Question No. 18

Select the set in which the numbers are NOT related in the same way as are the numbers of the given set.

(NOTE: Operations should be performed on the whole numbers, without breaking down the numbers into its constituent digits. E.g. 13 – Operations on 13 such as adding / subtracting / multiplying etc. to 13 can be performed. Breaking down 13 into 1 and 3 and then performing mathematical operations on 1 and 3 is not allowed)

(267, 128, 139)

Options :

1. (325, 112, 215)
2. (267, 132, 135)
3. (297, 146, 151)
4. (365, 154, 211)
- 5.

Answer : (325, 112, 215)

• Question No. 19

Select the set in which the numbers are related in the same way as are the numbers of the following sets:

(7,11, 72)

(5, 8, 39)

(NOTE : Operations should be performed on the whole numbers, without breaking down the numbers into its constituent digits. E.g. 13 – Operations on 13 such as adding / subtracting / multiplying etc. to 13 can be performed. Breaking down 13 into 1 and 3 and then performing mathematical operations on 1 and 3 is NOT allowed)

Options :

1. (2, 3, 1)
2. (4, 7, 33)
3. (5, 2, 23)
4. (5, 6, 13)
- 5.

Answer : (4, 7, 33)

- Question No. 20

Which of the following numbers will replace the question mark (?) in the given series?

67, 78, 71, 82, 75, 86, ?

Options :

1. 97
2. 92
3. 84
4. 79
- 5.

Answer : 79

- Question No. 21

Select the correct combination of mathematical signs to replace the * signs and balance the given equation.

$$5 * 15 * 320 * 2 * 45 = 190$$

Options :

1. +, ÷, ×, -
2. +, ×, ÷, -
3. ×, +, ÷, -
4. ×, ÷, -, +
- 5.

Answer : ×, +, ÷, -

- Question No. 22

In the following question below are given some statements followed by some conclusions based on those statements. Taking the given statements to be true even if they seem to be at variance from commonly known facts. Read all the conclusions and then decide which of the given conclusion logically follows the given

statements.

Statements:

I. All Z are X.

II. All G are X.

Conclusions:

I. Some G are Z.

II. All X are G.

III. Some Z are X.

Options :

1. Neither conclusion follows
2. Both conclusions II and III follows
3. Only conclusion III follows
4. Both conclusions I and III follows
- 5.

Answer : Only conclusion III follows

- Question No. 23

In a certain code language, 'BELL' is coded as '111141' and 'HEAR' is coded as '172647'. How will 'MIKE' be coded in that language?

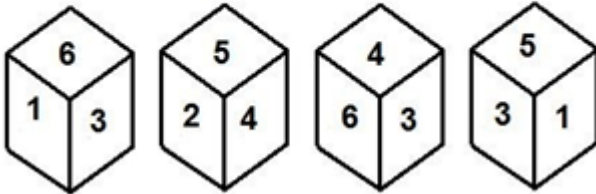
Options :

1. 410813
2. 410612
3. 410812
4. 410811
- 5.

Answer : 410812

• Question No. 24

Four different positions of the same dice are shown, the six faces of which are numbered 1 to 6. Select the number that will be on the face opposite to the one showing '4'.



Options :

- 1. 5
- 2. 1
- 3. 3
- 4. 2
- 5.

Answer : 1

• Question No. 25

Select the correct mirror image of the given combination when the mirror is placed at 'MN' as shown below.



- 1. 4 e Σ K B R Q P M
- 2. 4 e Σ K B R Q ь M
- 3. M P Q R B K Z e 4
- 4. 4 e Σ K B R Q ь M

Options :

- 1.1
- 2.2
- 3.3
- 4.4
- 5.

Answer : 3

- Question No. 26

Mango showers are common in _____.

Options :

- 1. Maharashtra
- 2. Uttar Pradesh
- 3. Kerala
- 4. West Bengal

5.

Answer : Kerala

• Question No. 26

Sunanda Nair is famous for performing which of the following dance forms?

Options :

1. Kathak
2. Mohiniyattam
3. Odissi
4. Yakshagana
- 5.

Answer : Mohiniyattam

• Question No. 27

Chemical formula of washing soda is _____.

Options :

1. Na_2SO_4
2. NaHCO_3
3. NaOH
4. $\text{Na}_2\text{CO}_3 \cdot 10\text{H}_2\text{O}$
- 5.

Answer : $\text{Na}_2\text{CO}_3 \cdot 10\text{H}_2\text{O}$

• Question No. 28

Article 19 of the Indian Constitution provides for how many types of freedoms?

Options :

1. 44
2. 30
3. 6
4. 13
- 5.

Answer : 6

- Question No. 29

Who among the following is said to have devised many Raagas or melodies in Hindustani music?

Options :

1. Raja Man Singh
2. Todar Mal
3. Raja Beerbal
4. Tansen
- 5.

Answer : Tansen

- Question No. 30

Who has been appointed as NITI Aayog's new Vice Chairman in May 2022?

Options :

1. Suman Bery
2. S Somnath
3. Tarun Kapoor
4. Manoj Pande
- 5.

Answer : Suman Bery

- Question No. 31

Which of the following is NOT a feature of National Income?

Options :

1. It is included only in intermediate goods.
2. It is a flow concept.
3. It is a macroeconomic concept.
4. It is always expressed with reference to the financial year.
- 5.

Answer : It is included only in intermediate goods.

- Question No. 32

In a food chain, secondary producers are _____.

Options :

1. Herbivores
2. Decomposers
3. Omnivores
4. Carnivores
- 5.

Answer : Herbivores

- Question No. 33

In June 2022, the Supreme Court directed that every protected forest, national park and wildlife sanctuary across the country should have a mandatory eco-sensitive zone (ESZ) of a minimum _____ starting from their demarcated boundaries.

Options :

1. 2 km

- 2. 3 km
- 3. 1 km
- 4. 5 km
- 5.

Answer : 1 km

• Question No. 34

What happens to the decomposition rate when detritus is rich in lignin and chitin?

Options :

- 1. It is slower
- 2. It is negligible
- 3. It is faster
- 4. There is no movement
- 5.

Answer : It is slower

• Question No. 35

According to census 2011, the child sex ratio was _____ females per 1000 males.

Options :

- 1. 909
- 2. 939
- 3. 919
- 4. 929
- 5.

Answer : 919

• Question No. 37

Vernacular press Act was enacted in which year?

Options :

1. 1878
2. 1875
3. 1876
4. 1877
- 5.

Answer : 1878

- Question No. 38

Which branch of the government is responsible for implementing laws and policies?

Options :

1. Judiciary
2. NITI Aayog
3. Executive
4. Legislature
- 5.

Answer : Executive

- Question No. 39

Which of the following is NOT a conductor?

Options :

1. Hard rubber
2. Copper
3. Silver
4. Nickel
- 5.

Answer : Hard rubber

- Question No. 40

Black Card given to a badminton player during the game indicates:

Options :

1. Disqualification
2. Warning
3. Fault
4. Suspension
- 5.

Answer : Disqualification

- Question No. 41

Bharatanatyam and Kuchipudi dancer Yamini Krishnamurthy was awarded which of the following awards in 2016?

Options :

1. Tagore Puraskar
2. Padma Shri
3. Padma Vibhushan
4. Padma Bhushan
- 5.

Answer : Padma Vibhushan

- Question No. 42

The flat topped table land standing above the surrounding area is called _____.

Options :

1. Mountain

2. Valley
3. Plateau
4. Hill
- 5.

Answer : Plateau

• Question No. 43

According to the archaeologists, in Harappan cities the part to the west was smaller and higher, was known as_____.

Options :

1. Citadel
2. Olympus
3. lower town
4. colosseum
- 5.

Answer : Citadel

• Question No. 44

In the first phase of the green revolution, the use of HYV seeds was restricted to the more affluent of which group of states?

Options :

1. Punjab, Tamil Nadu and Madhya Pradesh
2. Punjab, Rajasthan and Madhya Pradesh
3. Punjab, Tamil Nadu and Andhra Pradesh
4. Punjab, Haryana and Madhya Pradesh
- 5.

Answer : Punjab, Tamil Nadu and Andhra Pradesh

- Question No. 45

Rani Karnaa Nayak, who was awarded the Padma Shri in 2014, was a _____ dancer.

Options :

1. Mohiniyattam
2. Kathak
3. Kathakali
4. Odissi
- 5.

Answer : Kathak

- Question No. 46

Thousands of people from all walks of life took part in the _____ organised at Hyderabad in May 2022 to mark the 25-day countdown to International Day of Yoga.

Options :

1. Yoga Utsav
2. Yoga Umang
3. Yoga Mahotsav
4. Yoga Sutra
- 5.

Answer : Yoga Utsav

- Question No. 47

In November 2022, retired Army officer Raj Shukla has been appointed as a member of the _____.

Options :

1. Union Public Service Commission
2. Bureau of Indian Standards

3. Insurance Regulatory and Development Authority
4. Employees' Provident Fund Organisation
- 5.

Answer : Union Public Service Commission

• Question No. 48

Sarojini Naidu was elected first Indian woman President of the Indian National Congress at _____.

Options :

1. Nagpur
2. Delhi
3. Kanpur
4. Ahmedabad
- 5.

Answer : Kanpur

• Question No. 49

Who among the following belonged to the ancient chiefly family of the Cholas from Uraiyur, captured the Kaveri delta from the Muttaraiyar in the middle of the ninth century?

Options :

1. Gandaraditya
2. Parantaka I
3. Aditya I
4. Vijayalaya
- 5.

Answer : Vijayalaya

• Question No. 50

Which among the following crops is related to the "Rabi" season in North India?

Options :

1. Jowar
2. Rice
3. Maize
4. Barley
- 5.

Answer : Barley

- Question No. 51

The table given below shows the production of beauty products by five different companies. What is the ratio of production of beauty product by A to the production of beauty product by E?

Companies	Production
A	30
B	50
C	32
D	15
E	25

Options :

1. 7 : 4
2. 6 : 5
3. 4 : 5
4. 5 : 6
- 5.

Answer : 6 : 5

- Question No. 52

In a College, the number of students with different majors are as follows.

Subject	number of students
Mathematics	45
Physics	60
History	30
Hindi	65
Sanskrit	45

Find the average number of students in each subject.

Options :

1. 49
2. 42
3. 55
4. 56
- 5.

Answer : 49

- Question No. 53

A, B and C can do a piece of work in 11 days, 20 days and 55 days respectively. If B works daily and is supported by A and C on alternate days beginning with A, then in how many days will the work be finished?

Options :

1. 12
2. 10
3. $9\frac{1}{3}$
4. 8
- 5.

Answer : $9\frac{1}{3}$

- Question No. 54

If $x + \frac{1}{x} = 1$, then the value of $x^{12} + x^9 + x^6 + x^3 + 1$ is:

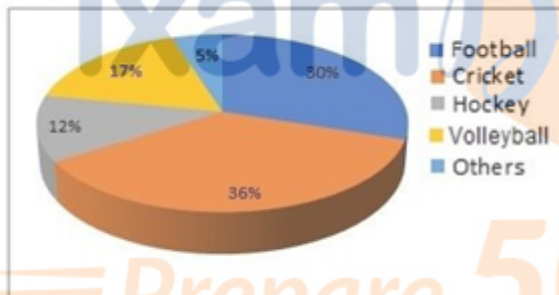
Options :

1. -2
2. 0
3. -1
4. 1
- 5.

Answer : 1

- Question No. 55

The given pie-chart represents the survey report on the favourite games of a group of young people.



If a total of 4980 persons were surveyed, how many of them said football is their favourite game?

Options :

1. 1200
2. 1494
3. 1430
4. 1324
- 5.

Answer : 1494

- Question No. 56

The value of 97×103 is _____.

Options :

1. 9991
2. 9981
3. 7999
4. 8991
- 5.

Answer : 9991

- Question No. 57

What will be the value of $\sin 10^\circ - \frac{4}{3} \sin^3 10^\circ$?

Options :

1. $\frac{1}{6}$
2. $\frac{\sqrt{3}}{6}$
3. $\frac{1}{2}\sqrt{3}$
4. $\frac{1}{3}\sqrt{3}$
- 5.

Answer : $\frac{1}{6}$

- Question No. 58

The simple interest received on a sum is $\frac{25}{36}$ of the sum. The number of years is equal to the annual rate of interest. What is the annual rate of interest?

Options :

1. 10.25 percent
2. 9.25 percent
3. 6.62 percent
4. 8.33 percent

5.

Answer : 8.33 percent

• Question No. 59

If the length of certain rectangle is decreased by 4 cm and breadth is increased by 2 c, it would result in a square of the same area. What is the perimeter of the original rectangle?

Options :

1. 15 cm

2. 24 cm

3. 20 cm

4. 10 cm

5.

Answer : 20 cm

• Question No. 60

Two candidates P and Q contested in an election. 70% of the registered voters are P supporters. If 60% of the P supporters and 30% of the Q supporters are expected to vote for candidate P, then what percentage of the registered voters are expected to vote for candidate P?

Options :

1. 47%

2. 51%

3. 26%

4. 30%

5.

Answer : 51%

• Question No. 61

$$\frac{\cos 20^\circ}{\sin 70^\circ} + \frac{\cos \theta}{\sin(90^\circ - \theta)} = \underline{\hspace{2cm}}$$

Options :

1. $\frac{1}{2}$
2. $-\frac{1}{2}$
3. -2
4. 2
- 5.

Answer : 2

- Question No. 62

A solid hemisphere has radius 21 cm. It is melted to form a cylinder such that the ratio of its curved surface area to total surface area is 2 : 5. What is the radius (in cm) of its base (take $\pi = \frac{22}{7}$)?

Options :

1. 21
2. 19
3. 23
4. 17
- 5.

Answer : 21

- Question No. 63

Find the greatest number that will divide 49, 147 and 322 to leave the same remainder in each case.

Options :

1. 7
2. 5
3. 6

4.9

5.

Answer : 7

- Question No. 64

A wire is in the form of square with side 11 cm. It is bent to form a circle. What is the radius of the circle?

Options :

1. 5 cm

2. 11 cm

3. 9 cm

4. 7 cm

5.

Answer : 7 cm

- Question No. 65

Sonali applied for a job of Science teacher in a school. In the test for job, she scored 8 in Physics, 8 in Chemistry, 6 in Biology, and 6.5 in the interview. For calculating the final score, weightage of 2, 3, 3, and 4 were assigned to Physics, Chemistry, Biology and interview, respectively. What is the weighted average score of Sonali?

Options :

1. 8.4

2. 7.2

3. 7

4. 21

5.

Answer : 7

- Question No. 66

Successive discounts of 18% and 22% are equal to a single discount of _____.

Options :

1. 35.04%
2. 37.04%
3. 36.04%
4. 34.04%
- 5.

Answer : 36.04%

- Question No. 67

The mean proportional of a and b is c. What is the mean proportional of $a^2 c$ and $b^2 c$?

Options :

1. C
2. $3c$
3. c^3
4. c^2
- 5.

Answer : c^3

- Question No. 68

A man lost 15% by selling a mobile for Rs.4,675. What will be his gain percentage by selling it for Rs.6,050?

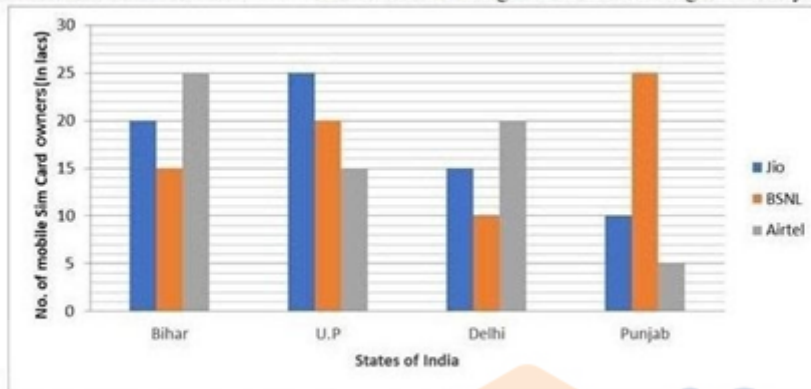
Options :

1. 10%
2. 10.5%
3. 9.5%
4. 9%
- 5.

Answer : 10%

- Question No. 69

The number of mobiles sim-card owners in 4 states/UT are given in the bar diagram. Study the diagram and answer the question.



The average of sim-card sold in the four States/UT in lakhs is:

Options :

1. 51.5
2. 51.25
3. 55.25
4. 50
5. Prepare 50% Faster

Answer : 51.25

- Question No. 70

The mid points of AB and AC of a ΔABC are X and Y, respectively. If $BC + XY = 24$ units, then the value of $BC - XY$ is:

Options :

1. 5 cm
2. 4 cm
3. 6 cm
4. 8 cm
- 5.

Answer : 8 cm

• Question No. 71

A boat racer can row $21\frac{3}{2}$ km/h in still water. If the speed of river is 12.5km/hr , it takes him 40 minutes to row to place and back, how far off is the place (consider up to two decimals)?

1. $5\frac{2}{5}$ km

2. $3\frac{5}{27}$ km

3. $5\frac{5}{27}$ km

4. $4\frac{5}{27}$ km

Options :

1.1

2.2

3.3

4.4

5.

Answer : 3

• Question No. 72

AD is the median of triangle ABC. P is the centroid of triangle ABC. If AP = 14 cm, then what is the length of PD?

Options :

1. 7 cm

2. 14 cm

3. 21 cm

4. 28 cm

5.

Answer : 7 cm

- Question No. 73

Find the area of the sector of a circle with radius 4cm and angle 30° .

Options :

1. 5.186cm^2

2. 6.186 cm^2

3. 7.186 cm^2

4. 4.186 cm^2

5.

Answer : 4.186 cm^2

- Question No. 74

A number n when divided by 6, leaves a remainder 3. What will be the remainder when $(n^2 + 5n + 8)$ is divided by 6?

Options :

1. 3

2. 1

3. 2

4. 5

5. none of these

Answer : 2

- Question No. 75

If $b \sin \theta = a$, then $\sec \theta + \tan \theta = ?$

1. $\sqrt{\frac{b+a}{b-a}}$

2. $\sqrt{\frac{1}{b+a}}$

3. $\sqrt{\frac{1}{b-a}}$

4. $\sqrt{\frac{b-a}{b+a}}$

Options :

1.1

2.2

3.3

4.4

5.

Answer : 1

• Question No. 76

A sentence has been given with a blank to be filled with an appropriate word. Choose the correct alternative.

She rubbed her hands over her arms, and then _____ her purse, headed inside the convenience store.

Options :

1. Pinching
2. Slaying
3. Snapping
4. Grabbing
- 5.

Answer : Grabbing

• Question No. 77

Select the appropriate option to replace the bold word with the adverb of frequency.

He **did not admit** that his team played badly.

Options :

1. happily admitted
2. willingly admitted
3. never admitted
4. yesterday admitted
- 5.

Answer : never admitted

• Question No. 78

Select the most appropriate option that can substitute the bold segment in the given sentence. If there is no need to substitute it, select 'No substitution'.

I **have reached the hotel**, by the time you call me.

Options :

1. will have reached the hotel
2. will be reaching the hotel
3. No substitution
4. had reached the hotel

5.

Answer : will have reached the hotel

• Question No. 79

Select the INCORRECTLY spelt word.

Options :

1. Currently
2. Compact
3. Compell
4. Savage
- 5.

Answer : Compell

• Question No. 80

Select the correct active form of the given sentence.

AIDS will have been cured by the year 2070 by scientists.

Options :

1. Select the correct active form of the given sentence. AIDS will have been cured by the year 2070 by scientists.
2. Scientists must have cured AIDS by the year 2070.
3. Scientists cured AIDS by the year 2070.
4. Scientists will have cured AIDS by the year 2070.
- 5.

Answer : Scientists will have cured AIDS by the year 2070.

• Question No. 81

Select the most appropriate synonym of the word 'consensus' from the following sentence.

The landowner and the tenant mutually came to an agreement for decisive acceptance of its clause.

Options :

1. Mutually
2. Agreement
3. Acceptance
4. Decisive
- 5.

Answer : Agreement

• Question No. 82

Select the most appropriate idiom that can substitute the italicised words in the given sentence.

Some people still feel that they have very little freedom to be innovative in their work.

Options :

1. elbow room
2. an old head on young shoulders
3. to make a pile
4. an old lady
- 5.

Answer : elbow room

• Question No. 83

Select the correct direct form of the given sentence.

Raveena asked me if I had her maid's number.

Options :

1. Raveena asked to me, "Have you have my maid's number."
2. Raveena said to me, "Does you have my maid's number."
3. Raveena asked me, "Are you having my maid's number."
4. Raveena asked me, "Do you have my maid's number?"
- 5.

Answer : Raveena asked me, "Do you have my maid's number?"

• Question No. 84

Select the most appropriate meaning of the bold idiom in the given sentence.

The lecture by the French professor seemed **Latin and Greek** to the young students.

Options :

1. Incomprehensible
2. Lucid
3. Unbiased
4. Interesting
- 5.

Answer : Incomprehensible

• Question No. 85

Select the word that is OPPOSITE in meaning to the bold word in the given sentence.

He **consolidated** his position as the leader of the political party.

Options :

1. Weakened
2. Devised
3. Strengthened
4. Formulated
- 5.

Answer : Weakened

• Question No. 86

Sentences of a paragraph are given below in jumbled order. Arrange the sentences in the correct order to form a meaningful and coherent paragraph.

A.It is a very popular character and is the mascot for Walt Disney company.

B.Mickey generally appears with his girlfriend Minnie Mouse and pet Pluto.

C.The animated movies on Mickey mouse have been nominated for the Academy award.

D.Mickey mouse is a fictional cartoon character created by Walt Disney in 1928.

Options :

1. BACD
2. DABC
3. ADBC
4. ACDB
- 5.

Answer : DABC

• Question No. 87

The question below consists of a set of labeled sentences. Out of the four options given, select the most logical order of the sentences to form a coherent paragraph.

P. There once was a little boy who had a very bad temper.

Q. The boy gradually began to control his temper over the next few weeks, and the number of nails he was hammering into the fence slowly decreased.

R. His father decided to hand him a bag of nails and said that every time the boy lost his temper, he had to hammer a nail into the fence.

S. On the first day, the boy hammered 37 nails into that fence .

Options :

1. QRSP
2. QPRS
3. RPSQ
4. PRSQ
- 5.

Answer : PRSQ

- Question No. 88

The following sentence has been divided into parts. One of them may contain an error. Select the part that contains the error from the given options. If you don't find any error, mark 'No error' as your answer.

The prisoner was / accused for stealing / from his landlord.

Options :

1. The prisoner was
2. accused for stealing
3. from his landlord
4. from his landlord
- 5.

Answer : accused for stealing

- Question No. 89

Select the most appropriate option to fill in the blank.

We ensure that you will get a _____ chauffeur with the right car for your day.

Options :

1. Dabbler

2. Novice
3. Uniformed
4. Riotous
- 5.

Answer : Uniformed

- Question No. 90

Select the most appropriate option to replace the bold segment in the given sentence.

Old people **acquire experience** through age.

Options :

1. developed experience
2. experienced
3. got experience
4. gain experience
- 5.

Answer : gain experience

- Question No. 91

Choose the incorrectly spelt word.

Options :

1. Assidous
2. Disapproval
3. Conjoined
4. Devastation
- 5.

Answer : Assidous

- Question No. 92

Select the option that expresses the given sentence in active voice.

Honest and polite people are admired by everyone.

Options :

1. Everyone admires honest and polite people.
2. Everyone admired honest and polite people.
3. Everyone will admire honest and polite people.
4. Everyone has been admiring honest and polite people.
- 5.

Answer : Everyone admires honest and polite people.

- Question No. 93

Select the option that expresses the given sentence in indirect speech.

He said to him, "Is your name not Ahmed?"

Options :

1. He enquired is your name not Ahmed.
2. He said whether his name was not Ahmed.
3. He said is your name not Ahmed.
4. He enquired whether his name was not Ahmed.
- 5.

Answer : He enquired whether his name was not Ahmed.

- Question No. 94

Select the most appropriate synonym of the bold word in the given sentence.

The promises made by the **old** minister were fulfilled.

Options :

1. Aged
2. Recent
3. Contemporary
4. Vernal
- 5.

Answer : Aged

• Question No. 95

Select the most appropriate ANTONYM of the word established from the given sentence:

Siben feels great satisfaction and gratified when he finds his pupils established successfully in the society when a lot have been displaced because of several failed attempts.

Options :

1. Fail
2. Gratified
3. Pupils
4. Displaced
- 5.

Answer : Displaced

Direction:

In the following passage, some words have been deleted. Read the passage carefully and select the most appropriate option to fill in each blank.

I will tell you what I will do and what I will not do. I will not (1) _____ that in which I no longer believe, (2) _____ it calls itself my home, my fatherland, or my church: and I will try to (3) _____ myself in some mode of life or art as (4) _____ as I can and as wholly as I can, using for my defense the only arms I (5) _____ myself to use: silence, exile and cunning.

• Question No. 96

Select the most appropriate option to fill in blank number 1.

Options :

1. Lag
2. Serve
3. Debit
4. Drain
- 5.

Answer : Serve

Direction:

In the following passage, some words have been deleted. Read the passage carefully and select the most appropriate option to fill in each blank.

I will tell you what I will do and what I will not do. I will not (1) _____ that in which I no longer believe, (2) _____ it calls itself my home, my fatherland, or my church: and I will try to (3) _____ myself in some mode of life or art as (4) _____ as I can and as wholly as I can, using for my defense the only arms I (5) _____ myself to use: silence, exile and cunning.

• Question No. 97

Select the most appropriate option to fill in blank number 2

Options :

1. Nevertheless
2. Sometimes
3. Whether
4. Presumably
- 5.

Answer : Whether

Direction:

In the following passage, some words have been deleted. Read the passage carefully and select the most appropriate option to fill in each blank.

I will tell you what I will do and what I will not do. I will not (1) _____ that in which I no longer believe, (2) _____ it calls itself my home, my fatherland, or my church: and I will try to (3) _____ myself in some mode of life or art as (4) _____ as I can and as wholly as I can, using for my defense the only arms I (5) _____ myself to use: silence, exile and cunning.

• Question No. 98

Select the most appropriate option to fill in blank number 3.

Options :

1. Sterilize
2. Disappear
3. Collect
4. Express
- 5.

Answer : Express

Direction:

In the following passage, some words have been deleted. Read the passage carefully and select the most appropriate option to fill in each blank.

I will tell you what I will do and what I will not do. I will not (1) _____ that in which I no longer believe, (2) _____ it calls itself my home, my fatherland, or my church: and I will try to (3) _____ myself in some mode of life or art as (4) _____ as I can and as wholly as I can, using for my defense the only arms I (5) _____ myself to use: silence, exile and cunning.

• Question No. 99

Select the most appropriate option to fill in blank number 4.

Options :

1. Freely
2. Bleakly
3. Pithily
4. Morbidly
- 5.

Answer : Freely

Direction:

In the following passage, some words have been deleted. Read the passage carefully and select the most appropriate option to fill in each blank.

I will tell you what I will do and what I will not do. I will not (1) _____ that in which I no longer believe, (2) _____ it calls itself my home, my fatherland, or my church; and I will try to (3) _____ myself in some mode of life or art as (4) _____ as I can and as wholly as I can, using for my defense the only arms I (5) _____ myself to use: silence, exile and cunning.

- Question No. 100

Select the most appropriate option to fill in blank number 5.

Options :

1. Effeminate
2. Allow
3. Behave
4. Caution
- 5.

Answer : Allow

[Attempt Mock Test Now](#)

All ixamBee Mock Test are FREE @ www.ixamBee.com