

• Question No. 1

Select the most appropriate option that can replace the **bold** word in the given sentence.

After a long discussion, Raj **get permission** from his parents to study Arts.

Options :

1. got the permission
2. getting permission
3. got a permission
4. get a permission
- 5.

Answer : got the permission

Direction:

In the following passage, some words have been deleted. Read the passage carefully and select the most appropriate option to fill in each blank.

• Question No. 2

The Earth cannot (1)_____ to the (2)_____ change in its ecosystem caused due to global warming. This (3)_____of interest between the environment and (4)_____ is causing a lot of damage to the earth.

Options :

1. 1. adopt, 2. plodding, 3. conflict, 4. capitalism
2. 1. adapt, 2. fast paced, 3. conflict, 4. capitalism
3. 1. adapt, 2. jogging, 3. conflict, 4. communism
4. 1. adopt, 2. plodding, 3. accord, 4. industrialism
- 5.

Answer : 1. adapt, 2. fast paced, 3. conflict, 4. capitalism

Direction:

In the following passage, some words have been deleted. Read the passage carefully and select the most appropriate option to fill in each blank.

• Question No. 3

The (1)_____ of nature calms our heart. The stillness and movement in nature both have a (2)_____ effect. The (3)_____ creativity of nature is an art. It is (4)_____ to experience solitude with nature.

Options :

1. 1. serenity, 2. hypnotising, 3. unfolding, 4. alluring
2. 1. tumult, 2. sleazy, 3. extending, 4. appealing
3. 1. endurance, 2. hypnotising, 3. unfolding, 4. imploring
4. 1. tumult, 2. fascinating, 3. quiescence, 4. alluring
- 5.

Answer : 1. serenity, 2. hypnotising, 3. unfolding, 4. alluring

• Question No. 4

Select the most appropriate meaning of the **bold** idiom.

On the issue of higher education, **Reena put her foot down**.

Options :

1. To be calm and stop something from happening
2. To be confused and stop something from happening
3. To use authority to stop something from happening
4. To be irritated and stop something from happening
- 5.

Answer : To use authority to stop something from happening

• Question No. 5

Select the most appropriate synonym of the **bold** word as used in the sentence .

The government's policies have **alienated** a large section of the society.

Options :

1. Separated
2. Deactivated
3. Validated
4. Divorce
- 5.

Answer : Separated

• Question No. 6

Select the sentence that has NO spelling error

Options :

1. They paid obeisance to the king.
2. They paid obiesance to the king.
3. They paid obeisance to the king.
4. They paid obesense to the king.
- 5.

Answer : They paid obeisance to the king.

Direction:

Sentences of a paragraph are given below in jumbled order. Arrange the sentences in the correct order to form a meaningful and coherent paragraph.

• Question No. 7

1. The light moved through me and embraced her as she lay there.
2. A brilliant light filled my virtual meditation room.
3. I became a funnel channelling the energy from them to her.
4. I could feel all the prayers that were being said for Dorothy at that moment, as if a thousand hands were holding mine as we formed a healing circle around her.

Options :

1. 1, 2, 3, 4
2. 2, 4, 3, 1
3. 3, 1, 4, 2
4. 4, 3, 1, 2
- 5.

Answer : 2, 4, 3, 1

• Question No. 8

Select the most appropriate meaning of the proverb.

Bury your head in the sand.

Options :

1. Refuse to confront or acknowledge a problem.
2. Refuse to forget about the past.
3. Be ashamed of something.
4. To work hard to reach somewhere.
- 5.

Answer : Refuse to confront or acknowledge a problem.

• Question No. 9

Select the most appropriate option that can replace the **bold** word in the given sentence.

The audience listened with **rapturously** as the school orchestra played.

Options :

1. rapture
2. raptures
3. raptured

4. rapturing

5.

Answer : rapture

Direction:

Sentences of a paragraph are given below in jumbled order. Arrange the sentences in the correct order to form a meaningful and coherent paragraph.

• Question No. 10

1. I knew I would never spend the money, or listen to the radio, and the electric train would never trundle down its track in my room.

2. I don't know why I even bothered, since I just gave them a joyless glance and pitched them to the corner of the room.

3. The pile was growing there: a transistor radio, a Polaroid camera, an elaborate electric train set and several sealed envelopes containing cash.

4. Sitting in the middle of the room next morning, I ripped open box after box of presents.

Options :

1. 4, 2, 3, 1

2. 3, 2, 1, 4

3. 2, 3, 1, 4

4. 1, 3, 2, 4

5.

Answer : 4, 2, 3, 1

• Question No. 11

Select the sentence that has NO spelling error.

Options :

1. She rapidly rose in the political hiarchy.

2. She rapidly rose in the political hiarechy.
3. She rapidly rose in the political heirarchy.
4. She rapidly rose in the political hierarchy.
- 5.

Answer : She rapidly rose in the political hierarchy.

• Question No. 12

Select the sentence that has NO spelling error.

Options :

1. The Major General leading the mutinears refused to give up control of the base even as the siege ended.
2. The Major General leading the mutineers refused to give up control of the base even as the siege ended.
3. The Major General leading the mutiniers refused to give up control of the base even as the siege ended.
4. The Major General leading the mutineers refused to give up control of the base even as the siege ended.
- 5.

Answer : The Major General leading the mutineers refused to give up control of the base even as the siege ended.

Direction:

In the following passage, some words have been deleted. Read the passage carefully and select the most appropriate option to fill in each blank.

• Question No. 13

Everyone (1)_____ with homework sometimes. So, it could be (2)_____ if you have big homework projects.

Everyone has something they struggle with. You could be great in Math and Science but struggle (3)_____ English or maybe you won't even have a problem with doing the homework, your problem could be (4)_____.

Options :

1. 1. attempts, 2. worst, 3. over, 4. idling
2. 1. clashes, 2. bad, 3. between, 4. delaying
3. 1. struggles, 2. worse, 3. through, 4. procrastination
4. 1. battles, 2. worse, 3. among, 4. dilly-dallying

5.

Answer : 1. struggles, 2. worse, 3. through, 4. procrastination

• Question No. 14

Select the most appropriate ANTONYM of the given word.

Beseech

Options :

1. Entreat
2. Adjure
3. Petition
4. Command
- 5.

Answer : Command

• Question No. 15

Select the most appropriate synonym of the **bold** word as used in the sentence.

No person is allowed to **transgress** beyond the line of control.

Options :

1. Offend
2. Seize
3. Trespass
4. Exempt
- 5.

Answer : Trespass

• Question No. 16

Select the most appropriate meaning of the proverb.

The forbidden fruit is the sweetest

Options :

1. To be drawn to things that one is prohibited from doing or having.
2. To crave for the food which is bad for health
3. To be drawn to do things which are of no use.
4. To choose something contrary to the choice of others.
- 5.

Answer : To be drawn to things that one is prohibited from doing or having.

Direction:

Read the given passage and answer the questions that follow.

1. The idea that coffee is bad for heart pops up periodically. It was found that regularly drinking very strong coffee could sharply increase cholesterol levels. Researchers even isolated fatlike chemicals, cafestol and kahweol, responsible for the rise.
2. It turned out that the European brewing method — boiling water sits on the coffee grounds for several minutes before straining — produces high concentrations of cafestol and kahweol. By contrast, the filter and percolation methods remove all but a trace of these chemicals. Moreover, the studies involved large amounts of coffee — five to six cups a day. Moderate coffee drinkers down only two cups.
3. Research has also shown that regular, moderate coffee drinking does not dangerously raise blood pressure. And studies have failed to substantiate fears that coffee might trigger abnormal heart rhythms (arrhythmias) in healthy people. 4. “For heart disease, I think the issue is closed,” says Meir Stampfer, an epidemiologist at Harvard who has studied many aspects of coffee and health. “Coffee drinking at reasonable levels is unrelated to heart risk.”
5. Evidence suggests that coffee may help fend off Parkinson’s disease. A 30-year study of 8000 Japanese-American men found that avid coffee drinkers had one-fifth the risk of those who didn’t drink the brew.
6. Scientists at Massachusetts General Hospital, USA, found indirect evidence that Caffeine the habit forming stimulant in coffee — may actually combat Parkinson’s disease. The caffeine seemed to protect mice brain cells from depletion of the nerve chemical dopamine — the problem underlying Parkinson’s disease in humans. However, these are preliminary findings; human studies have- not consistently supported caffeine’s protective role.

7. The studies on coffee and cancer have focussed on three organs – and are reassuring. You may remember a brief coffee scare in the early 1980s when a single study linked coffee with pancreatic cancer. A false alarm: Many studies since then have shown that the association is either extremely weak or non-existent.

8. If there's a connection between coffee and bladder cancer, it possibly applies just to coffee junkies. A reanalysis of ten European studies found an increased risk only among people who drank ten or more cups a day. And studies show that coffee seems to have no adverse influence on the risk of colon cancer.

9. Caffeine is such a powerful stimulant that the International Olympic Committee and the National Collegiate Athletic Association set limits on how much can remain in the blood during competition. In addition to boosting physical endurance, caffeine increases alertness and improves mood. The buzz may come at a price, though. People who drink more than they're used to may become restless and unable to sleep. Moreover, it's possible to become physically dependent on caffeine in days.

10. The question now arises: how much to drink? Those with heartburn and anxiety may want to see if cutting back coffee improves their condition. For most people, however, there's virtually no risk in consuming up to three normal cups a day. Harvard's Stampfer tries to keep his coffee drinking irregular enough to avoid habituation: "That way, I can get a buzz when I feel like it."

• Question No. 17

What do various studies NOT reveal about moderate coffee drinkers?

Options :

1. A connection between coffee and bladder cancer, probably applies just to coffee junkies.
2. Caffeine helps to boost physical stamina and increases alertness and improves mood.
3. Evidence suggests that coffee may help deter Parkinson's disease
4. The studies on coffee and cancer have focussed on three organs – and are rebarbative.
- 5.

Answer : The studies on coffee and cancer have focussed on three organs – and are rebarbative.

Direction:

Read the given passage and answer the questions that follow.

1. The idea that coffee is bad for heart pops up periodically. It was found that regularly drinking very strong coffee could sharply increase cholesterol levels. Researchers even isolated fatlike chemicals, cafestol and kahweol, responsible for the rise.
2. It turned out that the European brewing method — boiling water sits on the coffee grounds for several minutes before straining — produces high concentrations of cafestol and kahweol. By contrast, the filter and percolation methods remove all but a trace of these chemicals. Moreover, the studies involved large amounts of coffee — five to six cups a day. Moderate coffee drinkers down only two cups.
3. Research has also shown that regular, moderate coffee drinking does not dangerously raise blood pressure. And studies have failed to substantiate fears that coffee might trigger abnormal heart rhythms (arrhythmias) in healthy people.
4. “For heart disease, I think the issue is closed,” says Meir Stampfer, an epidemiologist at Harvard who has studied many aspects of coffee and health. “Coffee drinking at reasonable levels is unrelated to heart risk.”
5. Evidence suggests that coffee may help fend off Parkinson’s disease. A 30-year study of 8000 Japanese-American men found that avid coffee drinkers had one-fifth the risk of those who didn’t drink the brew.
6. Scientists at Massachusetts General Hospital, USA, found indirect evidence that Caffeine the habit forming stimulant in coffee — may actually combat Parkinson’s disease. The caffeine seemed to protect mice brain cells from depletion of the nerve chemical dopamine — the problem underlying Parkinson’s disease in humans. However, these are preliminary findings; human studies have not consistently supported caffeine’s protective role.
7. The studies on coffee and cancer have focussed on three organs — and are reassuring. You may remember a brief coffee scare in the early 1980s when a single study linked coffee with pancreatic cancer. A false alarm: Many studies since then have shown that the association is either extremely weak or non-existent.
8. If there’s a connection between coffee and bladder cancer, it possibly applies just to coffee junkies. A reanalysis of ten European studies found an increased risk only among people who drank ten or more cups a day. And studies show that coffee seems to have no adverse influence on the risk of colon cancer.
9. Caffeine is such a powerful stimulant that the International Olympic Committee and the National Collegiate Athletic Association set limits on how much can remain in the blood during competition. In addition to boosting physical endurance, caffeine increases alertness and improves mood. The buzz may come at a price, though. People who drink more than they’re used to may become restless and unable to sleep. Moreover, it’s possible to become physically dependent on caffeine in days.

10. The question now arises: how much to drink? Those with heartburn and anxiety may want to see if cutting back coffee improves their condition. For most people, however, there's virtually no risk in consuming up to three normal cups a day. Harvard's Stampfer tries to keep his coffee drinking irregular enough to avoid habituation: "That way, I can get a buzz when I feel like it."

• Question No. 18

Which of the following can be an appropriate title for the passage?

Options :

1. Disadvantages of Drinking Coffee
2. Ill Effects of Consuming Caffeine
3. Advantages of not Drinking Coffee
4. Coffee – Healthy Body And Mind
- 5.

Answer : Coffee – Healthy Body And Mind

Direction:

Read the given passage and answer the questions that follow.

1. The idea that coffee is bad for heart pops up periodically. It was found that regularly drinking very strong coffee could sharply increase cholesterol levels. Researchers even isolated fatlike chemicals, cafestol and kahweol, responsible for the rise.

2. It turned out that the European brewing method — boiling water sits on the coffee grounds for several minutes before straining — produces high concentrations of cafestol and kahweol. By contrast, the filter and percolation methods remove all but a trace of these chemicals. Moreover, the studies involved large amounts of coffee — five to six cups a day. Moderate coffee drinkers down only two cups.

3. Research has also shown that regular, moderate coffee drinking does not dangerously raise blood pressure. And studies have failed to substantiate fears that coffee might trigger abnormal heart rhythms (arrhythmias) in healthy people. 4. "For heart disease, I think the issue is closed," says Meir Stampfer, an epidemiologist at Harvard who has studied many aspects of coffee and health. "Coffee drinking at reasonable levels is unrelated to heart risk."

5. Evidence suggests that coffee may help fend off Parkinson's disease. A 30-year study of 8000 Japanese-American men found that avid coffee drinkers had one-fifth the risk of those who didn't drink the brew.
6. Scientists at Massachusetts General Hospital, USA, found indirect evidence that Caffeine the habit forming stimulant in coffee – may actually combat Parkinson's disease. The caffeine seemed to protect mice brain cells from depletion of the nerve chemical dopamine – the problem underlying Parkinson's disease in humans. However, these are preliminary findings; human studies have- not consistently supported caffeine's protective role.
7. The studies on coffee and cancer have focussed on three organs – and are reassuring. You may remember a brief coffee scare in the early 1980s when a single study linked coffee with pancreatic cancer. A false alarm: Many studies since then have shown that the association is either extremely weak or non-existent.
8. If there's a connection between coffee and bladder cancer, it possibly applies just to coffee junkies. A reanalysis of ten European studies found an increased risk only among people who drank ten or more cups a day. And studies show that coffee seems to have no adverse influence on the risk of colon cancer.
9. Caffeine is such a powerful stimulant that the International Olympic Committee and the National Collegiate Athletic Association set limits on how much can remain in the blood during competition. In addition to boosting physical endurance, caffeine increases alertness and improves mood. The buzz may come at a price, though. People who drink more than they're used to may become restless and unable to sleep. Moreover, it's possible to become physically dependent on caffeine in days.
10. The question now arises: how much to drink? Those with heartburn and anxiety may want to see if cutting back coffee improves their condition. For most people, however, there's virtually no risk in consuming up to three normal cups a day. Harvard's Stampfer tries to keep his coffee drinking irregular enough to avoid habituation: "That way, I can get a buzz when I feel like it."

• Question No. 19

Select the most appropriate ANTONYM of the **bold** word as used in the passage.

Caffeine is such a powerful **stimulant** that the International Olympic Committee and the National Collegiate Athletic Association set limits on how much can remain in the blood during competition.

Options :

1. Stimulus
2. Tonic
3. Energizer
4. Tranquilizer
- 5.

Answer : Tranquilizer

Direction:

Read the given passage and answer the questions that follow.

1. The idea that coffee is bad for heart pops up periodically. It was found that regularly drinking very strong coffee could sharply increase cholesterol levels. Researchers even isolated fatlike chemicals, cafestol and kahweol, responsible for the rise.

2. It turned out that the European brewing method — boiling water sits on the coffee grounds for several minutes before straining — produces high concentrations of cafestol and kahweol. By contrast, the filter and percolation methods remove all but a trace of these chemicals. Moreover, the studies involved large amounts of coffee — five to six cups a day. Moderate coffee drinkers down only two cups.

3. Research has also shown that regular, moderate coffee drinking does not dangerously raise blood pressure. And studies have failed to substantiate fears that coffee might trigger abnormal heart rhythms (arrhythmias) in healthy people. 4. "For heart disease, I think the issue is closed," says Meir Stampfer, an epidemiologist at Harvard who has studied many aspects of coffee and health. "Coffee drinking at reasonable levels is unrelated to heart risk."

5. Evidence suggests that coffee may help fend off Parkinson's disease. A 30-year study of 8000 Japanese-American men found that avid coffee drinkers had one-fifth the risk of those who didn't drink the brew.

6. Scientists at Massachusetts General Hospital, USA, found indirect evidence that Caffeine the habit forming stimulant in coffee — may actually combat Parkinson's disease. The caffeine seemed to protect mice brain cells from depletion of the nerve chemical dopamine — the problem underlying Parkinson's disease in humans. However, these are preliminary findings; human studies have not consistently supported caffeine's protective role.

7. The studies on coffee and cancer have focussed on three organs — and are reassuring. You may remember a brief coffee scare in the early 1980s when a single study linked coffee with pancreatic cancer. A false alarm: Many studies since then have shown that the association is either extremely weak or non-existent.

8. If there's a connection between coffee and bladder cancer, it possibly applies just to coffee junkies. A reanalysis of ten European studies found an increased risk only among people who drank ten or more cups a day. And studies show that coffee seems to have no adverse influence on the risk of colon cancer.

9. Caffeine is such a powerful stimulant that the International Olympic Committee and the National Collegiate Athletic Association set limits on how much can remain in the blood during competition. In addition to boosting physical endurance, caffeine increases alertness and improves mood. The buzz may come at a price, though. People who drink more than they're used to may become restless and unable to sleep. Moreover, it's possible to become physically dependent on caffeine in days.

10. The question now arises: how much to drink? Those with heartburn and anxiety may want to see if cutting back coffee improves their condition. For most people, however, there's virtually no risk in consuming up to three normal cups a day. Harvard's Stampfer tries to keep his coffee drinking irregular enough to avoid habituation: "That way, I can get a buzz when I feel like it."

• Question No. 20

Identify the tone of the passage.

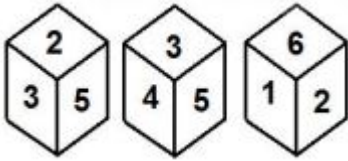
Options :

1. Laudatory
2. Informative
3. Humanistic
4. Speculative
- 5.

Answer : Informative

• Question No. 21

Shown below are two different positions of the same dice, whose six faces are marked with numbers from 1 to 6. Select the number which will be on the face opposite to the face marked '4'.



Options :

1. 2
2. 6
3. 3
4. 1
- 5.

Answer : 2

• Question No. 22

Select the number from the given options which can come in place of the question mark (?) in the following series.

13, 27, 56, 115, 234, ?

Options :

1. 473
2. 468
3. 466
4. 433
- 5.

Answer : 473

Direction:

Read the given statements and conclusions carefully. Considering the given information to be true even if it seems to be at variance from commonly known facts, decide which of the given conclusions logically follow from the statements.

• Question No. 23

Statement:

Some pilots are engineers.

No engineer is a teacher.

All students are teachers.

Conclusion:

I. Some teachers are students.

II. No student is engineer.

III. All pilots are teachers.

Options :

1. I, II, III all follow
2. Only II and III follow
3. Only I and III follow
4. Only I and II follow
- 5.

Answer : Only I and II follow

- Question No. 24

Four pairs of words have been given out of which three are consistent with each other in some manner while one is inconsistent with them. Select the odd word pair.

Options :

1. Football: Bogey
2. Cricket: Wide
3. Chess: Wazir
4. Kabaddi: Red
- 5.

Answer : Football: Bogey

• Question No. 25

Select a unique number for each letter in the following table according to which a meaningful word will be formed when the letters are arranged.

1	2	3	4	5	6	7	8
E	R	I	D	V	C	E	E

Options :

1. 4, 1, 7, 6, 3, 5, 8, 2
2. 4, 1, 6, 3, 7, 5, 8, 2
3. 4, 1, 6, 7, 3, 5, 2, 8
4. 4, 1, 6, 7, 3, 5, 8, 2
- 5.

Answer : 4, 1, 6, 7, 3, 5, 8, 2

• Question No. 26

Seven boxes numbered 1 to 7 are placed one above the other but not necessarily in the same order. Box-7 is placed immediately below box 5. Box-1 is the third box from the top. Only two boxes are placed below box-3. Box-4 is placed immediately above Box-1. Box-2 is not placed at the top. Box-3 is placed immediately above Box-5. Which box is placed immediately below box-6?

Options :

1. Box-5
2. Box-4
3. Box-2
4. Box-7
- 5.

Answer : Box-4

• Question No. 27

Select the term from the given alternatives which can come in place of the question mark (?) in the following series.

GNW-5, HQA-9, ITE-17, JWI-33, ?

Options :

1. KAN-65
2. KZM-67
3. KZN-66
4. KZM-65
- 5.

Answer : KZM-65

- Question No. 28

Select the number from the given options which can come in place of the question mark (?) in the following equation.

$$13.98 - (12.02 \div 4.002) + 24.99 \times 5.09 + 17.98 \div 2.95 = ?$$

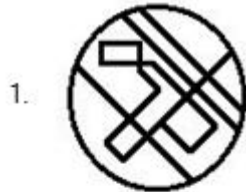
Options :

1. 122
2. 132
3. 148
4. 142
- 5.

Answer : 142

- Question No. 29

Select the option in which the figure given below is embedded. (Rotation of the shape is not allowed)



Options :

1.1

2.2

3.3

4.4

5.

Answer : 4

• Question No. 30

Select the option which is related to the fifth letter-cluster in the same way as the second letter-cluster is related to the first letter-cluster and the fourth letter-cluster is related to the third letter-cluster.

MAGIC : CIGAM :: FOUND : DNUOF : PRICE : ?

Options :

1. ECIRP
2. PCIER
3. CEIRP
4. ECIPR
- 5.

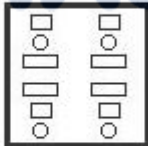
Answer : ECIRP

• Question No. 31

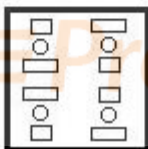
The following figures show the sequence of folding a transparent sheet of paper and the method of cutting the folded paper. What will this paper look like when opened?



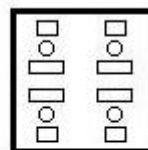
1.



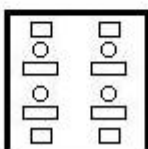
2.



3.



4.



Options :

- 1.1
- 2.2

3. 3

4. 4

5.

Answer : 3

• Question No. 32

In a certain code language, 'TORQUE' is written as '40-30-36-34-42-10' and 'CLAN' is written as '6-24-2-28'. How will 'FRIDAY' be written in that code language?

Options :

1. 12-38-18-8-2-40

2. 12-36-16-6-2-50

3. 12-36-18-8-2-50

4. 10-36-16-8-2-50

5.

Answer : 12-36-18-8-2-50

• Question No. 33

Which two signs should be interchanged to make the following equation correct?

$$14 \times 5 - 56 \div 7 + 35 = 43$$

Options :

1. + and \div

2. \times and $-$

3. + and $-$

4. \div and \times

5.

Answer : + and $-$

- Question No. 34

In a certain code language, 'FLOWER' is written as 'IVDLOU' and 'CLEANS' is written as 'HMZVOX'. How will 'PROFIT' be written in that code language?

Options :

1. GQUMIK
2. GRULIK
3. GRULHJ
4. HRULIJ
- 5.

Answer : GRULIK

Direction:

Three statements numbered I, II and III are given. Considering all the things given in the statements to be true, determine the cause and effect relationship between these statements and decide which statement(s) is/are the cause and which statement(s) is/are the effect.

- Question No. 35

Statement:

I. Job stress should top the list of stressors compared to other factors such as family responsibilities and personal health concerns.

II. Excessive amount of work and unrealistic deadlines make people more anxious and stressed.

III. Companies are providing fair salary as per the work profile.

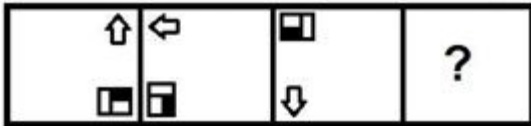
Options :

1. No cause and effect relationship exists between the statements.
2. Statement I is the cause and Statement I is its effect.
3. Statements I and III are the causes and statement II is the effect.
4. Statement I is the cause and statement II is its effect.
- 5.

Answer : Statement I is the cause and Statement I is its effect.

- Question No. 36

Select the figure that will come next in the following figure series.



1.



2.



3.



4.



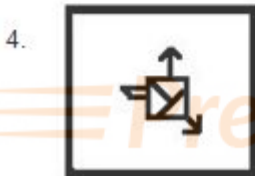

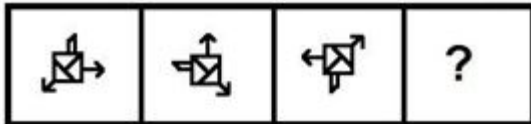
Options :

- 1.1
- 2.2
- 3.3
- 4.4
- 5.

Answer : 1

- Question No. 37

Select the figure that will come next in the following figure-series.



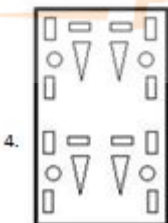
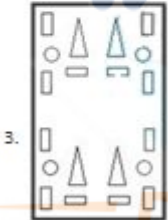
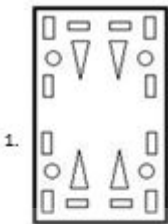
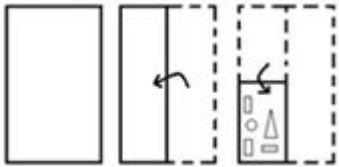
Options :

- 1.1
- 2.2
- 3.3
- 4.4
- 5.

Answer : 1

- Question No. 38

The following figures show the sequence of folding a transparent sheet of paper and the method of cutting the folded paper. What will this paper look like when opened?



Options :

- 1.1
- 2.2
- 3.3
- 4.4
- 5.

Answer : 1

- Question No. 39

If $G > T$, $H < N$, then which of the following conclusions will not be correct?

Options :

1. $N < H$
2. $T > M$
3. $R < M$
4. $G > H$
- 5.

Answer : R < M

- Question No. 40

Select the correct mirror image of the given combination when the mirror is placed on 'PQ' as follows.

2 g h a Z 7 |
P
Q

1. 7 Z a h g 2
2. 7 Z a h g 2
3. 7 Z a h g 2
4. 7 Z a h g 2

Options :

1. 1
2. 2
3. 3
4. 4
- 5.

Answer : 3

- Question No. 41

If the least common multiple (LCM) and greatest common multiple (HCF) of two numbers are 96 and 8 respectively, and their sum is 56, then the sum of the reciprocals of those two numbers is _____.

Options :

1. $7/96$
2. $7/69$
3. $8/69$
4. $5/96$
- 5.

Answer : $7/96$

- Question No. 42

The marked price of a book was ₹900. A person purchased a book for ₹ 769.50 after receiving two consecutive discounts, the first discount being 5%. What was the second discount rate?

Options :

1. 11%
2. 10%
3. 9.5%
4. 10.5%
- 5.

Answer : 10%

- Question No. 43

Last year, the ratio of salaries of Arun and Bhargav was 4 : 5. If, in the current year, the salary of each of them is increased by ₹ 5,000, the new ratio becomes 9 : 11. What is Arun's salary in the current year?

Options :

1. ₹50,000
2. ₹55,000
3. ₹60,000
4. ₹45,000
- 5.

Answer : ₹50,000

• Question No. 44

In an election between two candidates, 20% of voters did not vote, while 5% of the votes cast were declared invalid. If one candidate got 9880 votes, which were 65% of the valid votes, then find the number of valid votes received by the other candidate.

Options :

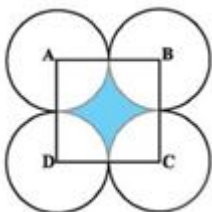
1. 3990
2. 5320
3. 4788
4. 5852
- 5.

Answer : 5320

• Question No. 45

In the following figure, ABCD is a square of side 16.8 cm. With centers A, B, C and D, four circles are drawn such that each circle externally touches two of the remaining three circles. Find the area of the shaded region.

(Use $\pi = 22/7$.)



Options :

1. 61.44 cm²
2. 60.48 cm²
3. 63.36 cm²
4. 62.40 cm²
- 5.

Answer : 60.48 cm²

• Question No. 46

The graphs of the linear equations $3x - y + 5 = 0$ and $2x + 3y - 4 = 0$ intersect at the point P(\square \square). Point P also lies on the graph of _____.

Options :

1. $4x + 3y + 2 = 0$
2. $4x + 3y - 1 = 0$
3. $5x + 2y + 1 = 0$
4. $5x - 2y - 3 = 0$
- 5.

Answer : $5x + 2y + 1 = 0$

• Question No. 47

Sarita's income is 20% more than Mamta's income and Sarita's income is ₹42,000. Mamta's savings are ₹12,000, which is 20% more than Sarita's savings. What is the difference (in ₹) between the expenditure of Sarita and Mamta?

Options :

1. 9,000
2. 9,500
3. 7,500

4. 8,000

5.

Answer : 9,000

- Question No. 48

If $a + b = 20$ and $ab = 15$, then the value of $(a - b)^2$ is equal to _____.

Options :

1. 240

2. 340

3. 740

4. 440

5.

Answer : 340

- Question No. 49

The sides of a triangular park are 72 m, 154 m and 170 m. Its area is equal to the area of a circular garden. What will be the cost (in ₹) of fencing the garden at the rate of ₹80 per m^2 ?

(Use $\pi = 22/7$.)

Options :

1. 24,640

2. 19,360

3. 17,600

4. 21,120

5.

Answer : 21,120

- Question No. 50

At a simple interest rate of 7.5% per annum, a sum becomes ₹8,625 after two years. What is simple interest?

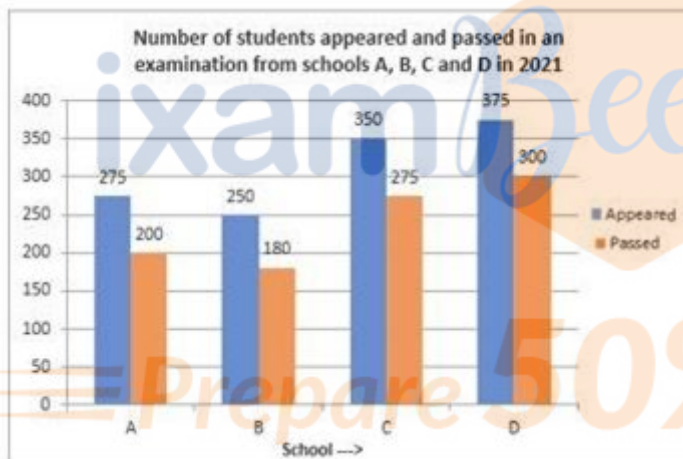
Options :

1. ₹1,125
2. ₹1,335
3. ₹1,275
4. ₹1,405
- 5.

Answer : ₹1,125

Direction:

Study the following graph and answer the question that follows.



- Question No. 51

What is the ratio of the average number of students appeared from schools A, B and D to the total number of students passed from schools B and D?

Number of students appeared and passed an examination from schools A, B, C and D in 2021

Options :

1. 2 : 3
2. 5 : 8
3. 3 : 5

4. 5 : 6

5.

Answer : 5 : 8

• Question No. 52

A library has an average of 221 visitors on Sunday, an average of 249 visitors on Saturday and an average of 'x' visitors on other days of the week in the month of January of the year starting from Thursday. If the average number of visitors per day in the entire month is 195, then what is the value of 'x'?

Options :

1. 181

2. 177

3. 178

4. 179

5.

Answer : 178

• Question No. 53

From the following table, find the ratio between the average marks obtained by Ramesh and the average marks obtained by Mahesh.

विद्यार्थी का नाम	अंग्रेज़ी	गणित	विज्ञान
रमेश	63	65	55
सुरेश	45	66	58
महेश	62	54	67
गणेश	49	98	73

Options :

1. 2 : 1
2. 1 : 1
3. 3 : 2
4. 1 : 2
- 5.

Answer : 1 : 1

- Question No. 54

$$\frac{\tan\theta + \cot\theta}{1 + \cos\theta - \sin^2\theta} \times \frac{\cot\theta(1 + \cos\theta)}{\sqrt{\sec^2\theta + \operatorname{cosec}^2\theta}}, \quad 0^\circ < \theta < 90^\circ, \quad \underline{\hspace{2cm}} \text{ के बराबर है।}$$

Options :

1. $\tan\theta$
2. $\sec\theta$
3. $\cot\theta$
4. $\operatorname{cosec}\theta$
- 5.

Answer : $\operatorname{cosec}\theta$

• Question No. 55

A shopkeeper bought 50 kg of sugar at the rate of ₹36 per kg and mixed it with 100 kg of sugar at the rate of ₹39 per kg. At what rate per kg should he sell the mixture to earn a profit of 9%?

Options :

1. ₹40.32
2. ₹43.35
3. ₹42.56
4. ₹41.42
- 5.

Answer : ₹41.42

• Question No. 56

Arjun covers one-third of a certain distance at a speed of 45 km/h to reach his destination; It covers half of the remaining distance at a speed of 60 km/h and the remaining distance at a speed of 90 km/h. What is his average speed throughout this period?

Options :

1. 55 km/h
2. 65 km/h
3. 60 km/h
4. 50 km/h
- 5.

Answer : 60 km/h

• Question No. 57

The ratio of the speed of a boat in still water to the speed of the current is 11 : 4. The boat takes 72 minutes to travel 54 km downstream.

How much time (in hours) will the boat take to travel 63 km downstream and 42 km upstream?

Options :

1. 3.5
2. 4
3. 3
4. 3.4
- 5.

Answer : 3.4

• Question No. 58

What is the compound interest on ₹64,000 at 12% per annum for 2 years, interest compounded annually?

Options :

1. ₹16,281.60
2. ₹16,433.50
3. ₹16,352.30
4. ₹16,564.40
- 5.

Answer : ₹16,281.60

• Question No. 59

A can do a work in 24 days. B is 20% less efficient than A. Both A and B worked together for 4 days. B and C working together completed the remaining work in 14 days. In how much time can A, B and C together complete 11/12th of the original work?

Options :

1. 12 Day
2. 8 Day
3. 9 Day

4. 10 Day

5.

Answer : 10 Day

• Question No. 60

One-sixth of a water tank is full. Pipes A and B can fill the tank in 6 hours and 9 hours respectively. If both the pipes are opened, how much time will it take to fill the remaining tank completely?

Options :

1. 4 hours

2. 6 hours

3. 5 hours

4. 3 hours

5.

Answer : 3 hours

• Question No. 61

Which of the following is the purpose of keyboard shortcut Ctrl+F in MS-Word?

Options :

1. Opening the Font Box

2. Opening the Paragraph dialog box

3. Selecting an open document

4. Open the Find box

5.

Answer : Open the Find box

• Question No. 62

Arrange the following computers according to the chronological order of their generation.

- i) ENIAC
- ii) PDP-8
- iii) NCR 395
- iv) Apple II



Options :

- 1. ii, i, iii, iv
- 2. iv, iii, ii, i
- 3. i, ii, iii, iv
- 4. i, ii, iv, iii
- 5.

Answer : i, ii, iii, iv

• Question No. 63

Match List-I (MS-Word 365 option icon) with List-II (Meanings), and select the correct option.

सूची -I (MS Word 365 विकल्प आइकॉन)	सूची -II (अर्थ)
a) 	i) क्लीयर ऑल फार्मेटिंग (Clear all formatting)
b) 	ii) ओरिएंटेशन (Orientation)
c) 	iii) कॉलम (Columns)
d) 	iv) टेक्स्ट कलर हाइलाईटर (Text color highlighter)

Options :

- 1. a-ii, b-iv, c-iii, d-i
- 2. a-ii, b-iii, c-iv, d-i

3. a-iv, b-iii, c-i, d-ii

4. a-iii, b-ii, c-iv, d-i

5.

Answer : a-ii, b-iii, c-iv, d-i

• Question No. 64

Identify whether the following statements are true or false

i) In MS-Word 365, hanging indent sets the first line of a paragraph by setting it at the margin, and then indents each subsequent line of the paragraph.

ii) MS-Word 365, the purpose of toggle case is to start each word in lower case and the rest in upper case.

iii) In MS-Word 365, the popup dialog box 'Define New Bullet' under the 'Bullet' option in the 'Paragraph' group has only two buttons, 'Symbol' and 'Picture'.

Options :

1. i- correct, ii- correct, iii- correct

2. i- correct, ii- correct, iii- wrong

3. i- correct, ii- wrong, iii- wrong

4. i- wrong, ii- correct, iii- correct

5.

Answer : i- correct, ii- wrong, iii- wrong

• Question No. 65

Which of the following options are available under 'Searching Windows' in Windows 10 Settings?

i-Classic

ii-Enhanced

iii-Compact

iv-Mosaic

v-Compress

vi-Normal

Options :

1. Only ii, iii and iv
2. Only i and ii
3. Only i, ii and iii
4. Only v and vi
- 5.

Answer : Only i and ii

• Question No. 66

Match List-I (Excel formula/expression) with List-II (Output) and select the correct option.

सूची -I (Excel फार्मूला/व्यंजक)	सूची -II (आउटपुट)
a) =REPLACE("1101010",6,2,"11")	i) 4
b) =(11+1010101)	ii) 1101011
c) = DEC2HEX(10)	iii) 1010112
d) =BIN2DEC(100)	iv) A

Options :

1. a-iv, b-iii, c-i, d-ii
2. a-ii, b-iv, c-iii, d-i
3. a-ii, b-iii, c-iv, d-i
4. a-iii, b-ii, c-iv, d-i
- 5.

Answer : a-ii, b-iii, c-iv, d-i

• Question No. 67

In MS-Excel 365, which of the following options is/are correct for naming the worksheet?

- i) The keyboard shortcut to add a new sheet in MS-Excel2010 is Shift + F11.
- ii) / \ ? in the name of the worksheet. * : can be any character from [].
- iii) The worksheet can be renamed by right clicking on the sheet tab, clicking on Rename and typing the new name.
- iv) The name of the worksheet can be changed by double clicking on the Worksheet tab and typing the new name.

Options :

- 1. Only iii and iv
- 2. Only iv
- 3. Only i, iii and iv
- 4. Only ii and iii
- 5.

Answer : Only i, iii and iv

• Question No. 68

Identify whether the following statements are true or false

- i) 'Microsoft Outlook' is an email application software.
- ii) 'Junk Mail' is unsolicited mail consisting mainly of promotional materials, catalogs and requests for donations.
- iii) E-mail header contains the following parts: From, Date, To, Subject

Options :

- 1. i- right, ii- right, iii- wrong
- 2. i- right, ii- right, iii- right
- 3. i- wrong, ii- right, iii- right
- 4. i- right, ii- wrong, iii- right

5.

Answer : i- right, ii- right, iii- right

• Question No. 69

Identify whether the following statements are true or false

i) ASCII code stands for American Standard Code for Information Interchange.

ii) The word PAN means Private Area Network.

iii) The word LED stands for Light Emitting Display.

Options :

1. i- correct, ii- wrong, iii- correct

2. i- correct, ii- correct, iii- correct

3. i- correct, ii- wrong, iii- wrong

4. i- wrong, ii- correct, iii- correct

5.

Answer : i- correct, ii- wrong, iii- wrong

• Question No. 70

Match List-I (abbreviation) with List-II (full name) and select the correct option.

सूची -I (संक्षिप्त शब्द)	सूची -II (पूरा नाम)
a) CD-ROM	i) Printed Circuit Board (प्रिंटेड सर्किट बोर्ड)
b) EEPROM	ii) Compact Disk Read only Memory (कम्पैक्ट डिस्क रीड ओनली मेमोरी)
c) USB	iii) Electrically Erasable and Programmable Read only Memory (इलेक्ट्रिकली इरेजेबल एंड प्रोग्रामेबल रीड ओनली मेमोरी)
d) PCB	iv) Universal Serial Bus (यूनिवर्सल सीरीज़ बस)

Options :

1. a-iii, b-ii, c-iv, d-i
2. a-ii, b-iv, c-iii, d-i
3. a-iv, b-iii, c-i, d-ii
4. a-ii, b-iii, c-iv, d-i
- 5.

Answer : a-ii, b-iii, c-iv, d-i

- Question No. 71

Identify whether the following statements are true or false

- i) Common Gateway Interface (CGI) script is a specification for transferring information between a web server and a CGI program designed to receive and return data.
- ii) HTTP is an Internet programming language.
- iii) The term Web Bot applies to programs/applets (macros and intelligent agents) used on the Internet, such bots perform repetitive tasks, such as posting messages to multiple newsgroups. Or searching for information.

Options :

1. i- right, ii- right, iii- right
2. i- right, ii- wrong, iii- right
3. i- right, ii- right, iii- wrong
4. i- wrong, ii- right, iii- right
- 5.

Answer : i- right, ii- wrong, iii- right

• Question No. 72

Identify whether the following statements are true or false

- i) Assembly language is a low-level programming language.
- ii) Interpreter is a program that translates each statement in a programming language into machine code and operates on it.
- iii) The output of the assembler is in binary code.

Options :

1. i- true, ii- true, iii- false
2. i- true, ii- true, iii- true
3. i- false, ii- true, iii- true
4. i- true, ii- false, iii- true
- 5.

Answer : i- true, ii- true, iii- true

• Question No. 73

Identify whether the following statements are true or false

- i) The MS-Word 365 Clipboard stores text and graphics that you copy or cut from somewhere, and it lets you paste the stored items into another Office file.

ii) In MS-Word 365, using Watermarks adds a logo, an image, or other identifying mark to the pages of your document, protecting your content by inserting text or images over the content, and protecting your project. Defines the conditions or safety requirements.

Options :

1. i- wrong, ii- correct
2. i- correct, ii- wrong
3. i- correct, ii- correct
4. i- wrong, ii- wrong
- 5.

Answer : i- correct, ii- correct

• Question No. 74

List-. Match (Steps of Compiler Design) with List-II (Description) and select the correct answer.

सूची-1 (कंपाइलर डिजाइन के चरण)	सूची-II (विवरण)
a) ऑप्टिमाइजेशन	i) यह फेज़, सोर्स कोड का एक मध्यवर्ती निरूपण उत्पन्न करता है जिसे मशीन कोड में सरलता से अनुवादित किया जा सकता है।
b) सिंटैक्स विश्लेषण	ii) यह फेज़, निर्मित मशीन कोड का कार्यप्रदर्शन बेहतर बनाने के लिए मध्यवर्ती कोड में ऑप्टिमाइजेशन की तकनीकों को लागू करता है।
c) सीमैटिक विश्लेषण	iii) इस चरण में, कंपाइलर सोर्स कोड के सिंटैक्स की जांच करके यह सुनिश्चित करता है कि यह प्रोग्रामिंग की भाषा के नियमों के अनुरूप है।
d) मध्यवर्ती कोड निर्मित करना	iv) इस चरण में, कंपाइलर सोर्स कोड के अर्थ की जांच करता है ताकि यह सुनिश्चित हो सके कि यह सार्थक है।

Options :

1. a-iv, b-iii, c-i, d-ii
2. a-ii, b-iv, c-iii, d-i
3. a-iii, b-ii, c-iv, d-i
4. a-ii, b-iii, c-iv, d-i

5.

Answer : a-ii, b-iii, c-iv, d-i

• Question No. 75

Identify whether the following statements are true or false

□ If the values in cells A15, A16 are 4, 3 respectively, and the formula = A15^A16 is written in cell A17, then the cell value in A17 will be 64.

ii) In MS-Excel 365, the NETWORKDAYS() function returns the number of complete working days between two dates.

iii) In MS-Excel 365, radar chart is also called spider chart or web chart.

Options :

1. i- true, ii- true, iii- false

2. i- true, ii- true, iii- true

3. i- false, ii- true, iii- true

4. i- true, ii- false, iii- true

5.

Answer : i- true, ii- true, iii- true

• Question No. 76

Identify the incorrect statement among the following.

Options :

1. The spelling and grammar tool identifies words with capitalization problems.

2. The icon in the 'Review' tab in MS-Word 365 is used for Word Count.

3. To start checking spelling and grammar in your MS-Word 365 document, simply press F7.

4. The spelling and grammar group contains three options: a) Spelling b) Grammar c) Spelling and Grammar.

5.

Answer : The spelling and grammar group contains three options: a) Spelling b) Grammar c) Spelling and Grammar.

• Question No. 77

Identify whether the following statements are true or false:

- i) In Windows 10, 'Remote Desktop' lets you connect and control the computer from a remote device using the Remote Desktop client.
- ii) In Windows 10, 'Power & Sleep' option is used to save energy and battery life.
- iii) When you copy or cut something in Windows, it gets copied to the Clipboard for you to paste.

Options :

- 1. i- right, ii- right, iii- wrong
- 2. i- right, ii- wrong, iii- right
- 3. i- wrong, ii- right, iii- right
- 4. i- right, ii- right, iii- right
- 5.

Answer : i- right, ii- right, iii- right

• Question No. 78

Which of the following keyboard shortcuts is used to open the 'Find and Replace' dialog window in MS-Word?

Options :

- 1. Ctrl + H
- 2. Shift + F
- 3. Ctrl + Alt + F
- 4. Alt + H
- 5.

Answer : Ctrl + H

- Question No. 79

Match List-I (terms) with List-II (description/example) and select the correct option.

सूची -I (पद)	सूची-II (विवरण/उदाहरण)
a) ईमेल स्पैमिंग अटैक (Email spamming attacks)	i) Google द्वारा प्रदान की जाने वाली निःशुल्क ईमेल सेवा।
b) ईमेल प्रोटोकॉल (Email protocol)	ii) बड़ी संख्या में इंटरनेट उपयोगकर्ताओं को अंपापुंध टंग से एक ही संदेश भेजना।
c) ईमेल पता (Email address)	पोस्टऑफिस प्रोटोकॉल (POP)
d) जीमेल (Gmail)	iv) ana.pla1010@send.com

Options :

1. a-ii, b-iii, c-iv, d-i
2. a-iii, b-ii, c-iv, d-i
3. a-ii, b-iv, c-iii, d-i
4. a-ii, b-iii, c-i, d-iv
- 5.

Answer : a-ii, b-iii, c-iv, d-i

- Question No. 80

What does the letter 'D' mean in the word ISDN?

Options :

1. Digital
2. Data
3. Detect
4. Dial
- 5.

Answer : Digital

- Question No. 81

P, Q, R, S are friends.

- P and Q play football and cricket.
- Q and R play cricket and hockey.
- P and S play baseball and football.
- R and S play hockey and baseball.

Which game do Q, R and S play?

Options :

1. Hockey
2. Cricket
3. Football
4. baseball
- 5.

Answer : Hockey

- Question No. 82

If the following words are arranged according to their order in the English dictionary, which of the following words will come last?

- 1) Shearings
- 2) Sheaflike
- 3) Sheathier
- 4) Sheatfish
- 5) Shearling

Options :

1. 3

2. 4

3. 1

4. 5

5.

Answer : 3

- Question No. 83

Identify the number which does not belong to the following series.

5 20 50 65 95 115 140

Options :

1. 20

2. 65

3. 140

4. 115

5.

Answer : 115

- Question No. 84

Below are given some parts of a sentence in jumbled order. Arrange the parts in the correct order to form a meaningful sentence.

1) to white, beautiful beaches

2) for swimming and relaxing

3) Mandvi Beach is host

4) with amazing seawater

Options :

1. 3, 1, 4, 2
2. 3, 4, 2, 1
3. 3, 1, 2, 4
4. 3, 2, 4, 1
- 5.

Answer : 3, 1, 4, 2

• Question No. 85

Kapu beach is in Karnataka, near Udupi and is very popular with the students on Manipal.

Options :

1. Into
2. Of
3. Off
4. To
- 5.

Answer : Of

• Question No. 86

Select the number from the given options which will come in place of the question mark (?) in the following series.

6, 12, 14, 28, 30, 60, ?

Options :

1. 120
2. 62
3. 58
4. 80
- 5.

Answer : 62

Direction:

Read the given statements and conclusions carefully. Assuming that the information given in the statements is true even if it seems to be at variance from commonly known facts, decide whether the given. Which of the conclusions logically follows from the statements?

- Question No. 87

Statement:

A. Some leopards are buffaloes.

B. Some deer are mare.

C. All mare are fawn.

Conclusion:

(I) Some deer are buffalo.

(II) Some fawn are deer.

(III) Some leopards are mare.

Options :

1. Only conclusion I follows
2. Only conclusion II follows
3. none of the conclusions follow
4. Either conclusion I or III follows
- 5.

Answer : Only conclusion I follows

Direction:

Read the given statements and conclusions carefully. Decide which of the given conclusions logically follows from the statements.

- Question No. 88

Statement:

The most precious thing for a child is the attention given to him by his parents; Therefore, the emotional needs of children should be given priority for their proper development.

Conclusion:

I. Emotional neglect can cause autism in children.

II. Emotional neglect of children from the caregiver can hinder their proper development.

Options :

1. दोनों नषिकर्ष अनुसरण करते हैं
2. न तो नषिकर्ष । और न ही ॥ अनुसरण करता है
3. केवल नषिकर्ष ॥ अनुसरण करता है
4. केवल नषिकर्ष । अनुसरण करता है
- 5.

Answer : केवल नषिकर्ष ॥ अनुसरण करता है

• Question No. 89

From the given options, select the alphanumeric group which will come in place of the question mark (?) in the following series.

30, 5M, 8K, 131, ?

Options :

1. 20F
2. 20G
3. 22G
4. 18G
- 5.

Answer : 20G

• Question No. 90

Select the misspelled word.

Options :

1. conscious
2. contention
3. consensious
4. conscience
- 5.

Answer : consensious

- Question No. 91

As the bomb exploded, students ran **helter-skelter**.

Options :

1. In great fear
2. In hurry
3. In astonishment
4. A disorderly haste
- 5.

Answer : A disorderly haste

- Question No. 92

Select the option that shows the correct arrangement of the given words in the order in which they appear in the English dictionary.

1. Feather
2. Fearful
3. Feast
4. Fearless

5. Feature

6. Fears

Options :

1. 2, 4, 6, 3, 1, 5

2. 2, 4, 6, 1, 3, 5

3. 2, 4, 3, 6, 1, 5

4. 2, 4, 6, 3, 5, 1

5.

Answer : 2, 4, 6, 3, 1, 5

• Question No. 93

Which of the four words given in the options cannot be formed using each letter of the word given below only once?

SENTENCE

Options :

1. SENNET

2. TENSES

3. CETES

4. SCENT

5.

Answer : TENSES

• Question No. 94

Below are given some parts of a sentence in jumbled order. Arrange the parts in the correct order to make a meaningful sentence.

1) land area is threatened

2) seismic risks.

3) by moderate to severe

4) over 59% of India's

Options :

1. 4, 1, 3, 2

2. 1, 3, 2, 4

3. 2, 3, 1, 4

4. 3, 2, 1, 4

5.

Answer : 4, 1, 3, 2

• Question No. 95

In a certain code language, 'SCAN' is coded as '8' and 'PASTE' is coded as '10'. How will 'PIN' be coded in that language?

Options :

1. 9

2. 3

3. 12

4. 6

5.

Answer : 6

• Question No. 96

Study the given pattern carefully and select the number that can replace the question mark (?) from the given alternatives.

8	66	2
4	20	4
5	28	?

Options :

1. 3
2. 4
3. 1
4. 2
- 5.

Answer : 3

- Question No. 97

In a certain code language, 'BRINJAL' is written as 'RBINLJA'. How will 'TRANCES' be written in that code language?

Options :

1. RTANSCE
2. CRNATES
3. ACRTESN
4. ASECRT
- 5.

Answer : RTANSCE

- Question No. 98

The king ordered that the insolent carpenter should be put into prison.

Options :

1. insolent
2. orrdered
3. prisen

4. carpinter

5.

Answer : insolent

- Question No. 99

The study of languages is called.

Options :

1. philology

2. Ornithology

3. psephology

4. theology

5.

Answer : philology

- Question No. 100

Select the option which is related to the third word in the same way as the second word is related to the first word.

Doctor : Hospital :: Artist : ?

Options :

1. industry

2. Theater

3. Film

4. actor

5.

Answer : Theater

[Attempt Mock Test Now](#)