

Direction:

Fill in the blanks with the most suitable word from the options.

• Question No. 1

To counter this a cross party committee of MP's suggested _____ subsidized housing to teachers willing to work in deprived schools.

Options :

1. gave
2. to give
3. given
4. giving
5. None of these

Answer : giving

Direction:

Fill in the blanks with the most suitable word from the options.

• Question No. 2

To avoid _____ its audience by having any dead air at all, between songs in individual sets it'll cut away to interviews with other bands.

Options :

1. panic
2. panicked
3. panicking
4. to panic
5. None of these

Answer : panicking

Direction:

Fill in the blanks with the appropriate phrasal verbs. If none of the given phrasal verbs are correct, choose E, that is 'None of these' as the answer.

• Question No. 3

Its no use asking them what happened because they will _____ a story, which will be believed by everyone.

Options :

1. make up
2. give up
3. show up
4. end up
5. None of these

Answer : make up

Direction:

Fill in the blanks with the most suitable word from the options.

• Question No. 4

Despite several British attempts to persuade them, the Dutch Republic refused _____ their former allies in the war and remained neutral.

Options :

1. to join
2. joining
3. joined
4. join
5. None of these

Answer : to join

Direction:

Fill in the blanks with the most suitable word from the options.

• Question No. 5

The alien enemies' verbal taunts and blurbs also start sounding like an annoying _____ record the deeper you get into the game.

Options :

1. break
2. broke
3. to break
4. broken
5. None of these

Answer : broken

Direction:

Read each sentence to find out whether there is any grammatical error in it. The error, if any, will be in one part of the sentence. Mark the part with the error as your answer. If there is no error, mark 'No error' as your answer (Ignore the errors of punctuation, if any).

• Question No. 6

Through his connections (A)/with influential figures in the media, (B)/he was able to (C)/illicit favourable press for his clients (D).

Options :

1. Through his connections
2. with influential figures in the media
3. he was able to
4. illicit favourable press for his clients
5. No error

Answer : illicit favourable press for his clients

Direction:

Read each sentence to find out whether there is any grammatical error in it. The error, if any, will be in one part of the sentence. Mark the part with the error as your answer. If there is no error, mark 'No error' as your answer (Ignore the errors of punctuation, if any).

• Question No. 7

Granted, with the roll call (A)/of the most industrious pieces of (B)/golf real estate on their books (C)/they've already got a bit of a head start (D).

Options :

1. Granted, with the roll call
2. of the most industrious pieces of
3. golf real estate on their books
4. they've already got a bit of a head start
5. No error

Answer : of the most industrious pieces of

Direction:

Read each sentence to find out whether there is any grammatical error in it. The error, if any, will be in one part of the sentence. Mark the part with the error as your answer. If there is no error, mark 'No error' as your answer (Ignore the errors of punctuation, if any).

• Question No. 8

Diana was a young (A)/mission school teacher convinced (B)/of her vacation to provide (C)/support for her schoolgirl pupils (D).

Options :

1. Diana was a young
2. mission school teacher convinced
3. of her vacation to provide
4. support for her schoolgirl pupils
5. No error

Answer : of her vacation to provide

Direction:

Directions: Read each sentence to find out whether there is any grammatical error in it. The error, if any, will be in one part of the sentence. Mark the part with the error as your answer. If there is no error, mark 'No error' as your answer (Ignore the errors of punctuation, if any).

• Question No. 9

I was able to dive a hard bargain (A)/and get a higher salary and an extra week (B)/of vacation because I had (C)/a lot more experience than the other candidates (D).

Options :

1. I was able to dive a hard bargain
2. and get a higher salary and an extra week
3. of vacation because I had
4. a lot more experience than the other candidates
5. No error

Answer : I was able to dive a hard bargain

Direction:

In each of the questions given below, a sentence is given with three words in bold. Three answer choices are given giving replacements to the words in bold. Select the option that gives the correct combination of the answer choices. In case, the sentence is correct as it is, select 'No Improvement' as the answer.

• Question No. 10

The biggest movement to **protect** Kannada learning dates back to the 1980s, when the Gokak Committee submitted its report in 1981 that recommended, **against** other things, introducing Kannada in schools and giving it **privacy**.

1. promote, among, primacy
2. boost, amongst, importance
3. encourage, with, primary

Options :

1. Only 2
2. Both 1 and 2
3. Both 2 and 3
4. 1, 2 and 3
5. No improvement required

Answer : Both 1 and 2

Direction:

In the given passage, there are blanks, each of which has been numbered. Against each five words are suggested, one of which fits the blank appropriately. Find out the appropriate word in each case.

The government has launched a portal for better (11) _____ among the ministries of power, coal and Indian Railways for coal supply to power plants.

The Prakash portal – ‘Power Rail Koyla Availability through Supply Harmony’ – will enable all (12) _____ to monitor coal right from mines to transportation, power Secretary SC Garg said. This is a (13) _____ project in ensuring adequate availability optimum utilization of coal at thermal power plants, Coal Secretary Anil Jain said.

The Portal is designed to help in (14) _____ -- and monitoring entire coal supply chain for power plants, viz - - coal stock at supply end (mines), coal quantities/ rakes planned, coal quantity in transit and coal availability at power generating station. The present (15) _____ to review coal supply situation consists of an inter-ministerial group which has officials from ministries of Power, Coal, Railways, CEA, power utilities and coal companies. This group holds weekly meetings to review coal supply situation as well as railway logistics.

- Question No. 11

Choose the most appropriate answer for (12).

Options :

1. Copyholder
2. freehold
3. withholder
4. stakeholders
5. stallholder

Answer : stakeholders

Direction:

In the given passage, there are blanks, each of which has been numbered. Against each five words are suggested, one of which fits the blank appropriately. Find out the appropriate word in each case.

The government has launched a portal for better (11) _____ among the ministries of power, coal and Indian Railways for coal supply to power plants.

The Prakash portal – ‘Power Rail Koyla Availability through Supply Harmony’ – will enable all (12) _____ to monitor coal right from mines to transportation, power Secretary SC Garg said. This is a (13) _____ project in ensuring adequate availability optimum utilization of coal at thermal power plants, Coal Secretary Anil Jain said.

The Portal is designed to help in (14) _____ -- and monitoring entire coal supply chain for power plants, viz - - coal stock at supply end (mines), coal quantities/ rakes planned, coal quantity in transit and coal availability at power generating station. The present (15) _____ to review coal supply situation consists of an inter-ministerial group which has officials from ministries of Power, Coal, Railways, CEA, power utilities and coal companies. This group holds weekly meetings to review coal supply situation as well as railway logistics.

• Question No. 12

Choose the most appropriate answer for (11).

Options :

1. Demotion
2. Relegation
3. Coordination
4. Subordination
5. Delegation

Answer : Coordination

Direction:

In the given passage, there are blanks, each of which has been numbered. Against each five words are suggested, one of which fits the blank appropriately. Find out the appropriate word in each case.

The government has launched a portal for better (11) _____ among the ministries of power, coal and Indian Railways for coal supply to power plants.

The Prakash portal – ‘Power Rail Koyla Availability through Supply Harmony’ – will enable all (12) _____ to monitor coal right from mines to transportation, power Secretary SC Garg said. This is a (13) _____ project in ensuring adequate availability optimum utilization of coal at thermal power plants, Coal

Secretary Anil Jain said.

The Portal is designed to help in (14) _____ and monitoring entire coal supply chain for power plants, viz - - coal stock at supply end (mines), coal quantities/ rakes planned, coal quantity in transit and coal availability at power generating station. The present (15) _____ to review coal supply situation consists of an inter-ministerial group which has officials from ministries of Power, Coal, Railways, CEA, power utilities and coal companies. This group holds weekly meetings to review coal supply situation as well as railway logistics.

• Question No. 13

Choose the most appropriate answer for (13).

Options :

1. viable
2. Feasible
3. Laudable
4. Audible
5. Perceptible

Answer : Laudable

Direction:

In the given passage, there are blanks, each of which has been numbered. Against each five words are suggested, one of which fits the blank appropriately. Find out the appropriate word in each case.

The government has launched a portal for better (11) _____ among the ministries of power, coal and Indian Railways for coal supply to power plants.

The Prakash portal – ‘Power Rail Koyla Availability through Supply Harmony’ – will enable all (12) _____ to monitor coal right from mines to transportation, power Secretary SC Garg said. This is a (13) _____ project in ensuring adequate availability optimum utilization of coal at thermal power plants, Coal Secretary Anil Jain said.

The Portal is designed to help in (14) _____ and monitoring entire coal supply chain for power plants, viz - - coal stock at supply end (mines), coal quantities/ rakes planned, coal quantity in transit and coal availability at power generating station. The present (15) _____ to review coal supply situation consists of an inter-ministerial group which has officials from ministries of Power, Coal, Railways, CEA, power utilities and coal

companies. This group holds weekly meetings to review coal supply situation as well as railway logistics.

• Question No. 14

Choose the most appropriate answer for (14).

Options :

1. zonking
2. Mapping
3. Zapping
4. Blazing
5. Quaking

Answer : Mapping

Direction:

In the given passage, there are blanks, each of which has been numbered. Against each five words are suggested, one of which fits the blank appropriately. Find out the appropriate word in each case.

The government has launched a portal for better (11) _____ among the ministries of power, coal and Indian Railways for coal supply to power plants.

The Prakash portal – ‘Power Rail Koyla Availability through Supply Harmony’ – will enable all (12) _____ to monitor coal right from mines to transportation, power Secretary SC Garg said. This is a (13) _____ project in ensuring adequate availability optimum utilization of coal at thermal power plants, Coal Secretary Anil Jain said.

The Portal is designed to help in (14) _____ and monitoring entire coal supply chain for power plants, viz - - coal stock at supply end (mines), coal quantities/ rakes planned, coal quantity in transit and coal availability at power generating station. The present (15) _____ to review coal supply situation consists of an inter-ministerial group which has officials from ministries of Power, Coal, Railways, CEA, power utilities and coal companies. This group holds weekly meetings to review coal supply situation as well as railway logistics.

• Question No. 15

Choose the most appropriate answer for (15).

Options :

1. Mechanism
2. Information
3. Auction
4. Parameter
5. Juking

Answer : Mechanism

Direction:

Read the following passage carefully and answer the questions given below it. Certain words/ Phrases have been printed in bold to help you locate them while answering some of the questions.

On August 3, 1492, Christopher Columbus set sail from Palos, Spain, with less than a hundred crew members to discover a new route to Asia. After spending a difficult time at sea, the party sighted land early on the morning of October 12, 1492. They set foot on an island in the Bahamas which they named Al Salvador. Columbus presumed that the indigenous people were Native Indians as he was under the mistaken belief that he had set foot on Indian soil. Probably some 10 million American Indians were natives to the land before the large-scale inhabitation by Europeans and subsequent **annihilation** of Native Americans started.

However, it took more than a hundred years after Columbus discovered America for the Europeans to finally take the momentous decision to make the New World their home.

The Native Americans actually welcomed the pale-skinned visitors primarily out of curiosity than anything else. They were fascinated by the steel knives and swords, fire spewing cannons, brass and copper utensils, etc. that these visitors brought with them. Eventually, cultural differences erupted. The natives could not stomach the arrogance of the newcomers and the scant respect they paid to nature. The European settlers viewed every resource — plants, animals, and people as something to be commercially exploited.

The native Indians were vastly outnumbered in the wars that ensued. The resistance they put up never proved enough to stop the European settlers. The nomadic lifestyle of the Indians, the relatively unsophisticated weapons at their disposal, the unwillingness of some of their own people to defend themselves, and the diseases of the white men — all contributed to the virtual elimination of their race. Some of the diseases brought by Europeans from their overcrowded cities that **decimated** the natives were: small pox, plague, measles, cholera, typhoid, and malaria. These deadly diseases, to which most natives had developed no resistance, devastated many tribes between 1775 and 1850.

America was named after an Italian navigator, Amerigo Vespucci, who explored the Northern parts of South America in 1499 and 1500 and later announced to the world about the discovery of a new continent.

• Question No. 16

Based on the information in the passage which of the following cannot be inferred?

- (A) Alien diseases wiped out a large proportion of certain Native American tribes
- (B) The early settlers totally eliminated the Native Americans
- (C) To the early settlers, even people were resources to be exploited commercially

Options :

1. Only (A)
2. Only (B)
3. Only (C)
4. Only (A) & (C)
5. None of these

Answer : Only (B)

Direction:

Read the following passage carefully and answer the questions given below it. Certain words/ Phrases have been printed in bold to help you locate them while answering some of the questions.

On August 3, 1492, Christopher Columbus set sail from Palos, Spain, with less than a hundred crew members to discover a new route to Asia. After spending a difficult time at sea, the party sighted land early on the morning of October 12, 1492. They set foot on an island in the Bahamas which they named Al Salvador. Columbus presumed that the indigenous people were Native Indians as he was under the mistaken belief that he had set foot on Indian soil. Probably some 10 million American Indians were natives to the land before the large-scale inhabitation by Europeans and subsequent **annihilation** of Native Americans started.

However, it took more than a hundred years after Columbus discovered America for the Europeans to finally take the momentous decision to make the New World their home.

The Native Americans actually welcomed the pale-skinned visitors primarily out of curiosity than anything else. They were fascinated by the steel knives and swords, fire spewing cannons, brass and copper utensils, etc. that

these visitors brought with them. Eventually, cultural differences erupted. The natives could not stomach the arrogance of the newcomers and the scant respect they paid to nature. The European settlers viewed every resource — plants, animals, and people as something to be commercially exploited.

The native Indians were vastly outnumbered in the wars that ensued. The resistance they put up never proved enough to stop the European settlers. The nomadic lifestyle of the Indians, the relatively unsophisticated weapons at their disposal, the unwillingness of some of their own people to defend themselves, and the diseases of the white men — all contributed to the virtual elimination of their race. Some of the diseases brought by Europeans from their overcrowded cities that **decimated** the natives were: small pox, plague, measles, cholera, typhoid, and malaria. These deadly diseases, to which most natives had developed no resistance, devastated many tribes between 1775 and 1850.

America was named after an Italian navigator, Amerigo Vespucci, who explored the Northern parts of South America in 1499 and 1500 and later announced to the world about the discovery of a new continent.

• Question No. 17

Which of the factor did not contribute to the elimination of the natives from their own land?

Options :

1. Diseases of the white men
2. unsophisticated weapons
3. unwillingness to defend themselves
4. love for the Nature
5. None of these

Answer : love for the Nature

Direction:

Read the following passage carefully and answer the questions given below it. Certain words/ Phrases have been printed in bold to help you locate them while answering some of the questions.

On August 3, 1492, Christopher Columbus set sail from Palos, Spain, with less than a hundred crew members to discover a new route to Asia. After spending a difficult time at sea, the party sighted land early on the morning of October 12, 1492. They set foot on an island in the Bahamas which they named Al Salvador. Columbus presumed that the indigenous people were Native Indians as he was under the mistaken belief that he had set foot on Indian

soil. Probably some 10 million American Indians were natives to the land before the large-scale inhabitation by Europeans and subsequent **annihilation** of Native Americans started.

However, it took more than a hundred years after Columbus discovered America for the Europeans to finally take the momentous decision to make the New World their home.

The Native Americans actually welcomed the pale-skinned visitors primarily out of curiosity than anything else. They were fascinated by the steel knives and swords, fire spewing cannons, brass and copper utensils, etc. that these visitors brought with them. Eventually, cultural differences erupted. The natives could not stomach the arrogance of the newcomers and the scant respect they paid to nature. The European settlers viewed every resource — plants, animals, and people as something to be commercially exploited.

The native Indians were vastly outnumbered in the wars that ensued. The resistance they put up never proved enough to stop the European settlers. The nomadic lifestyle of the Indians, the relatively unsophisticated weapons at their disposal, the unwillingness of some of their own people to defend themselves, and the diseases of the white men — all contributed to the virtual elimination of their race. Some of the diseases brought by Europeans from their overcrowded cities that **decimated** the natives were: small pox, plague, measles, cholera, typhoid, and malaria. These deadly diseases, to which most natives had developed no resistance, devastated many tribes between 1775 and 1850.

America was named after an Italian navigator, Amerigo Vespucci, who explored the Northern parts of South America in 1499 and 1500 and later announced to the world about the discovery of a new continent.

- Question No. 18

In comparison to the Europeans, Native Americans were

Options :

1. A very unhealthy lot
2. Careless about their environment
3. Afraid of outsiders
4. More respectful of nature
5. None of these

Answer : More respectful of nature

Direction:

Read the following passage carefully and answer the questions given below it. Certain words/ Phrases have been printed in bold to help you locate them while answering some of the questions.

On August 3, 1492, Christopher Columbus set sail from Palos, Spain, with less than a hundred crew members to discover a new route to Asia. After spending a difficult time at sea, the party sighted land early on the morning of October 12, 1492. They set foot on an island in the Bahamas which they named Al Salvador. Columbus presumed that the indigenous people were Native Indians as he was under the mistaken belief that he had set foot on Indian soil. Probably some 10 million American Indians were natives to the land before the large-scale inhabitation by Europeans and subsequent **annihilation** of Native Americans started.

However, it took more than a hundred years after Columbus discovered America for the Europeans to finally take the momentous decision to make the New World their home.

The Native Americans actually welcomed the pale-skinned visitors primarily out of curiosity than anything else. They were fascinated by the steel knives and swords, fire spewing cannons, brass and copper utensils, etc. that these visitors brought with them. Eventually, cultural differences erupted. The natives could not stomach the arrogance of the newcomers and the scant respect they paid to nature. The European settlers viewed every resource — plants, animals, and people as something to be commercially exploited.

The native Indians were vastly outnumbered in the wars that ensued. The resistance they put up never proved enough to stop the European settlers. The nomadic lifestyle of the Indians, the relatively unsophisticated weapons at their disposal, the unwillingness of some of their own people to defend themselves, and the diseases of the white men — all contributed to the virtual elimination of their race. Some of the diseases brought by Europeans from their overcrowded cities that **decimated** the natives were: small pox, plague, measles, cholera, typhoid, and malaria. These deadly diseases, to which most natives had developed no resistance, devastated many tribes between 1775 and 1850.

America was named after an Italian navigator, Amerigo Vespucci, who explored the Northern parts of South America in 1499 and 1500 and later announced to the world about the discovery of a new continent.

- Question No. 19

What was the purpose of Columbus' voyage?

Options :

1. to find a new route to Asia
2. to find a new route to America
3. to colonize Al Savador
4. to eliminate the Native Indians
5. None of these

Answer : to find a new route to Asia

Direction:

Read the following passage carefully and answer the questions given below it. Certain words/ Phrases have been printed in bold to help you locate them while answering some of the questions.

On August 3, 1492, Christopher Columbus set sail from Palos, Spain, with less than a hundred crew members to discover a new route to Asia. After spending a difficult time at sea, the party sighted land early on the morning of October 12, 1492. They set foot on an island in the Bahamas which they named Al Salvador. Columbus presumed that the indigenous people were Native Indians as he was under the mistaken belief that he had set foot on Indian soil. Probably some 10 million American Indians were natives to the land before the large-scale inhabitation by Europeans and subsequent **annihilation** of Native Americans started.

However, it took more than a hundred years after Columbus discovered America for the Europeans to finally take the momentous decision to make the New World their home.

The Native Americans actually welcomed the pale-skinned visitors primarily out of curiosity than anything else. They were fascinated by the steel knives and swords, fire spewing cannons, brass and copper utensils, etc. that these visitors brought with them. Eventually, cultural differences erupted. The natives could not stomach the arrogance of the newcomers and the scant respect they paid to nature. The European settlers viewed every resource — plants, animals, and people as something to be commercially exploited.

The native Indians were vastly outnumbered in the wars that ensued. The resistance they put up never proved enough to stop the European settlers. The nomadic lifestyle of the Indians, the relatively unsophisticated weapons at their disposal, the unwillingness of some of their own people to defend themselves, and the diseases of the white men — all contributed to the virtual elimination of their race. Some of the diseases brought by Europeans from their overcrowded cities that **decimated** the natives were: small pox, plague, measles, cholera, typhoid, and malaria. These deadly diseases, to which most natives had developed no resistance, devastated many tribes between 1775 and 1850.

America was named after an Italian navigator, Amerigo Vespucci, who explored the Northern parts of South America in 1499 and 1500 and later announced to the world about the discovery of a new continent.

• Question No. 20

As per this article, which of the following is the basic purpose of the passage?

Options :

1. Explain how the Europeans eliminated the Native Americans in their own land
2. Provide a snapshot of the discovery of America and the early years of settlements.
3. Discuss how the process of colonization of America started.
4. Only (B) & (C)
5. Only (A) & (C)

Answer : Provide a snapshot of the discovery of America and the early years of settlements.

Direction:

Answer the questions based on the information given below.

Eight persons viz. M, N, O, P, Q, R, S and T are sitting in a straight line such that all of them are facing towards the north, but not necessarily in the same order. The consecutive alphabetically named person doesn't sit adjacent to each other.

O sits at one of the ends and only two persons sit between O and Q. R sits three persons away from Q. P sits to the immediate right of R. Only two persons sit between P and M as well as S and T who doesn't sit at the ends. The number of persons between N and S is more than the number of persons between N and T.

• Question No. 21

Who among the following person sits at the left end?

Options :

1. O
2. S
3. T

- 4. N
- 5. None of these

Answer : N

Direction:

Answer the questions based on the information given below.

Eight persons viz. M, N, O, P, Q, R, S and T are sitting in a straight line such that all of them are facing towards the north, but not necessarily in the same order. The consecutive alphabetically named person doesn't sit adjacent to each other.

O sits at one of the ends and only two persons sit between O and Q. R sits three persons away from Q. P sits to the immediate right of R. Only two persons sit between P and M as well as S and T who doesn't sit at the ends. The number of persons between N and S is more than the number of persons between N and T.

- Question No. 22

How many persons sit between R and S?

Options :

- 1. None
- 2. One
- 3. Two
- 4. Three
- 5. More than three

Answer : More than three

Direction:

Answer the questions based on the information given below.

Eight persons viz. M, N, O, P, Q, R, S and T are sitting in a straight line such that all of them are facing towards the north, but not necessarily in the same order. The consecutive alphabetically named person doesn't sit adjacent to each other.

O sits at one of the ends and only two persons sit between O and Q. R sits three persons away from Q. P sits to the immediate right of R. Only two persons sit between P and M as well as S and T who doesn't sit at the ends. The

number of persons between N and S is more than the number of persons between N and T.

• Question No. 23

What is the position of P with respect to Q?

Options :

1. Second to the left
2. Immediate left
3. Fourth to the right
4. Second to the right
5. None of these

Answer : Second to the left

Direction:

Answer the questions based on the information given below.

Eight persons viz. M, N, O, P, Q, R, S and T are sitting in a straight line such that all of them are facing towards the north, but not necessarily in the same order. The consecutive alphabetically named person doesn't sit adjacent to each other.

O sits at one of the ends and only two persons sit between O and Q. R sits three persons away from Q. P sits to the immediate right of R. Only two persons sit between P and M as well as S and T who doesn't sit at the ends. The number of persons between N and S is more than the number of persons between N and T.

• Question No. 24

The number of persons to the left of R is one more than the number of persons to the right of ____.

Options :

1. S
2. O
3. M
4. P

5. None of these

Answer : O

Direction:

Answer the questions based on the information given below.

Eight persons viz. M, N, O, P, Q, R, S and T are sitting in a straight line such that all of them are facing towards the north, but not necessarily in the same order. The consecutive alphabetically named person doesn't sit adjacent to each other.

O sits at one of the ends and only two persons sit between O and Q. R sits three persons away from Q. P sits to the immediate right of R. Only two persons sit between P and M as well as S and T who doesn't sit at the ends. The number of persons between N and S is more than the number of persons between N and T.

- Question No. 25

Who among the following person sits third to the right of T?

Options :

1. O
2. N
3. S
4. M
5. No such person

Answer : S

- Question No. 26

Eight persons S, T, U, V, W, X, Y, and Z are sitting around a circular table facing the centre. W is not the neighbour of V or X. T is second to the left of Z and third to the right of V. X is third to the left of U, who is to the immediate left of Z. S is second to the right of V. Which of the following is definitely true?

Options :

1. W is to the immediate right of Y.

2. T is between U and W
3. X is to the immediate right of V
4. X is between V and Y.
5. None of these

Answer : X is to the immediate right of V

• Question No. 27

Relationship between different elements is shown in the statements. Find if the conclusions also follow or not.

Statements: $J \geq Q = W \geq D M$

Conclusions:

I. M

II. $J \geq M$

Options :

1. Only I follows
2. Only II follows
3. Either I or II follows
4. Neither I nor II follow
5. Both I and II follow

Answer : Only I follows

• Question No. 28

Point L is 15 m north of point M. Point P is 5 m south of point Q. Point P is 8 m east of point O which is 11 m south of point N. Point R is 20 m north of point S. Point N is 16 m west of point M. Point R is 22 m east of point Q. What is the shortest distance between point M and point Q?

Options :

1. 10 m

- 2. 15 m
- 3. 12 m
- 4. 14 m
- 5. None of these

Answer : 10 m

Direction:

In each of the questions below are given three statements followed by some Conclusions. You have to take the given statements to be true even if they seem to be at variance from commonly known facts. Read all the Conclusions and then decide which of the given Conclusions logically follows from the given statements disregarding commonly known facts.

- Question No. 29

Statements:

Only a few oranges are apples.

Some apples are bananas.

All pears are bananas.

Conclusions:

I. No pear is an orange.

II. All bananas being oranges is a possibility.

III. All oranges being apples is possibility.

Options :

- 1. Only I follows
- 2. Only II follows
- 3. Only I and III follow
- 4. Only III follows
- 5. None follows

Answer : Only II follows

Direction:

In each of the questions below are given three statements followed by some Conclusions. You have to take the given statements to be true even if they seem to be at variance from commonly known facts. Read all the Conclusions and then decide which of the given Conclusions logically follows from the given statements disregarding commonly known facts.

- Question No. 30

Statements:

No paper is a kite.

Some kites are sticks.

Only a few papers are gums.

Conclusions:

I. Some gums are not sticks.

II. Some papers are sticks.

III. All gums are sticks.

Options :

1. Only I follows
2. Only II and III follow
3. Either I or III follow
4. Only II follow
5. None of these

Answer : Either I or III follow

Direction:

Each of the questions below consists of a question and two statements numbered I and II given below it. You have to decide whether the data provided in the statements are sufficient to answer the question. Read the question and both the statements and give answer

- Question No. 31

Seven persons are sitting in a line facing north. Who is sitting second to left of U?

I. X is sitting immediate left of R. Two persons are sitting between R and S. Two persons are sitting between V and U. U and W are immediate neighbors. V is somewhere left of S.

II. R is sitting second to left of T. W is third to right of T. R is exactly between X and V such that one of them is at extreme end. S and T are immediate neighbors.

Options :

1. If the data in statement I alone are sufficient to answer the question, while the data in statement II alone are not sufficient to answer the question.
2. If the data in statement II alone are sufficient to answer the question, while the data in statement I alone are not sufficient to answer the question.
3. If the data either in statement I alone or in statement II alone are sufficient to answer the question.
4. If the data in both statement I and II together are not sufficient to answer the question.
5. If the data in both statements I and II together are necessary to answer the question.

Answer : If the data in statement II alone are sufficient to answer the question, while the data in statement I alone are not sufficient to answer the question.

Direction:

Each of the questions below consists of a question and two statements numbered I and II given below it. You have to decide whether the data provided in the statements are sufficient to answer the question. Read the question and both the statements and give answer

• Question No. 32

Seven persons J, K, L, M, A, B and C are staying on seven floors building. Lowermost floor is numbered 1 and top floor is numbered 7. Who among the following lives on the top floor? I. J lives two floors above L. Two floors are between J and K. K is not at the top or bottom floor. II. K lives three floors above J but not the top floor. M lives two floors above B who is not at the bottom floor.

Options :

1. If the data in statement I alone are sufficient to answer the question, while the data in statement II alone are not sufficient to answer the question.

2. If the data in statement II alone are sufficient to answer the question, while the data in statement I alone are not sufficient to answer the question.
3. If the data either in statement I alone or in statement II alone are sufficient to answer the question.
4. If the data in both statement I and II together are not sufficient to answer the question.
5. If the data in both statements I and II together are necessary to answer the question.

Answer : If the data in both statement I and II together are not sufficient to answer the question.

Direction:

Each of the questions below consists of a question and two statements numbered I and II given below it. You have to decide whether the data provided in the statements are sufficient to answer the question. Read the question and both the statements and give answer

- Question No. 33

How is O related to N?

I. M is married to P. O is the sister of M. P has only one daughter R. R is the granddaughter of N.

II. M is the daughter of N. M is married to P. P is the only child of S. O is the sister-in-law of P.

Options :

1. If the data in statement I alone are sufficient to answer the question, while the data in statement II alone are not sufficient to answer the question.
2. If the data in statement II alone are sufficient to answer the question, while the data in statement I alone are not sufficient to answer the question.
3. If the data either in statement I alone or in statement II alone are sufficient to answer the question.
4. If the data in both statement I and II together are not sufficient to answer the question.
5. If the data in both statements I and II together are necessary to answer the question.

Answer : If the data in statement II alone are sufficient to answer the question, while the data in statement I alone are not sufficient to answer the question.

Direction:

Each of the questions below consists of a question and two statements numbered I and II given below it. You have to decide whether the data provided in the statements are sufficient to answer the question. Read the question and both the statements and give answer

• Question No. 34

Among people D, E, F, G, H and I, each having a different weight, who is the second highest?

I. F is heavier than only two people. D is heavier than I but lighter than E. G is not the highest.

II. I is lighter than only two people. F is lighter than I but heavier than G. D is lighter than only E.

Options :

1. If the data in statement I alone are sufficient to answer the question, while the data in statement II alone are not sufficient to answer the question.
2. If the data in statement II alone are sufficient to answer the question, while the data in statement I alone are not sufficient to answer the question.
3. If the data either in statement I alone or in statement II alone are sufficient to answer the question.
4. If the data in both statement I and II together are not sufficient to answer the question.
5. If the data in both statements I and II together are necessary to answer the question.

Answer : If the data in statement II alone are sufficient to answer the question, while the data in statement I alone are not sufficient to answer the question.

Direction:

Each of the questions below consists of a question and two statements numbered I and II given below it. You have to decide whether the data provided in the statements are sufficient to answer the question. Read the question and both the statements and give answer

• Question No. 35

What is code for 'Wealth' in the code language?

I. 'qw cs ub' means 'Health is wealth'.

II. 'cs bd xa rn' means 'Mental is includes followed'.

Options :

1. If the data in statement I alone are sufficient to answer the question, while the data in statement II alone are not sufficient to answer the question.

2. If the data in statement II alone are sufficient to answer the question, while the data in statement I alone are not sufficient to answer the question.
3. If the data either in statement I alone or in statement II alone are sufficient to answer the question.
4. If the data in both statement I and II together are not sufficient to answer the question.
5. If the data in both statements I and II together are necessary to answer the question.

Answer : If the data in both statement I and II together are not sufficient to answer the question.

Direction:

Study the following information carefully and answer the questions given below:

Seven friends G, H, I, J, K, L and M likes different fruits Apple, Orange, Grapes, Mango, Banana, Pear and Papaya but not necessarily in the same order. Each of them lives in different floors of a seven storeyed building. The bottommost floor is number one and the one above is number two and so on.

Three person live between the one who likes Mango and the one who likes Pear. One person lives between the one who likes Apple and J. J neither likes Banana nor lives in second floor. One person lives between the one who likes Apple and the one who likes Orange. Three person lives between H and M, who lives above H. The one who likes Orange lives immediately below M. J lives the floor immediately above the one who likes Pear. I lives immediately above the one who likes Papaya. One person lives between the one who likes Banana and I. K lives immediately below L. L does not like Pear and K does not like Apple.

- Question No. 36

How many floors are there between J and the one who likes Apple?

Options :

1. One
2. Two
3. Three
4. None
5. More than three

Answer : One

Direction:

Study the following information carefully and answer the questions given below:

Seven friends G, H, I, J, K, L and M likes different fruits Apple, Orange, Grapes, Mango, Banana, Pear and Papaya but not necessarily in the same order. Each of them lives in different floors of a seven storeyed building. The bottommost floor is number one and the one above is number two and so on.

Three person live between the one who likes Mango and the one who likes Pear. One person lives between the one who likes Apple and J. J neither likes Banana nor lives in second floor. One person lives between the one who likes Apple and the one who likes Orange. Three person lives between H and M, who lives above H. The one who likes Orange lives immediately below M. J lives the floor immediately above the one who likes Pear. I lives immediately above the one who likes Papaya. One person lives between the one who likes Banana and I. K lives immediately below L. L does not like Pear and K does not like Apple.

- Question No. 37

Which of the following combination is true?

Options :

1. M likes Orange
2. K likes Mango
3. I likes Pear
4. L likes Papaya
5. None is true

Answer : K likes Mango

Direction:

Study the following information carefully and answer the questions given below:

Seven friends G, H, I, J, K, L and M likes different fruits Apple, Orange, Grapes, Mango, Banana, Pear and Papaya but not necessarily in the same order. Each of them lives in different floors of a seven storeyed building. The bottommost floor is number one and the one above is number two and so on.

Three person live between the one who likes Mango and the one who likes Pear. One person lives between the one who likes Apple and J. J neither likes Banana nor lives in second floor. One person lives between the one who likes Apple and the one who likes Orange. Three person lives between H and M, who lives above H. The one who likes Orange lives immediately below M. J lives the floor immediately above the one who likes Pear. I lives immediately above the one who likes Papaya. One person lives between the one who likes Banana and I. K lives immediately

below L. L does not like Pear and K does not like Apple.

- Question No. 38

Which of the following does not belong to the group?

Options :

1. K
2. M
3. H
4. G
5. I

Answer : I

Direction:

Study the following information carefully and answer the questions given below:

Seven friends G, H, I, J, K, L and M likes different fruits Apple, Orange, Grapes, Mango, Banana, Pear and Papaya but not necessarily in the same order. Each of them lives in different floors of a seven storeyed building. The bottommost floor is number one and the one above is number two and so on.

Three person live between the one who likes Mango and the one who likes Pear. One person lives between the one who likes Apple and J. J neither likes Banana nor lives in second floor. One person lives between the one who likes Apple and the one who likes Orange. Three person lives between H and M, who lives above H. The one who likes Orange lives immediately below M. J lives the floor immediately above the one who likes Pear. I lives immediately above the one who likes Papaya. One person lives between the one who likes Banana and I. K lives immediately below L. L does not like Pear and K does not like Apple.

- Question No. 39

The one who likes Grapes lives on which floor?

Options :

1. Fifth

2. Sixth
3. Seventh
4. Third
5. Second

Answer : Seventh

Direction:

Study the following information carefully and answer the questions given below:

Seven friends G, H, I, J, K, L and M likes different fruits Apple, Orange, Grapes, Mango, Banana, Pear and Papaya but not necessarily in the same order. Each of them lives in different floors of a seven storeyed building. The bottommost floor is number one and the one above is number two and so on.

Three person live between the one who likes Mango and the one who likes Pear. One person lives between the one who likes Apple and J. J neither likes Banana nor lives in second floor. One person lives between the one who likes Apple and the one who likes Orange. Three person lives between H and M, who lives above H. The one who likes Orange lives immediately below M. J lives the floor immediately above the one who likes Pear. I lives immediately above the one who likes Papaya. One person lives between the one who likes Banana and I. K lives immediately below L. L does not like Pear and K does not like Apple.

- Question No. 40

If M is related to Apple and J is related to Papaya then I is related to?

Options :

1. Papaya
2. Banana
3. Grapes
4. Mango
5. Orange

Answer : Mango

- Question No. 41

_____ village of Gujarat state will become the first of its kind to be the fully solar powered village of the country.

Options :

1. Amreli
2. Dhari
3. Bagasara
4. Dhandhuka
5. Modhera

Answer : Modhera

- Question No. 42

Recently, which country has become the first country to deploy UPI (Unified Payment Interface) recently?

Options :

1. Bangladesh
2. Thailand
3. Nepal
4. China
5. None of these

Answer : Nepal

- Question No. 43

Consider the following statement about SEBI's market data advisory committee-:

- I. Identification of Segment-wise Data Perimeters, Data Needs and Data Gaps.
- II. The market data advisory committee will now have 20 members chaired by Vikram Limaye.
- III. It works with Industry Associations to facilitate smooth implementation of policies and regulations.

Which of the above statement is/are not correct?

Options :

1. I only
2. II only
3. III only
4. I and II only
5. II and III only

Answer : II only

• Question No. 44

Out of the 500 GW renewables target, 280 GW is set for solar power it has been set to be completed by the year?

Options :

1. 2029
2. 2030
3. 2028
4. 2032
5. None of these

Answer : 2030

• Question No. 45

The Reserve Bank of India (RBI) has raised the minimum net owned fund (NOF) requirement of the existing Asset Reconstruction Company (ARC) to Rs _____ from the present Rs 100 crore by March 2026.

Options :

1. 400 crore
2. 500 crore
3. 300 crore
4. 200 crore
5. No change

Answer : 300 crore

- Question No. 46

Bandhan bank has roped _____ as its brand ambassador for the bank's product and service endorsement.

Options :

1. MS Dhoni
2. Saurav Ganguly
3. Rohit Sharma
4. Ranveer Singh
5. Amitab Bachchan

Answer : Saurav Ganguly

- Question No. 47

Recently which commercial vehicle manufacturer joined hand with National Centre for Combustion Research and Development (NCCRD) for development and commercialisation of developing hybrid electrical vehicles using turbine technology?

Options :

1. TATA
2. Toyota
3. Ashok Layland
4. Honda
5. Hyundai

Answer : Ashok Layland

- Question No. 48

Recently SEBI has barred 10 entities from the securities markets for up to how many years for being involved in a fraudulent scheme of misrepresenting the company's financial statements?

Options :

1. 1 year
2. 2 years
3. 3 years
4. 4 years
5. 5 years

Answer : 2 years

• Question No. 49

The wholesale price index - (WPI -) based inflation rate for September decelerated to an 18 - month low of ----- .

Options :

1. 9.7 percent
2. 10.7 percent
3. 8.9 percent
4. 7.6 percent
5. None of these

Answer : 10.7 percent

• Question No. 50

Where is the headquarters of Air Force Functional located in India?

Options :

1. Karnataka
2. Kerala
3. New Delhi
4. Maharashtra
5. None of these

Answer : New Delhi

- Question No. 51

Who is the author of the book "The Glass Palace"?

Options :

1. Amitav Ghosh
2. Shashi Tharoor
3. Geeta Manjunath
4. Arvind Adiga
5. None of these

Answer : Amitav Ghosh

- Question No. 52

_____ cricket player has been selected as the best batter by Espn cric Info test batter for the year 2022?

Options :

1. Virat Kohli
2. Rohit Sharma
3. Rishabh Pant
4. Ishan Sharma
5. Dinesh Kartik

Answer : Rishabh Pant

- Question No. 53

For installation of electric vehicle charging, which state/UT government has signed with Convergence Energy Services Limited(CESL) ?

Options :

1. Chandigarh
2. Punjab
3. Ladakh
4. Jammu and Kashmir
5. Gujarat

Answer : Ladakh

• Question No. 54

'Maa Bharati Ke Sapoot' a website launched by which of the following ministers for contribution to Armed Forces Battle Casualties Welfare Fund?

Options :

1. Shri Amit Shah
2. Shri Narendra Modi
3. Rajnath Singh
4. YogiAditya Nath
5. None of these

Answer : Rajnath Singh

• Question No. 55

As per the Living Planet Report 2022 published by the World Wildlife Fund there has been a _____% decline in the wildlife population over 50 years.

Options :

1. 25%
2. 29%
3. 34%
4. 69%
5. 57%

Answer : 69%

- Question No. 56

Which organization has allowed India registered Alternative Investment Funds (AIFs) to invest in foreign entities without having any link with India?

Options :

1. SEBI
2. Reserve Bank of India
3. NABARD
4. State Bank of India
5. None of these

Answer : SEBI

- Question No. 57

With reference to the wholesale price index (WPI), consider the following statements:

1. WPI is an important index necessary for calculating inflation in a country.
2. Ministry of Finance is responsible for compiling WPI and releasing it.
3. WPI focuses on the price of goods that are traded between corporations.

Which of the statements given above is/are correct?

Options :

1. 1 and 2
2. 1 and 3
3. 2 and 3
4. All of these
5. None of these

Answer : All of these

- Question No. 58

India comes at which place recently in the global hunger index?

Options :

1. 103
2. 106
3. 107
4. 92
5. 111

Answer : 107

- Question No. 59

Which of the following banks has sought disinvestment of Rs 64,000 crore by the government through sale of Gol's and Life Insurance Corporation of India's ("LIC") ?

Options :

1. ICICI Bank
2. IDBI Bank
3. HDFC Bank
4. Yes Bank
5. None of these

Answer : IDBI Bank

- Question No. 60

INS Tarkash will participate in the seventh edition of IBSAMAR, a joint multinational maritime exercise, IBSAMAR participating countries include?

Options :

1. Italy, Bangladesh and South Africa
2. India, Brazil and South Africa
3. Israel, Brazil and SriLanka

- 4. India, Bangladesh and South Africa
- 5. None of these

Answer : India, Brazil and South Africa

Direction:

What should come in place of question mark (?) in the following number series?

- Question No. 61

35, 36, 40, 49, 65, ?

Options :

- 1. 95
- 2. 90
- 3. 87
- 4. 80
- 5. None of these

Answer : 90

Direction:

What should come in place of the question mark (?) in the following number series?

- Question No. 62

84, 61, 80, 57, 76, ?

Options :

- 1. 65
- 2. 24
- 3. 53
- 4. 82
- 5. 91

Answer : 53

Direction:

What should come in place of the question mark (?) in the following number series?

- Question No. 63

15 12 ? 9 21 6

Options :

1. 18
2. 15
3. 17
4. 19
5. 12

Answer : 18

Direction:

What should come in place of the question mark (?) in the following number series?

- Question No. 64

17, 9, 10, 16.5, ?

Options :

1. 38
2. 35
3. 40
4. 30
- 5.

Answer : 35

Direction:

What should come in place of the question mark (?) in the following number series?

- Question No. 65

23, 24, 32, 59, 123, ?

Options :

1. 248
2. 261
3. 207
4. 230
5. None of these

Answer : 248

• Question No. 66

Monthly income of P is Rs.14000 and his monthly savings is Rs.8500. If his monthly income is decreased by 30% and monthly expenditure is decreased by 25% then find the approximate percentage decrease in his monthly savings.

Options :

1. 21%
2. 47%
3. 33%
4. 65%
5. 40%

Answer : 33%

• Question No. 67

Ratio of MP and SP of an article is 8:5 and the article is sold at 25% profit. Find cost price of article, if the selling price is 200 more than its CP?

Options :

1. Rs.480
2. Rs.500
3. Rs.750
4. Rs.800

5. None of these

Answer : Rs.800

• Question No. 68

In a business, A invested Rs. 1600 more than that by B. After 7 months, A left the business. If at the end of the year, profit earned by B is equal to the profit earned by A, then find the amount invested by A in the business.

Options :

1. Rs.4800
2. Rs.3360
3. Rs.5400
4. Rs.3840
5. None of these

Answer : Rs.3840

• Question No. 69

The average number of books sold by Viren in first 4 months is 3600 and in first 5 months is 4200. If the number of books sold by him in 6th month is 35% less than that in 5th month, then find the total number of books sold in the sixth month.

Options :

1. 6660
2. 4290
3. 6960
4. 5590
5. 5460

Answer : 4290

• Question No. 70

A certain sum of money invested at $R\%$ p.a. fetches a compound interest (compounded annually) of 2800 and simple interest of Rs.2500 at the end of 2 years. Find the value of 'R'.

Options :

1. 8%
2. 14%
3. 24%
4. 12%
5. None of these

Answer : 24%

- Question No. 71

Ajay and Vishal left the place 'X' with different speeds which are in the ratio 7:6 respectively. Ajay left the place 36 seconds after Vishal. If after 72 seconds of the departure of Vishal, Ajay is 100 meters apart from Vishal, then find the speed of Vishal.

Options :

1. 16 km/hr
2. 12 km/hr
3. 15 km/hr
4. 20 km/hr
5. 18 km/hr

Answer : 12 km/hr

- Question No. 72

Train X running at a speed of 35 km/hr crosses train Y in 18 seconds. Find the speed of train Y (in km/hr), if the sum of the length of train X and Y is 550 meters and both trains running in the opposite direction.

Options :

1. 60 km/hr

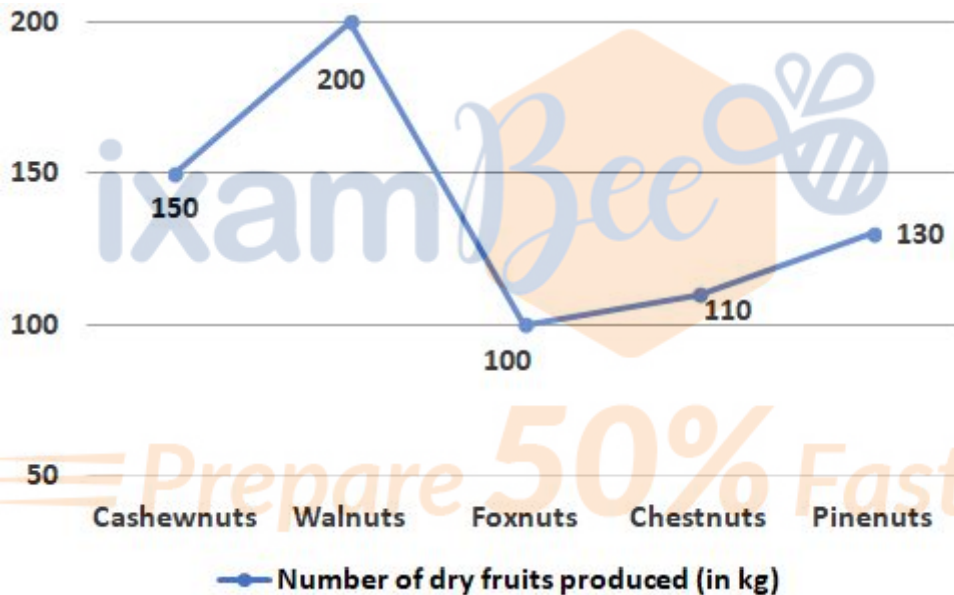
- 2. 85 km/hr
- 3. 75 km/hr
- 4. 65 km/hr
- 5. 80 km/hr

Answer : 75 km/hr

Direction:

Answer the questions based on the information given below.

The given line graph shows the number of dry fruits produced (in kg) i.e. Cashewnuts, Walnuts, Foxnuts, Chestnuts and Pinenuts in a district.



- Question No. 73

If there is another dry fruit produced that is Peanuts which is produced 50% more than Cashewnuts and Pinenuts, then find the total number of Peanuts produced by the district.

Options :

- 1. 320 kg
- 2. 360 kg
- 3. 420 kg
- 4. 480 kg

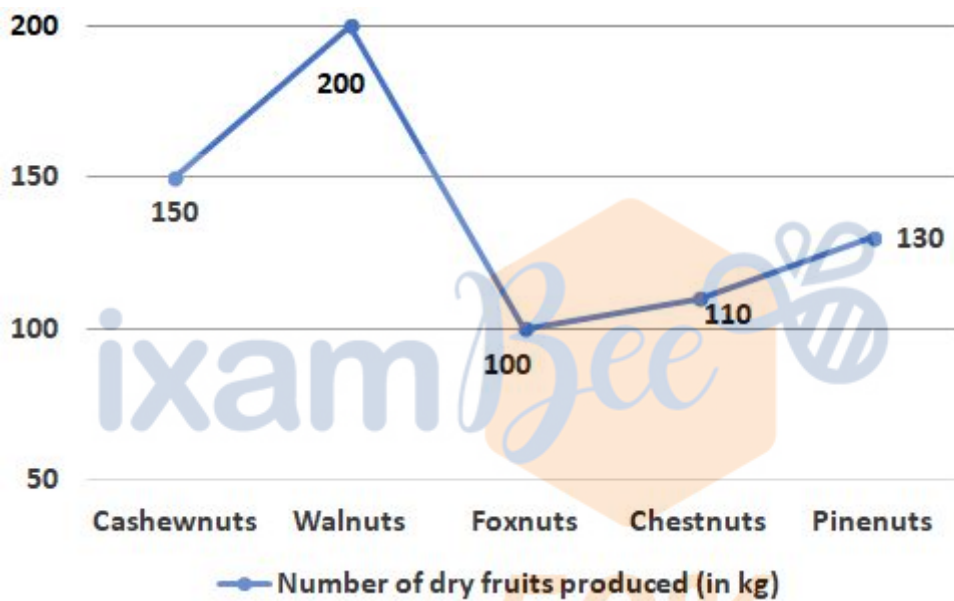
5. None of these

Answer : 420 kg

Direction:

Answer the questions based on the information given below.

The given line graph shows the number of dry fruits produced (in kg) i.e. Cashewnuts, Walnuts, Foxnuts, Chestnuts and Pinenuts in a district.



• Question No. 74

Total number of Walnuts produced is how much percent of total number of Foxnuts and Cashewnuts produced by the district?

Options :

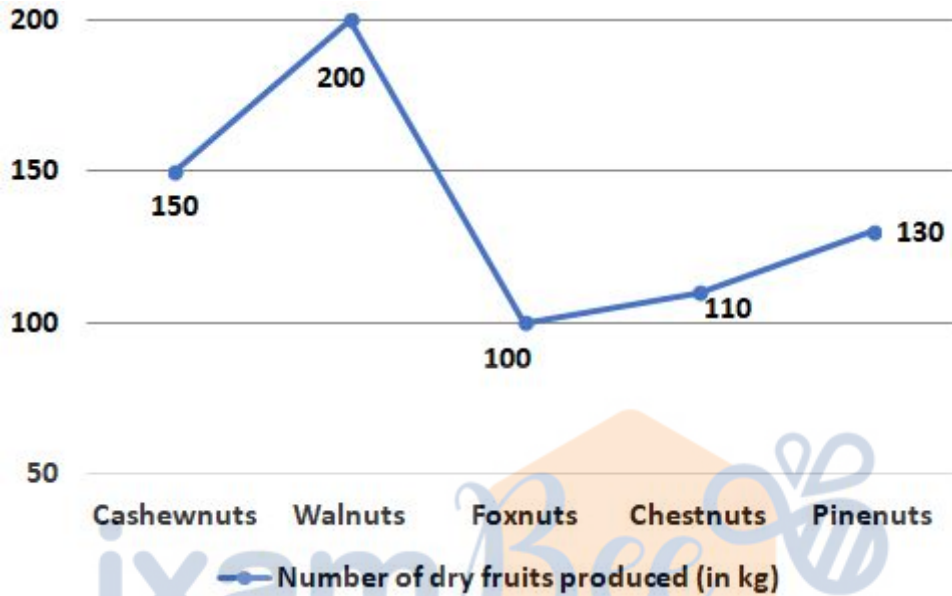
1. 40%
2. 50%
3. 60%
4. 80%
5. None of these

Answer : 80%

Direction:

Answer the questions based on the information given below.

The given line graph shows the number of dry fruits produced (in kg) i.e. Cashewnuts, Walnuts, Foxnuts, Chestnuts and Pinenuts in a district.



- Question No. 75

Total number of Walnuts and Foxnuts produced together is how much percent more/less than that of Cashewnuts produced by the district?

Options :

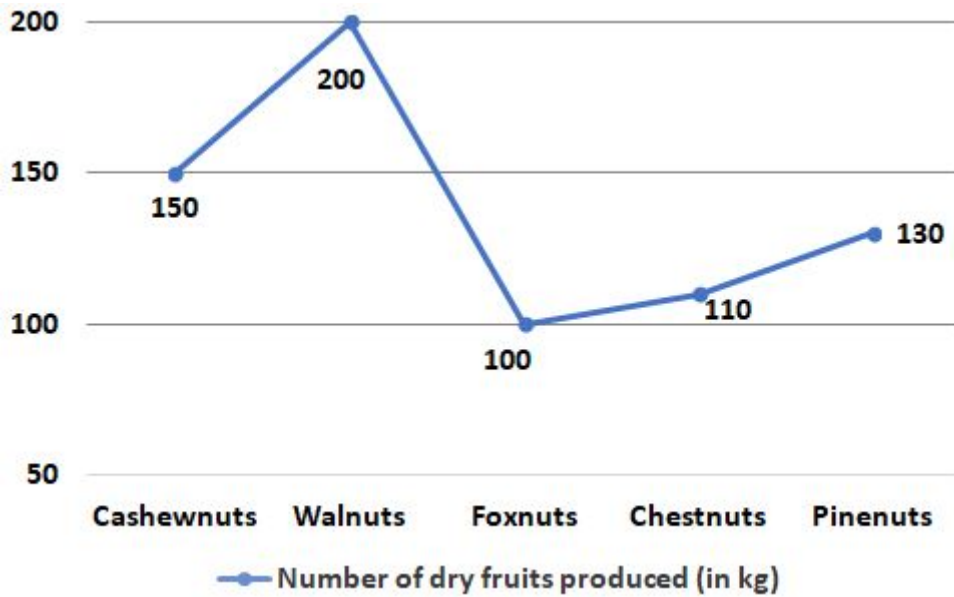
1. 150%
2. 50%
3. 75%
4. 125%
5. 100%

Answer : 100%

Direction:

Answer the questions based on the information given below.

The given line graph shows the number of dry fruits produced (in kg) i.e. Cashewnuts, Walnuts, Foxnuts, Chestnuts and Pinenuts in a district.



• Question No. 76

If the ratio of number of dry fruits produced is of good quality and bad quality, respectively of Walnuts and Cashewnuts is 3:5 and 7:8, respectively then find the total number of good quality dry fruits produced of Walnuts and Cashewnuts together?

Options :

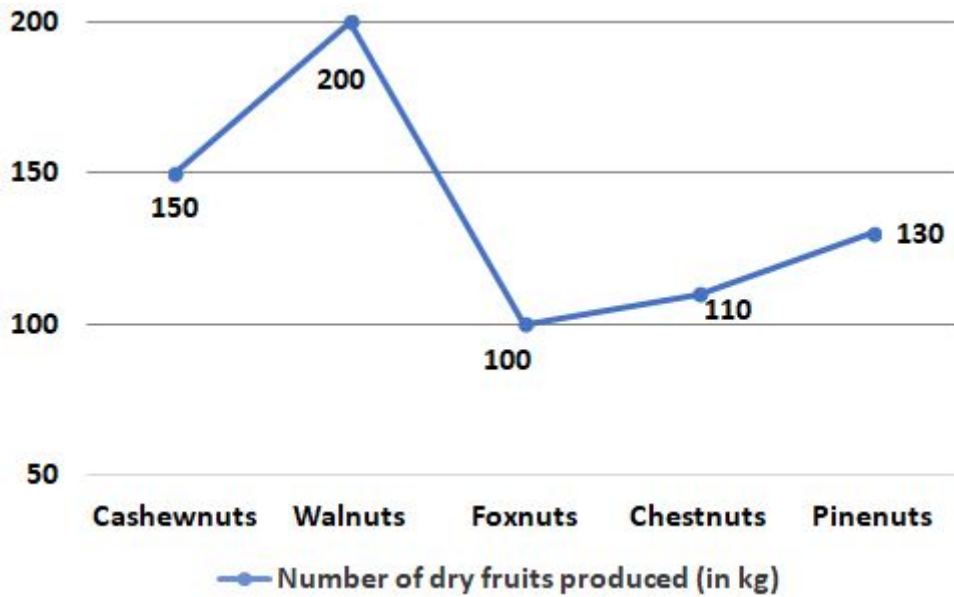
1. 125 kg
2. 155 kg
3. 135 kg
4. 145 kg
5. None of these

Answer : 145 kg

Direction:

Answer the questions based on the information given below.

The given line graph shows the number of dry fruits produced (in kg) i.e. Cashewnuts, Walnuts, Foxnuts, Chestnuts and Pinenuts in a district.



- Question No. 77

What is the ratio of the sum of number Foxnuts and Chestnuts produced to the sum of number of Cashewnuts and Walnuts produced by the district?

Options :

1. 1:3
2. 3:5
3. 2:5
4. 5:7
5. None of these

Answer : 3:5

- Question No. 78

In a classroom there are 13 boys and 11 girls. Average age of each boy and each girl is 23 years and 17 years respectively. The sum of ages of all the boys, girls and a teacher whose age is 'x' years is 540 years. Find the value of 'x'.

Options :

1. 41
2. 54
3. 50
4. 56
5. 40

Answer : 54

• Question No. 79

Average of four numbers is 28. Sum of smallest and largest number is 57. If difference between other two numbers is 1, then find the square of second smaller number.

Options :

1. 484
2. 196
3. 225
4. 441
5. 729

Answer : 729

• Question No. 80

Akhil and Nikhil together can complete a work in 5 days while Nikhil alone takes 10 days to complete 40% of the work. If the efficiency of Sachin is 25% more than that of Akhil, then find the time taken by Sachin alone to complete the whole work.

Options :

1. 9 days
2. 6 days
3. 7 days
4. 5 days
5. None of these

Answer : 5 days

[Attempt Mock Test Now](#)

All ixamBee Mock Test are FREE @ www.ixamBee.com



Prepare **50%** Faster